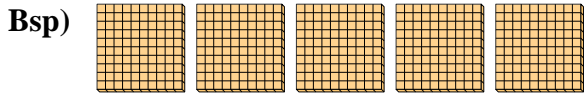




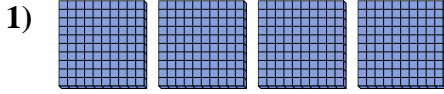
Verwenden Sie die Blöcke, um die Gesamtmengen zu bestimmen.

Antworten



5 hundertern = 50 zehnern = 500 einern

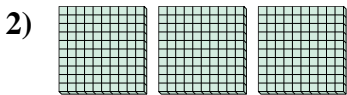
Bsp. 5 50 500



_____ hundertern = _____ zehnern = _____ einern

1. _____


2. _____



_____ hundertern = _____ zehnern = _____ einern

3. _____

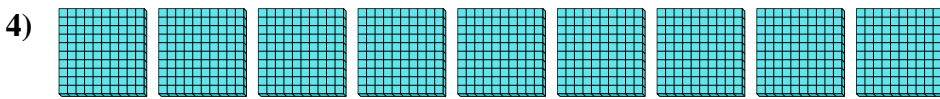
4. _____



_____ hundertern = _____ zehnern = _____ einern

5. _____

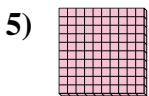
6. _____



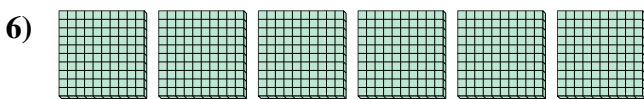
_____ hundertern = _____ zehnern = _____ einern

7. _____

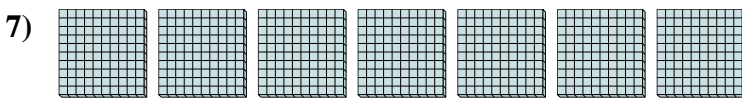
8. _____



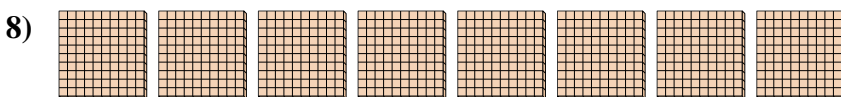
_____ hundertern = _____ zehnern = _____ einern



_____ hundertern = _____ zehnern = _____ einern



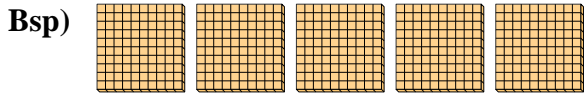
_____ hundertern = _____ zehnern = _____ einern



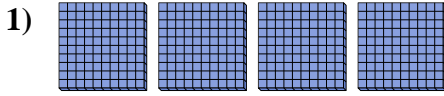
_____ hundertern = _____ zehnern = _____ einern



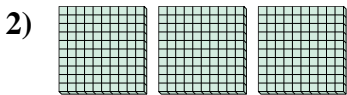
Verwenden Sie die Blöcke, um die Gesamtmengen zu bestimmen.




5 hundertern = 50 zehnern = 500 einern



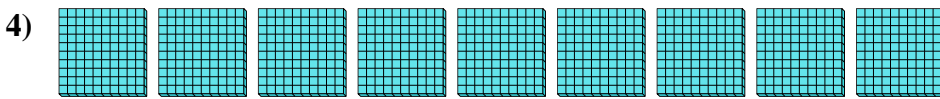
4 hundertern = 40 zehnern = 400 einern



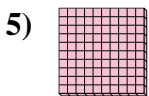
3 hundertern = 30 zehnern = 300 einern



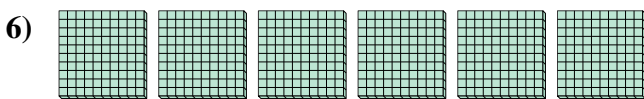
2 hundertern = 20 zehnern = 200 einern



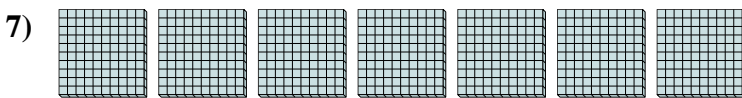
9 hundertern = 90 zehnern = 900 einern



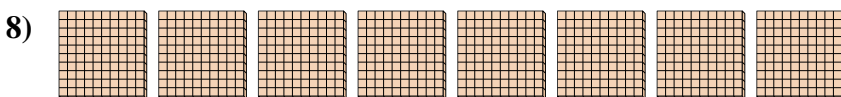
1 hundertern = 10 zehnern = 100 einern



6 hundertern = 60 zehnern = 600 einern



7 hundertern = 70 zehnern = 700 einern



8 hundertern = 80 zehnern = 800 einern

Antworten

Bsp.	<u>5</u>	<u>50</u>	<u>500</u>
1.	<u>4</u>	<u>40</u>	<u>400</u>
2.	<u>3</u>	<u>30</u>	<u>300</u>
3.	<u>2</u>	<u>20</u>	<u>200</u>
4.	<u>9</u>	<u>90</u>	<u>900</u>
5.	<u>1</u>	<u>10</u>	<u>100</u>
6.	<u>6</u>	<u>60</u>	<u>600</u>
7.	<u>7</u>	<u>70</u>	<u>700</u>
8.	<u>8</u>	<u>80</u>	<u>800</u>