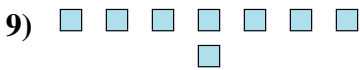
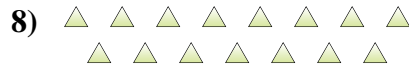
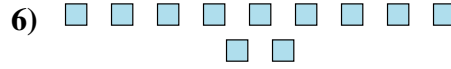
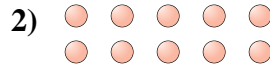





Bestimme, ob die Anzahl der Formen im Feld gerade oder ungerade ist.


Antworten

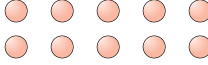



- 1. _____
- 2. _____
- 3. _____
- 4. _____
- 5. _____
- 6. _____
- 7. _____
- 8. _____
- 9. _____
- 10. _____



Bestimme, ob die Anzahl der Formen im Feld gerade oder ungerade ist.

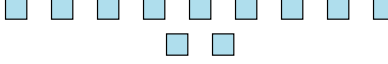
1) 
18

2) 
10

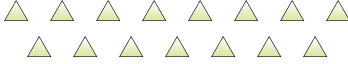
3) 
6

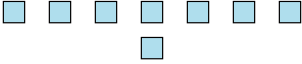
4) 
13


5) 
6

6) 
11

7) 
12

8) 
15

9) 
8

10) 
16

Antworten

1. gerade

2. gerade

3. gerade

4. ungerade

5. gerade

6. ungerade

7. gerade

8. ungerade

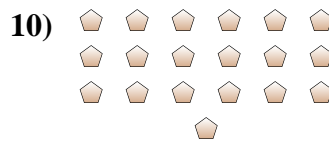
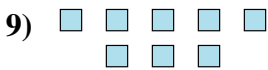
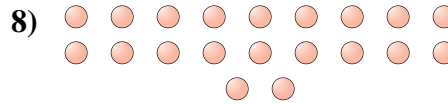
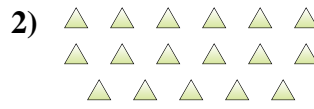
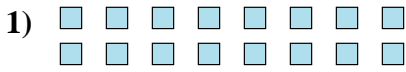
9. gerade

10. gerade



Bestimme, ob die Anzahl der Formen im Feld gerade oder ungerade ist.

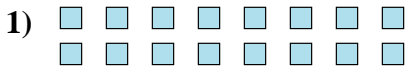
Antworten



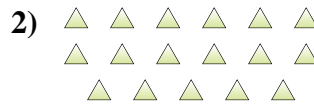
- 1. _____
- 2. _____
- 3. _____
- 4. _____
- 5. _____
- 6. _____
- 7. _____
- 8. _____
- 9. _____
- 10. _____



Bestimme, ob die Anzahl der Formen im Feld gerade oder ungerade ist.



16



17



5



6



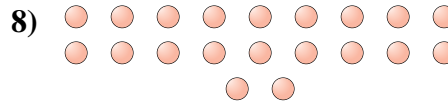
13



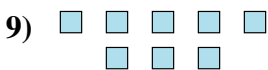
15



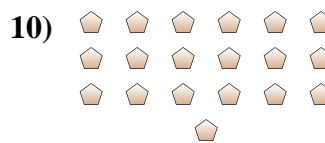
8



20



8



19

Antworten

1. gerade

2. ungerade

3. ungerade

4. gerade

5. ungerade

6. ungerade

7. gerade

8. gerade

9. gerade

10. ungerade



Bestimme, ob die Anzahl der Formen im Feld gerade oder ungerade ist.

Antworten



1. _____

2. _____

3. _____

4. _____

5. _____


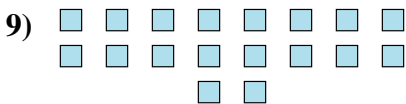
6. _____

7. _____

8. _____

9. _____

10. _____





Bestimme, ob die Anzahl der Formen im Feld gerade oder ungerade ist.



5



12



6



8



5



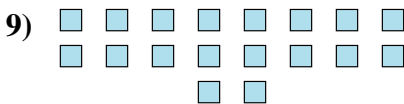
5




5



9



18



17

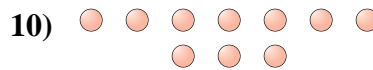
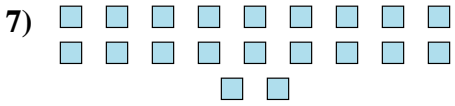
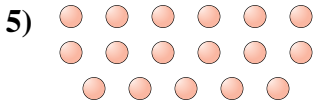
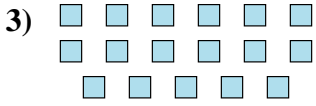
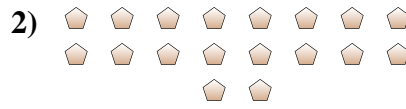
Antworten

1. ungerade
2. gerade
3. gerade
4. gerade
5. ungerade
6. ungerade
7. ungerade
8. ungerade
9. gerade
10. ungerade



Bestimme, ob die Anzahl der Formen im Feld gerade oder ungerade ist.

Antworten

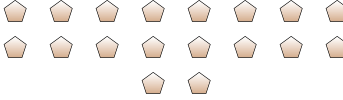


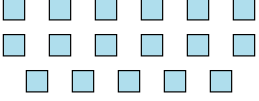
- 1. _____
- 2. _____
- 3. _____
- 4. _____
- 5. _____
- 6. _____
- 7. _____
- 8. _____
- 9. _____
- 10. _____




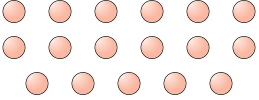
Bestimme, ob die Anzahl der Formen im Feld gerade oder ungerade ist.


1) 
19

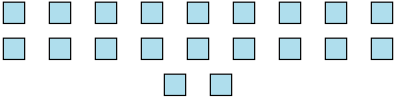
2) 
18

3) 
17

4) 
15

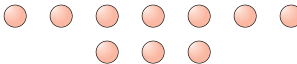
5) 
17

6) 
13

7) 
20

8) 
7

9) 
6

10) 
10

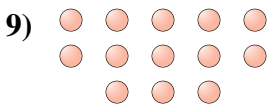

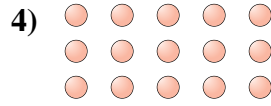
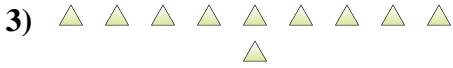
Antworten

1. ungerade
2. gerade
3. ungerade
4. ungerade
5. ungerade
6. ungerade
7. gerade
8. ungerade
9. gerade
10. gerade



Bestimme, ob die Anzahl der Formen im Feld gerade oder ungerade ist.

Antworten



- 1. _____
- 2. _____
- 3. _____
- 4. _____
- 5. _____
- 6. _____
- 7. _____
- 8. _____
- 9. _____
- 10. _____



Bestimme, ob die Anzahl der Formen im Feld gerade oder ungerade ist.



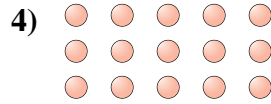
6




14



10



15



17



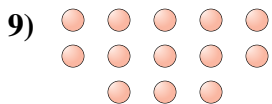
7



13



10



13



8

Antworten

1. gerade

2. gerade

3. gerade

4. ungerade

5. ungerade

6. ungerade

7. ungerade

8. gerade

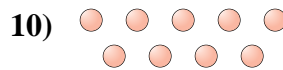
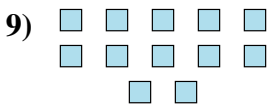

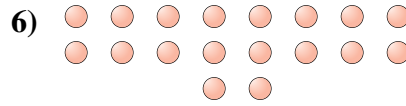

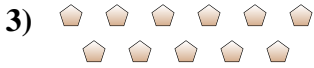
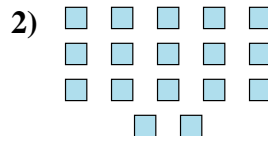
9. ungerade

10. gerade



Bestimme, ob die Anzahl der Formen im Feld gerade oder ungerade ist.

Antworten



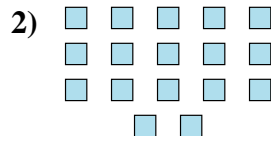
- 1. _____
- 2. _____
- 3. _____
- 4. _____
- 5. _____
- 6. _____
- 7. _____
- 8. _____
- 9. _____
- 10. _____



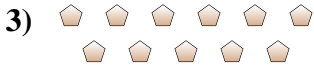
Bestimme, ob die Anzahl der Formen im Feld gerade oder ungerade ist.




10



17



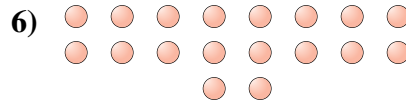
11




19



14



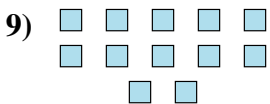
18



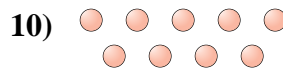
18



8



12



9

Antworten

1. gerade

2. ungerade

3. ungerade

4. ungerade

5. gerade

6. gerade

7. gerade

8. gerade

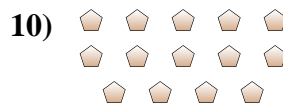
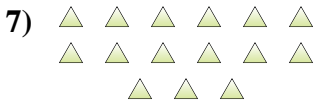
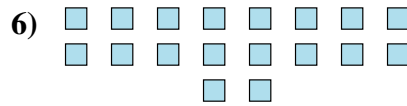
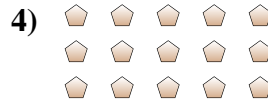

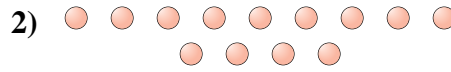
9. gerade

10. ungerade



Bestimme, ob die Anzahl der Formen im Feld gerade oder ungerade ist.

Antworten



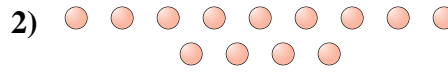
- 1. _____
- 2. _____
- 3. _____
- 4. _____
- 5. _____
- 6. _____
- 7. _____
- 8. _____
- 9. _____
- 10. _____




Bestimme, ob die Anzahl der Formen im Feld gerade oder ungerade ist.



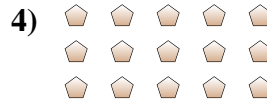
9



13



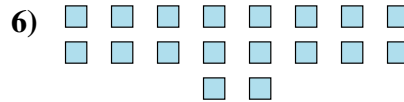
19



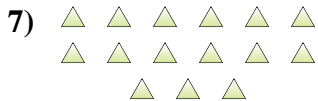
15



17



18



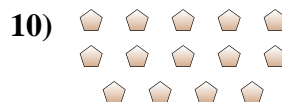
15



5



10



14

Antworten

1. ungerade

2. ungerade

3. ungerade

4. ungerade

5. ungerade

6. gerade

7. ungerade

8. ungerade

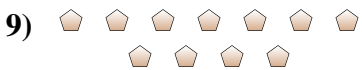
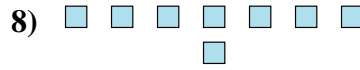
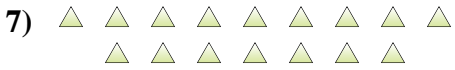
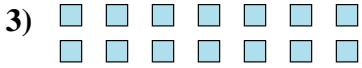
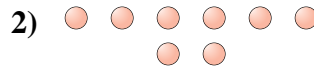
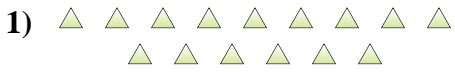
9. gerade

10. gerade



Bestimme, ob die Anzahl der Formen im Feld gerade oder ungerade ist.

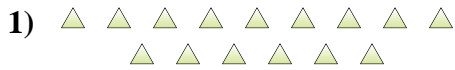
Antworten



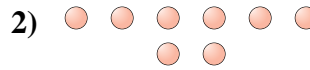
- 1. _____
- 2. _____
- 3. _____
- 4. _____
- 5. _____
- 6. _____
- 7. _____
- 8. _____
- 9. _____
- 10. _____



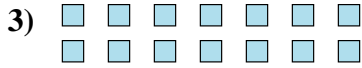
Bestimme, ob die Anzahl der Formen im Feld gerade oder ungerade ist.



15



8



14



10



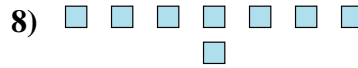
12



8



16



8



11



7

Antworten

1. ungerade

2. gerade

3. gerade

4. gerade

5. gerade

6. gerade

7. gerade

8. gerade

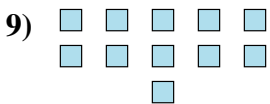
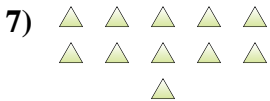
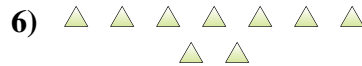
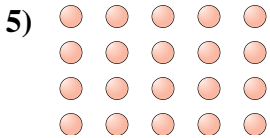
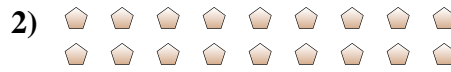
9. ungerade

10. ungerade



Bestimme, ob die Anzahl der Formen im Feld gerade oder ungerade ist.

Antworten



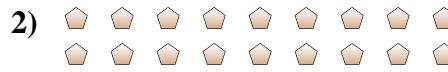
- 1. _____
- 2. _____
- 3. _____
- 4. _____
- 5. _____
- 6. _____
- 7. _____
- 8. _____
- 9. _____
- 10. _____



Bestimme, ob die Anzahl der Formen im Feld gerade oder ungerade ist.



7



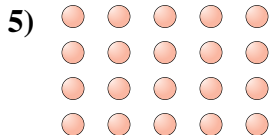
18



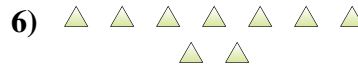
6



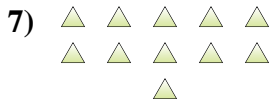
7



20



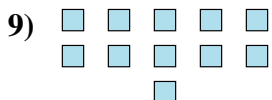
9



11



5



11



6

Antworten

1. ungerade

2. gerade

3. gerade

4. ungerade

5. gerade

6. ungerade

7. ungerade

8. ungerade

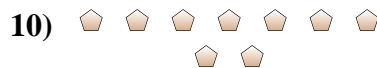
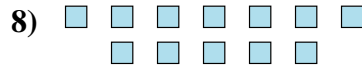
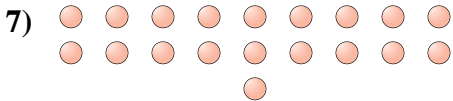
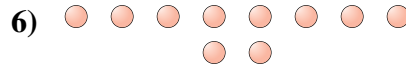

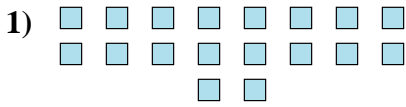
9. ungerade

10. gerade



Bestimme, ob die Anzahl der Formen im Feld gerade oder ungerade ist.

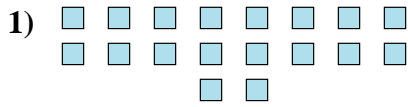
Antworten




- 1. _____
- 2. _____
- 3. _____
- 4. _____
- 5. _____
- 6. _____
- 7. _____
- 8. _____
- 9. _____
- 10. _____



Bestimme, ob die Anzahl der Formen im Feld gerade oder ungerade ist.



18



20



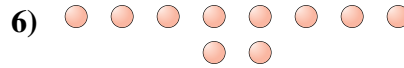
14



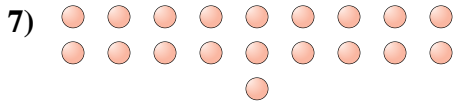
10



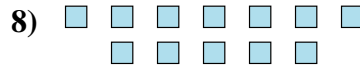
12



10



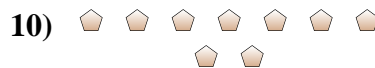
19



12



7



9

Antworten

1. gerade

2. gerade

3. gerade

4. gerade

5. gerade

6. gerade

7. ungerade

8. gerade

9. ungerade

10. ungerade