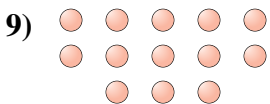

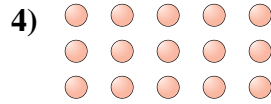




Bestimme, ob die Anzahl der Formen im Feld gerade oder ungerade ist.

Antworten



- 1. _____
- 2. _____
- 3. _____
- 4. _____
- 5. _____
- 6. _____
- 7. _____
- 8. _____
- 9. _____
- 10. _____



Bestimme, ob die Anzahl der Formen im Feld gerade oder ungerade ist.



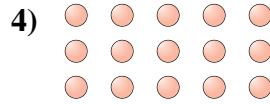
6




14



10



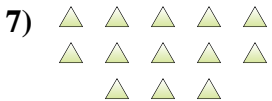
15




17



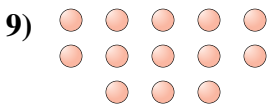
7



13



10



13



8

Antworten

1. gerade

2. gerade

3. gerade

4. ungerade

5. ungerade

6. ungerade

7. ungerade

8. gerade

9. ungerade

10. gerade