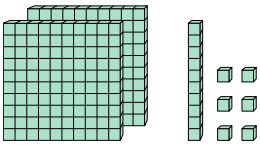




Ermittle den Wert, den jede Gruppe der Blöcke darstellt.

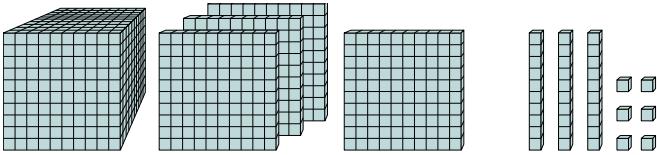
**Antworten**

1)



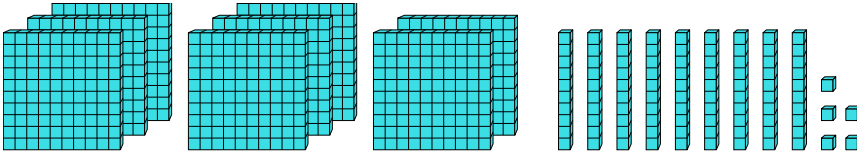
1. \_\_\_\_\_

2)



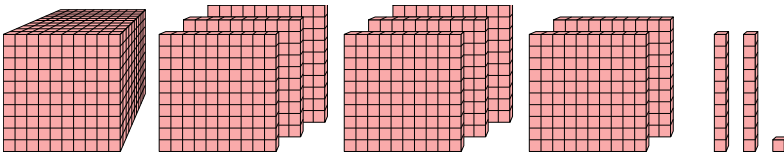
2. \_\_\_\_\_

3)



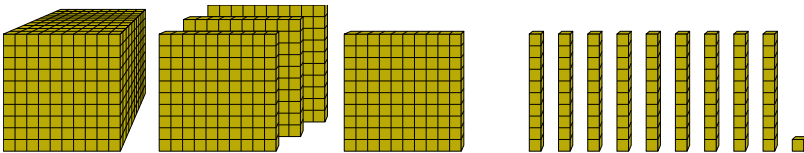
3. \_\_\_\_\_

4)



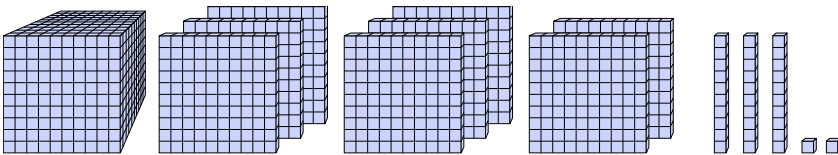
4. \_\_\_\_\_

5)



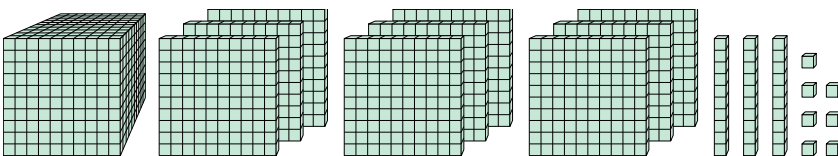
5. \_\_\_\_\_

6)



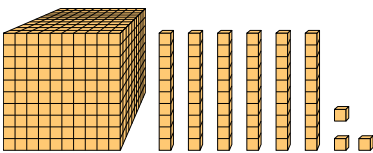
6. \_\_\_\_\_

7)



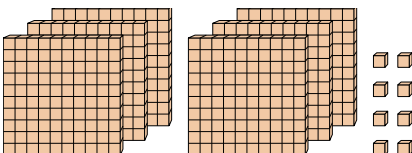
7. \_\_\_\_\_

8)



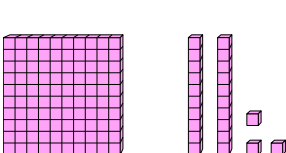
8. \_\_\_\_\_

9)



9. \_\_\_\_\_

10)



10. \_\_\_\_\_

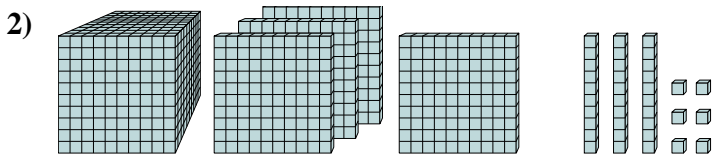


Ermittle den Wert, den jede Gruppe der Blöcke darstellt.

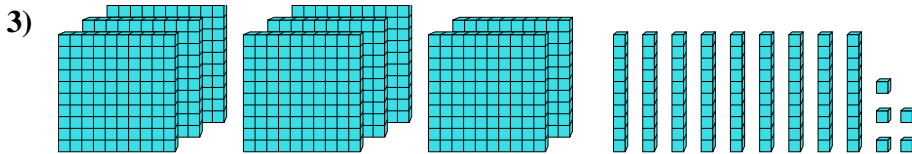
**Antworten**



1. 216



2. 1.436

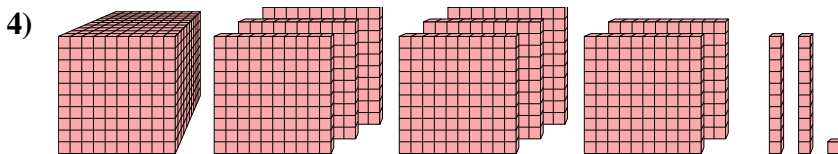


3. 895

4. 1.821

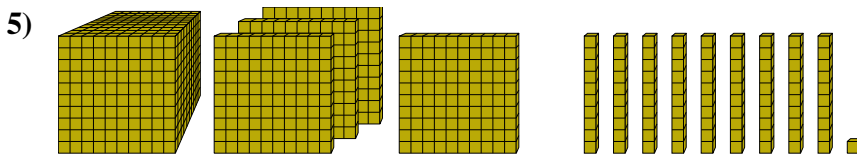
5. 1.491

6. 1.832



7. 1.937

8. 1.063



9. 608

10. 123

