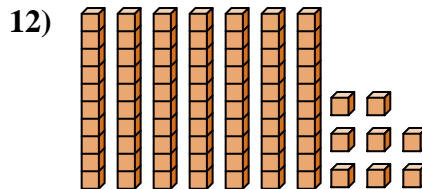
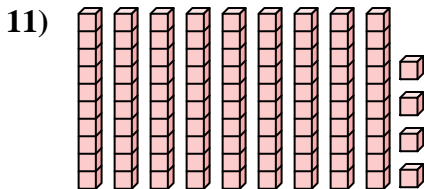
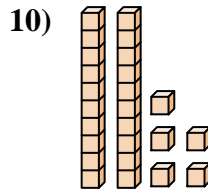
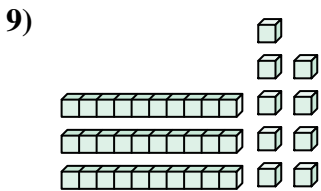
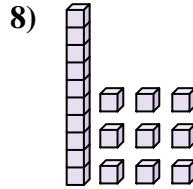
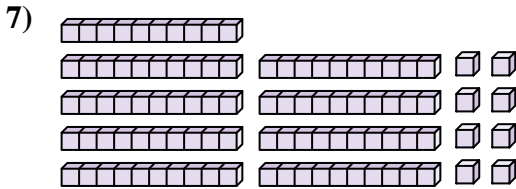
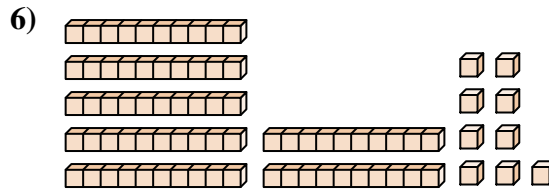
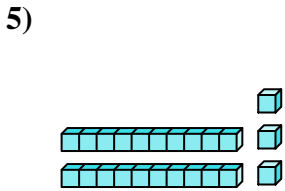
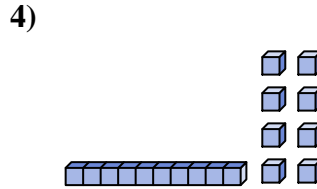
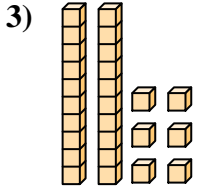
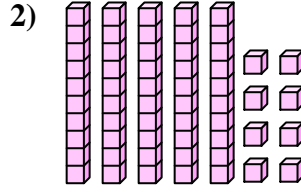
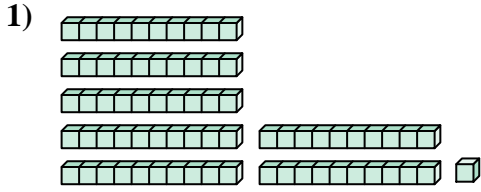




Zähle die Gesamtzahl aller kleinen Blöcke.

Antworten



1. _____

2. _____

3. _____

4. _____

5. _____

6. _____

7. _____

8. _____

9. _____

10. _____

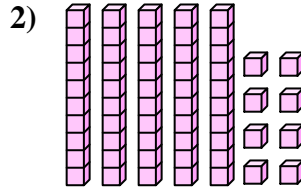
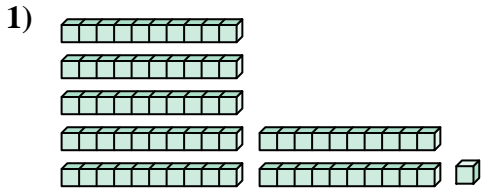
11. _____

12. _____

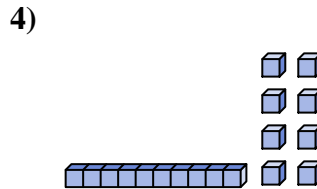
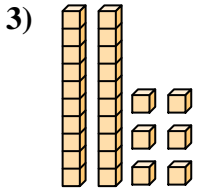


Zähle die Gesamtzahl aller kleinen Blöcke.

Antworten



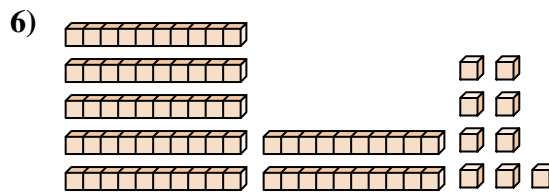
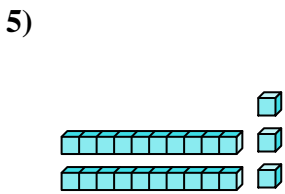
1. 71



2. 58

3. 26

4. 18



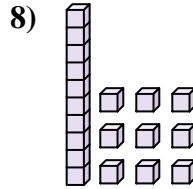
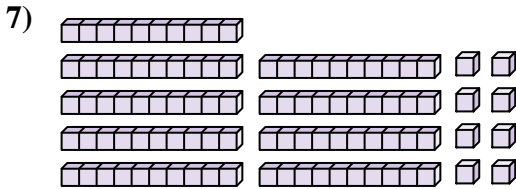
5. 23

6. 79

7. 98

8. 19

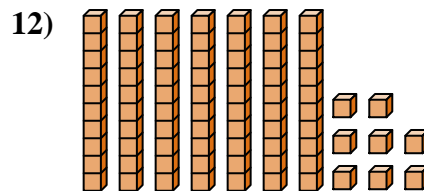
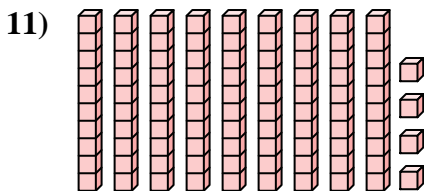
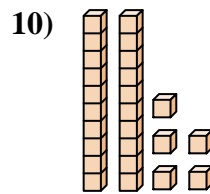
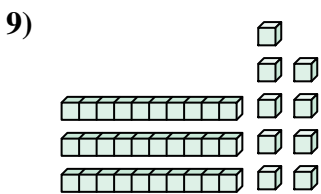
9. 39



10. 25

11. 94

12. 78





Zähle die Gesamtzahl aller kleinen Blöcke.

Antworten

19

26

79

58

23

98

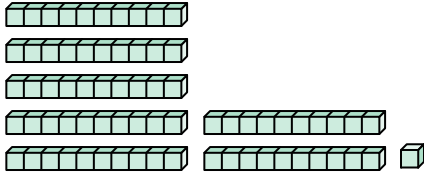
39

25

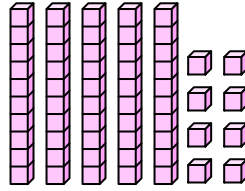
71

18

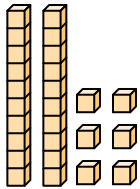
1)



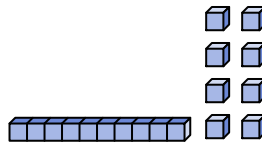
2)



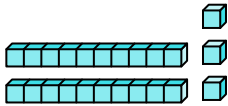
3)



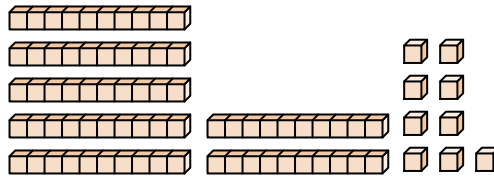
4)



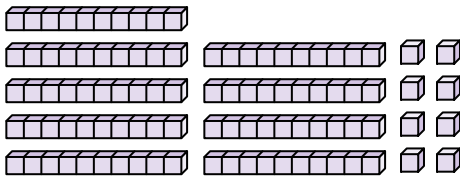
5)



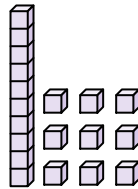
6)



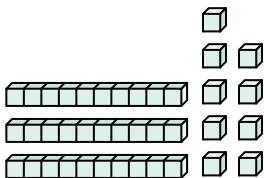
7)



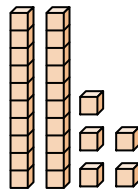
8)



9)



10)



1. _____

2. _____

3. _____

4. _____

5. _____

6. _____

7. _____

8. _____

9. _____

10. _____