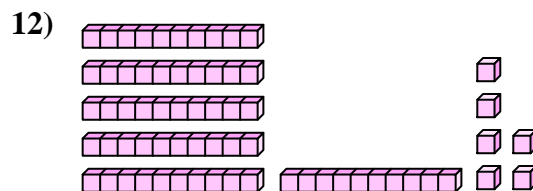
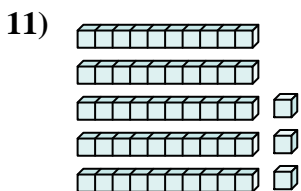
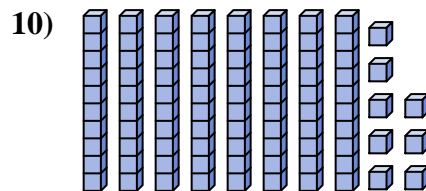
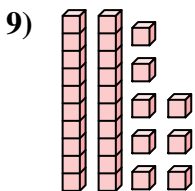
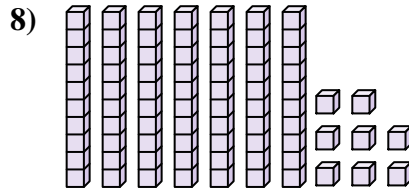
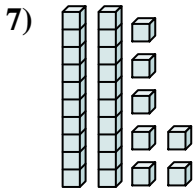
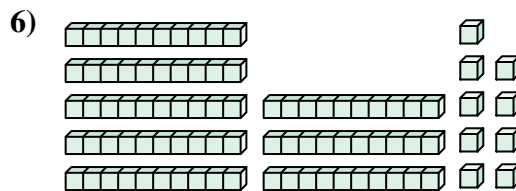

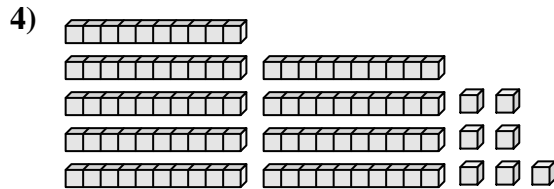
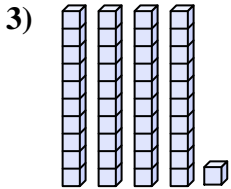
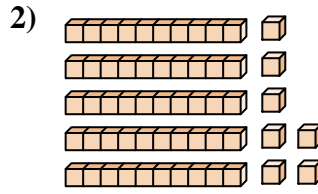
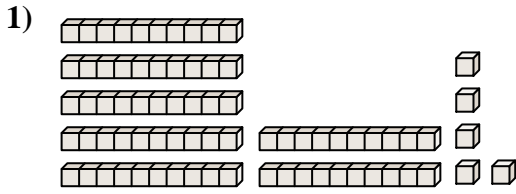




Zähle die Gesamtzahl aller kleinen Blöcke.

Antworten

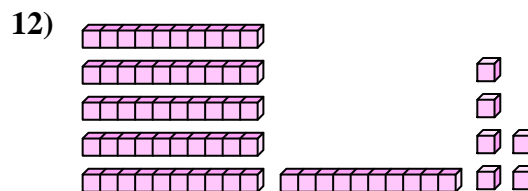
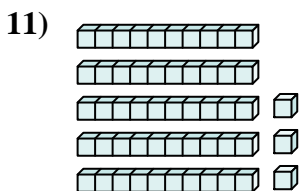
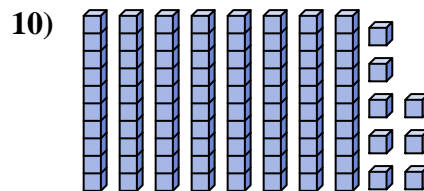
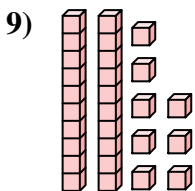
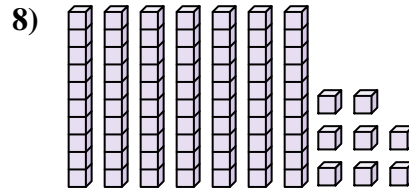
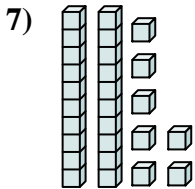
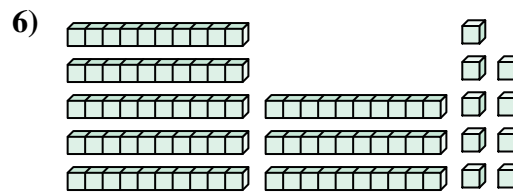

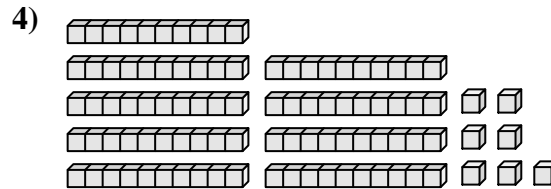
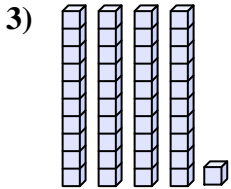
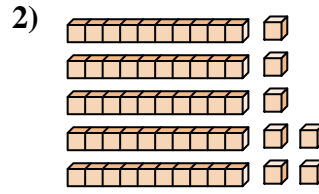
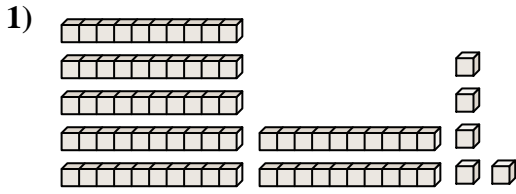


- 1. _____
- 2. _____
- 3. _____
- 4. _____
- 5. _____
- 6. _____
- 7. _____
- 8. _____
- 9. _____
- 10. _____
- 11. _____
- 12. _____



Zähle die Gesamtzahl aller kleinen Blöcke.

Antworten



- 1. 75
- 2. 57
- 3. 41
- 4. 97
- 5. 71
- 6. 89
- 7. 27
- 8. 78
- 9. 28
- 10. 88
- 11. 53
- 12. 66



Zähle die Gesamtzahl aller kleinen Blöcke.

27

88

57

41

71

78

97

89

28

75

Antworten

1. _____

2. _____

3. _____

4. _____

5. _____

6. _____

7. _____

8. _____

9. _____

10. _____

