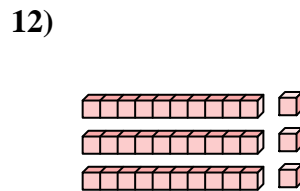
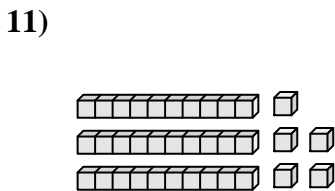
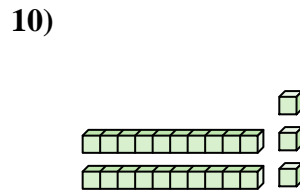
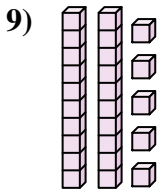
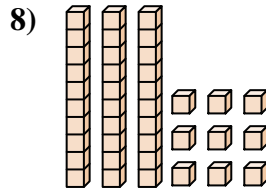
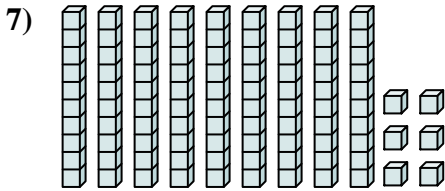
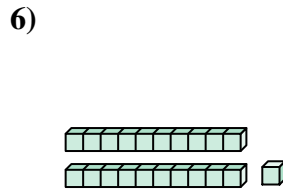
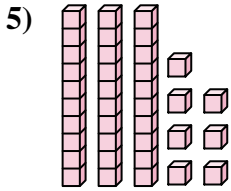
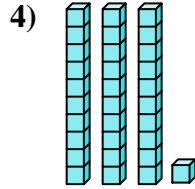
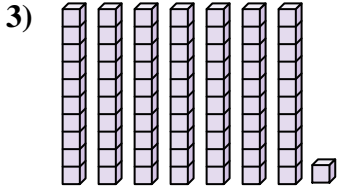
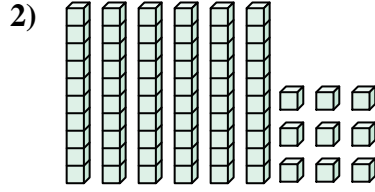
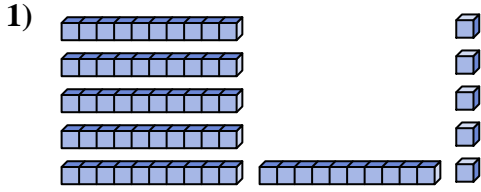




Zähle die Gesamtzahl aller kleinen Blöcke.

**Antworten**



1. \_\_\_\_\_

2. \_\_\_\_\_

3. \_\_\_\_\_

4. \_\_\_\_\_

5. \_\_\_\_\_

6. \_\_\_\_\_

7. \_\_\_\_\_

8. \_\_\_\_\_

9. \_\_\_\_\_

10. \_\_\_\_\_

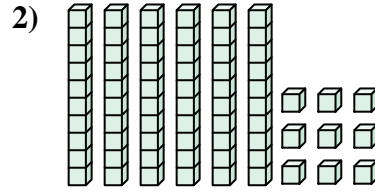
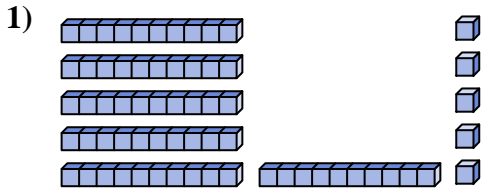
11. \_\_\_\_\_

12. \_\_\_\_\_

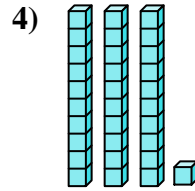
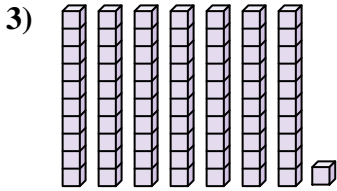


Zähle die Gesamtzahl aller kleinen Blöcke.

Antworten



1. 65



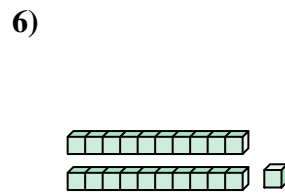
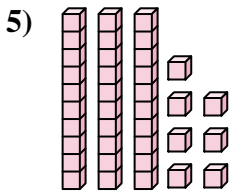
2. 69

3. 71

4. 31

5. 37

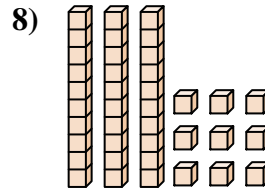
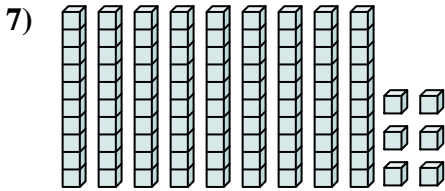
6. 21



7. 96

8. 39

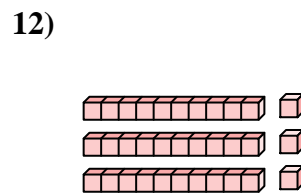
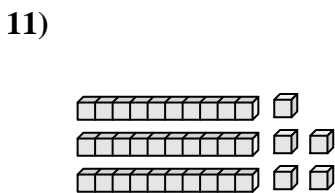
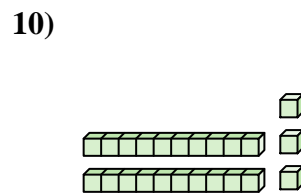
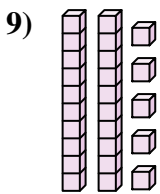
9. 25



10. 23

11. 35

12. 33





Zähle die Gesamtzahl aller kleinen Blöcke.

**Antworten**

23

71

65

31

69

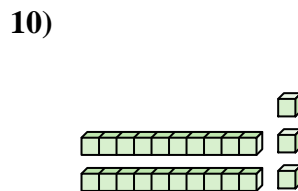
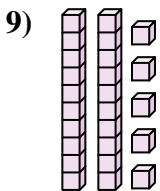
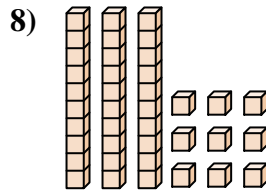
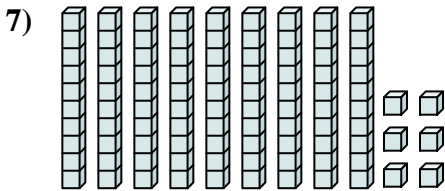
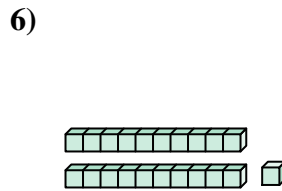
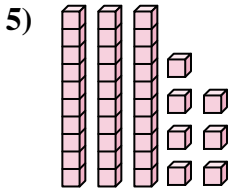
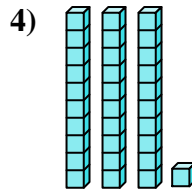
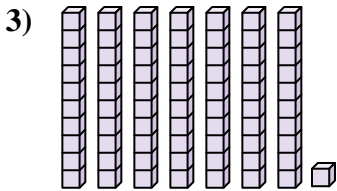
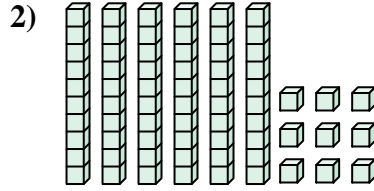
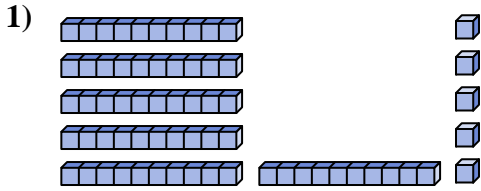
96

21

37

39

25



1. \_\_\_\_\_
2. \_\_\_\_\_
3. \_\_\_\_\_
4. \_\_\_\_\_
5. \_\_\_\_\_
6. \_\_\_\_\_
7. \_\_\_\_\_
8. \_\_\_\_\_
9. \_\_\_\_\_
10. \_\_\_\_\_