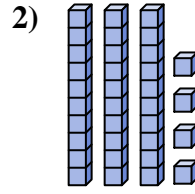
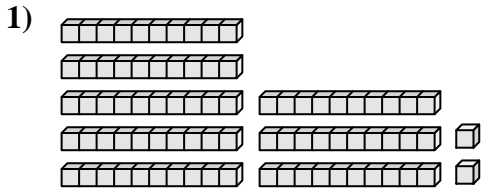




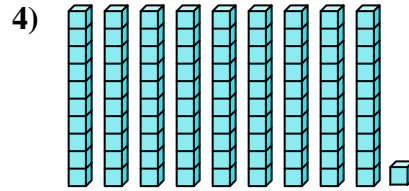
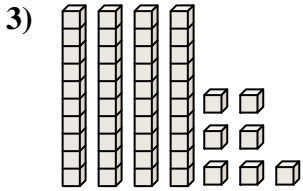
Zähle die Gesamtzahl aller kleinen Blöcke.

**Antworten**



1. \_\_\_\_\_

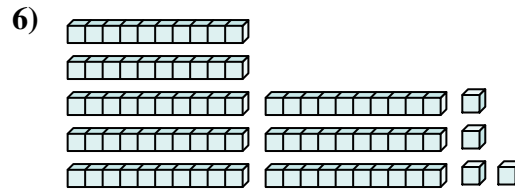
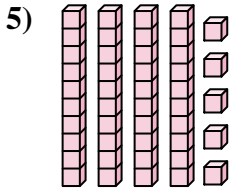
2. \_\_\_\_\_



3. \_\_\_\_\_

4. \_\_\_\_\_

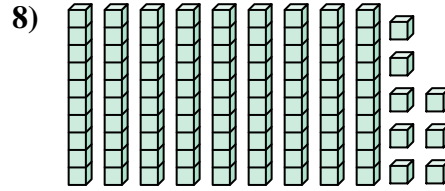
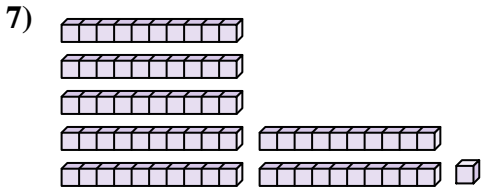
5. \_\_\_\_\_



6. \_\_\_\_\_

7. \_\_\_\_\_

8. \_\_\_\_\_

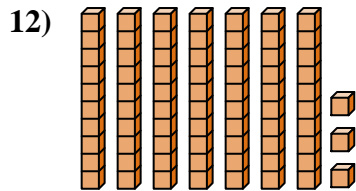
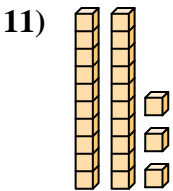
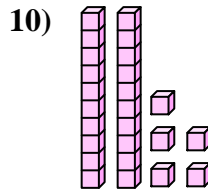
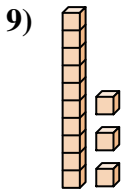


9. \_\_\_\_\_

10. \_\_\_\_\_

11. \_\_\_\_\_

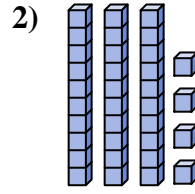
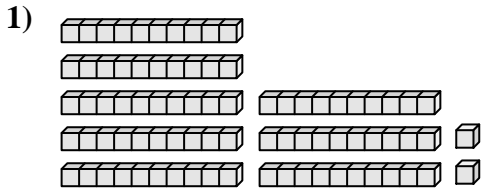
12. \_\_\_\_\_



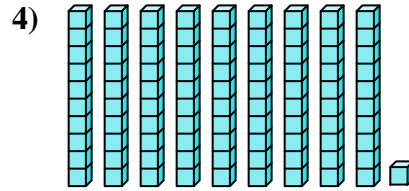
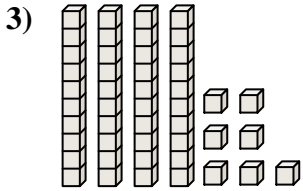


Zähle die Gesamtzahl aller kleinen Blöcke.

**Antworten**



1. 82



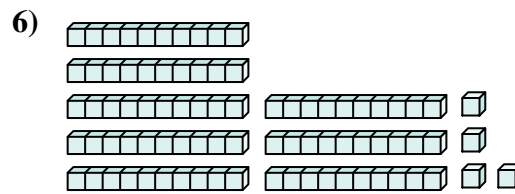
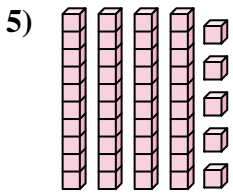
2. 34

3. 47

4. 91

5. 45

6. 84

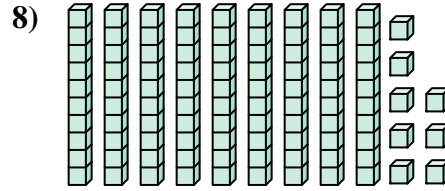
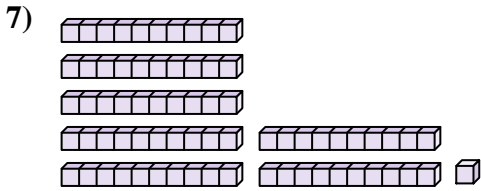


7. 71

8. 98

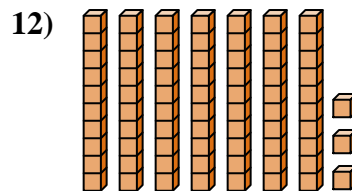
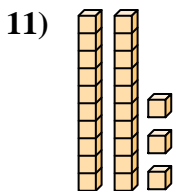
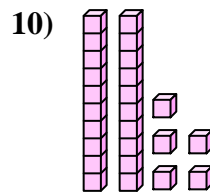
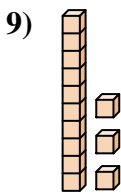
9. 13

10. 25



11. 23

12. 73





Zähle die Gesamtzahl aller kleinen Blöcke.

45

71

98

84

47

34

91

13

25

82

**Antworten**

1. \_\_\_\_\_

2. \_\_\_\_\_

3. \_\_\_\_\_

4. \_\_\_\_\_

5. \_\_\_\_\_

6. \_\_\_\_\_

7. \_\_\_\_\_

8. \_\_\_\_\_

9. \_\_\_\_\_

10. \_\_\_\_\_

