

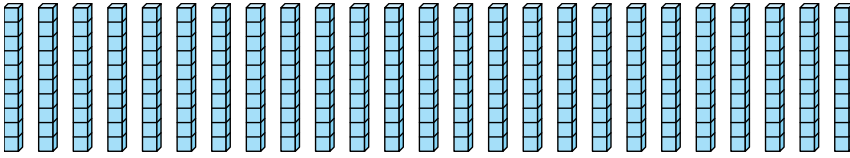


Bestimmen Sie, wie viele Gruppen von 100 aus den angezeigten Blöcken erstellt werden können.

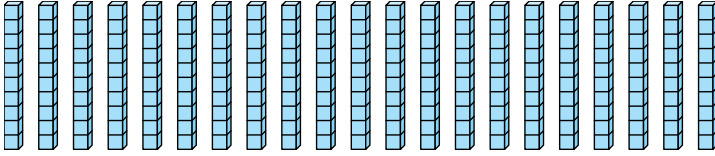
**Antworten**

Bsp)

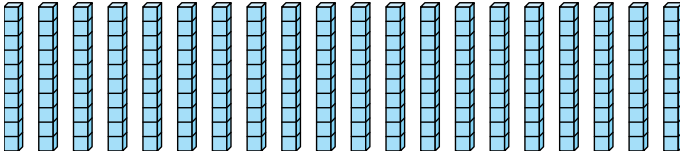
Bsp. 2



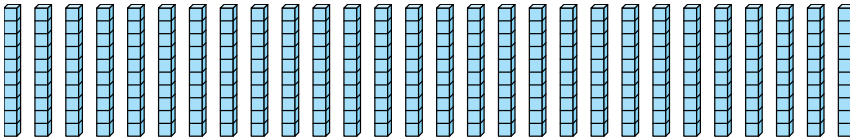
1)



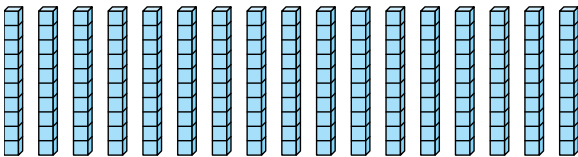
2)



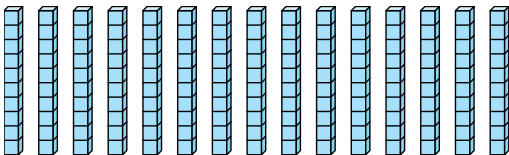
3)



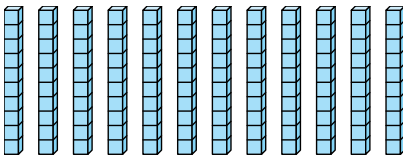
4)



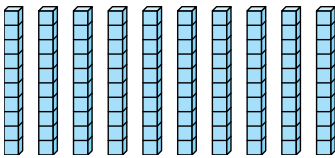
5)



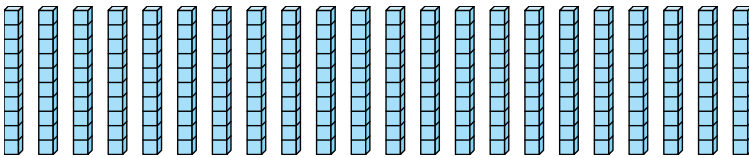
6)



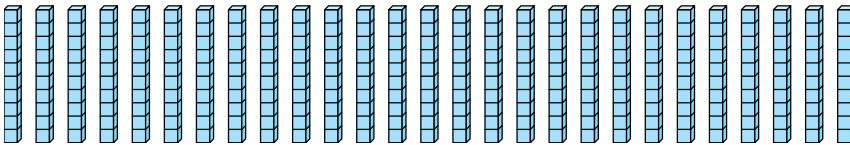
7)



8)



9)



1. \_\_\_\_\_

2. \_\_\_\_\_

3. \_\_\_\_\_

4. \_\_\_\_\_

5. \_\_\_\_\_

6. \_\_\_\_\_

7. \_\_\_\_\_

8. \_\_\_\_\_

9. \_\_\_\_\_



Bestimmen Sie, wie viele Gruppen von 100 aus den angezeigten Blöcken erstellt werden können.

Bsp)

1)

2)

3)

4)

5)

6)

7)

8)

9)

**Antworten**

Bsp. 2

1. 2

2. 2

3. 2

4. 1

5. 1

6. 1

7. 1

8. 2

9. 2