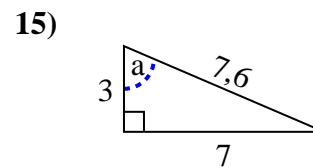
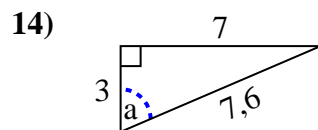
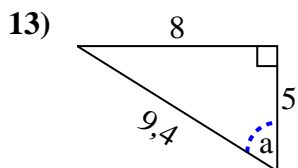
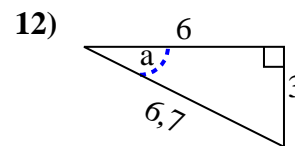
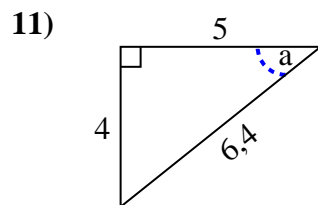
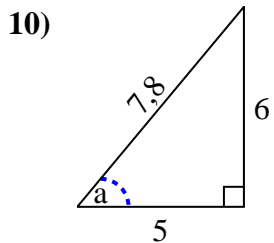
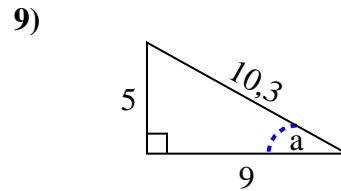
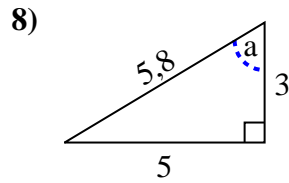
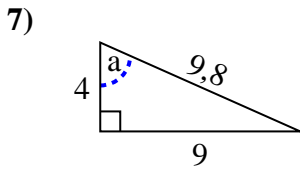
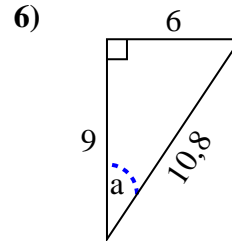
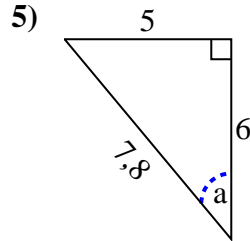
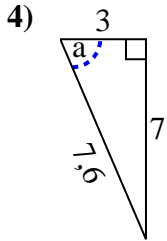
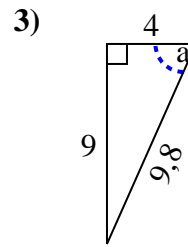
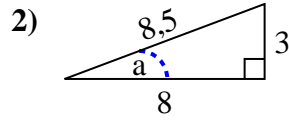
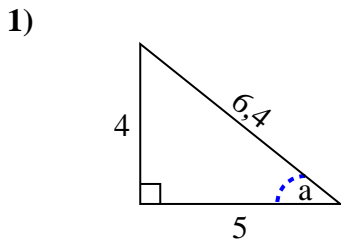




Identifizieren Sie das Gegenteil, die anrenzende und die Hypotenuse von Winkel  $a$ .

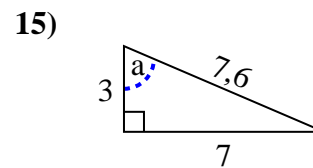
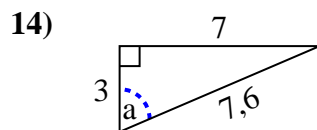
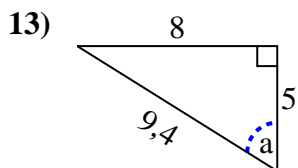
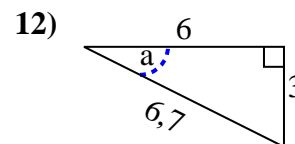
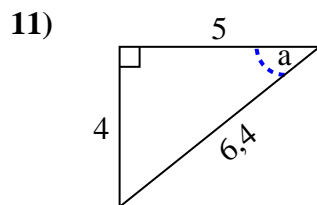
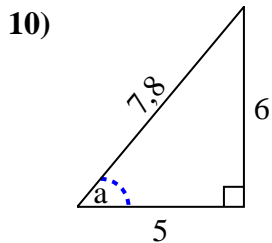
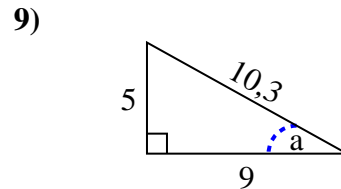
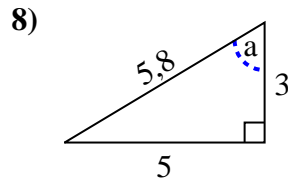
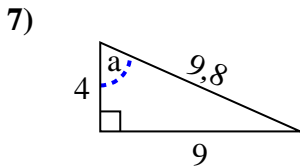
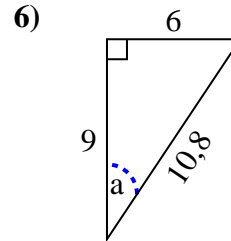
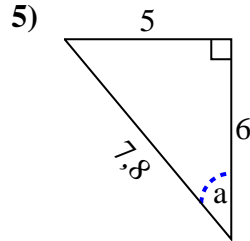
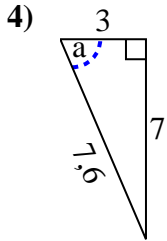
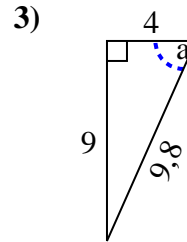
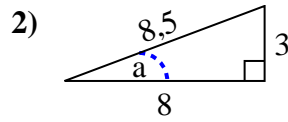
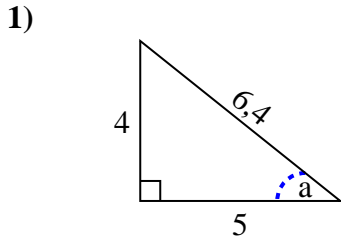
**Antworten**



1. \_\_\_\_\_
2. \_\_\_\_\_
3. \_\_\_\_\_
4. \_\_\_\_\_
5. \_\_\_\_\_
6. \_\_\_\_\_
7. \_\_\_\_\_
8. \_\_\_\_\_
9. \_\_\_\_\_
10. \_\_\_\_\_
11. \_\_\_\_\_
12. \_\_\_\_\_
13. \_\_\_\_\_
14. \_\_\_\_\_
15. \_\_\_\_\_



Identifizieren Sie das Gegenteil, die angrenzende und die Hypotenuse von Winkel a.

**Antworten**1. 4, 5, 6,42. 3, 8, 8,53. 9, 4, 9,84. 7, 3, 7,65. 5, 6, 7,86. 6, 9, 10,87. 9, 4, 9,88. 5, 3, 5,89. 5, 9, 10,310. 6, 5, 7,811. 4, 5, 6,412. 3, 6, 6,713. 8, 5, 9,414. 7, 3, 7,615. 7, 3, 7,6