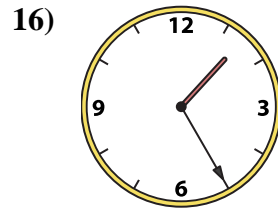
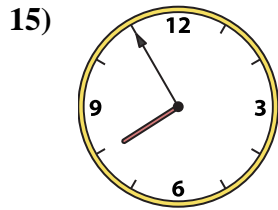
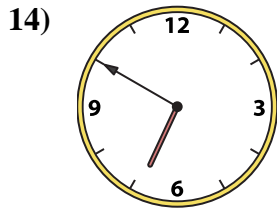
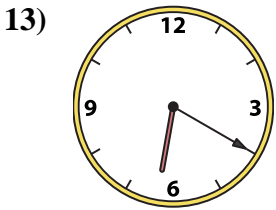
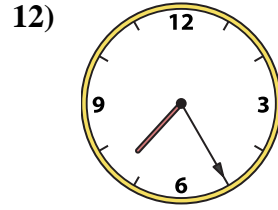
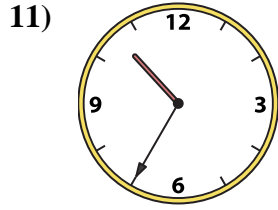
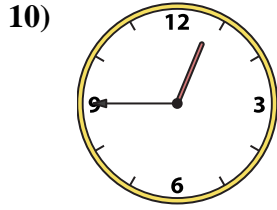
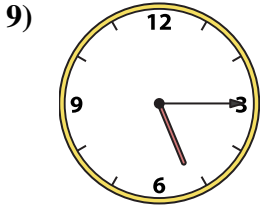
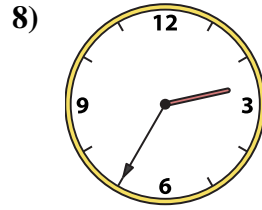
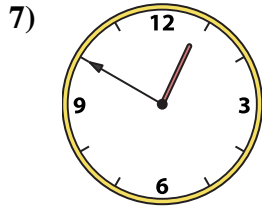
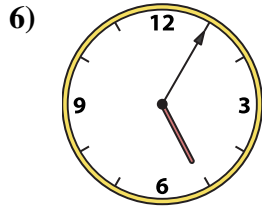
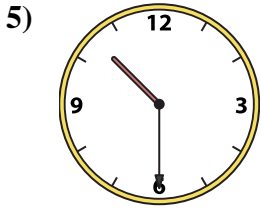
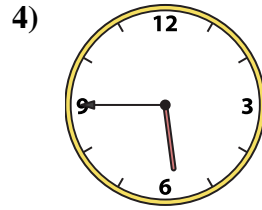
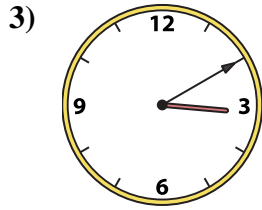






Passen Sie die analoge Uhr an die digitale Uhr an.

Antworten



1. \_\_\_\_\_
2. \_\_\_\_\_
3. \_\_\_\_\_
4. \_\_\_\_\_
5. \_\_\_\_\_
6. \_\_\_\_\_
7. \_\_\_\_\_
8. \_\_\_\_\_
9. \_\_\_\_\_
10. \_\_\_\_\_
11. \_\_\_\_\_
12. \_\_\_\_\_
13. \_\_\_\_\_
14. \_\_\_\_\_
15. \_\_\_\_\_
16. \_\_\_\_\_

A. 2:55

B. 10:30

C. 7:55

D. 6:20

E. 3:10

F. 5:45

G. 2:35

H. 1:25

I. 5:05

J. 10:35

K. 7:25

L. 12:50

M. 5:15

N. 12:45

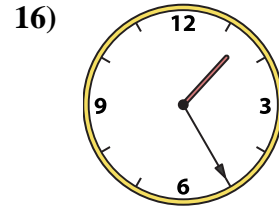
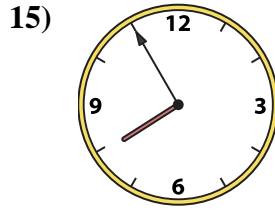
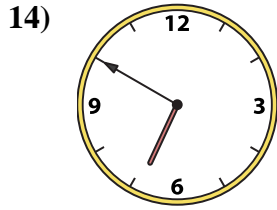
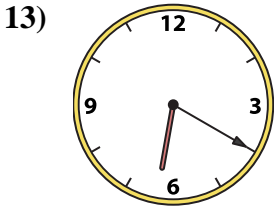
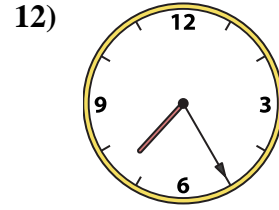
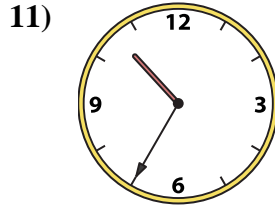
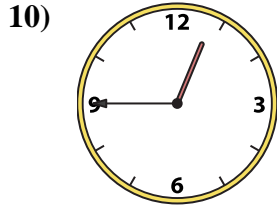
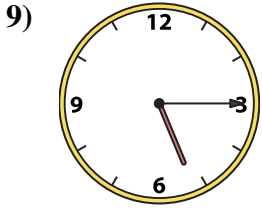
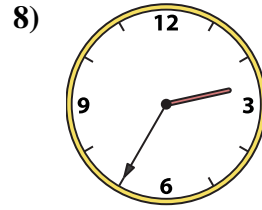
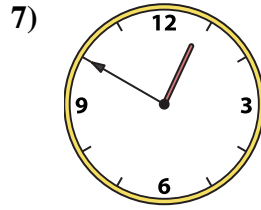
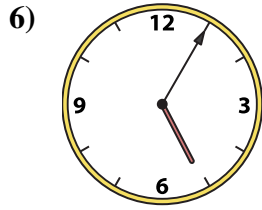
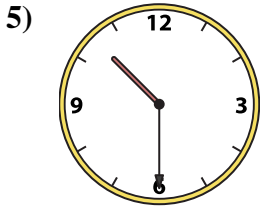
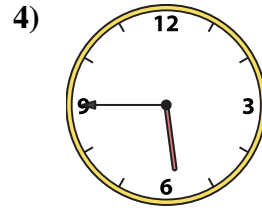
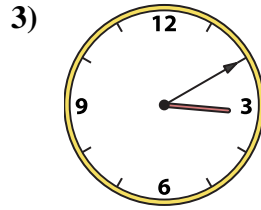


O. 11:00

P. 6:50



Passen Sie die analoge Uhr an die digitale Uhr an.

**Antworten**



1.   **O**  

2.   **A**  

3.   **E**  

4.   **F**  

5.   **B**  

6.   **I**  

7.   **L**  

8.   **G**  

9.   **M**  

10.   **N**  

11.   **J**  

12.   **K**  

13.   **D**  

14.   **P**  

15.   **C**  

16.   **H**  

A. **2:55**

B. **10:30**

C. **7:55**

D. **6:20**

E. **3:10**

F. **5:45**

G. **2:35**

H. **1:25**

I. **5:05**

J. **10:35**

K. **7:25**

L. **12:50**

M. **5:15**

N. **12:45**

O. **11:00**

P. **6:50**