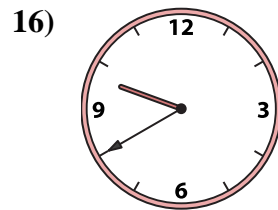
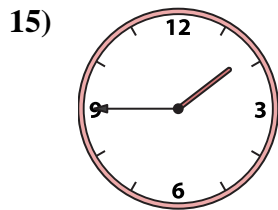
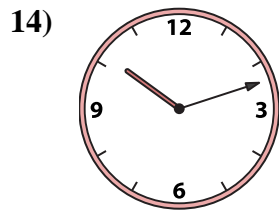
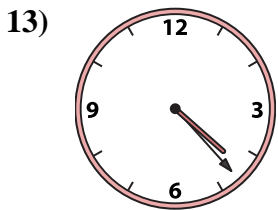
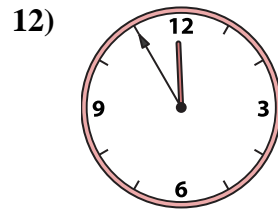
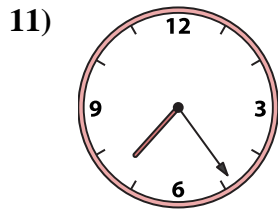
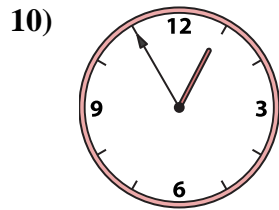
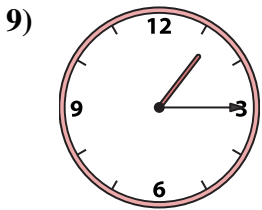
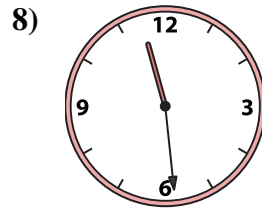
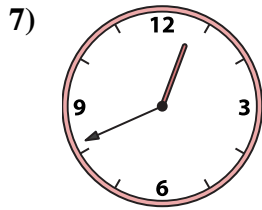
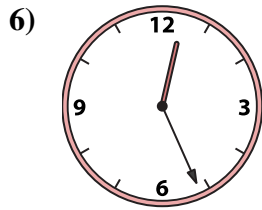
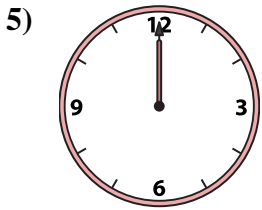
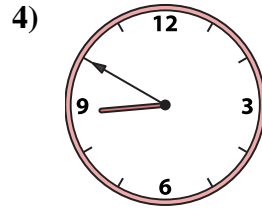
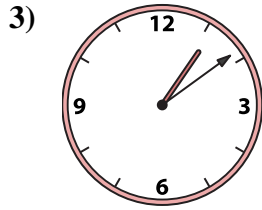
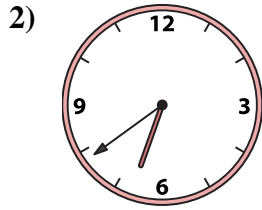
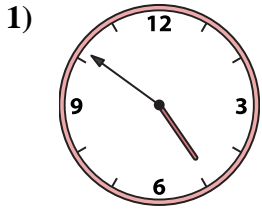




Passen Sie die analoge Uhr an die digitale Uhr an.

Antworten



1. _____
2. _____
3. _____
4. _____
5. _____
6. _____
7. _____
8. _____
9. _____
10. _____
11. _____
12. _____
13. _____
14. _____
15. _____
16. _____

A.

B.

C.

D.

E.

F.

G.

H.

I.

J.

K.

L.

M.

N.

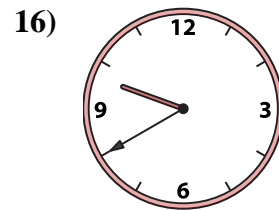
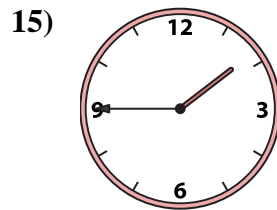
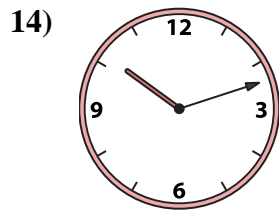
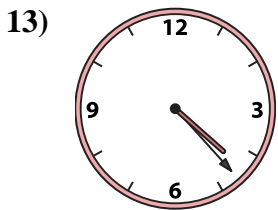
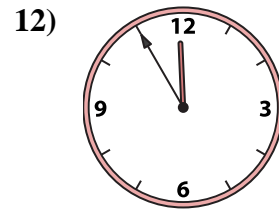
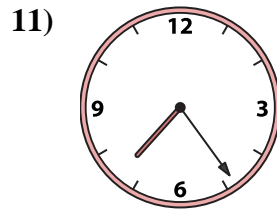
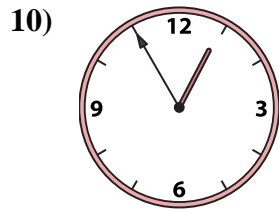
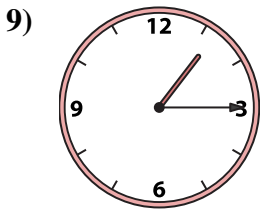
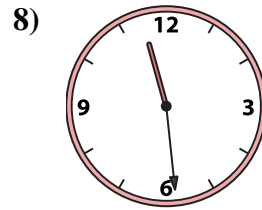
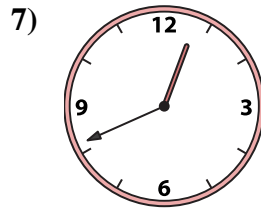
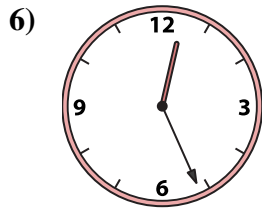
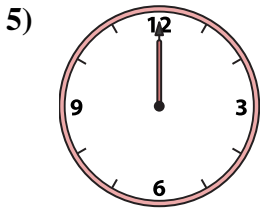
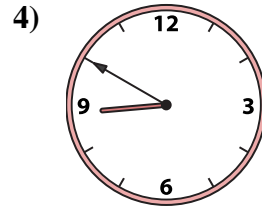
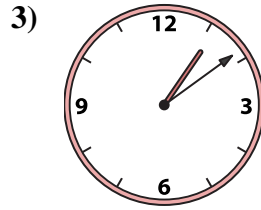
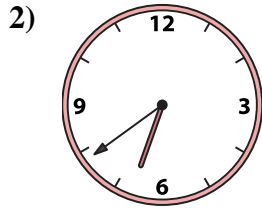
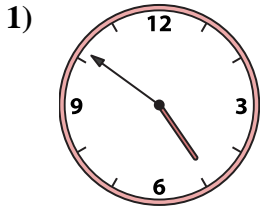
O.

P.



Passen Sie die analoge Uhr an die digitale Uhr an.

Antworten



1. **B**

2. **E**

3. **C**

4. **A**

5. **J**

6. **P**

7. **O**

8. **N**

9. **I**

10. **M**

11. **G**

12. **L**

13. **D**

14. **F**

15. **H**

16. **K**

A. **8:50**

B. **4:51**

C. **1:09**

D. **4:23**

E. **6:39**

F. **10:12**

G. **7:24**

H. **1:45**

I. **1:15**

J. **12:00**

K. **9:40**

L. **11:55**

M. **12:55**

N. **11:29**

O. **12:41**

P. **12:26**