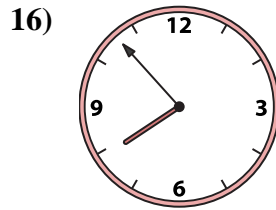
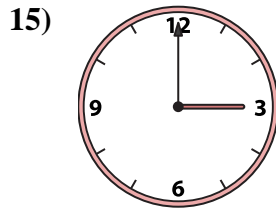
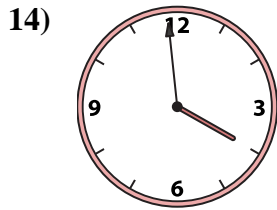
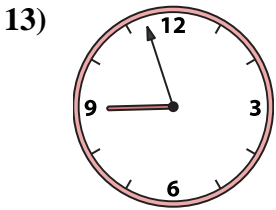
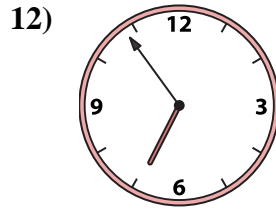
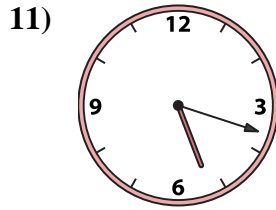
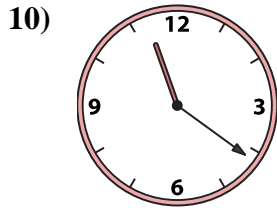

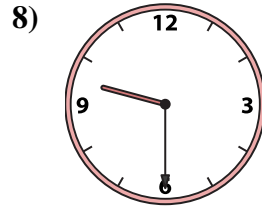
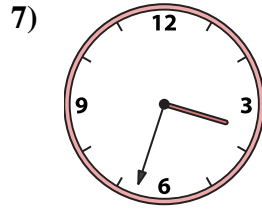

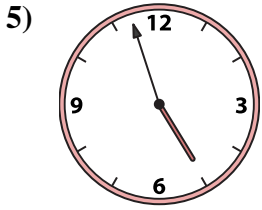
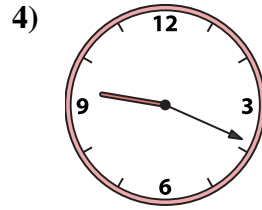
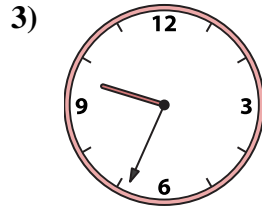
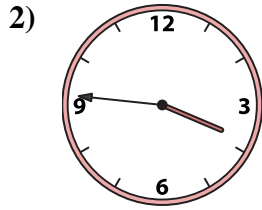
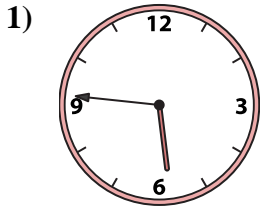




Passen Sie die analoge Uhr an die digitale Uhr an.

Antworten



1. _____
2. _____
3. _____
4. _____
5. _____
6. _____
7. _____
8. _____
9. _____
10. _____
11. _____
12. _____
13. _____
14. _____
15. _____
16. _____

A. 5:46

B. 3:00

C. 3:46

D. 12:08

E. 3:33

F. 6:54

G. 7:53

H. 12:01

I. 9:30

J. 3:59

K. 4:57

L. 8:57

M. 5:18

N. 9:34

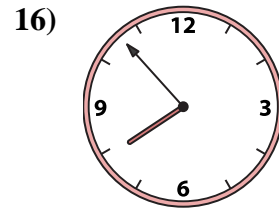
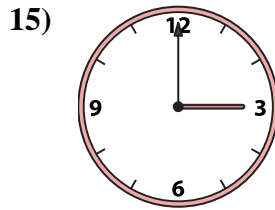
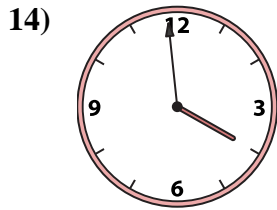
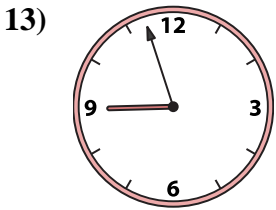
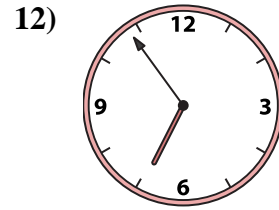
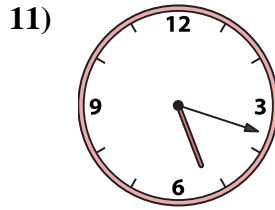
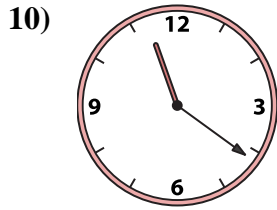

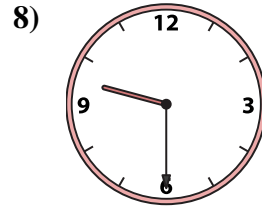
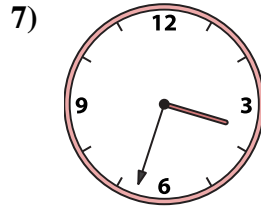

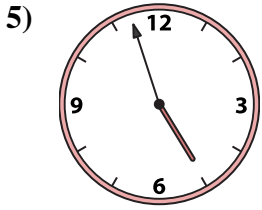
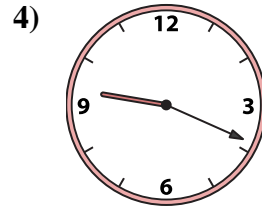
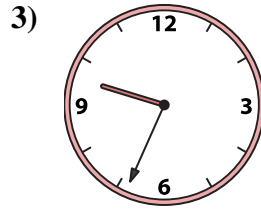
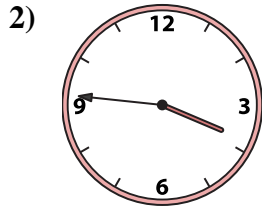
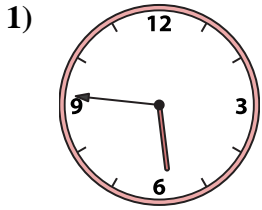
O. 9:19

P. 11:21



Passen Sie die analoge Uhr an die digitale Uhr an.

Antworten



1. **A**

2. **C**

3. **N**

4. **O**

5. **K**

6. **D**

7. **E**

8. **I**

9. **H**

10. **P**

11. **M**

12. **F**

13. **L**

14. **J**

15. **B**

16. **G**

A. **5:46**

B. **3:00**

C. **3:46**

D. **12:08**

E. **3:33**

F. **6:54**

G. **7:53**

H. **12:01**

I. **9:30**

J. **3:59**

K. **4:57**

L. **8:57**

M. **5:18**

N. **9:34**

O. **9:19**

P. **11:21**