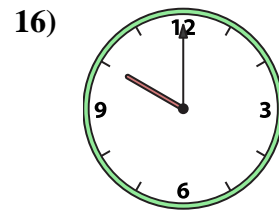
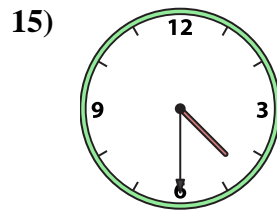
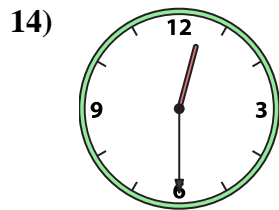
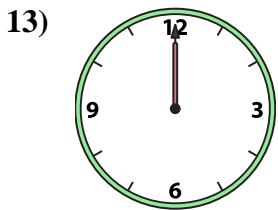
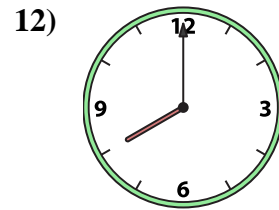
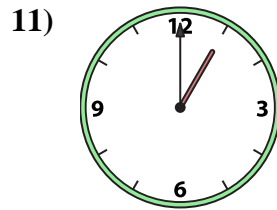
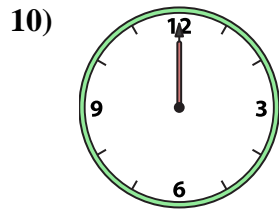
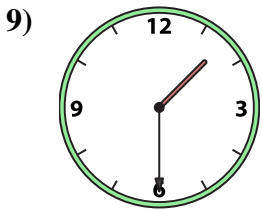
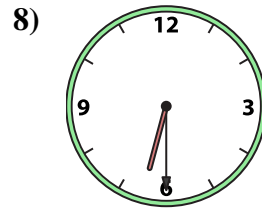
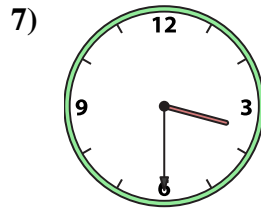
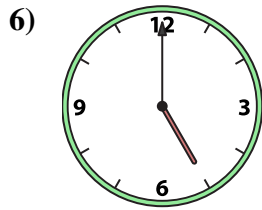
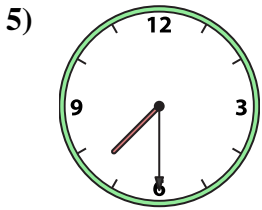
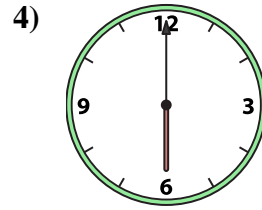
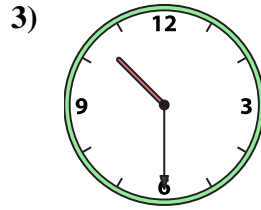
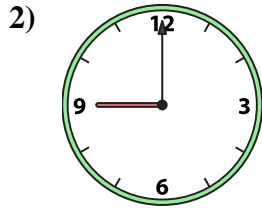
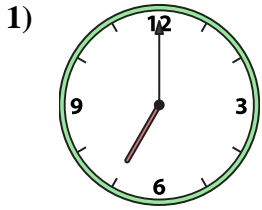




Passen Sie die analoge Uhr an die digitale Uhr an.

Antworten



1. \_\_\_\_\_
2. \_\_\_\_\_
3. \_\_\_\_\_
4. \_\_\_\_\_
5. \_\_\_\_\_
6. \_\_\_\_\_
7. \_\_\_\_\_
8. \_\_\_\_\_
9. \_\_\_\_\_
10. \_\_\_\_\_
11. \_\_\_\_\_
12. \_\_\_\_\_
13. \_\_\_\_\_
14. \_\_\_\_\_
15. \_\_\_\_\_
16. \_\_\_\_\_

A. 7:30

B. 12:00

C. 6:30

D. 9:00

E. 12:30

F. 4:30

G. 12:00

H. 10:30

I. 6:00

J. 1:30

K. 10:00

L. 8:00

M. 5:00

N. 3:30

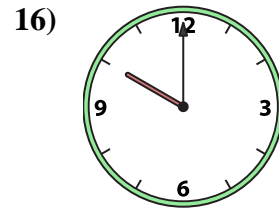
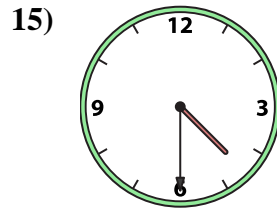
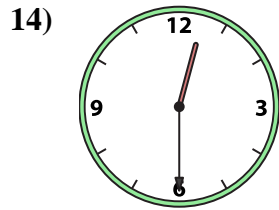
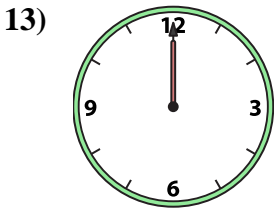
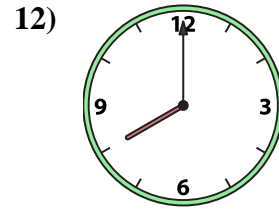
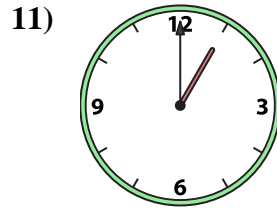
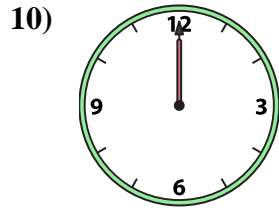
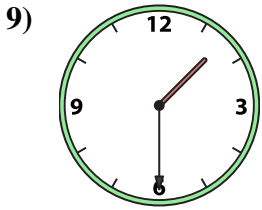
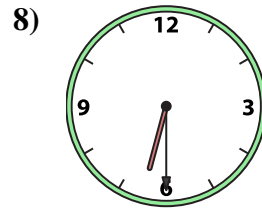
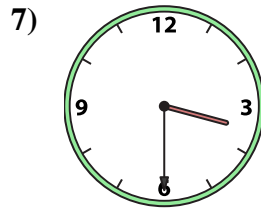
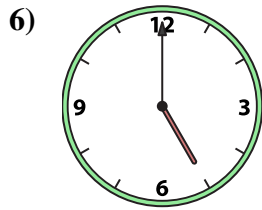
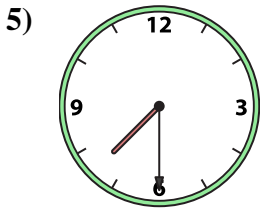
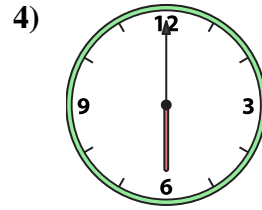
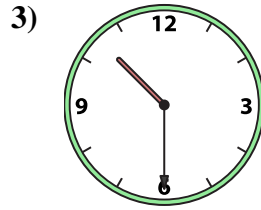
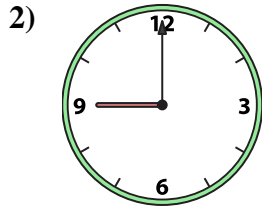
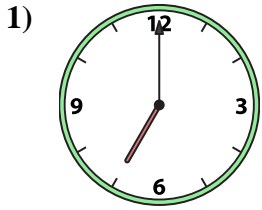
O. 1:00

P. 7:00



Passen Sie die analoge Uhr an die digitale Uhr an.

**Antworten**



A. **7:30**

B. **12:00**

C. **6:30**

D. **9:00**

E. **12:30**

F. **4:30**

G. **12:00**

H. **10:30**

I. **6:00**

J. **1:30**

K. **10:00**

L. **8:00**

M. **5:00**

N. **3:30**

O. **1:00**

P. **7:00**

1. **P**

2. **D**

3. **H**

4. **I**

5. **A**

6. **M**

7. **N**

8. **C**

9. **J**

10. **B**

11. **O**

12. **L**

13. **G**

14. **E**

15. **F**

16. **K**