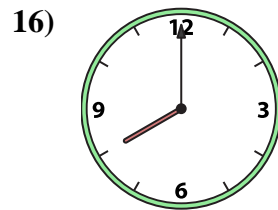
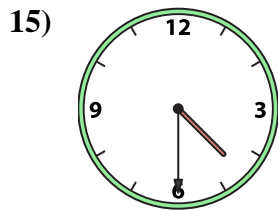
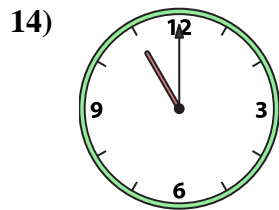
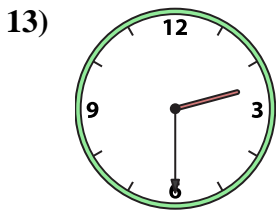
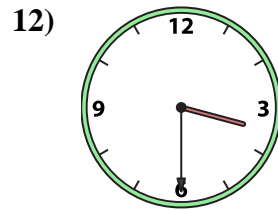
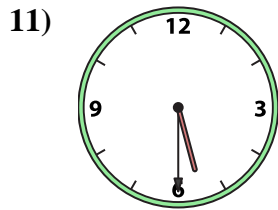
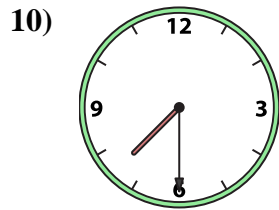

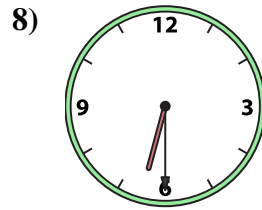
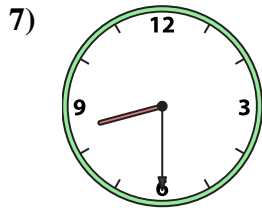
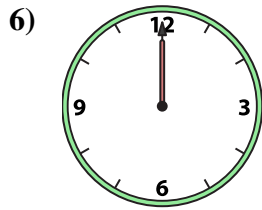
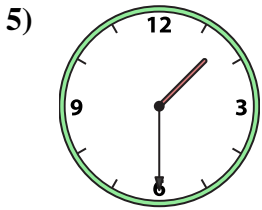
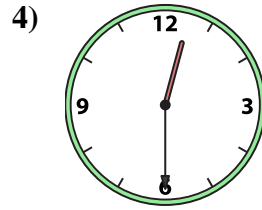
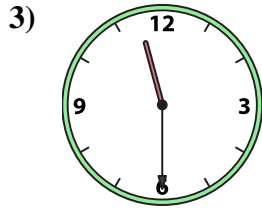
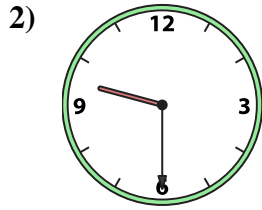





Passen Sie die analoge Uhr an die digitale Uhr an.

**Antworten**



1. \_\_\_\_\_
2. \_\_\_\_\_
3. \_\_\_\_\_
4. \_\_\_\_\_
5. \_\_\_\_\_
6. \_\_\_\_\_
7. \_\_\_\_\_
8. \_\_\_\_\_
9. \_\_\_\_\_
10. \_\_\_\_\_
11. \_\_\_\_\_
12. \_\_\_\_\_
13. \_\_\_\_\_
14. \_\_\_\_\_
15. \_\_\_\_\_
16. \_\_\_\_\_

A.

B.

C.

D.

E.

F.

G.

H.

I.

J.

K.

L.

M.

N.

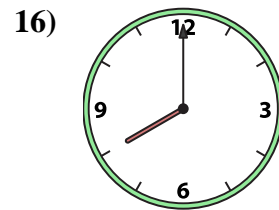
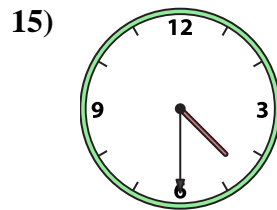
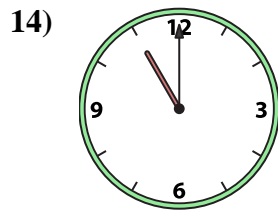
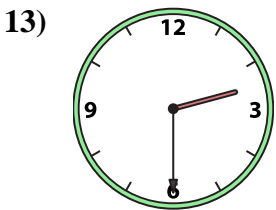
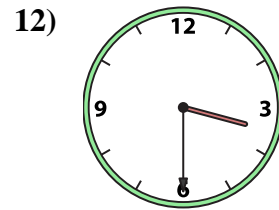
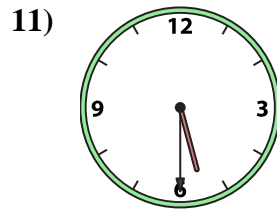
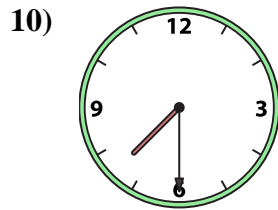

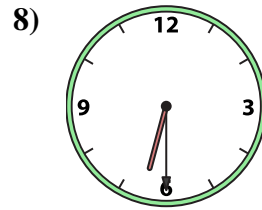
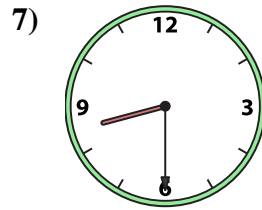
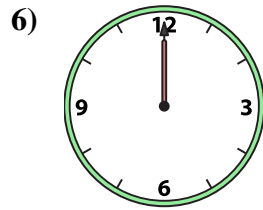
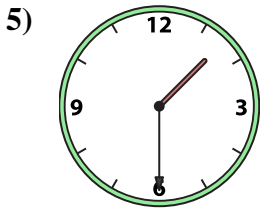
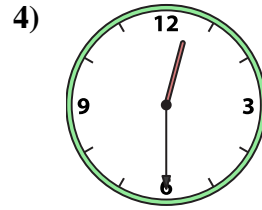
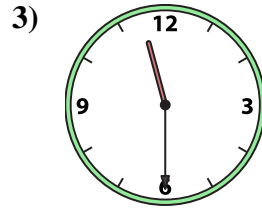
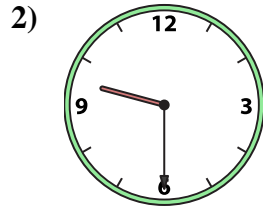

O.

P.



Passen Sie die analoge Uhr an die digitale Uhr an.

Antworten



1. **H**

2. **A**

3. **D**

4. **K**

5. **F**

6. **L**

7. **J**

8. **I**

9. **P**

10. **O**

11. **B**

12. **E**

13. **M**

14. **N**

15. **C**

16. **G**

A. **9:30**

B. **5:30**

C. **4:30**

D. **11:30**

E. **3:30**

F. **1:30**

G. **8:00**

H. **1:00**

I. **6:30**

J. **8:30**

K. **12:30**

L. **12:00**

M. **2:30**

N. **11:00**

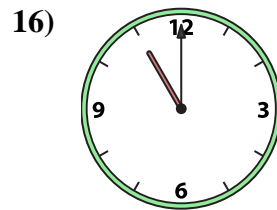
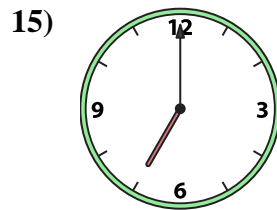
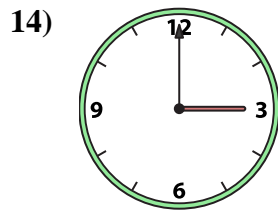
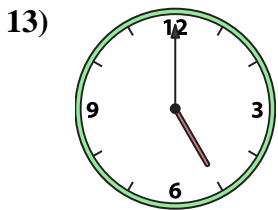
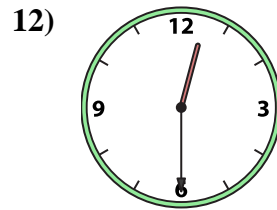
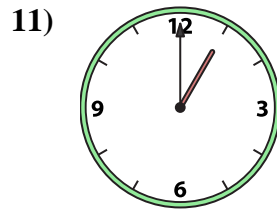
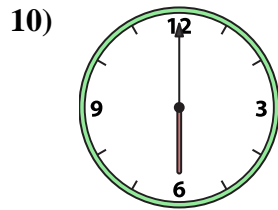
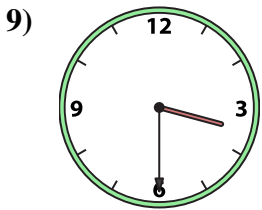
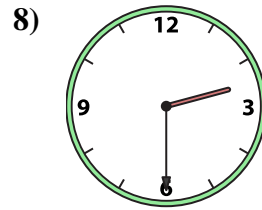
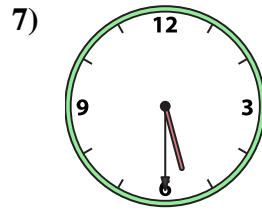
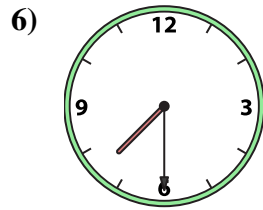
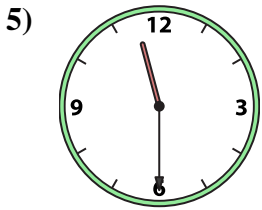
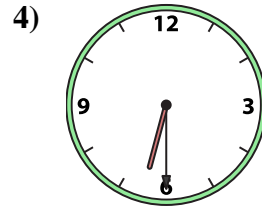
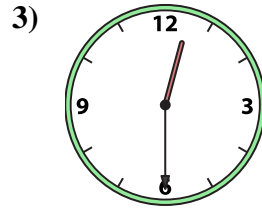
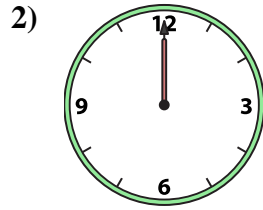
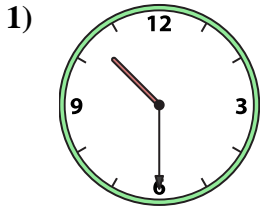
O. **7:30**

P. **4:00**



Passen Sie die analoge Uhr an die digitale Uhr an.

Antworten



1. \_\_\_\_\_
2. \_\_\_\_\_
3. \_\_\_\_\_
4. \_\_\_\_\_
5. \_\_\_\_\_
6. \_\_\_\_\_
7. \_\_\_\_\_
8. \_\_\_\_\_
9. \_\_\_\_\_
10. \_\_\_\_\_
11. \_\_\_\_\_
12. \_\_\_\_\_
13. \_\_\_\_\_
14. \_\_\_\_\_
15. \_\_\_\_\_
16. \_\_\_\_\_

A.

B.

C.

D.

E.

F.

G.

H.

I.

J.

K.

L.

M.

N.

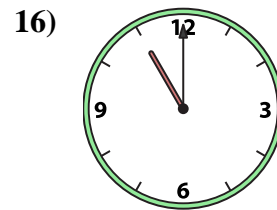
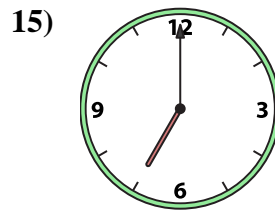
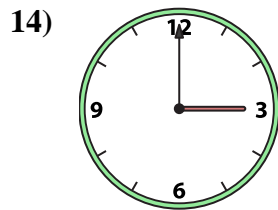
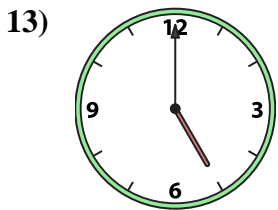
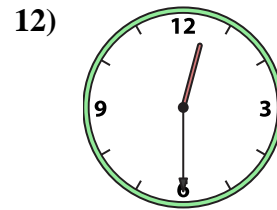
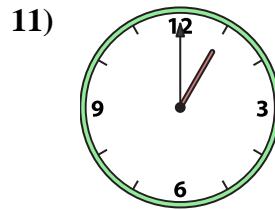
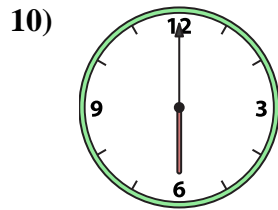
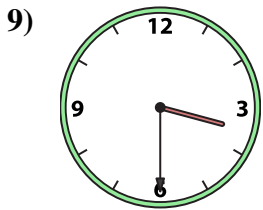
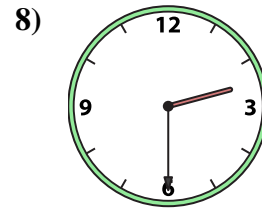
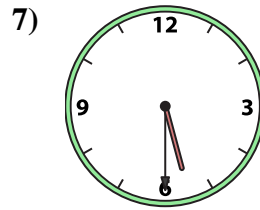
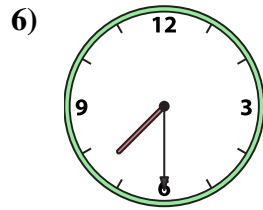
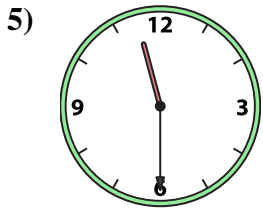
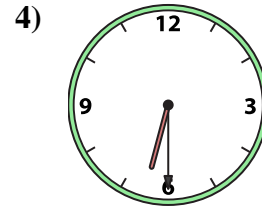
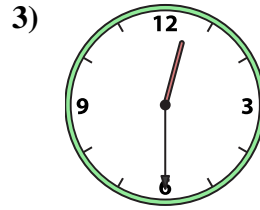
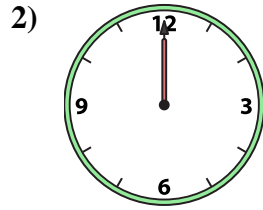
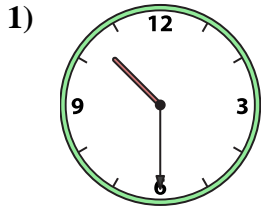
O.

P.



Passen Sie die analoge Uhr an die digitale Uhr an.

Antworten



A.

B.

C.

D.

E.

F.

G.

H.

I.

J.

K.

L.

M.

N.

O.

P.

1.   **B**  

2.   **P**  

3.   **J**  

4.   **L**  

5.   **N**  

6.   **C**  

7.   **F**  

8.   **A**  

9.   **O**  

10.   **D**  

11.   **G**  

12.   **M**  

13.   **H**  

14.   **E**  

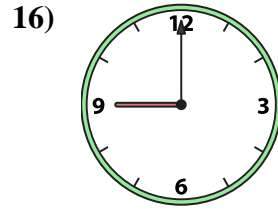
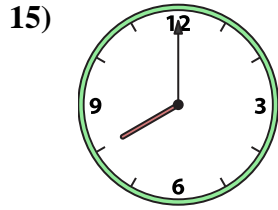
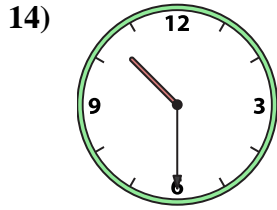
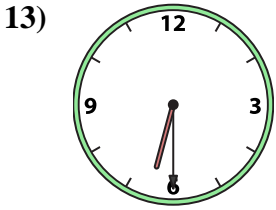

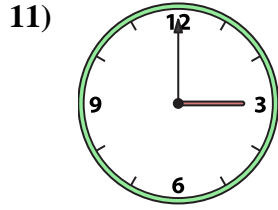
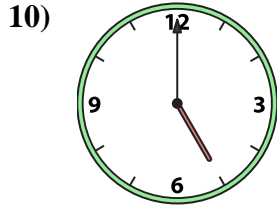
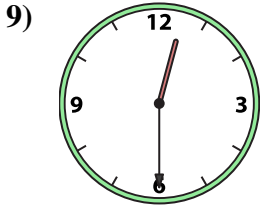
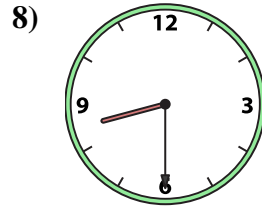
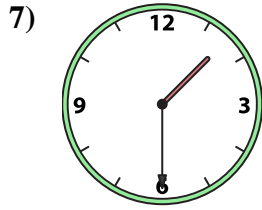

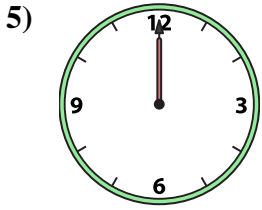
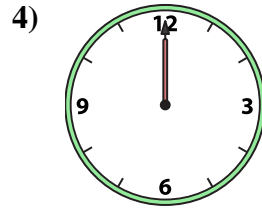
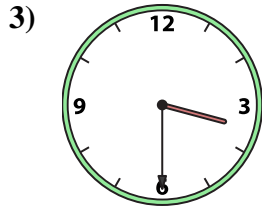
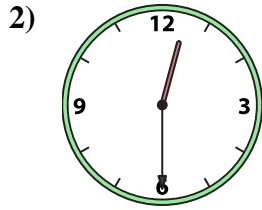

15.   **I**  

16.   **K**



Passen Sie die analoge Uhr an die digitale Uhr an.

Antworten



1. \_\_\_\_\_
2. \_\_\_\_\_
3. \_\_\_\_\_
4. \_\_\_\_\_
5. \_\_\_\_\_
6. \_\_\_\_\_
7. \_\_\_\_\_
8. \_\_\_\_\_
9. \_\_\_\_\_
10. \_\_\_\_\_
11. \_\_\_\_\_
12. \_\_\_\_\_
13. \_\_\_\_\_
14. \_\_\_\_\_
15. \_\_\_\_\_
16. \_\_\_\_\_

A. 3:30

B. 9:00

C. 12:00

D. 12:00

E. 10:30

F. 12:30

G. 8:00

H. 11:00

I. 5:00

J. 1:30

K. 12:30

L. 4:00

M. 3:00

N. 6:30

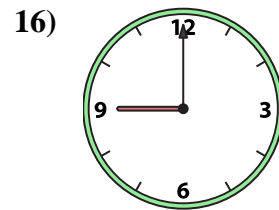
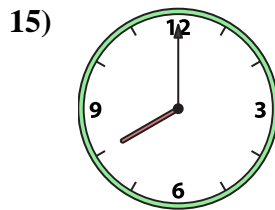
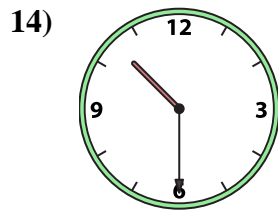
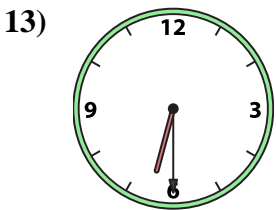
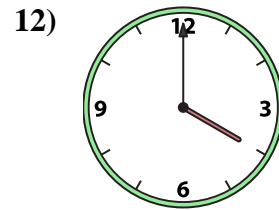
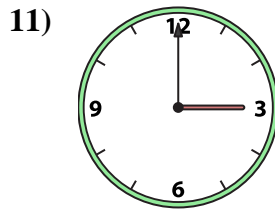
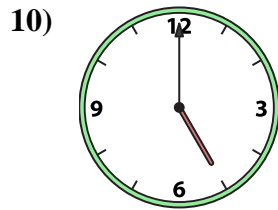
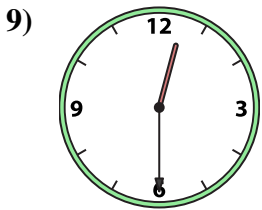
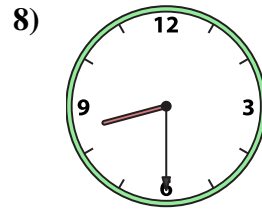
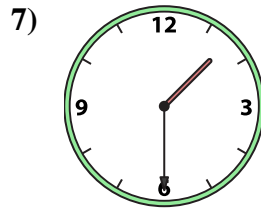
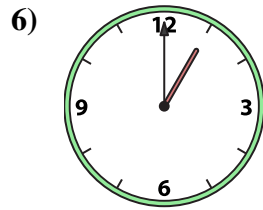
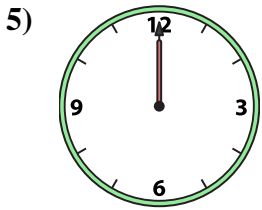
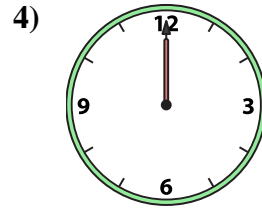
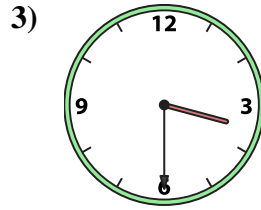
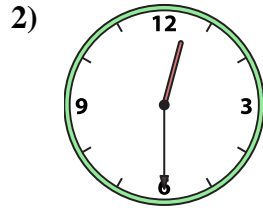

O. 8:30

P. 1:00



Passen Sie die analoge Uhr an die digitale Uhr an.

Antworten



A.

B.

C.

D.

E.

F.

G.

H.

I.

J.

K.

L.

M.

N.

O.

P.

1.   H  

2.   F  

3.   A  

4.   C  

5.   D  

6.   P  

7.   J  

8.   O  

9.   K  

10.   I  

11.   M  

12.   L  

13.   N  

14.   E  

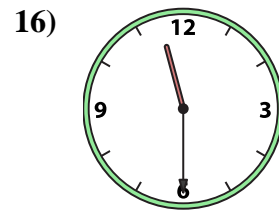
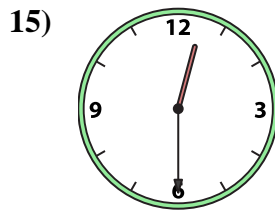
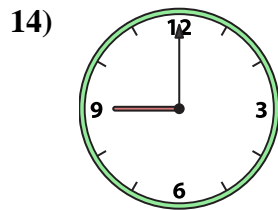
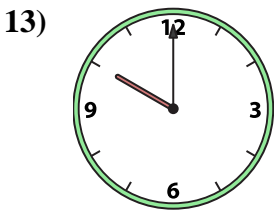
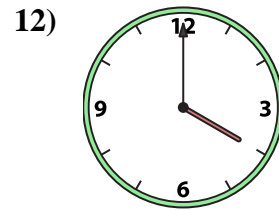
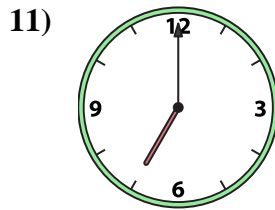
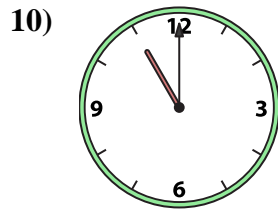
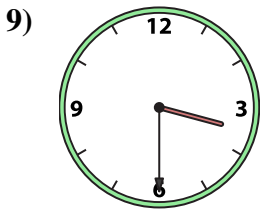
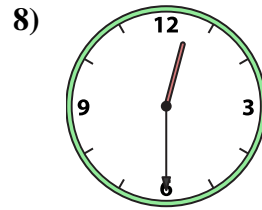
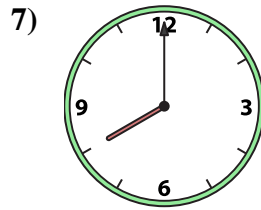
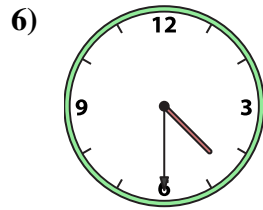
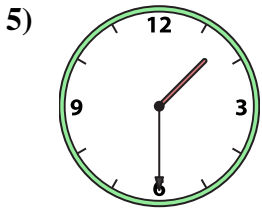
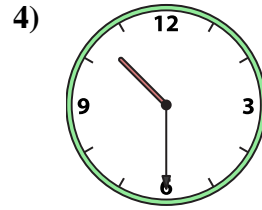
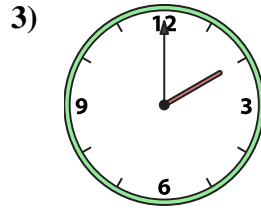
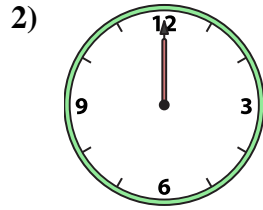
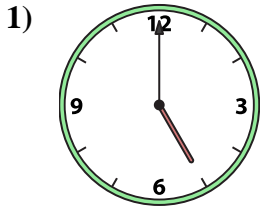
15.   G  

16.   B



Passen Sie die analoge Uhr an die digitale Uhr an.

Antworten



1. \_\_\_\_\_
2. \_\_\_\_\_
3. \_\_\_\_\_
4. \_\_\_\_\_
5. \_\_\_\_\_
6. \_\_\_\_\_
7. \_\_\_\_\_
8. \_\_\_\_\_
9. \_\_\_\_\_
10. \_\_\_\_\_
11. \_\_\_\_\_
12. \_\_\_\_\_
13. \_\_\_\_\_
14. \_\_\_\_\_
15. \_\_\_\_\_
16. \_\_\_\_\_

A. 11:30

B. 9:00

C. 3:30

D. 12:30

E. 1:30

F. 11:00

G. 7:00

H. 4:30

I. 5:00

J. 10:00

K. 4:00

L. 8:00

M. 2:00

N. 12:00

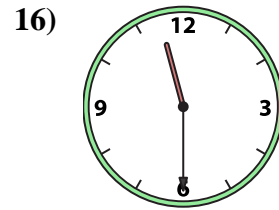
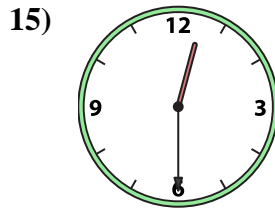
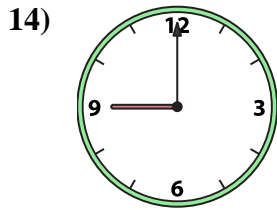
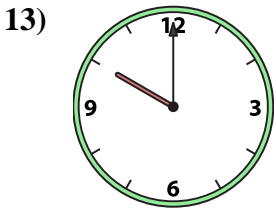
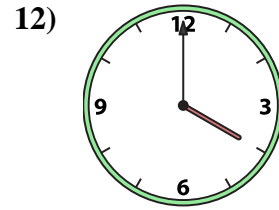
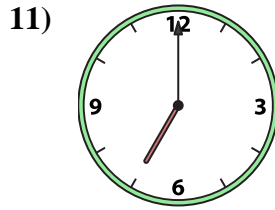
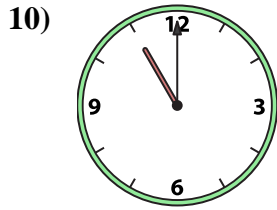
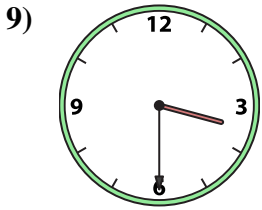
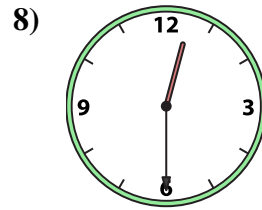
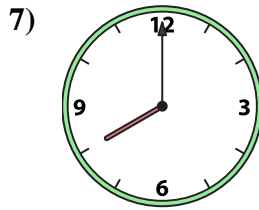
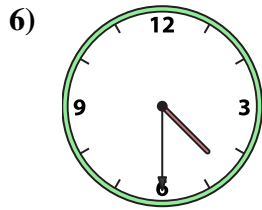
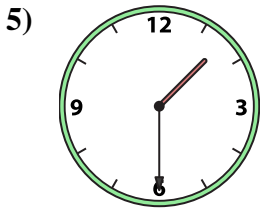
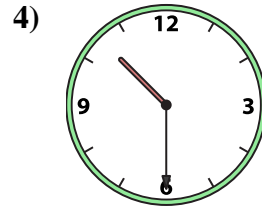
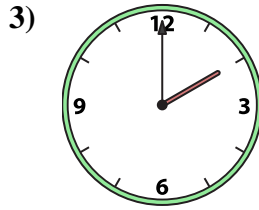
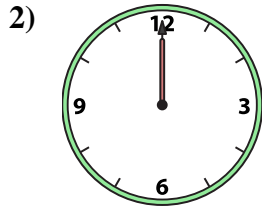
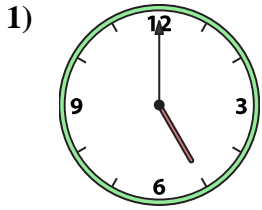
O. 10:30

P. 12:30



Passen Sie die analoge Uhr an die digitale Uhr an.

**Antworten**



A.

B.

C.

D.

E.

F.

G.

H.

I.

J.

K.

L.

M.

N.

O.

P.

1.

2.

3.

4.

5.

6.

7.

8.

9.

10.

11.

12.

13.

14.

15.

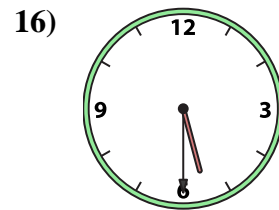
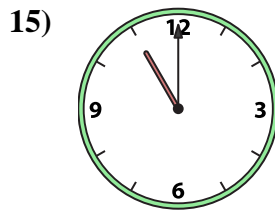
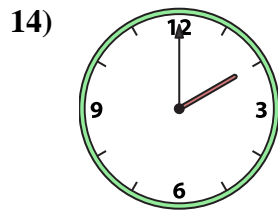
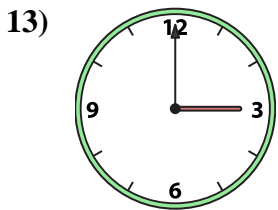
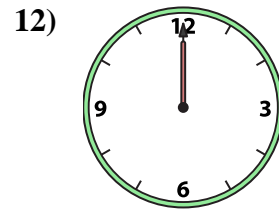
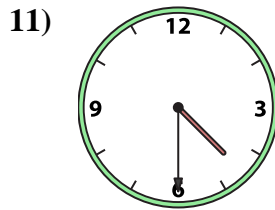
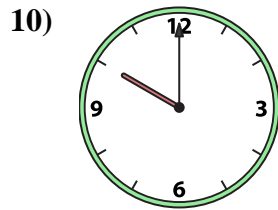
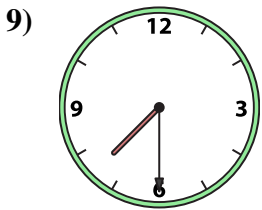
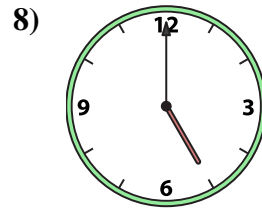
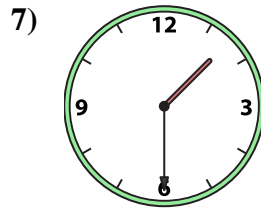
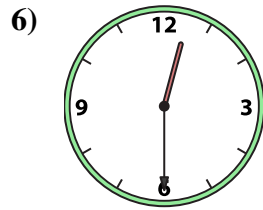
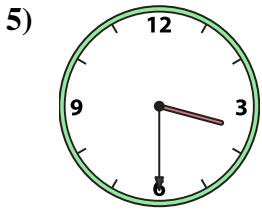
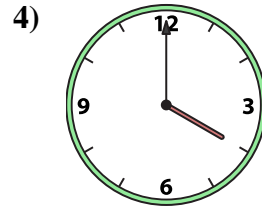
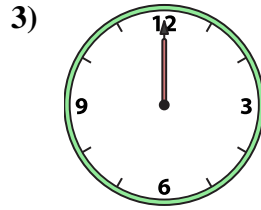
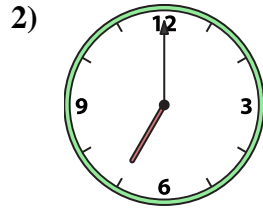

16.





Passen Sie die analoge Uhr an die digitale Uhr an.

**Antworten**



1. \_\_\_\_\_
2. \_\_\_\_\_
3. \_\_\_\_\_
4. \_\_\_\_\_
5. \_\_\_\_\_
6. \_\_\_\_\_
7. \_\_\_\_\_
8. \_\_\_\_\_
9. \_\_\_\_\_
10. \_\_\_\_\_
11. \_\_\_\_\_
12. \_\_\_\_\_
13. \_\_\_\_\_
14. \_\_\_\_\_
15. \_\_\_\_\_
16. \_\_\_\_\_

A.

B.

C.

D.

E.

F.

G.

H.

I.

J.

K.

L.

M.

N.

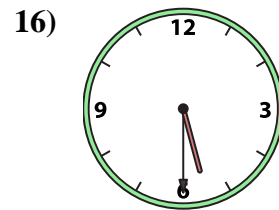
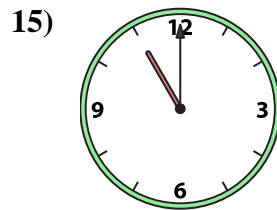
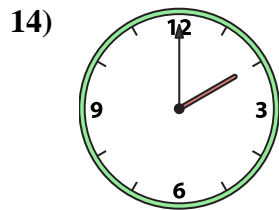
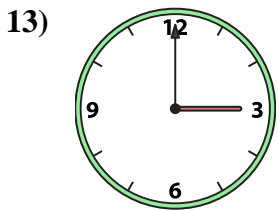
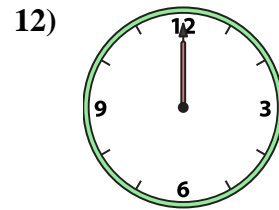
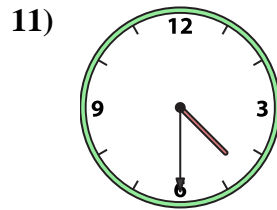
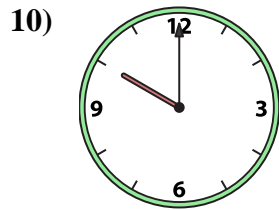
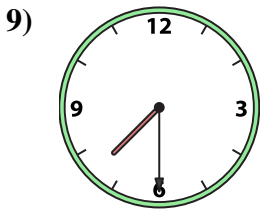
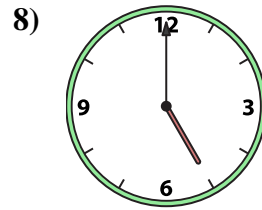
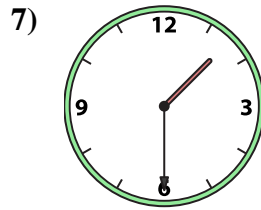
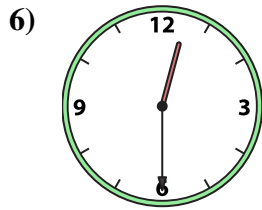
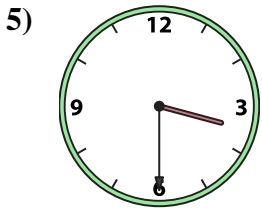
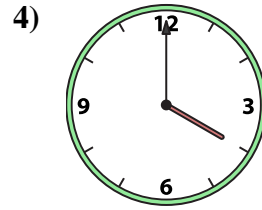
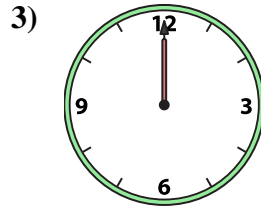
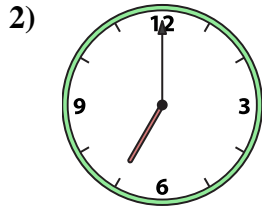

O.

P.



Passen Sie die analoge Uhr an die digitale Uhr an.

Antworten



1. **B**

2. **L**

3. **M**

4. **E**

5. **F**

6. **I**

7. **N**

8. **C**

9. **H**

10. **K**

11. **D**

12. **P**

13. **O**

14. **J**

15. **A**

16. **G**

A. **11:00**

B. **1:00**

C. **5:00**

D. **4:30**

E. **4:00**

F. **3:30**

G. **5:30**

H. **7:30**

I. **12:30**

J. **2:00**

K. **10:00**

L. **7:00**

M. **12:00**

N. **1:30**

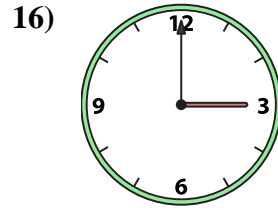
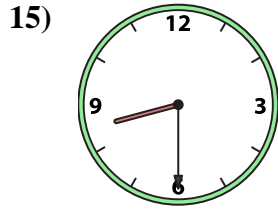
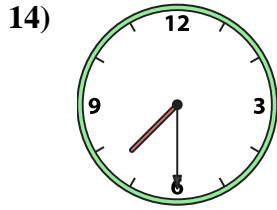
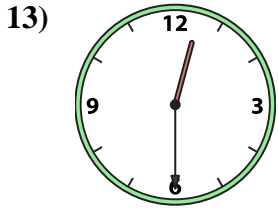
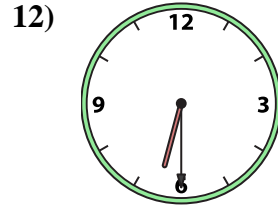
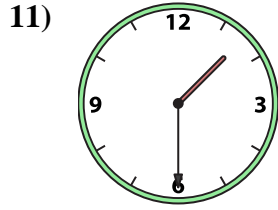
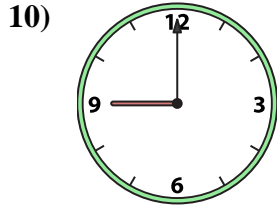
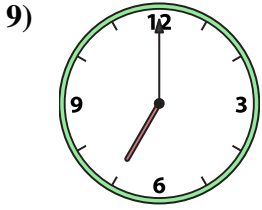
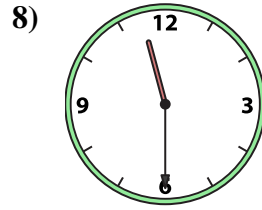
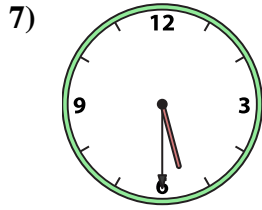

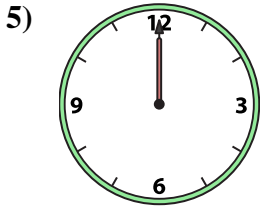
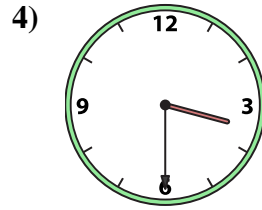
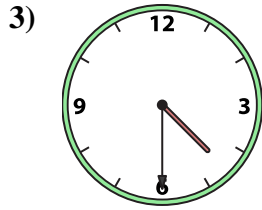

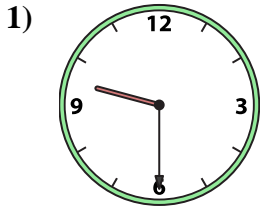
O. **3:00**

P. **12:00**



Passen Sie die analoge Uhr an die digitale Uhr an.

Antworten



A. 5:30

B. 3:00

C. 3:30

D. 12:00

E. 6:30

F. 7:30

G. 9:30

H. 4:30

I. 8:30

J. 5:00

K. 9:00

L. 11:00

M. 7:00

N. 1:30

O. 12:30

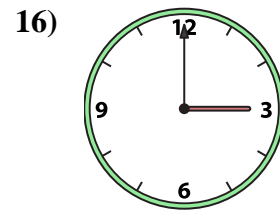
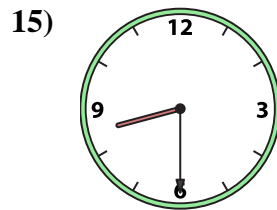
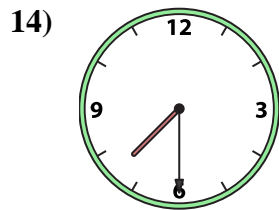
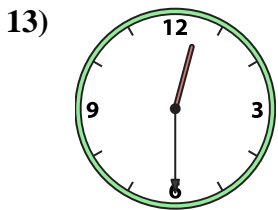
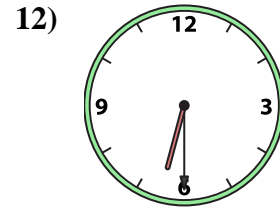
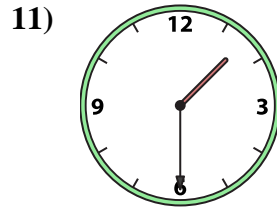
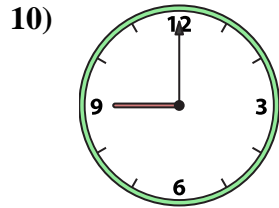

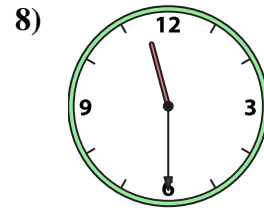
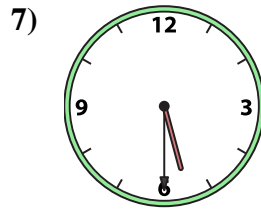
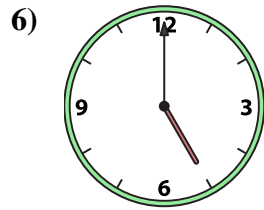
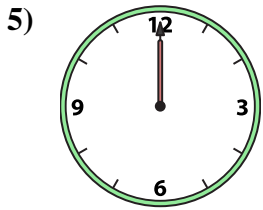
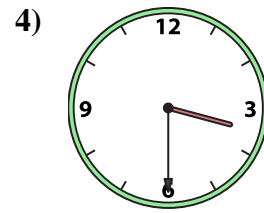
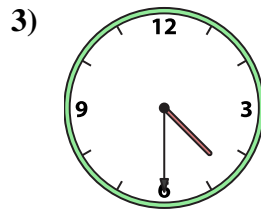
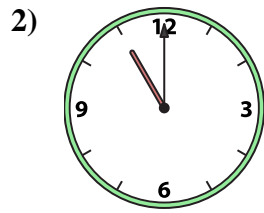
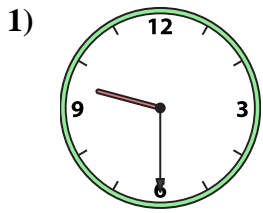
P. 11:30

1. \_\_\_\_\_
2. \_\_\_\_\_
3. \_\_\_\_\_
4. \_\_\_\_\_
5. \_\_\_\_\_
6. \_\_\_\_\_
7. \_\_\_\_\_
8. \_\_\_\_\_
9. \_\_\_\_\_
10. \_\_\_\_\_
11. \_\_\_\_\_
12. \_\_\_\_\_
13. \_\_\_\_\_
14. \_\_\_\_\_
15. \_\_\_\_\_
16. \_\_\_\_\_



Passen Sie die analoge Uhr an die digitale Uhr an.

Antworten



A.

B.

C.

D.

E.

F.

G.

H.

I.

J.

K.

L.

M.

N.

O.

P.

1.   **G**  

2.   **L**  

3.   **H**  

4.   **C**  

5.   **D**  

6.   **J**  

7.   **A**  

8.   **P**  

9.   **M**  

10.   **K**  

11.   **N**  

12.   **E**  

13.   **O**  

14.   **F**  

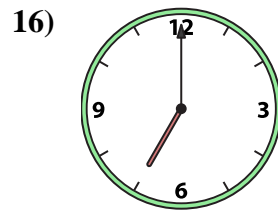
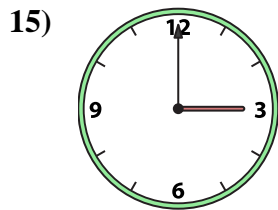
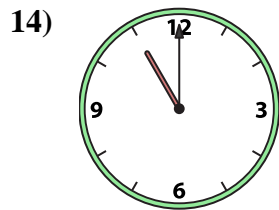
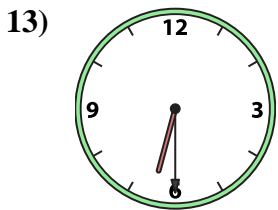
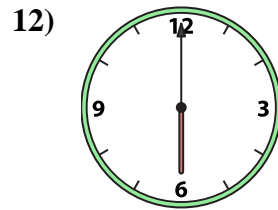
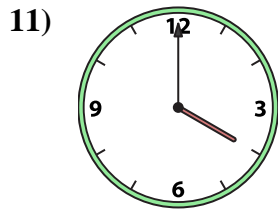
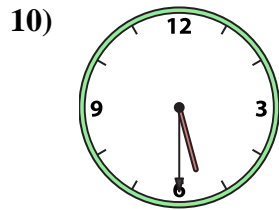

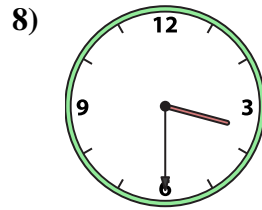
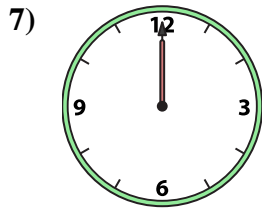
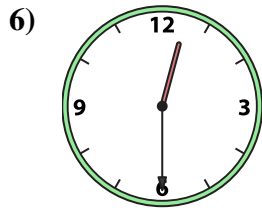
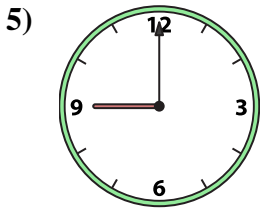
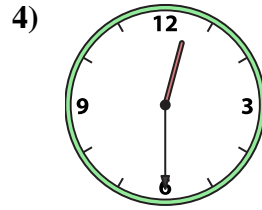

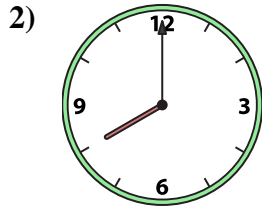

15.   **I**  

16.   **B**



Passen Sie die analoge Uhr an die digitale Uhr an.

Antworten



1. \_\_\_\_\_
2. \_\_\_\_\_
3. \_\_\_\_\_
4. \_\_\_\_\_
5. \_\_\_\_\_
6. \_\_\_\_\_
7. \_\_\_\_\_
8. \_\_\_\_\_
9. \_\_\_\_\_
10. \_\_\_\_\_
11. \_\_\_\_\_
12. \_\_\_\_\_
13. \_\_\_\_\_
14. \_\_\_\_\_
15. \_\_\_\_\_
16. \_\_\_\_\_

A. 10:00

B. 3:30

C. 1:00

D. 12:30

E. 12:00

F. 3:00

G. 6:00

H. 5:30

I. 2:00

J. 12:30

K. 11:00

L. 9:00

M. 6:30

N. 4:00

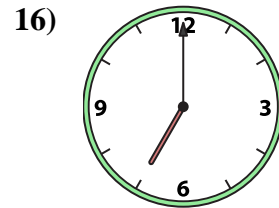
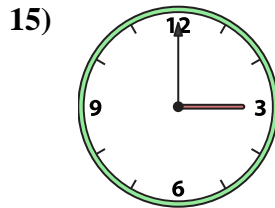
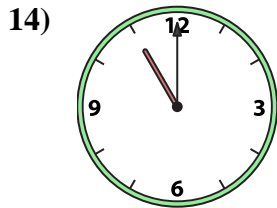
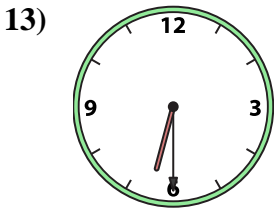
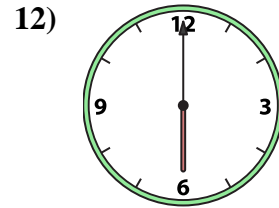
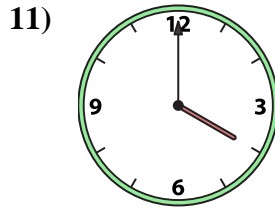
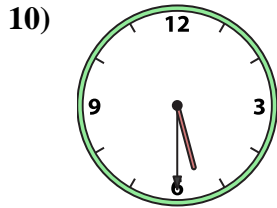

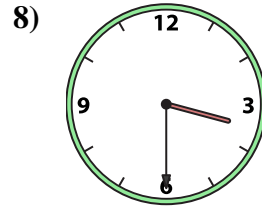
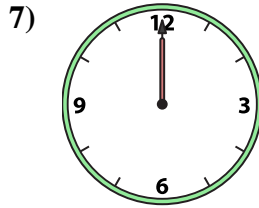
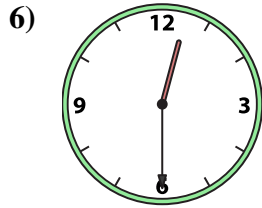
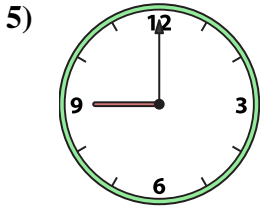
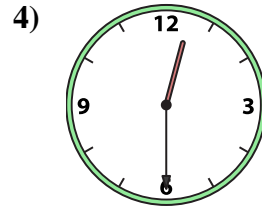
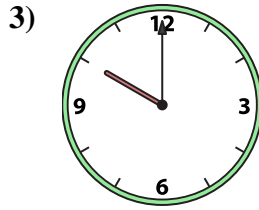
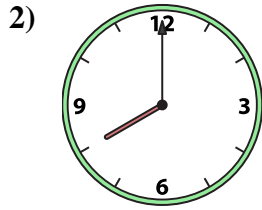

O. 8:00

P. 7:00



Passen Sie die analoge Uhr an die digitale Uhr an.

**Antworten**



1. **C**

2. **O**

3. **A**

4. **J**

5. **L**

6. **D**

7. **E**

8. **B**

9. **I**

10. **H**

11. **N**

12. **G**

13. **M**

14. **K**

15. **F**

16. **P**

A. **10:00**

B. **3:30**

C. **1:00**

D. **12:30**

E. **12:00**

F. **3:00**

G. **6:00**

H. **5:30**

I. **2:00**

J. **12:30**

K. **11:00**

L. **9:00**

M. **6:30**

N. **4:00**

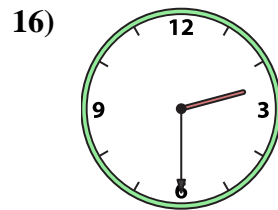
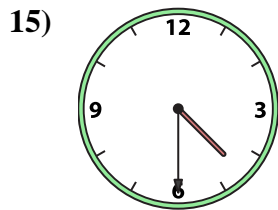
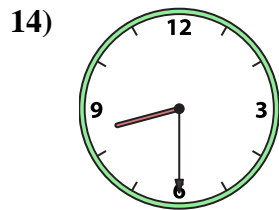
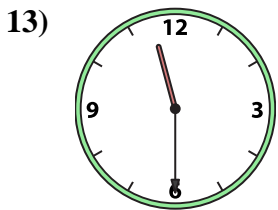
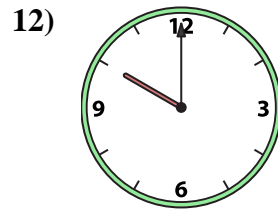
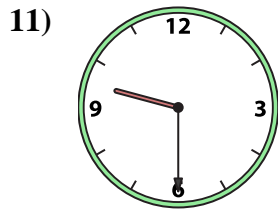
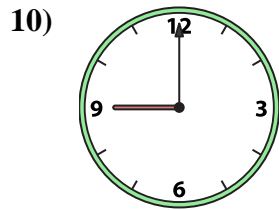
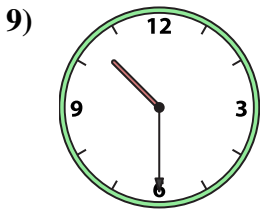
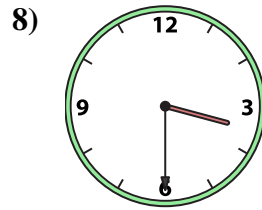
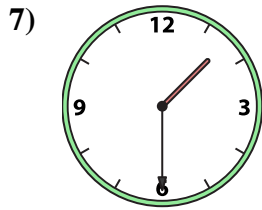
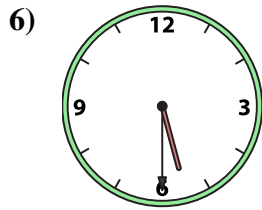
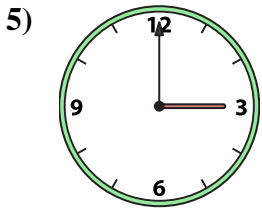
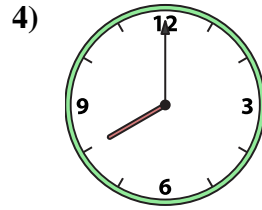
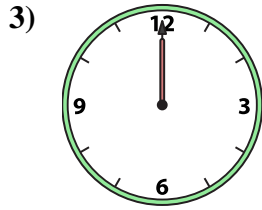

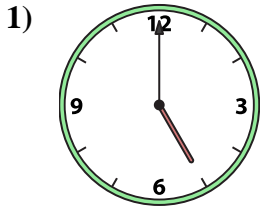
O. **8:00**

P. **7:00**



Passen Sie die analoge Uhr an die digitale Uhr an.

Antworten



1. \_\_\_\_\_
2. \_\_\_\_\_
3. \_\_\_\_\_
4. \_\_\_\_\_
5. \_\_\_\_\_
6. \_\_\_\_\_
7. \_\_\_\_\_
8. \_\_\_\_\_
9. \_\_\_\_\_
10. \_\_\_\_\_
11. \_\_\_\_\_
12. \_\_\_\_\_
13. \_\_\_\_\_
14. \_\_\_\_\_
15. \_\_\_\_\_
16. \_\_\_\_\_

A.

B.

C.

D.

E.

F.

G.

H.

I.

J.

K.

L.

M.

N.

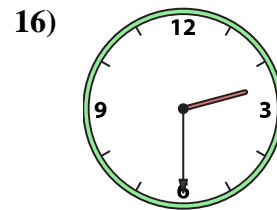
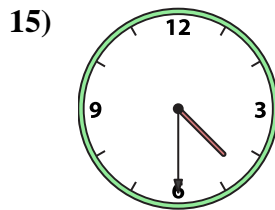
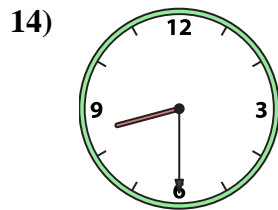
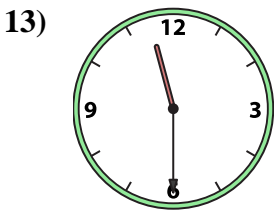
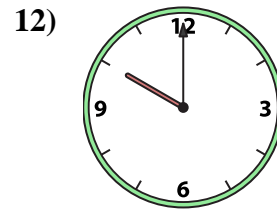
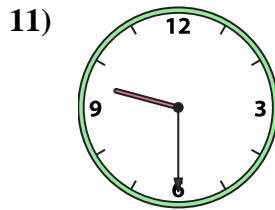
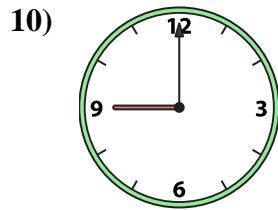
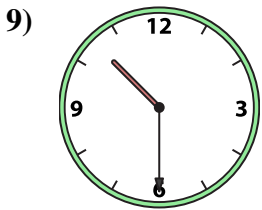
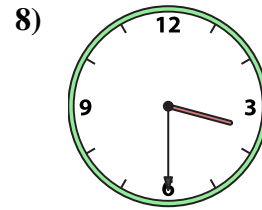
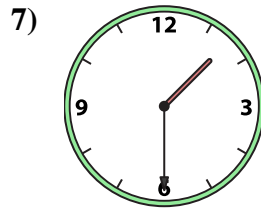
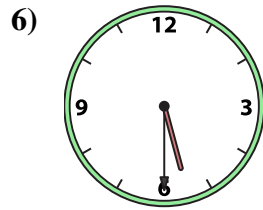
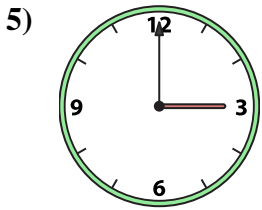
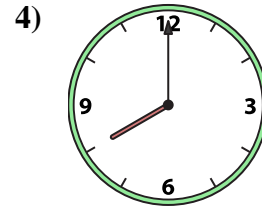
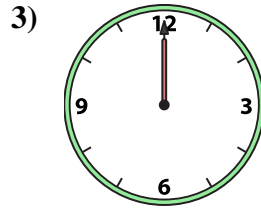
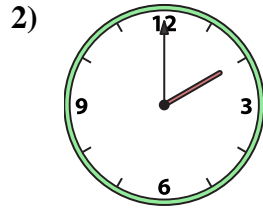
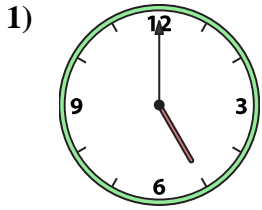
O.

P.



Passen Sie die analoge Uhr an die digitale Uhr an.

**Antworten**



A. **12:00**

B. **8:00**

C. **1:30**

D. **3:00**

E. **2:30**

F. **4:30**

G. **2:00**

H. **10:30**

I. **9:00**

J. **10:00**

K. **5:30**

L. **9:30**

M. **8:30**

N. **5:00**

O. **11:30**

P. **3:30**

1. **N**

2. **G**

3. **A**

4. **B**

5. **D**

6. **K**

7. **C**

8. **P**

9. **H**

10. **I**

11. **L**

12. **J**

13. **O**

14. **M**

15. **F**

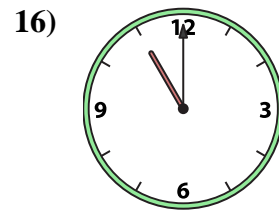
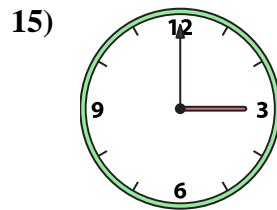
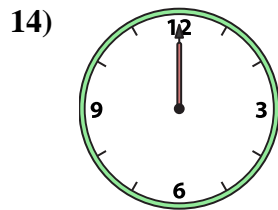
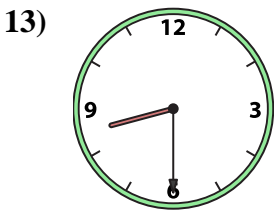
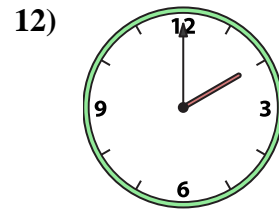
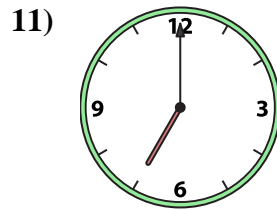
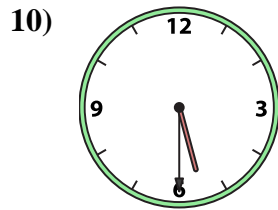
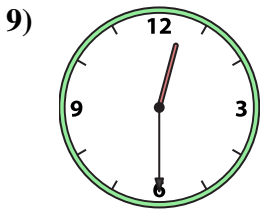
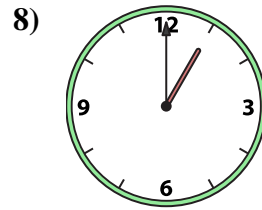
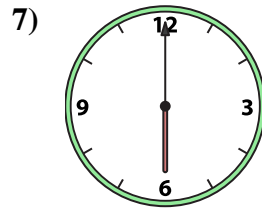
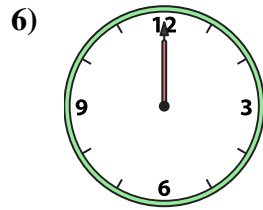
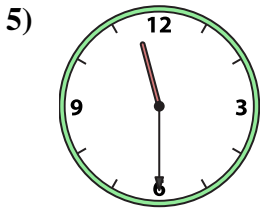
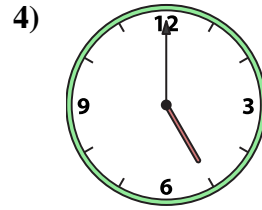
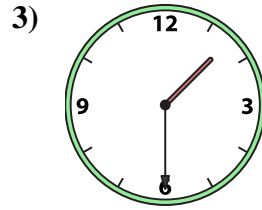
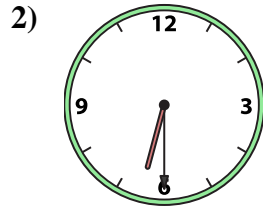
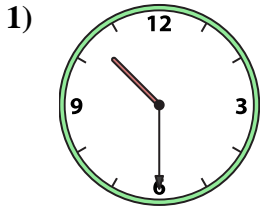
16. **E**





Passen Sie die analoge Uhr an die digitale Uhr an.

Antworten



1. \_\_\_\_\_
2. \_\_\_\_\_
3. \_\_\_\_\_
4. \_\_\_\_\_
5. \_\_\_\_\_
6. \_\_\_\_\_
7. \_\_\_\_\_
8. \_\_\_\_\_
9. \_\_\_\_\_
10. \_\_\_\_\_
11. \_\_\_\_\_
12. \_\_\_\_\_
13. \_\_\_\_\_
14. \_\_\_\_\_
15. \_\_\_\_\_
16. \_\_\_\_\_

A. 6:00

B. 1:30

C. 6:30

D. 12:00

E. 2:00

F. 12:30

G. 10:30

H. 1:00

I. 8:30

J. 5:30

K. 11:00

L. 5:00

M. 12:00

N. 7:00

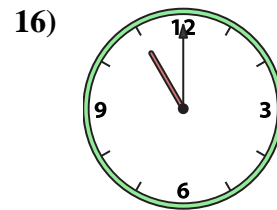
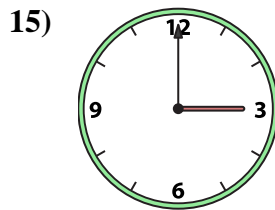
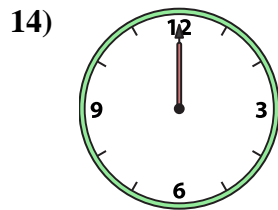
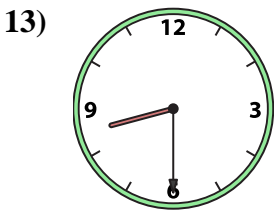
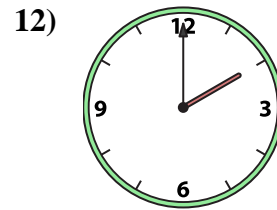
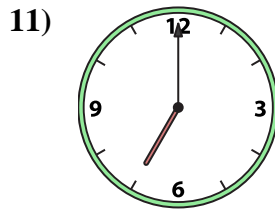
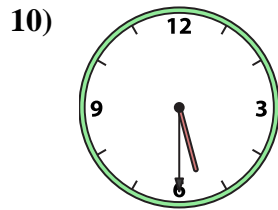
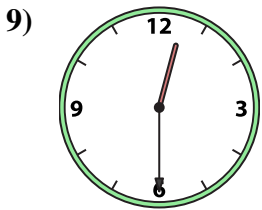
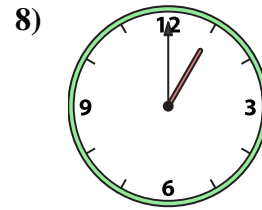
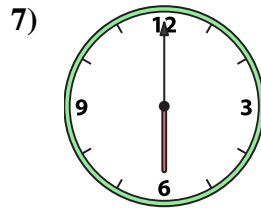
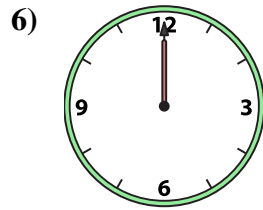
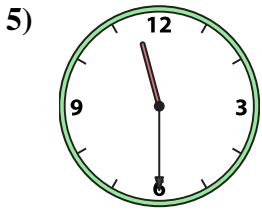
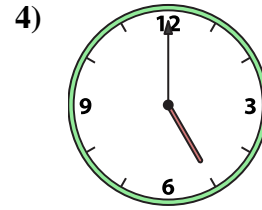
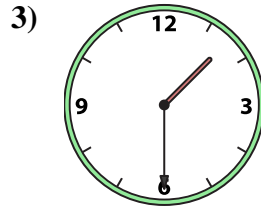
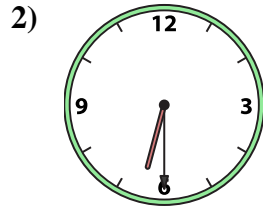
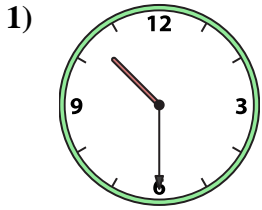
O. 3:00

P. 11:30



Passen Sie die analoge Uhr an die digitale Uhr an.

Antworten



A.

B.

C.

D.

E.

F.

G.

H.

I.

J.

K.

L.

M.

N.

O.

P.

1.   **G**  

2.   **C**  

3.   **B**  

4.   **L**  

5.   **P**  

6.   **D**  

7.   **A**  

8.   **H**  

9.   **F**  

10.   **J**  

11.   **N**  

12.   **E**  

13.   **I**  

14.   **M**  

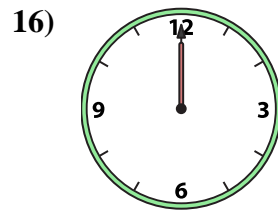

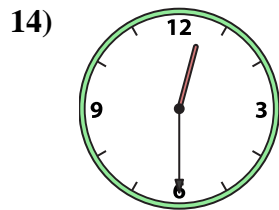
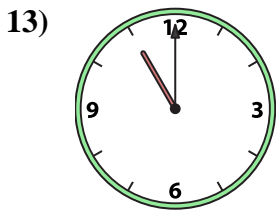
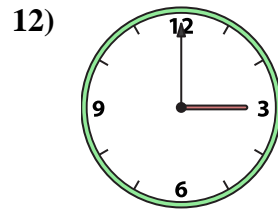
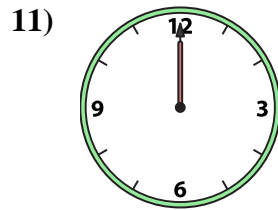
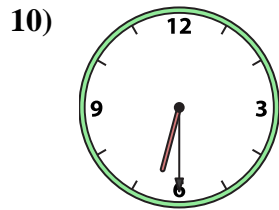
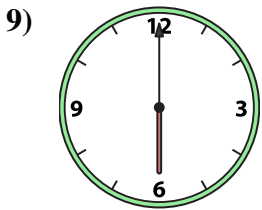
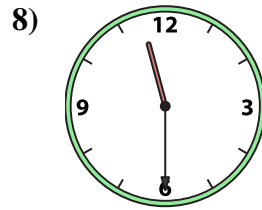
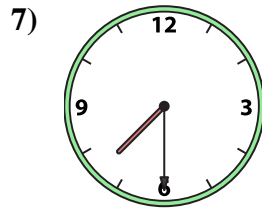
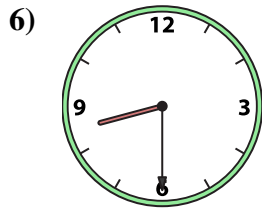
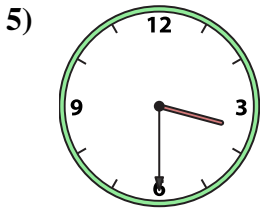
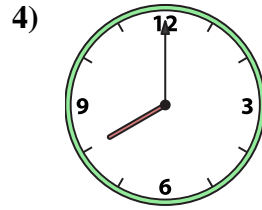
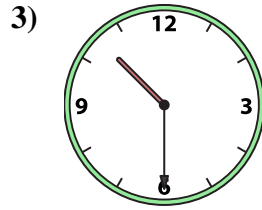


15.   **O**  

16.   **K**



Passen Sie die analoge Uhr an die digitale Uhr an.

Antworten



1. \_\_\_\_\_
2. \_\_\_\_\_
3. \_\_\_\_\_
4. \_\_\_\_\_
5. \_\_\_\_\_
6. \_\_\_\_\_
7. \_\_\_\_\_
8. \_\_\_\_\_
9. \_\_\_\_\_
10. \_\_\_\_\_
11. \_\_\_\_\_
12. \_\_\_\_\_
13. \_\_\_\_\_
14. \_\_\_\_\_
15. \_\_\_\_\_
16. \_\_\_\_\_

A. 10:30

B. 2:00

C. 7:30

D. 12:30

E. 6:30

F. 1:00

G. 12:00

H. 6:00

I. 3:30

J. 3:00

K. 11:30

L. 5:00

M. 8:00

N. 12:00

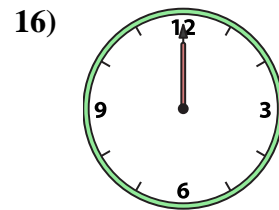

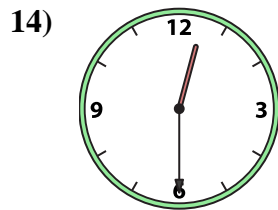
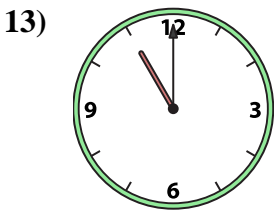
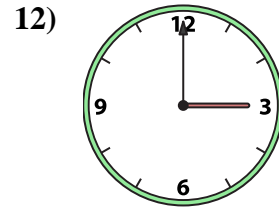
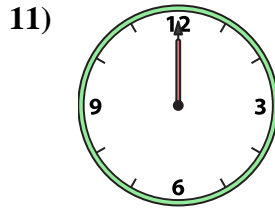
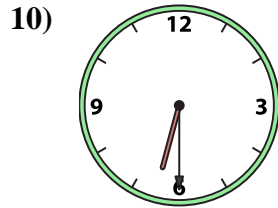
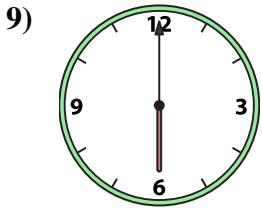
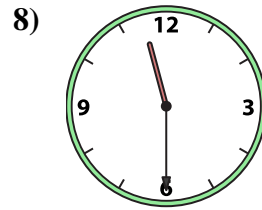
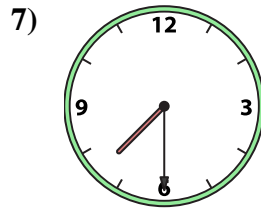
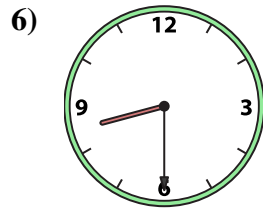
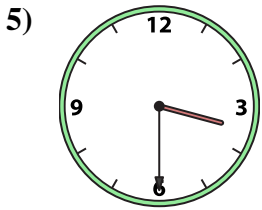
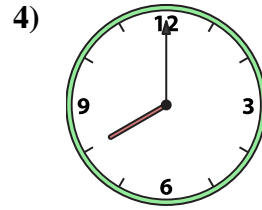
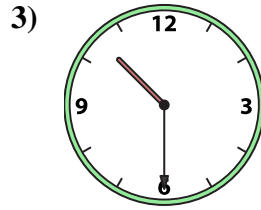
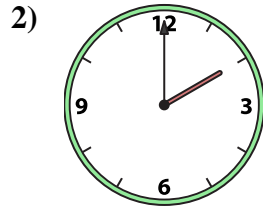

O. 11:00

P. 8:30



Passen Sie die analoge Uhr an die digitale Uhr an.

**Antworten**



A. **10:30**

B. **2:00**

C. **7:30**

D. **12:30**

E. **6:30**

F. **1:00**

G. **12:00**

H. **6:00**

I. **3:30**

J. **3:00**

K. **11:30**

L. **5:00**

M. **8:00**

N. **12:00**

O. **11:00**

P. **8:30**

1. **F**

2. **B**

3. **A**

4. **M**

5. **I**

6. **P**

7. **C**

8. **K**

9. **H**

10. **E**

11. **N**

12. **J**

13. **O**

14. **D**

15. **L**

16. **G**