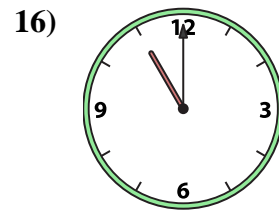
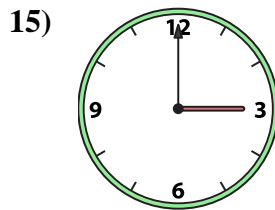
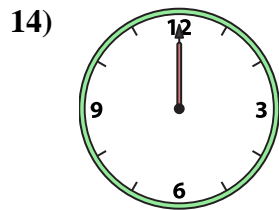
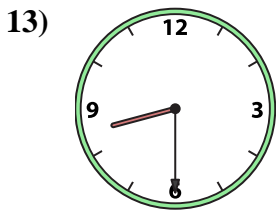
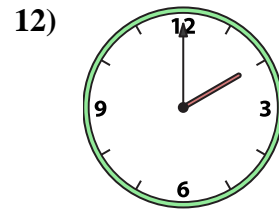
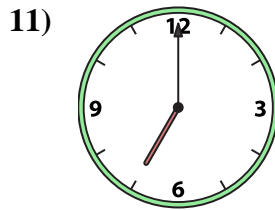
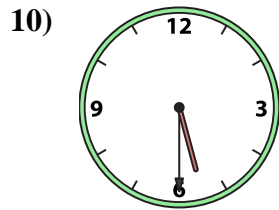
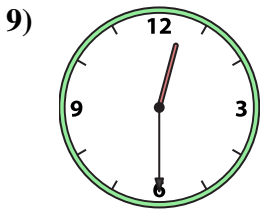
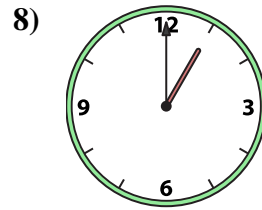
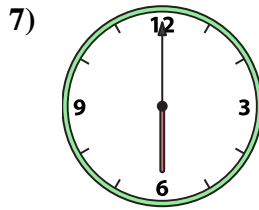
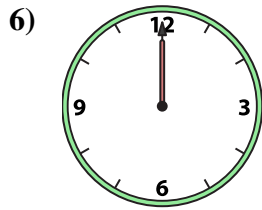
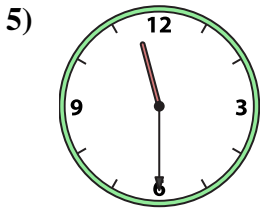
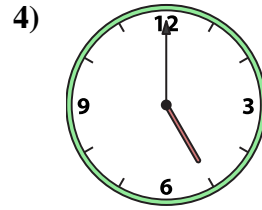
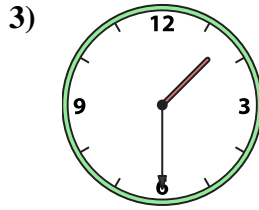
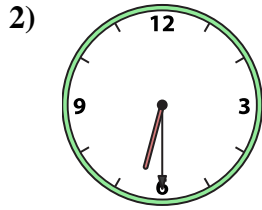
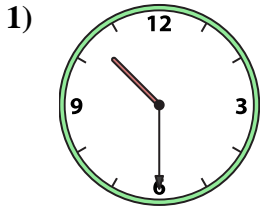




Passen Sie die analoge Uhr an die digitale Uhr an.

Antworten



1. \_\_\_\_\_
2. \_\_\_\_\_
3. \_\_\_\_\_
4. \_\_\_\_\_
5. \_\_\_\_\_
6. \_\_\_\_\_
7. \_\_\_\_\_
8. \_\_\_\_\_
9. \_\_\_\_\_
10. \_\_\_\_\_
11. \_\_\_\_\_
12. \_\_\_\_\_
13. \_\_\_\_\_
14. \_\_\_\_\_
15. \_\_\_\_\_
16. \_\_\_\_\_

A. 6:00

B. 1:30

C. 6:30

D. 12:00

E. 2:00

F. 12:30

G. 10:30

H. 1:00

I. 8:30

J. 5:30

K. 11:00

L. 5:00

M. 12:00

N. 7:00

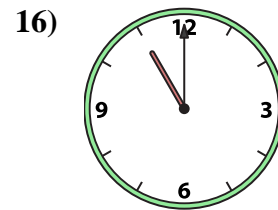
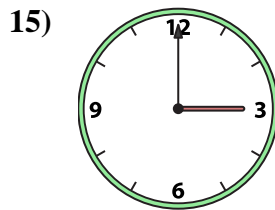
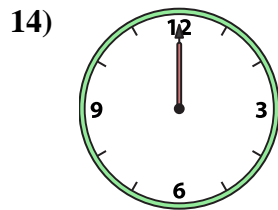
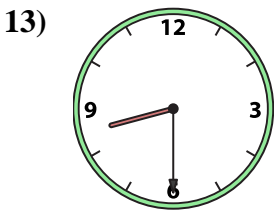
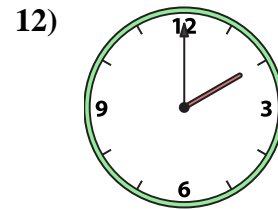
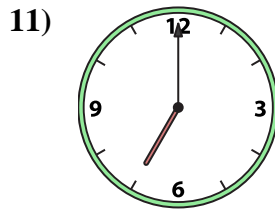
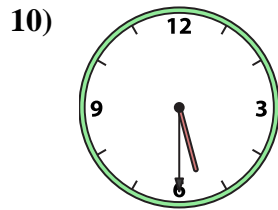
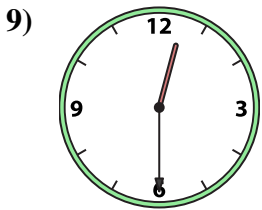
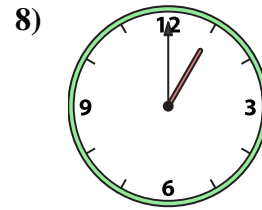
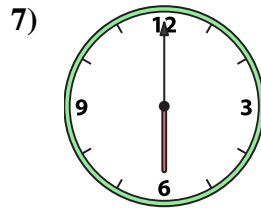
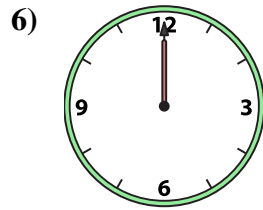
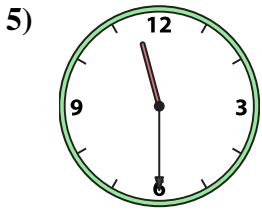
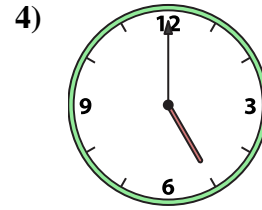
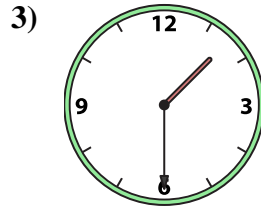
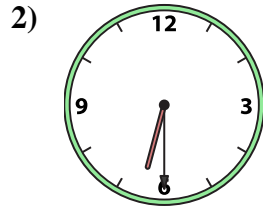
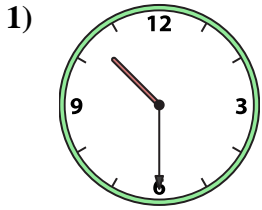
O. 3:00

P. 11:30



Passen Sie die analoge Uhr an die digitale Uhr an.

Antworten



1.   **G**  

2.   **C**  

3.   **B**  

4.   **L**  

5.   **P**  

6.   **D**  

7.   **A**  

8.   **H**  

9.   **F**  

10.   **J**  

11.   **N**  

12.   **E**  

13.   **I**  

14.   **M**  

15.   **O**  

16.   **K**  

A.   **6:00**  

B.   **1:30**  

C.   **6:30**  

D.   **12:00**  

E.   **2:00**  

F.   **12:30**  

G.   **10:30**  

H.   **1:00**  

I.   **8:30**  

J.   **5:30**  

K.   **11:00**  

L.   **5:00**  

M.   **12:00**  

N.   **7:00**  

O.   **3:00**  

P.   **11:30**