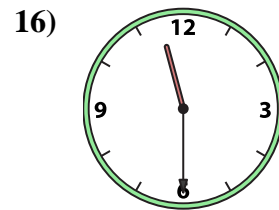
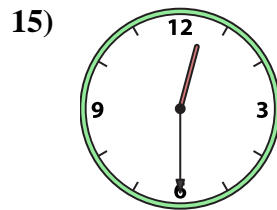
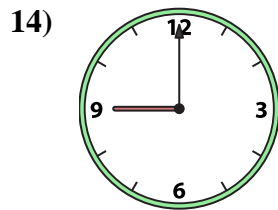
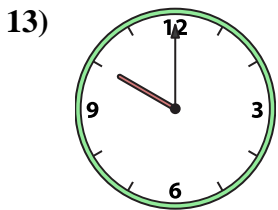
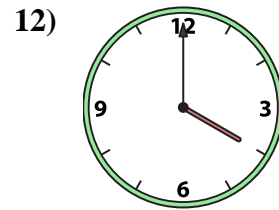
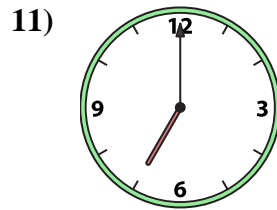
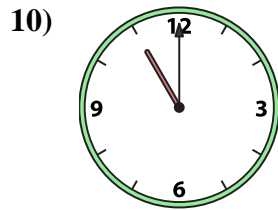
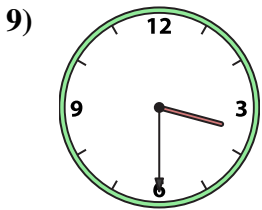
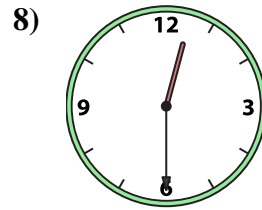
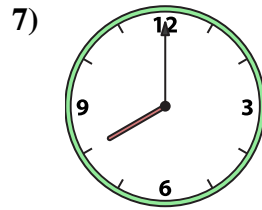
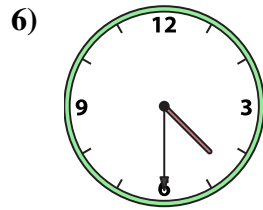
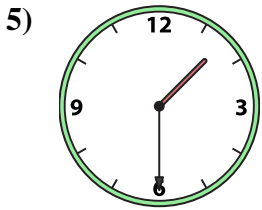
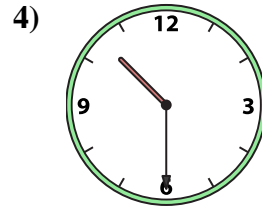
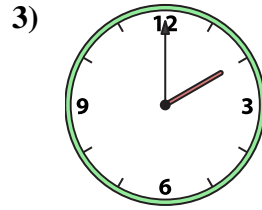
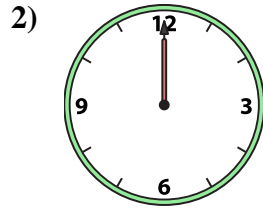
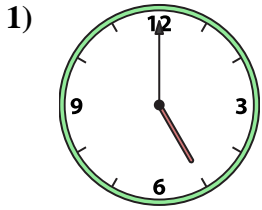




Passen Sie die analoge Uhr an die digitale Uhr an.

Antworten



1. _____
2. _____
3. _____
4. _____
5. _____
6. _____
7. _____
8. _____
9. _____
10. _____
11. _____
12. _____
13. _____
14. _____
15. _____
16. _____

A. 11:30

B. 9:00

C. 3:30

D. 12:30

E. 1:30

F. 11:00

G. 7:00

H. 4:30

I. 5:00

J. 10:00

K. 4:00

L. 8:00

M. 2:00

N. 12:00

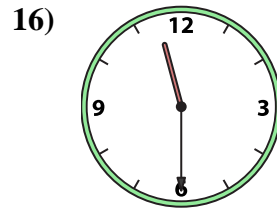
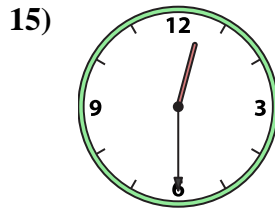
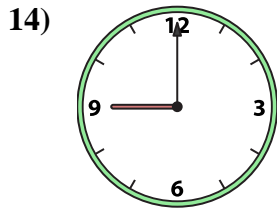
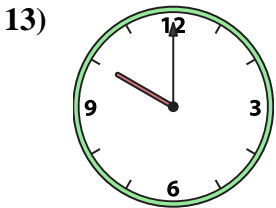
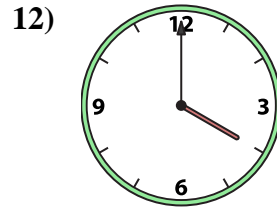
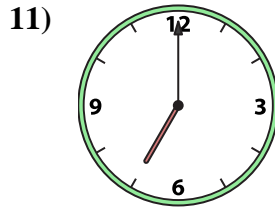
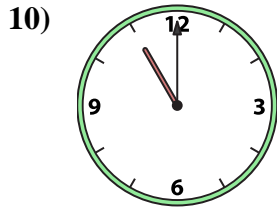
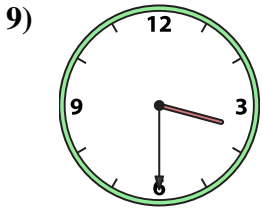
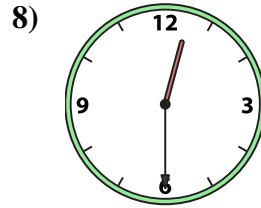
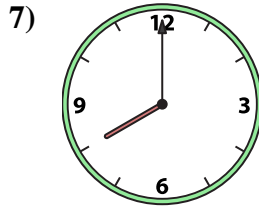
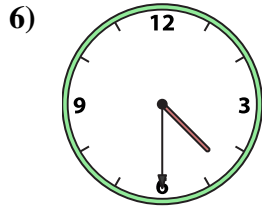
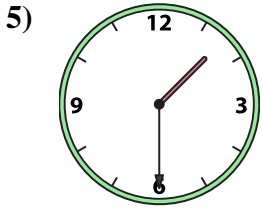
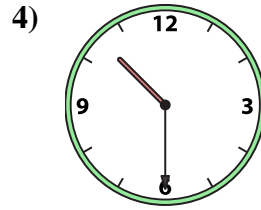
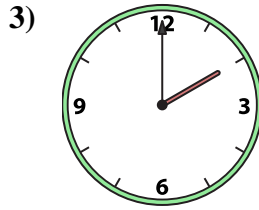
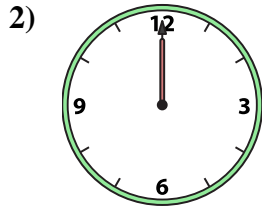
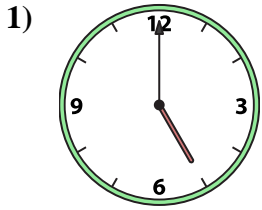
O. 10:30

P. 12:30



Passen Sie die analoge Uhr an die digitale Uhr an.

Antworten



A.

B.

C.

D.

E.

F.

G.

H.

I.

J.

K.

L.

M.

N.

O.

P.

1. I

2. N

3. M

4. O

5. E

6. H

7. L

8. P

9. C

10. F

11. G

12. K

13. J

14. B

15. D

16. A