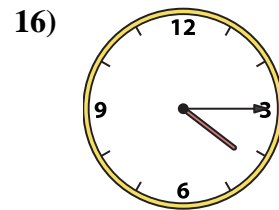
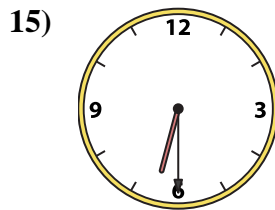
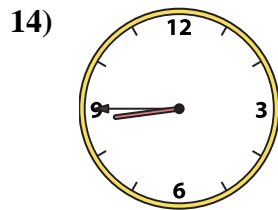
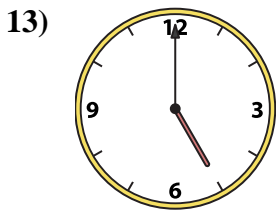
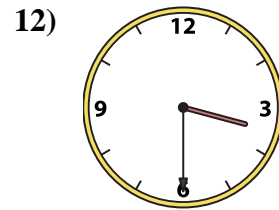
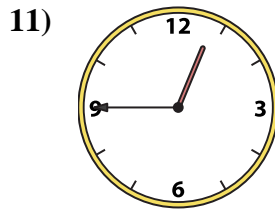
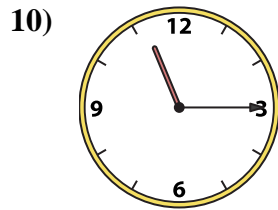
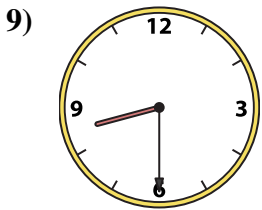
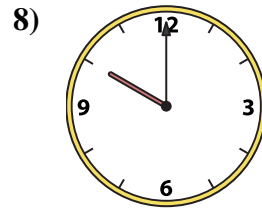
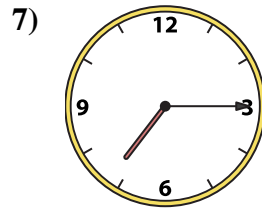
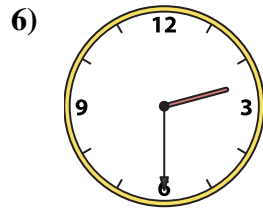
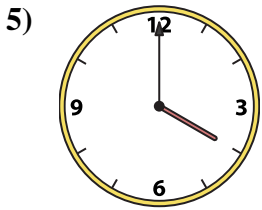
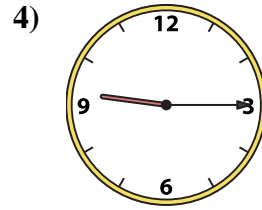
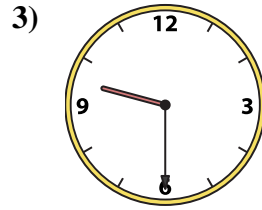
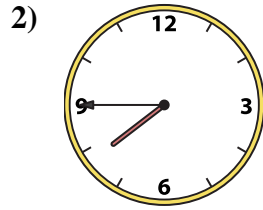
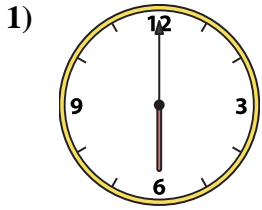




Passen Sie die analoge Uhr an die digitale Uhr an.

Antworten



1. _____
2. _____
3. _____
4. _____
5. _____
6. _____
7. _____
8. _____
9. _____
10. _____
11. _____
12. _____
13. _____
14. _____
15. _____
16. _____

A. 4:00

B. 6:30

C. 8:45

D. 10:00

E. 2:30

F. 5:00

G. 8:30

H. 9:30

I. 12:45

J. 6:00

K. 9:15

L. 7:45

M. 3:30

N. 4:15

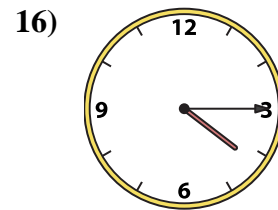
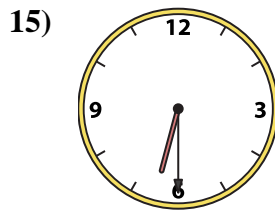
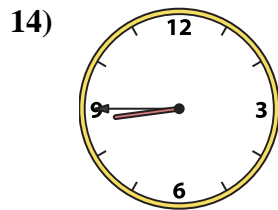
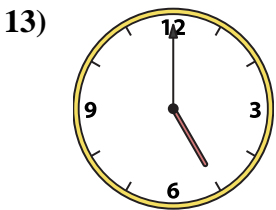
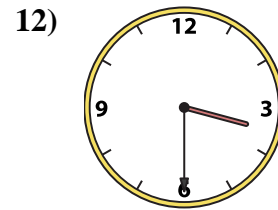
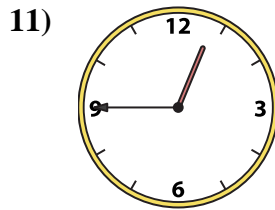
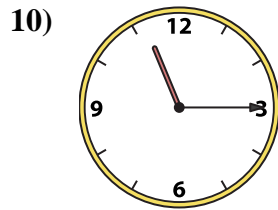
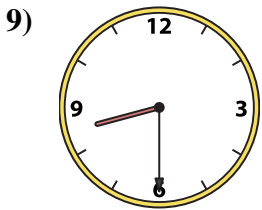
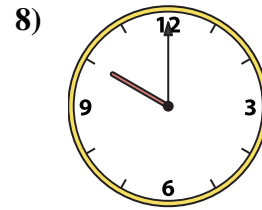
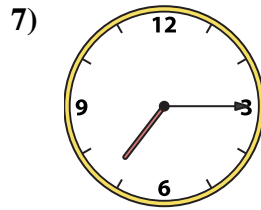
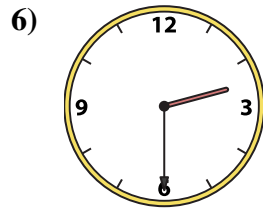
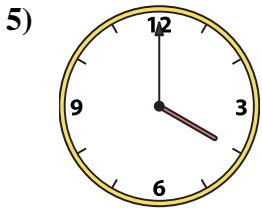
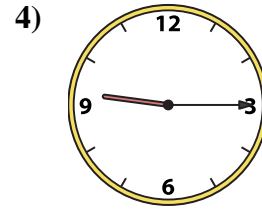
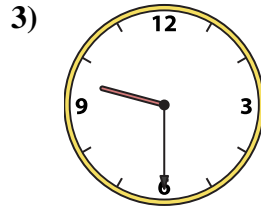
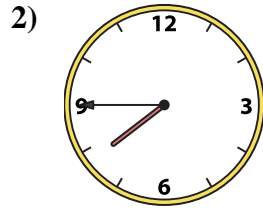
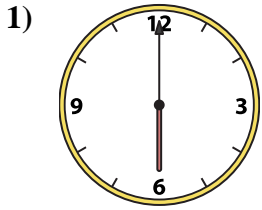
O. 11:15

P. 7:15



Passen Sie die analoge Uhr an die digitale Uhr an.

Antworten



A. 4:00

B. 6:30

C. 8:45

D. 10:00

E. 2:30

F. 5:00

G. 8:30

H. 9:30

I. 12:45

J. 6:00

K. 9:15

L. 7:45

M. 3:30

N. 4:15

O. 11:15

P. 7:15

1. **J**

2. **L**

3. **H**

4. **K**

5. **A**

6. **E**

7. **P**

8. **D**

9. **G**

10. **O**

11. **I**

12. **M**

13. **F**

14. **C**

15. **B**

16. **N**