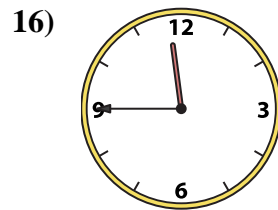
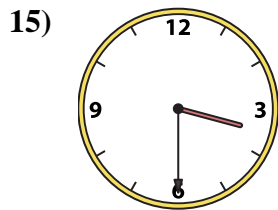
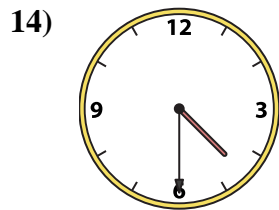
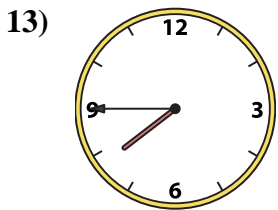
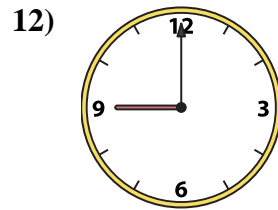
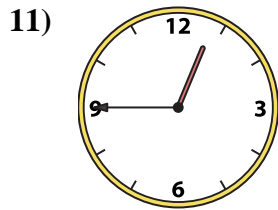
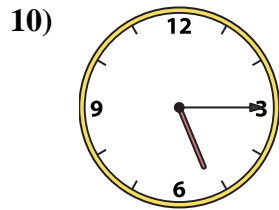
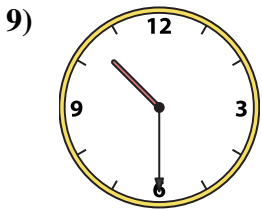
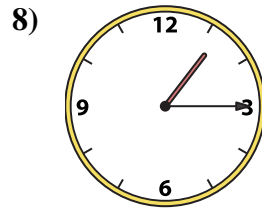
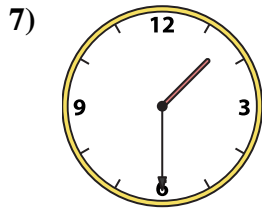
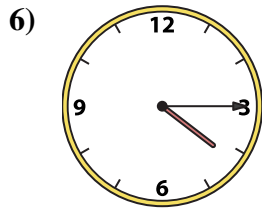
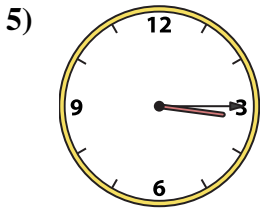
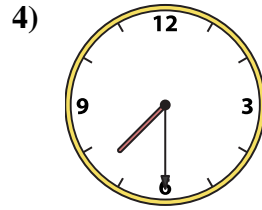
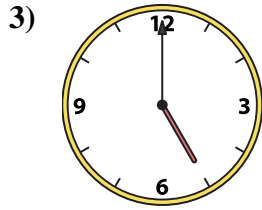
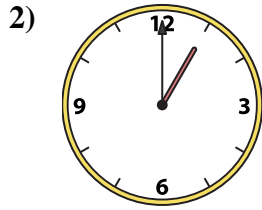
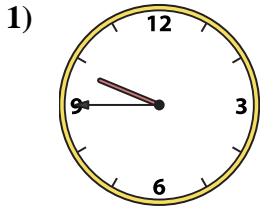




Passen Sie die analoge Uhr an die digitale Uhr an.

Antworten



A.

B.

C.

D.

E.

F.

G.

H.

I.

J.

K.

L.

M.

N.

O.

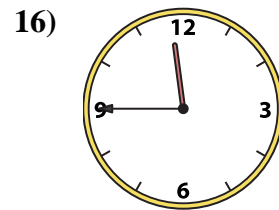
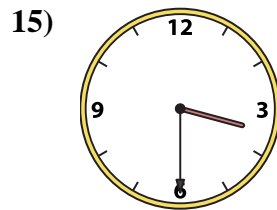
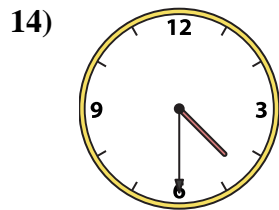
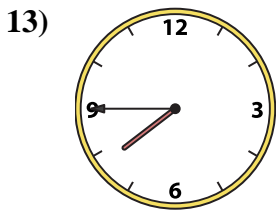
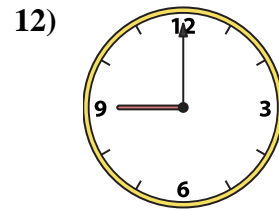
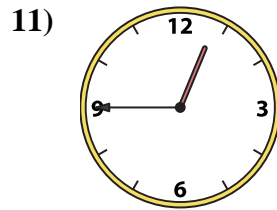
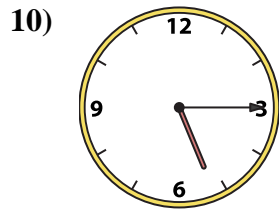
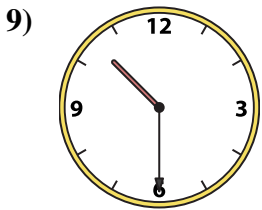
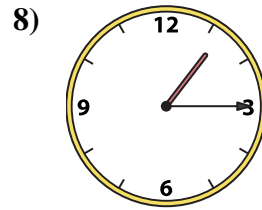
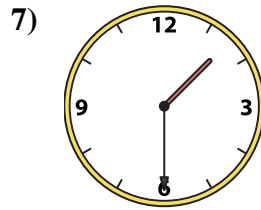
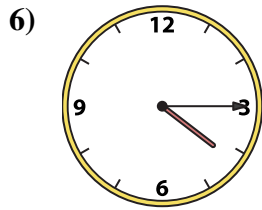
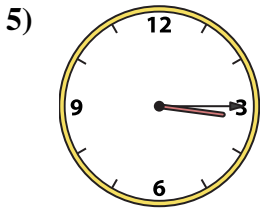
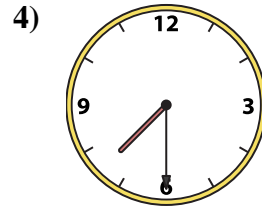
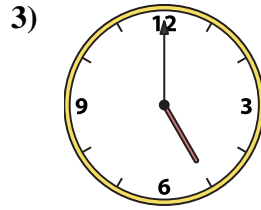
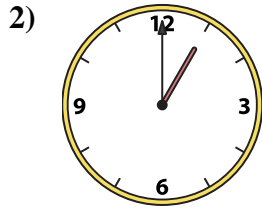
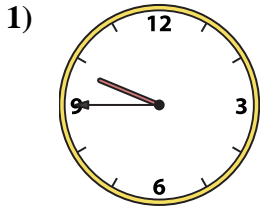
P.

- 1. _____
- 2. _____
- 3. _____
- 4. _____
- 5. _____
- 6. _____
- 7. _____
- 8. _____
- 9. _____
- 10. _____
- 11. _____
- 12. _____
- 13. _____
- 14. _____
- 15. _____
- 16. _____



Passen Sie die analoge Uhr an die digitale Uhr an.

Antworten



A. **11:45**

B. **10:30**

C. **1:00**

D. **7:45**

E. **5:00**

F. **4:30**

G. **4:15**

H. **5:15**

I. **3:15**

J. **3:30**

K. **9:00**

L. **7:30**

M. **1:30**

N. **9:45**

O. **1:15**

P. **12:45**

1. **N**

2. **C**

3. **E**

4. **L**

5. **I**

6. **G**

7. **M**

8. **O**

9. **B**

10. **H**

11. **P**

12. **K**

13. **D**

14. **F**

15. **J**

16. **A**