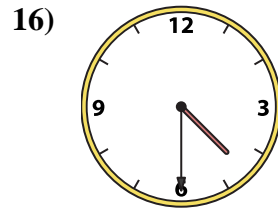
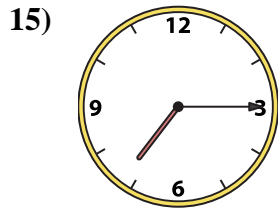
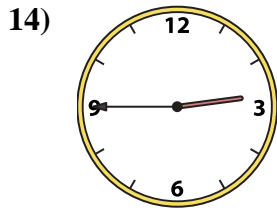
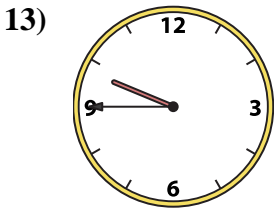
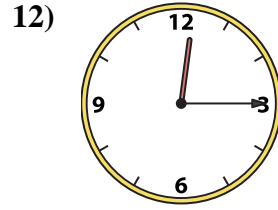
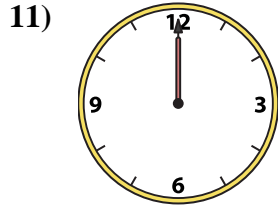
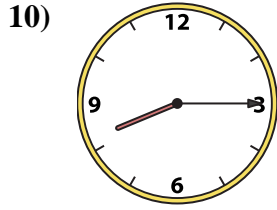
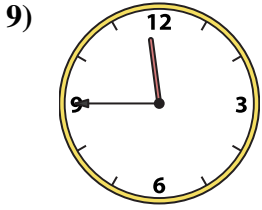
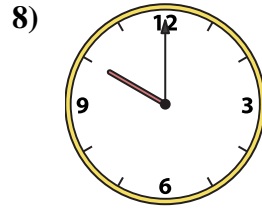
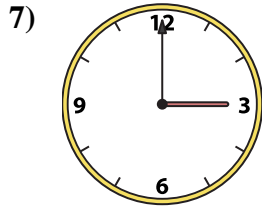

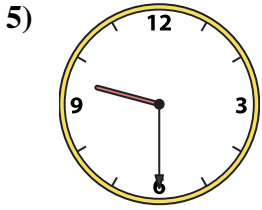
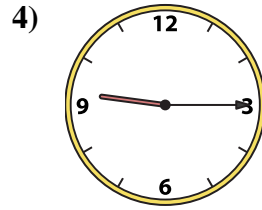
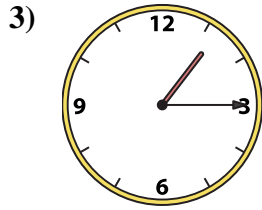
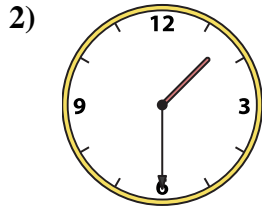
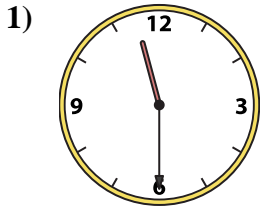




Passen Sie die analoge Uhr an die digitale Uhr an.

Antworten



1. _____
2. _____
3. _____
4. _____
5. _____
6. _____
7. _____
8. _____
9. _____
10. _____
11. _____
12. _____
13. _____
14. _____
15. _____
16. _____

A. 11:30

B. 3:00

C. 9:30

D. 1:30

E. 11:45

F. 9:45

G. 10:00

H. 12:00

I. 8:15

J. 1:15

K. 9:15

L. 11:00

M. 7:15

N. 2:45

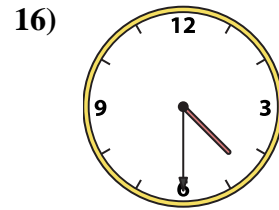
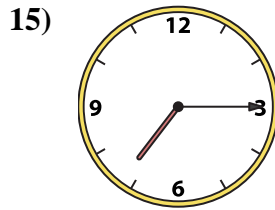
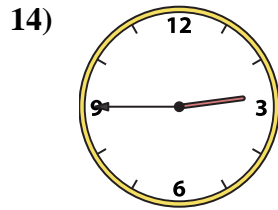
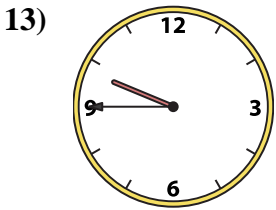

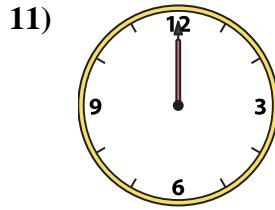
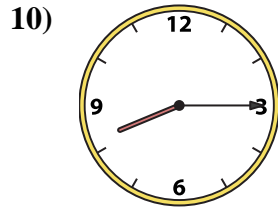
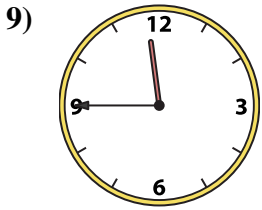
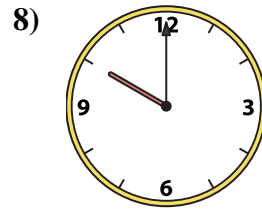
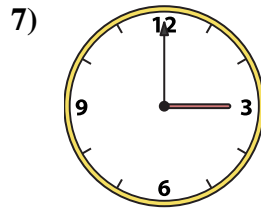
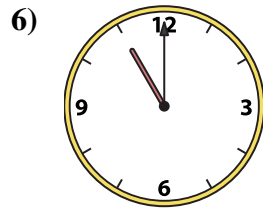
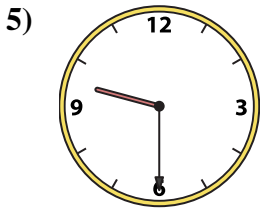
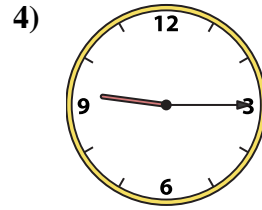
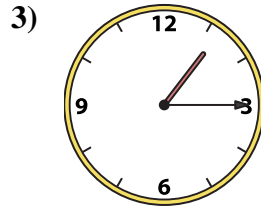
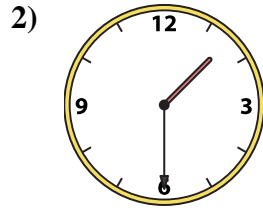
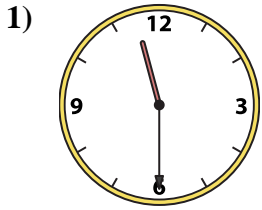
O. 4:30

P. 12:15



Passen Sie die analoge Uhr an die digitale Uhr an.

Antworten



A. **11:30**

B. **3:00**

C. **9:30**

D. **1:30**

E. **11:45**

F. **9:45**

G. **10:00**

H. **12:00**

I. **8:15**

J. **1:15**

K. **9:15**

L. **11:00**

M. **7:15**

N. **2:45**

O. **4:30**

P. **12:15**

- 1. **A**
- 2. **D**
- 3. **J**
- 4. **K**
- 5. **C**
- 6. **L**
- 7. **B**
- 8. **G**
- 9. **E**
- 10. **I**
- 11. **H**
- 12. **P**
- 13. **F**
- 14. **N**
- 15. **M**
- 16. **O**