

**Löse jede Aufgabe.****Antworten**

1) Beginn: _____

Elapsed: 1 Std. und 45 Min.

Ende: 3:45

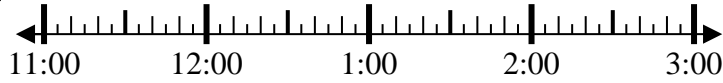


1. _____

2) Beginn: _____

Elapsed: 2 Std. und 45 Min.

Ende: 2:20

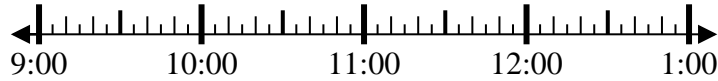


2. _____

3) Beginn: _____

Elapsed: 1 Std. und 10 Min.

Ende: 10:10



3. _____

4) Beginn: _____

Elapsed: 1 Std. und 20 Min.

Ende: 1:05



4. _____

5) Beginn: _____

Elapsed: 1 Std. und 15 Min.

Ende: 1:35

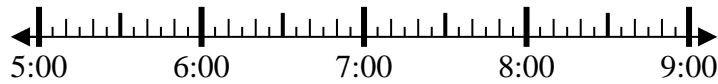


5. _____

6) Beginn: _____

Elapsed: 1 Std. und 10 Min.

Ende: 6:35

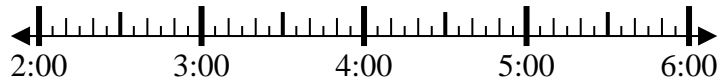


6. _____

7) Beginn: _____

Elapsed: 1 Std. und 45 Min.

Ende: 4:20

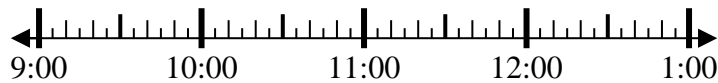


7. _____

8) Beginn: _____

Elapsed: 2 Std. und 45 Min.

Ende: 12:20



8. _____

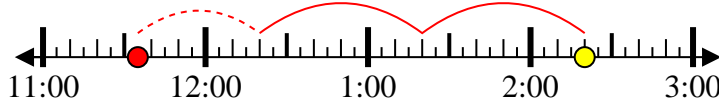


Löse jede Aufgabe.

- 1) Beginn: 2:00
 Elapsed: 1 Std. und 45 Min.
 Ende: 3:45



- 2) Beginn: 11:35
 Elapsed: 2 Std. und 45 Min.
 Ende: 2:20



- 3) Beginn: 9:00
 Elapsed: 1 Std. und 10 Min.
 Ende: 10:10



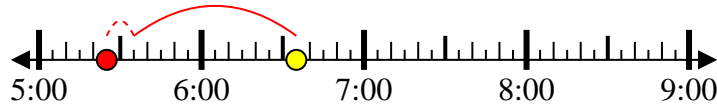
- 4) Beginn: 11:45
 Elapsed: 1 Std. und 20 Min.
 Ende: 1:05



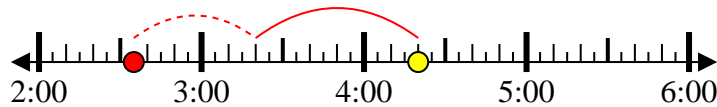
- 5) Beginn: 12:20
 Elapsed: 1 Std. und 15 Min.
 Ende: 1:35



- 6) Beginn: 5:25
 Elapsed: 1 Std. und 10 Min.
 Ende: 6:35



- 7) Beginn: 2:35
 Elapsed: 1 Std. und 45 Min.
 Ende: 4:20



- 8) Beginn: 9:35
 Elapsed: 2 Std. und 45 Min.
 Ende: 12:20

**Antworten**

1. 2:00
 2. 11:35
 3. 9:00
 4. 11:45
 5. 12:20
 6. 5:25
 7. 2:35
 8. 9:35