



Löse jede Aufgabe.

Antworten

1) Beginn: 6:10

Elapsed: 1 Std. und 45 Min.

Ende: _____

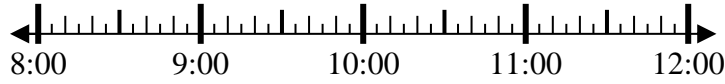


1. _____

2) Beginn: 8:25

Elapsed: 1 Std. und 55 Min.

Ende: _____

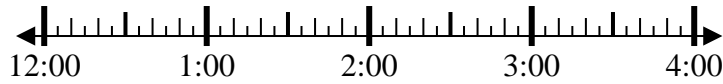


2. _____

3) Beginn: 12:25

Elapsed: 1 Std. und 30 Min.

Ende: _____

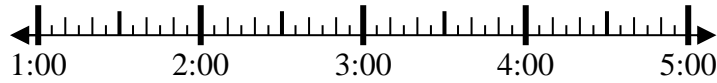


3. _____

4) Beginn: 1:10

Elapsed: 1 Std. und 30 Min.

Ende: _____

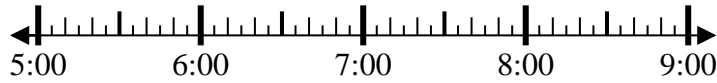


4. _____

5) Beginn: 5:50

Elapsed: 1 Std. und 45 Min.

Ende: _____

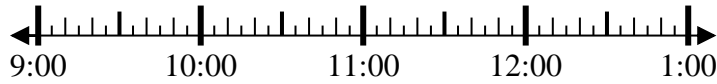


5. _____

6) Beginn: 9:50

Elapsed: 1 Std. und 10 Min.

Ende: _____

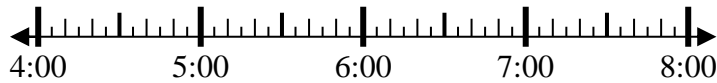


6. _____

7) Beginn: 4:20

Elapsed: 2 Std. und 20 Min.

Ende: _____

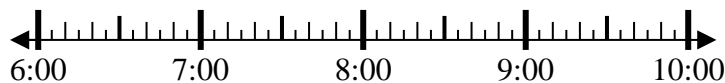


7. _____

8) Beginn: 6:15

Elapsed: 1 Std. und 10 Min.

Ende: _____



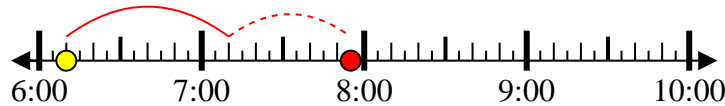
8. _____



Löse jede Aufgabe.

1) Beginn: 6:10

Elapsed: 1 Std. und 45 Min.

Ende: 7:55

2) Beginn: 8:25

Elapsed: 1 Std. und 55 Min.

Ende: 10:20

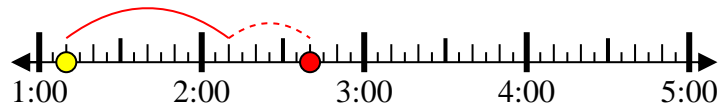
3) Beginn: 12:25

Elapsed: 1 Std. und 30 Min.

Ende: 1:55

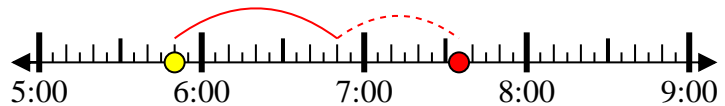
4) Beginn: 1:10

Elapsed: 1 Std. und 30 Min.

Ende: 2:40

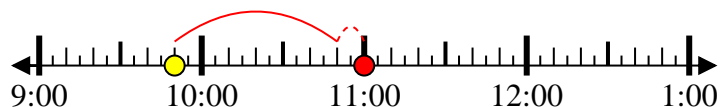
5) Beginn: 5:50

Elapsed: 1 Std. und 45 Min.

Ende: 7:35

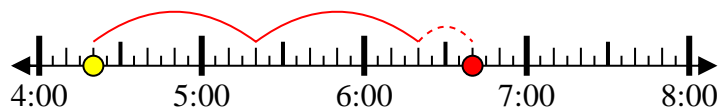
6) Beginn: 9:50

Elapsed: 1 Std. und 10 Min.

Ende: 11:00

7) Beginn: 4:20

Elapsed: 2 Std. und 20 Min.

Ende: 6:40

8) Beginn: 6:15

Elapsed: 1 Std. und 10 Min.

Ende: 7:25**Antworten**1. 7:552. 10:203. 1:554. 2:405. 7:356. 11:007. 6:408. 7:25