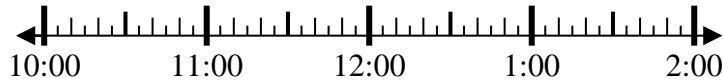




Löse jede Aufgabe.

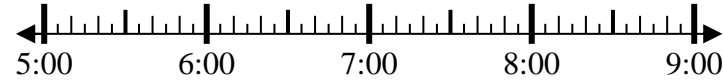
Antworten

1) Beginn: 10:50
 Elapsed: 2 Std. und 30 Min.
 Ende: _____



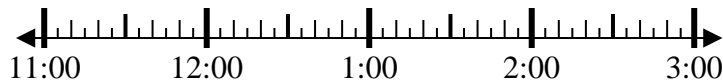
1. _____

2) Beginn: 5:10
 Elapsed: 1 Std. und 25 Min.
 Ende: _____



2. _____

3) Beginn: 11:40
 Elapsed: 1 Std. und 35 Min.
 Ende: _____



3. _____

4) Beginn: 4:20
 Elapsed: 2 Std. und 15 Min.
 Ende: _____



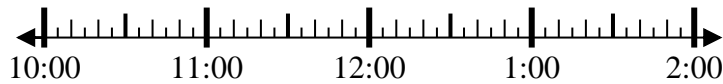
4. _____

5) Beginn: 5:15
 Elapsed: 2 Std. und 25 Min.
 Ende: _____



5. _____

6) Beginn: 10:20
 Elapsed: 2 Std. und 35 Min.
 Ende: _____



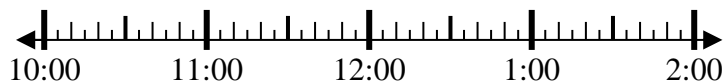
6. _____

7) Beginn: 12:45
 Elapsed: 2 Std. und 50 Min.
 Ende: _____



7. _____

8) Beginn: 10:40
 Elapsed: 1 Std. und 30 Min.
 Ende: _____

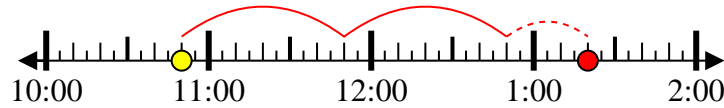


8. _____

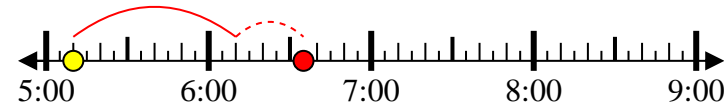


Löse jede Aufgabe.

1) Beginn: 10:50
 Elapsed: 2 Std. und 30 Min.
 Ende: 1:20



2) Beginn: 5:10
 Elapsed: 1 Std. und 25 Min.
 Ende: 6:35



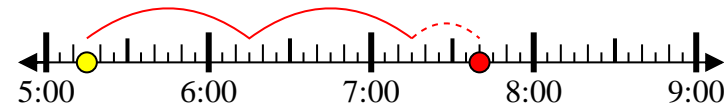
3) Beginn: 11:40
 Elapsed: 1 Std. und 35 Min.
 Ende: 1:15



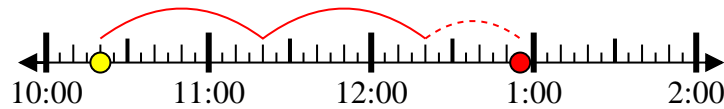
4) Beginn: 4:20
 Elapsed: 2 Std. und 15 Min.
 Ende: 6:35



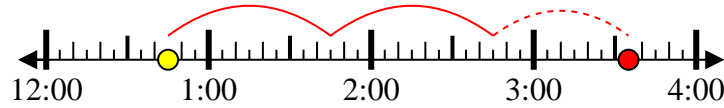
5) Beginn: 5:15
 Elapsed: 2 Std. und 25 Min.
 Ende: 7:40



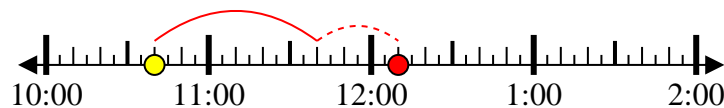
6) Beginn: 10:20
 Elapsed: 2 Std. und 35 Min.
 Ende: 12:55



7) Beginn: 12:45
 Elapsed: 2 Std. und 50 Min.
 Ende: 3:35



8) Beginn: 10:40
 Elapsed: 1 Std. und 30 Min.
 Ende: 12:10



Antworten

1. 1:20
2. 6:35
3. 1:15
4. 6:35
5. 7:40
6. 12:55
7. 3:35
8. 12:10