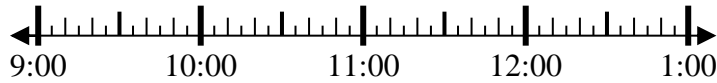




Löse jede Aufgabe.

Antworten

1) Beginn: 9:20
 Elapsed: 1 Std. und 25 Min.
 Ende: _____



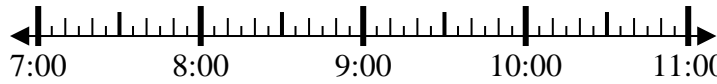
1. _____

2) Beginn: 2:00
 Elapsed: 2 Std. und 55 Min.
 Ende: _____



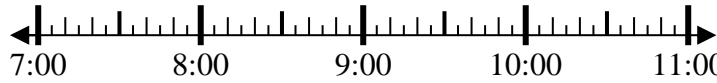
2. _____

3) Beginn: 7:40
 Elapsed: 2 Std. und 15 Min.
 Ende: _____



3. _____

4) Beginn: 7:15
 Elapsed: 1 Std. und 10 Min.
 Ende: _____



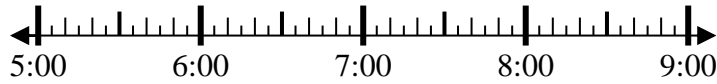
4. _____

5) Beginn: 11:15
 Elapsed: 2 Std. und 25 Min.
 Ende: _____



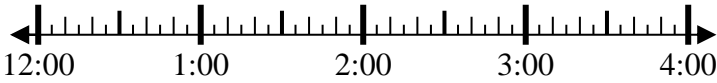
5. _____

6) Beginn: 5:30
 Elapsed: 1 Std. und 25 Min.
 Ende: _____



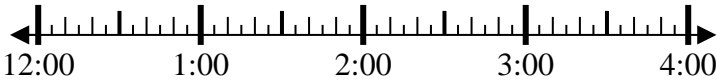
6. _____

7) Beginn: 12:00
 Elapsed: 2 Std. und 40 Min.
 Ende: _____



7. _____

8) Beginn: 12:15
 Elapsed: 1 Std. und 20 Min.
 Ende: _____



8. _____

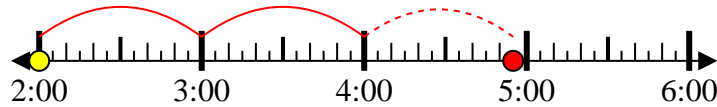


Löse jede Aufgabe.

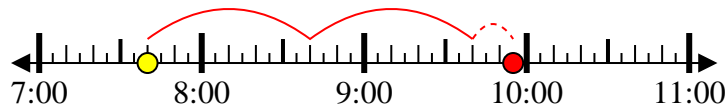
- 1) Beginn: 9:20
 Elapsed: 1 Std. und 25 Min.
 Ende: 10:45



- 2) Beginn: 2:00
 Elapsed: 2 Std. und 55 Min.
 Ende: 4:55



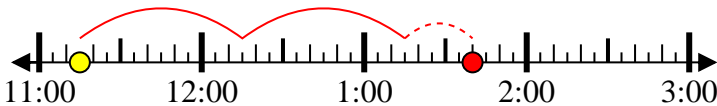
- 3) Beginn: 7:40
 Elapsed: 2 Std. und 15 Min.
 Ende: 9:55



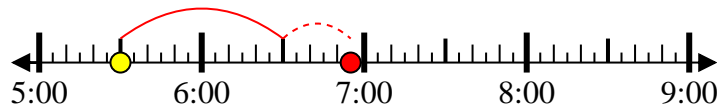
- 4) Beginn: 7:15
 Elapsed: 1 Std. und 10 Min.
 Ende: 8:25



- 5) Beginn: 11:15
 Elapsed: 2 Std. und 25 Min.
 Ende: 1:40



- 6) Beginn: 5:30
 Elapsed: 1 Std. und 25 Min.
 Ende: 6:55



- 7) Beginn: 12:00
 Elapsed: 2 Std. und 40 Min.
 Ende: 2:40



- 8) Beginn: 12:15
 Elapsed: 1 Std. und 20 Min.
 Ende: 1:35

**Antworten**

1. 10:45
 2. 4:55
 3. 9:55
 4. 8:25
 5. 1:40
 6. 6:55
 7. 2:40
 8. 1:35