



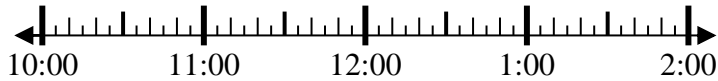
Löse jede Aufgabe.

Antworten

1) Beginn: 10:50

Elapsed: _____

Ende: 1:20

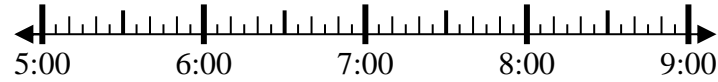


1. _____

2) Beginn: 5:10

Elapsed: _____

Ende: 6:35

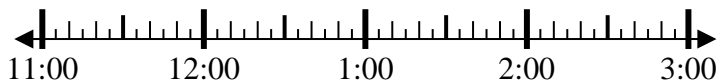


2. _____

3) Beginn: 11:40

Elapsed: _____

Ende: 1:15

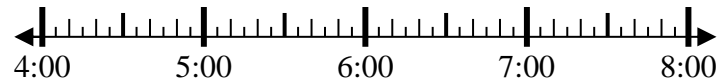


3. _____

4) Beginn: 4:20

Elapsed: _____

Ende: 6:35



4. _____

5) Beginn: 5:15

Elapsed: _____

Ende: 7:40

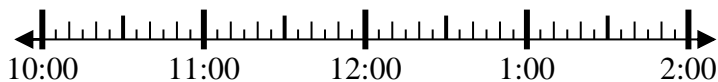


5. _____

6) Beginn: 10:20

Elapsed: _____

Ende: 12:55



6. _____

7) Beginn: 12:45

Elapsed: _____

Ende: 3:35



7. _____

8) Beginn: 10:40

Elapsed: _____

Ende: 12:10



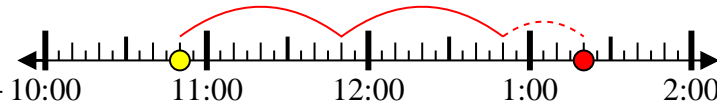
8. _____

**Löse jede Aufgabe.**

1) Beginn: 10:50

Elapsed: 2 Std. und 30 Min.

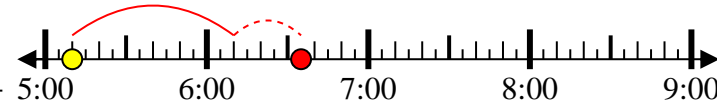
Ende: 1:20



2) Beginn: 5:10

Elapsed: 1 Std. und 25 Min.

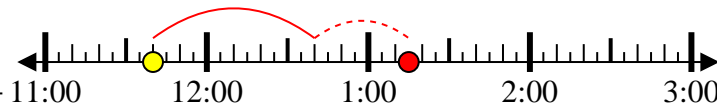
Ende: 6:35



3) Beginn: 11:40

Elapsed: 1 Std. und 35 Min.

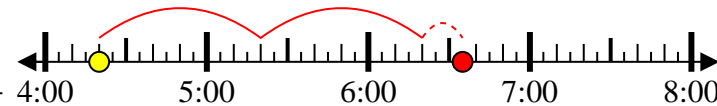
Ende: 1:15



4) Beginn: 4:20

Elapsed: 2 Std. und 15 Min.

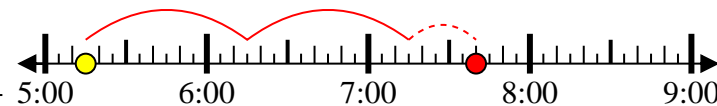
Ende: 6:35



5) Beginn: 5:15

Elapsed: 2 Std. und 25 Min.

Ende: 7:40



6) Beginn: 10:20

Elapsed: 2 Std. und 35 Min.

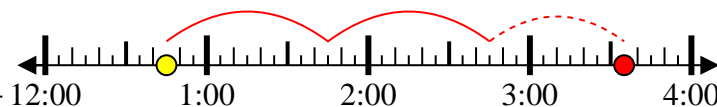
Ende: 12:55



7) Beginn: 12:45

Elapsed: 2 Std. und 50 Min.

Ende: 3:35



8) Beginn: 10:40

Elapsed: 1 Std. und 30 Min.

Ende: 12:10

**Antworten**1. 2 Std. und 30 Min.2. 1 Std. und 25 Min.3. 1 Std. und 35 Min.4. 2 Std. und 15 Min.5. 2 Std. und 25 Min.6. 2 Std. und 35 Min.7. 2 Std. und 50 Min.8. 1 Std. und 30 Min.