



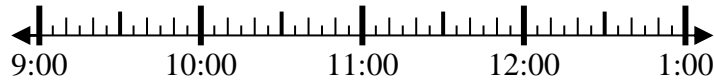
Löse jede Aufgabe.

Antworten

1) Beginn: 9:35

Elapsed: _____

Ende: 12:05

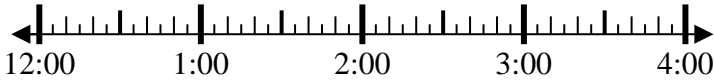


1. _____

2) Beginn: 12:50

Elapsed: _____

Ende: 2:35

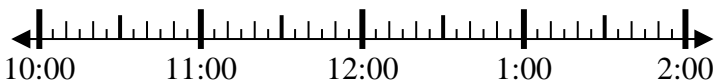


2. _____

3) Beginn: 10:15

Elapsed: _____

Ende: 11:40

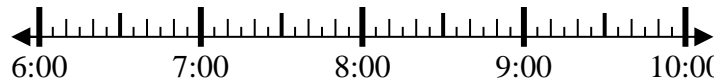


3. _____

4) Beginn: 6:25

Elapsed: _____

Ende: 8:10

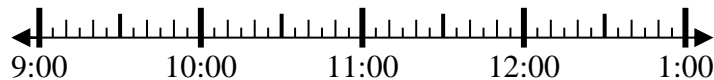


4. _____

5) Beginn: 9:10

Elapsed: _____

Ende: 10:25

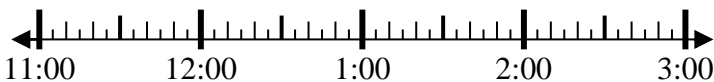


5. _____

6) Beginn: 11:45

Elapsed: _____

Ende: 2:00



6. _____

7) Beginn: 12:20

Elapsed: _____

Ende: 2:00

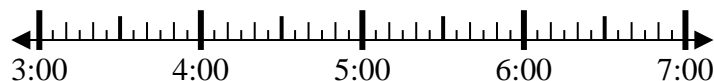


7. _____

8) Beginn: 3:35

Elapsed: _____

Ende: 5:15



8. _____



Löse jede Aufgabe.

1) Beginn: 9:35

Elapsed: 2 Std. und 30 Min.

Ende: 12:05



2) Beginn: 12:50

Elapsed: 1 Std. und 45 Min.

Ende: 2:35



3) Beginn: 10:15

Elapsed: 1 Std. und 25 Min.

Ende: 11:40



4) Beginn: 6:25

Elapsed: 1 Std. und 45 Min.

Ende: 8:10



5) Beginn: 9:10

Elapsed: 1 Std. und 15 Min.

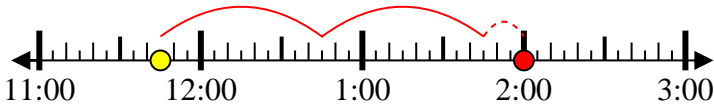
Ende: 10:25



6) Beginn: 11:45

Elapsed: 2 Std. und 15 Min.

Ende: 2:00



7) Beginn: 12:20

Elapsed: 1 Std. und 40 Min.

Ende: 2:00



8) Beginn: 3:35

Elapsed: 1 Std. und 40 Min.

Ende: 5:15

**Antworten**1. 2 Std. und 30 Min.2. 1 Std. und 45 Min.3. 1 Std. und 25 Min.4. 1 Std. und 45 Min.5. 1 Std. und 15 Min.6. 2 Std. und 15 Min.7. 1 Std. und 40 Min.8. 1 Std. und 40 Min.