



Löse jede Aufgabe.

Antworten

1) Beginn: 12:10

Elapsed: _____

Ende: 1:35

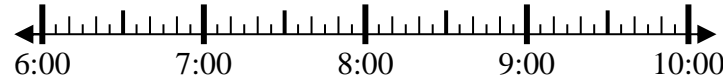


1. _____

2) Beginn: 6:40

Elapsed: _____

Ende: 8:50



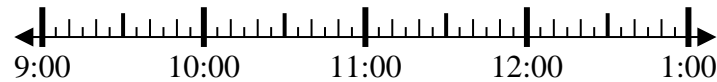
2. _____

3. _____

3) Beginn: 9:05

Elapsed: _____

Ende: 11:55



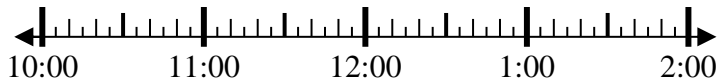
4. _____

5. _____

4) Beginn: 10:45

Elapsed: _____

Ende: 1:25



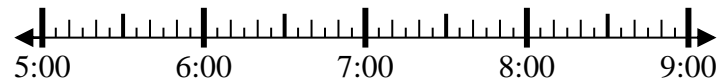
6. _____

7. _____

5) Beginn: 5:35

Elapsed: _____

Ende: 7:05

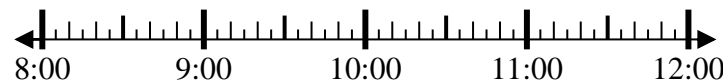


8. _____

6) Beginn: 8:15

Elapsed: _____

Ende: 10:40



7) Beginn: 4:10

Elapsed: _____

Ende: 7:05



8) Beginn: 4:00

Elapsed: _____

Ende: 6:20



**Löse jede Aufgabe.**

1) Beginn: 12:10

Elapsed: 1 Std. und 25 Min.

Ende: 1:35



2) Beginn: 6:40

Elapsed: 2 Std. und 10 Min.

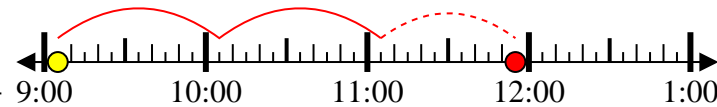
Ende: 8:50



3) Beginn: 9:05

Elapsed: 2 Std. und 50 Min.

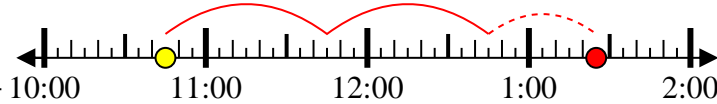
Ende: 11:55



4) Beginn: 10:45

Elapsed: 2 Std. und 40 Min.

Ende: 1:25



5) Beginn: 5:35

Elapsed: 1 Std. und 30 Min.

Ende: 7:05



6) Beginn: 8:15

Elapsed: 2 Std. und 25 Min.

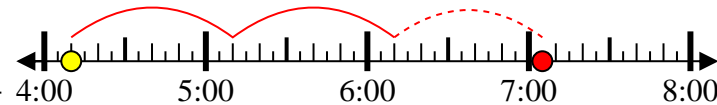
Ende: 10:40



7) Beginn: 4:10

Elapsed: 2 Std. und 55 Min.

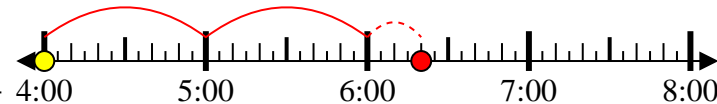
Ende: 7:05



8) Beginn: 4:00

Elapsed: 2 Std. und 20 Min.

Ende: 6:20

**Antworten**1. 1 Std. und 25 Min.2. 2 Std. und 10 Min.3. 2 Std. und 50 Min.4. 2 Std. und 40 Min.5. 1 Std. und 30 Min.6. 2 Std. und 25 Min.7. 2 Std. und 55 Min.8. 2 Std. und 20 Min.