



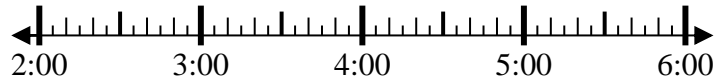
**Löse jede Aufgabe.**

**Antworten**

1) Beginn: 2:50

Elapsed: \_\_\_\_\_

Ende: 5:40

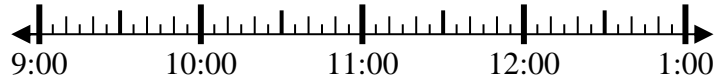


1. \_\_\_\_\_

2) Beginn: 9:10

Elapsed: \_\_\_\_\_

Ende: 10:20

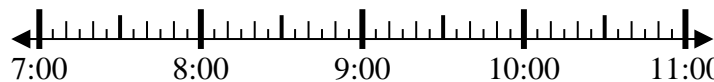


2. \_\_\_\_\_

3) Beginn: 7:05

Elapsed: \_\_\_\_\_

Ende: 8:20

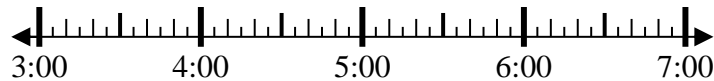


3. \_\_\_\_\_

4) Beginn: 3:00

Elapsed: \_\_\_\_\_

Ende: 4:15



4. \_\_\_\_\_

5) Beginn: 7:15

Elapsed: \_\_\_\_\_

Ende: 8:55

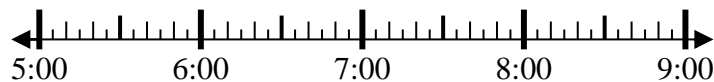


5. \_\_\_\_\_

6) Beginn: 5:00

Elapsed: \_\_\_\_\_

Ende: 7:15

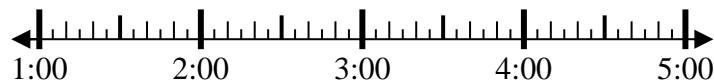


6. \_\_\_\_\_

7) Beginn: 1:00

Elapsed: \_\_\_\_\_

Ende: 3:45

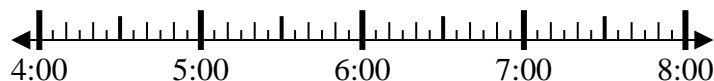


7. \_\_\_\_\_

8) Beginn: 4:35

Elapsed: \_\_\_\_\_

Ende: 5:55



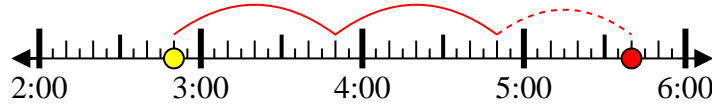
8. \_\_\_\_\_

**Löse jede Aufgabe.**

1) Beginn: 2:50

Elapsed: 2 Std. und 50 Min.

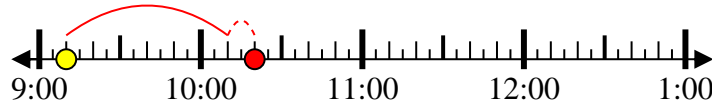
Ende: 5:40



2) Beginn: 9:10

Elapsed: 1 Std. und 10 Min.

Ende: 10:20



3) Beginn: 7:05

Elapsed: 1 Std. und 15 Min.

Ende: 8:20



4) Beginn: 3:00

Elapsed: 1 Std. und 15 Min.

Ende: 4:15



5) Beginn: 7:15

Elapsed: 1 Std. und 40 Min.

Ende: 8:55



6) Beginn: 5:00

Elapsed: 2 Std. und 15 Min.

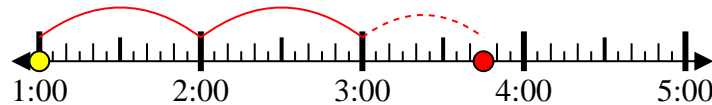
Ende: 7:15



7) Beginn: 1:00

Elapsed: 2 Std. und 45 Min.

Ende: 3:45



8) Beginn: 4:35

Elapsed: 1 Std. und 20 Min.

Ende: 5:55

**Antworten**1. 2 Std. und 50 Min.2. 1 Std. und 10 Min.3. 1 Std. und 15 Min.4. 1 Std. und 15 Min.5. 1 Std. und 40 Min.6. 2 Std. und 15 Min.7. 2 Std. und 45 Min.8. 1 Std. und 20 Min.