



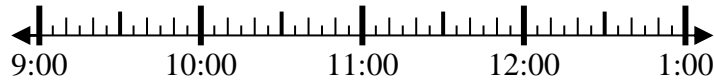
Löse jede Aufgabe.

Antworten

1) Beginn: 9:20

Elapsed: _____

Ende: 10:45

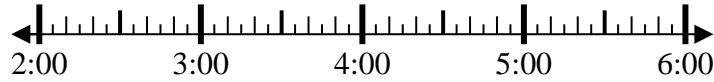


1. _____

2) Beginn: 2:00

Elapsed: _____

Ende: 4:55

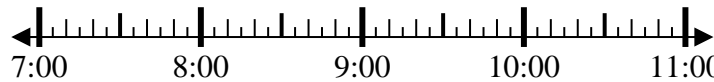


2. _____

3) Beginn: 7:40

Elapsed: _____

Ende: 9:55

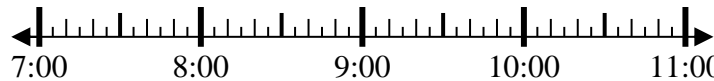


3. _____

4) Beginn: 7:15

Elapsed: _____

Ende: 8:25

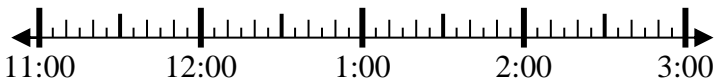


4. _____

5) Beginn: 11:15

Elapsed: _____

Ende: 1:40

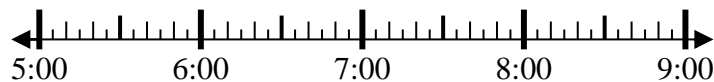


5. _____

6) Beginn: 5:30

Elapsed: _____

Ende: 6:55



6. _____

7) Beginn: 12:00

Elapsed: _____

Ende: 2:40



7. _____

8) Beginn: 12:15

Elapsed: _____

Ende: 1:35



8. _____

**Löse jede Aufgabe.**

1) Beginn: 9:20

Elapsed: 1 Std. und 25 Min.

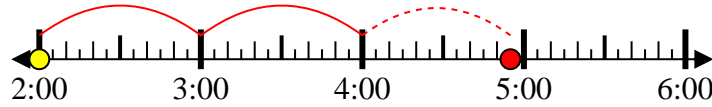
Ende: 10:45



2) Beginn: 2:00

Elapsed: 2 Std. und 55 Min.

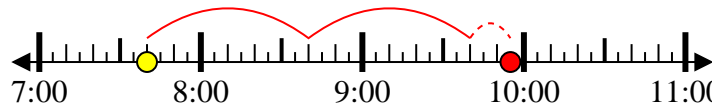
Ende: 4:55



3) Beginn: 7:40

Elapsed: 2 Std. und 15 Min.

Ende: 9:55



4) Beginn: 7:15

Elapsed: 1 Std. und 10 Min.

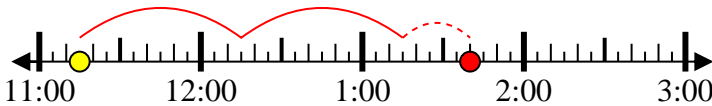
Ende: 8:25



5) Beginn: 11:15

Elapsed: 2 Std. und 25 Min.

Ende: 1:40



6) Beginn: 5:30

Elapsed: 1 Std. und 25 Min.

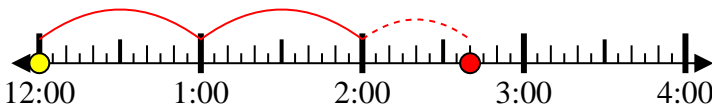
Ende: 6:55



7) Beginn: 12:00

Elapsed: 2 Std. und 40 Min.

Ende: 2:40



8) Beginn: 12:15

Elapsed: 1 Std. und 20 Min.

Ende: 1:35

**Antworten**1. 1 Std. und 25 Min.2. 2 Std. und 55 Min.3. 2 Std. und 15 Min.4. 1 Std. und 10 Min.5. 2 Std. und 25 Min.6. 1 Std. und 25 Min.7. 2 Std. und 40 Min.8. 1 Std. und 20 Min.