



Ordnen Sie jeder Tabelle die entsprechende Grafik zu.

Antworten

1)

Name	Dosen recycelt
Allen	
Beth	
Rick	
Andrea	
Tal	

2)

Name	Dosen recycelt
Allen	
Beth	
Rick	
Andrea	
Tal	

3)

Name	Dosen recycelt
Allen	
Beth	
Rick	
Andrea	
Tal	

4)

Name	Dosen recycelt
Allen	
Beth	
Rick	
Andrea	
Tal	

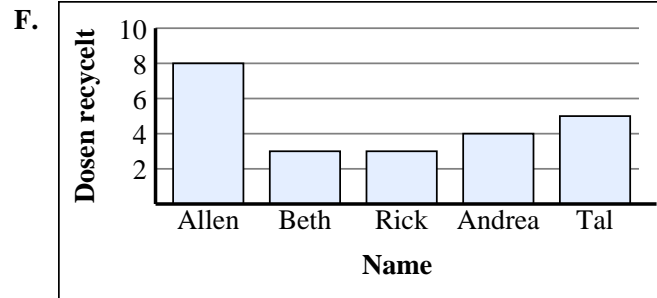
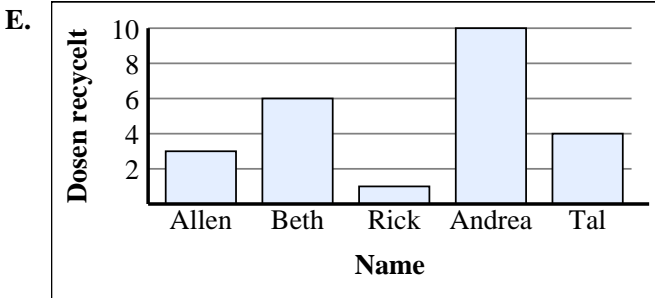
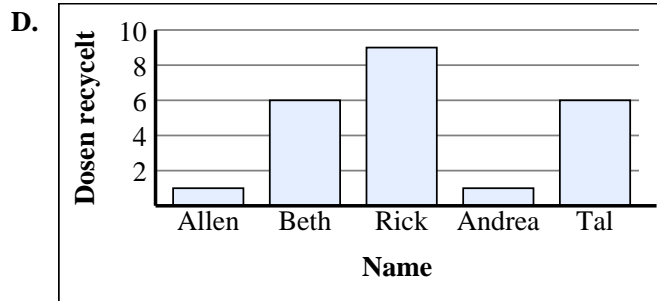
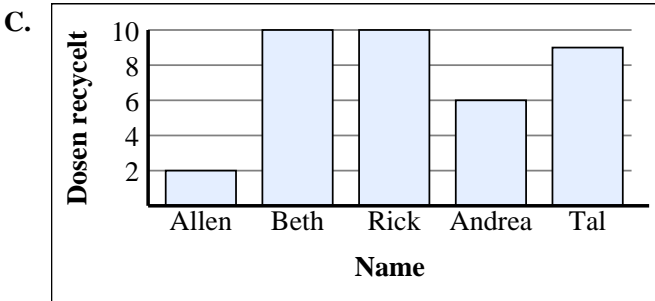
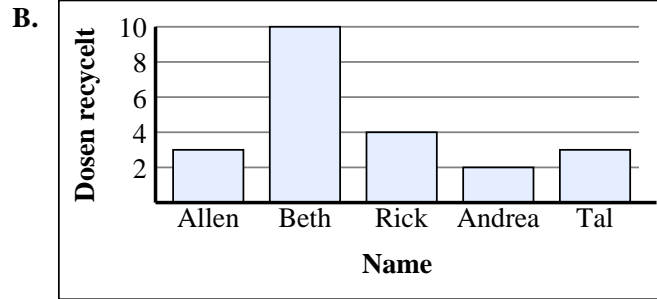
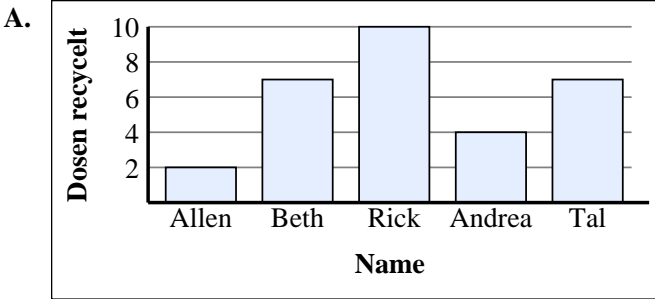
5)

Name	Dosen recycelt
Allen	
Beth	
Rick	
Andrea	
Tal	

6)

Name	Dosen recycelt
Allen	
Beth	
Rick	
Andrea	
Tal	

1. _____
2. _____
3. _____
4. _____
5. _____
6. _____





Ordnen Sie jeder Tabelle die entsprechende Grafik zu.

Antworten

1)

Name	Dosen recycelt
Allen	
Beth	
Rick	
Andrea	
Tal	

2)

Name	Dosen recycelt
Allen	
Beth	
Rick	
Andrea	
Tal	

3)

Name	Dosen recycelt
Allen	
Beth	
Rick	
Andrea	
Tal	

4)

Name	Dosen recycelt
Allen	
Beth	
Rick	
Andrea	
Tal	

5)

Name	Dosen recycelt
Allen	
Beth	
Rick	
Andrea	
Tal	

6)

Name	Dosen recycelt
Allen	
Beth	
Rick	
Andrea	
Tal	

1. **B**
2. **F**
3. **C**
4. **A**
5. **E**
6. **D**

