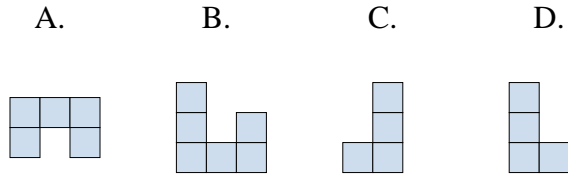
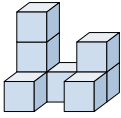
**Löse jede Aufgabe.****Antworten**

- 1) If you were looking at the 3d shape from above what would you see?



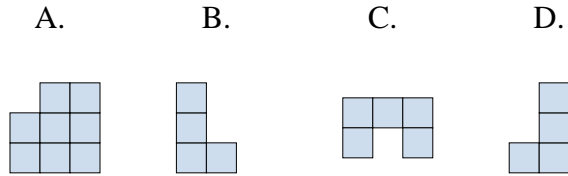
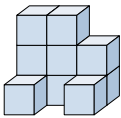
1. _____

2. _____

3. _____

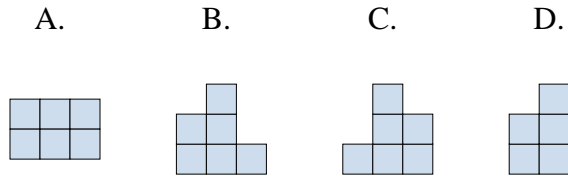
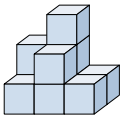
4. _____

- 2) If you were looking at the 3d shape from above what would you see?

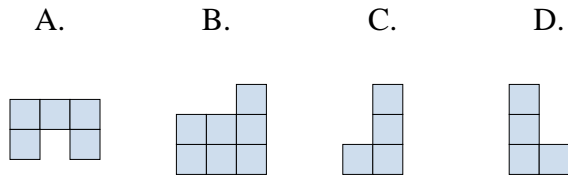
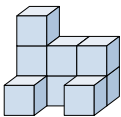


5. _____

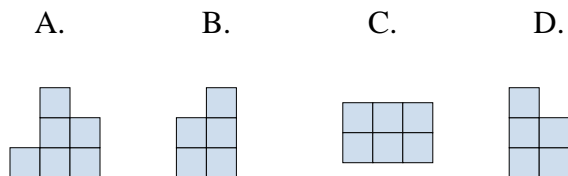
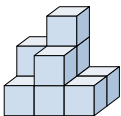
- 3) If you were looking at the 3d shape from the right side what would you see?



- 4) If you were looking at the 3d shape from above what would you see?

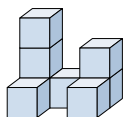


- 5) If you were looking at the 3d shape from above what would you see?



**Löse jede Aufgabe.****Antworten**

- 1) If you were looking at the 3d shape from above what would you see?



A.



B.



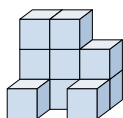
C.



D.

1. **A**

- 2) If you were looking at the 3d shape from above what would you see?



A.



B.



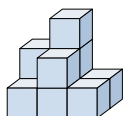
C.



D.

2. **C**3. **D**4. **A**5. **C**

- 3) If you were looking at the 3d shape from the right side what would you see?



A.



B.



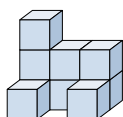
C.



D.



- 4) If you were looking at the 3d shape from above what would you see?



A.



B.



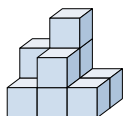
C.



D.



- 5) If you were looking at the 3d shape from above what would you see?



A.



B.



C.



D.

