





Stelle fest, ob eine Form-Verschiebung, Form-Drehung oder Form-Spiegelung vorliegt.

Antworten


1)



2)



3)




1. _____

2. _____

3. _____

4. _____


4)



5)



6)




5. _____

6. _____

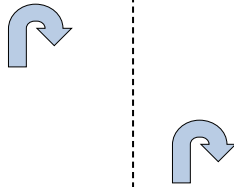
7. _____

8. _____

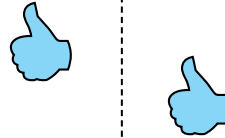
7)



8)



9)




9. _____

10. _____


11. _____

12. _____

10)



11)



12)



13. _____

14. _____

15. _____

13)



14)



15)







Stelle fest, ob eine Form-Verschiebung, Form-Drehung oder Form-Spiegelung vorliegt.

Antworten

1)



2)



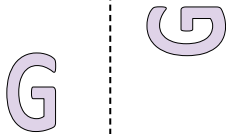
3)



1.

Spiegelung


4)



5)



6)



2.

Spiegelung

3.

Spiegelung

4.

Drehung

5.

Drehung

6.

Spiegelung


7.

Verschiebung

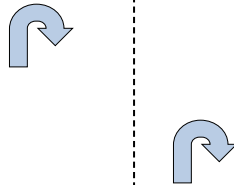
8.

Verschiebung

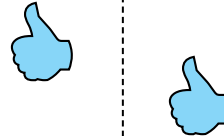
7)



8)



9)



9.

Verschiebung

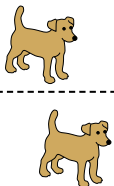
10.

Verschiebung

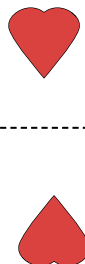
11.

Drehung

10)



11)



12)



12.

Verschiebung

13.

Verschiebung

14.

Spiegelung

15.

Drehung

13)



14)



15)

