



Stelle fest, ob eine Form-Verschiebung, Form-Drehung oder Form-Spiegelung vorliegt.

**Antworten**

1)



2)



3)



4)



5)



6)



7)



8)



9)



10)



11)



12)



13)



14)



15)



1. \_\_\_\_\_

2. \_\_\_\_\_

3. \_\_\_\_\_

4. \_\_\_\_\_

5. \_\_\_\_\_

6. \_\_\_\_\_

7. \_\_\_\_\_

8. \_\_\_\_\_

9. \_\_\_\_\_

10. \_\_\_\_\_

11. \_\_\_\_\_

12. \_\_\_\_\_

13. \_\_\_\_\_

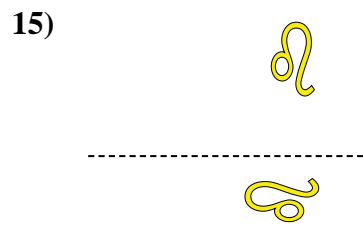
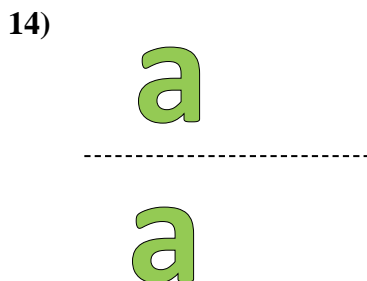

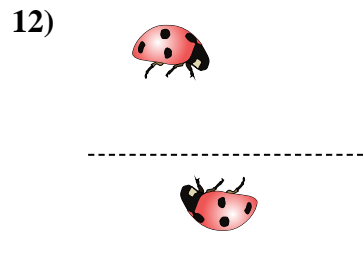
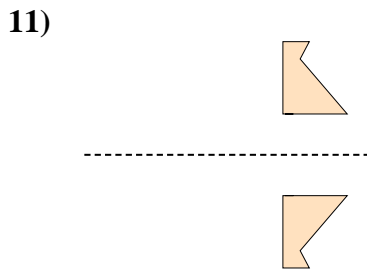
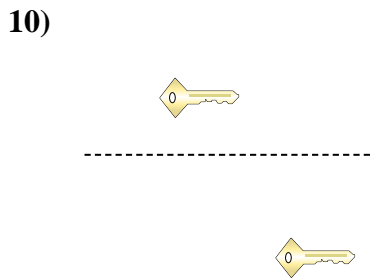
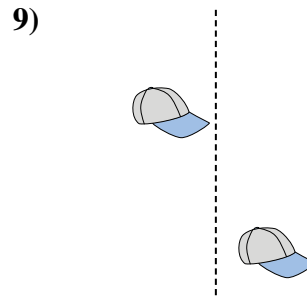
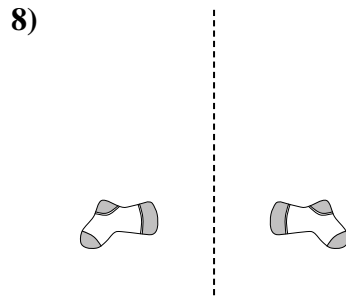
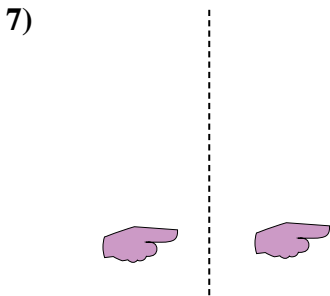
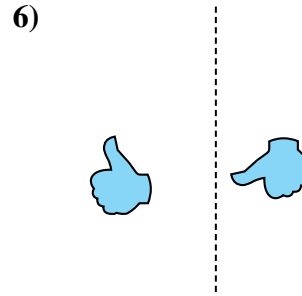
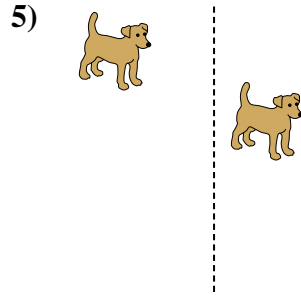
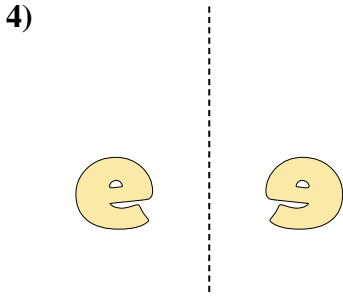
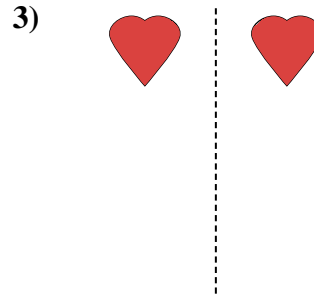
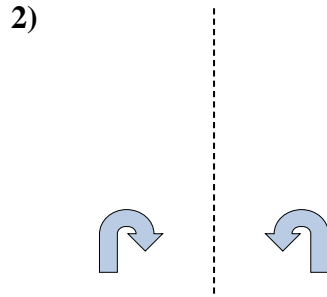

14. \_\_\_\_\_

15. \_\_\_\_\_



Stelle fest, ob eine Form-Verschiebung, Form-Drehung oder Form-Spiegelung vorliegt.

Antworten



1. Drehung

2. Spiegelung

3. Spiegelung

4. Spiegelung

5. Verschiebung

6. Drehung

7. Verschiebung

8. Spiegelung

9. Verschiebung

10. Verschiebung

11. Spiegelung

12. Drehung

13. Drehung

14. Verschiebung

15. Drehung