



Bestimmen Sie, ob jedes Dreieck spitz (A), stumpf (O) oder rechts (R) ist und ob es gleichseitig (E), gleichschenkelig (I) oder skalenförmig (S) ist.

**Acute Triangle:**

All angles are less than  $90^\circ$ .

**Obtuse Triangle:**

One angle is greater than  $90^\circ$ .

**Right Triangle:**

One angle is  $90^\circ$ .

**Equilateral Triangle:**

3 equal sides. 3 equal angles.

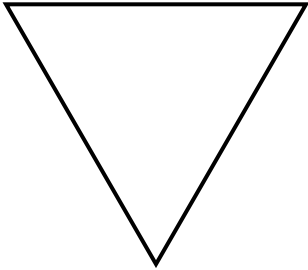
**Isosceles Triangle:**

2 equal sides. 2 equal angles.


**Scalene Triangle:**

No equal sides. No equal angles.

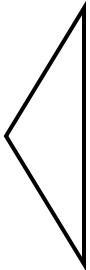
1)



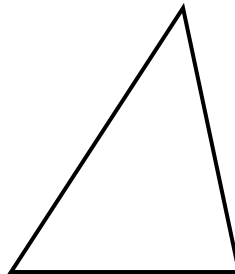
2)



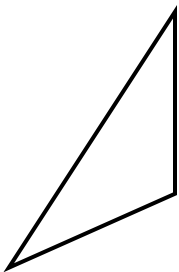
3)




4)



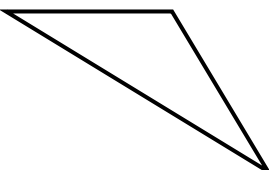
5)



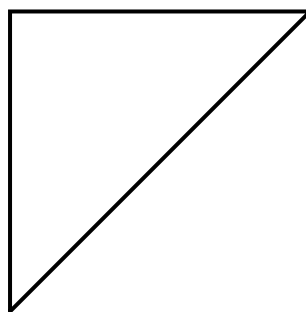
6)



7)



8)



**Antworten**

1. \_\_\_\_\_
2. \_\_\_\_\_
3. \_\_\_\_\_
4. \_\_\_\_\_
5. \_\_\_\_\_
6. \_\_\_\_\_
7. \_\_\_\_\_
8. \_\_\_\_\_



Bestimmen Sie, ob jedes Dreieck spitz (A), stumpf (O) oder rechts (R) ist und ob es gleichseitig (E), gleichschenkelig (I) oder skalenförmig (S) ist.

**Acute Triangle:**

All angles are less than  $90^\circ$ .

**Obtuse Triangle:**

One angle is greater than  $90^\circ$ .

**Right Triangle:**

One angle is  $90^\circ$ .

**Equilateral Triangle:**

3 equal sides. 3 equal angles.

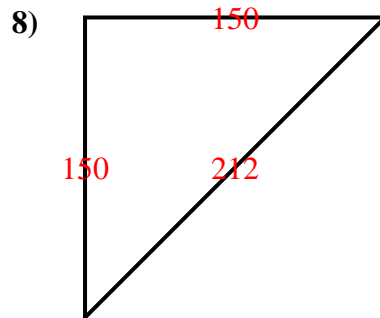
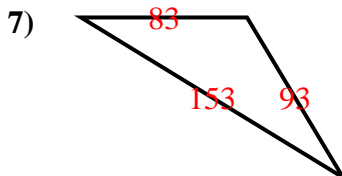
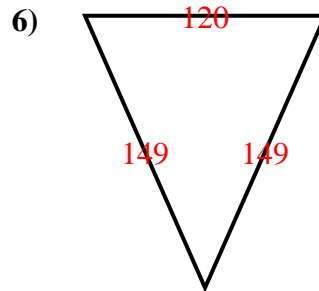
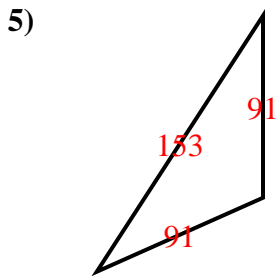
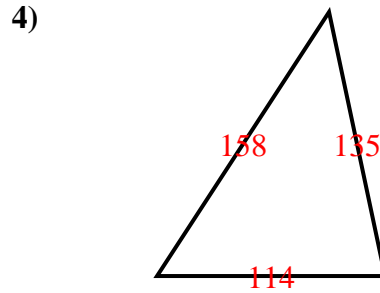
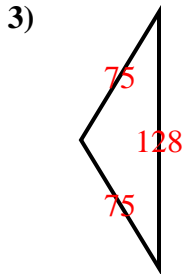
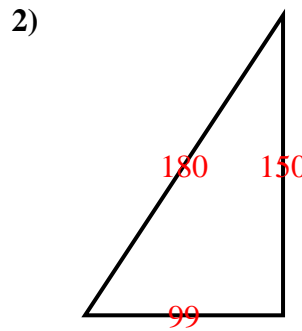
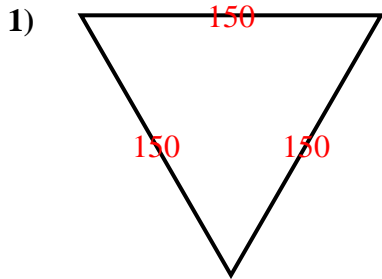
**Isosceles Triangle:**

2 equal sides. 2 equal angles.

**Scalene Triangle:**

No equal sides. No equal angles.

**Antworten**



1. AE
2. RS
3. OI
4. AS
5. OI
6. AI
7. OS
8. RI