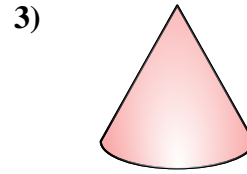
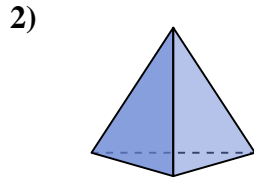





Bestimme, welche Auswahlmöglichkeit AM BESTEN den gezeigten Körper darstellt.

**Antworten**

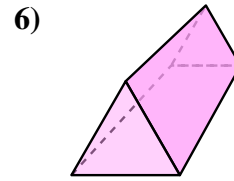
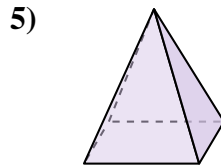
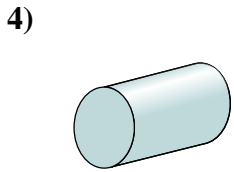


- A. cylinder
- B. sphere
- C. rectangular prism
- D. cone

- A. triangular pyramid
- B. cone
- C. rectangular pyramid
- D. cylinder

- A. sphere
- B. triangular pyramid
- C. triangular prism
- D. cone

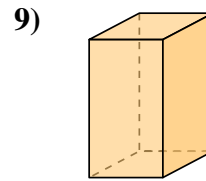
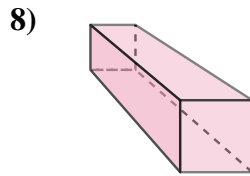
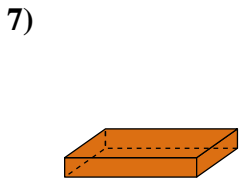
- 1. \_\_\_\_\_
- 2. \_\_\_\_\_
- 3. \_\_\_\_\_
- 4. \_\_\_\_\_
- 5. \_\_\_\_\_
- 6. \_\_\_\_\_
- 7. \_\_\_\_\_
- 8. \_\_\_\_\_
- 9. \_\_\_\_\_
- 10. \_\_\_\_\_
- 11. \_\_\_\_\_
- 12. \_\_\_\_\_



- A. rectangular pyramid
- B. sphere
- C. cylinder
- D. triangular prism

- A. rectangular pyramid
- B. cube
- C. triangular pyramid
- D. sphere

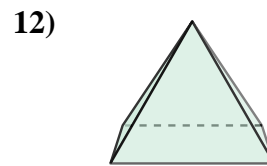
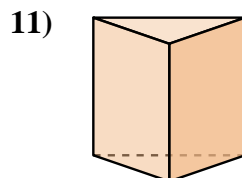
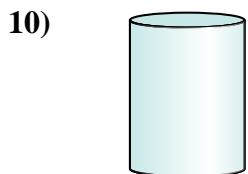
- A. cylinder
- B. cube
- C. cone
- D. triangular prism



- A. triangular prism
- B. cube
- C. rectangular pyramid
- D. rectangular prism

- A. cylinder
- B. triangular pyramid
- C. rectangular prism
- D. sphere

- A. sphere
- B. rectangular pyramid
- C. rectangular prism
- D. triangular prism



- A. sphere
- B. cone
- C. cylinder
- D. cube


- A. triangular prism
- B. cube
- C. rectangular pyramid
- D. sphere

- A. triangular prism
- B. cylinder
- C. sphere
- D. rectangular pyramid

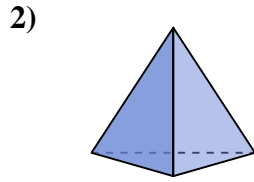


Bestimme, welche Auswahlmöglichkeit AM BESTEN den gezeigten Körper darstellt.

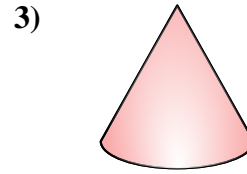
**Antworten**



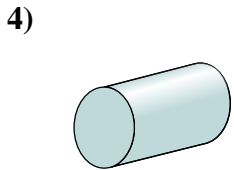
- A. cylinder
- B. sphere
- C. rectangular prism
- D. cone



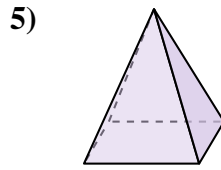
- A. triangular pyramid
- B. cone
- C. rectangular pyramid
- D. cylinder



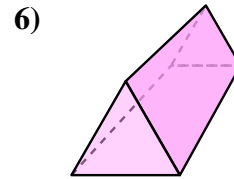
- A. sphere
- B. triangular pyramid
- C. triangular prism
- D. cone



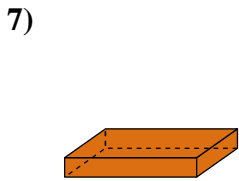
- A. rectangular pyramid
- B. sphere
- C. cylinder
- D. triangular prism



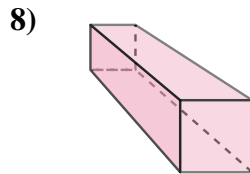
- A. rectangular pyramid
- B. cube
- C. triangular pyramid
- D. sphere



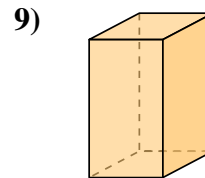
- A. cylinder
- B. cube
- C. cone
- D. triangular prism



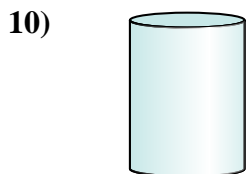
- A. triangular prism
- B. cube
- C. rectangular pyramid
- D. rectangular prism



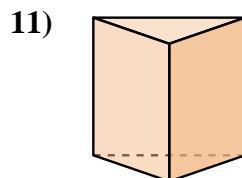
- A. cylinder
- B. triangular pyramid
- C. rectangular prism
- D. sphere



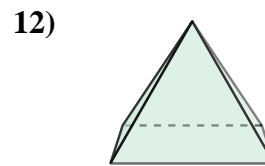
- A. sphere
- B. rectangular pyramid
- C. rectangular prism
- D. triangular prism



- A. sphere
- B. cone
- C. cylinder
- D. cube



- A. triangular prism
- B. cube
- C. rectangular pyramid
- D. sphere



- A. triangular prism
- B. cylinder
- C. sphere
- D. rectangular pyramid

- 1.   **B**
- 2.   **A**
- 3.   **D**
- 4.   **C**
- 5.   **A**
- 6.   **D**
- 7.   **D**
- 8.   **C**
- 9.   **C**
- 10.   **C**
- 11.   **A**
- 12.   **D**