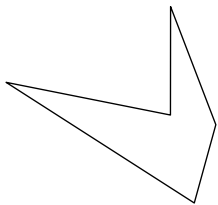




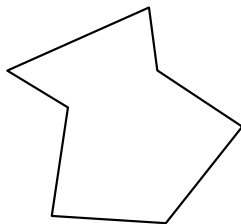
Identifiziere jede gezeigte Form.

Antworten


1)



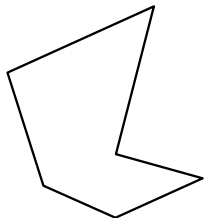
2)



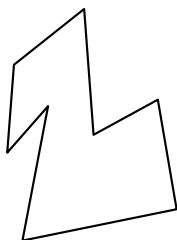
3)



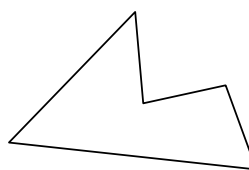
4)



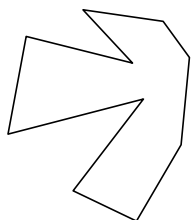
5)



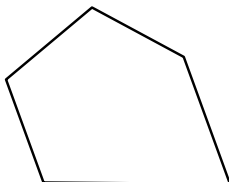
6)



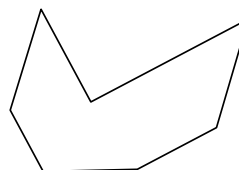
7)



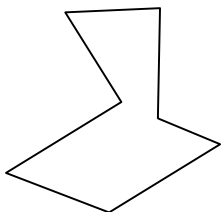
8)




9)



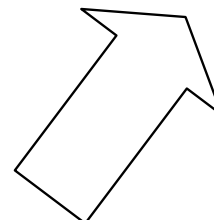
10)



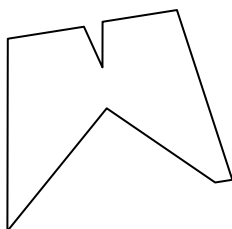
11)



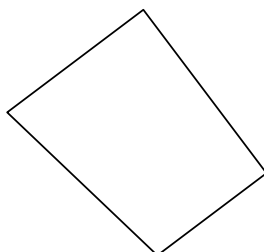
12)



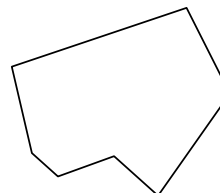
13)



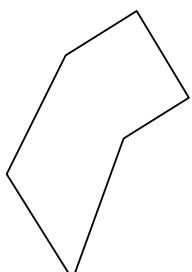
14)



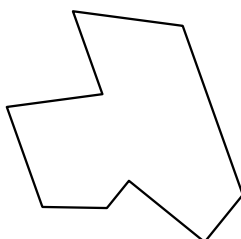
15)



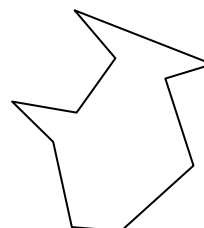
16)



17)



18)



1. _____

2. _____

3. _____

4. _____

5. _____

6. _____

7. _____

8. _____

9. _____

10. _____

11. _____

12. _____

13. _____

14. _____

15. _____

16. _____

17. _____

18. _____

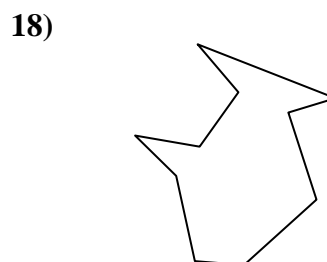
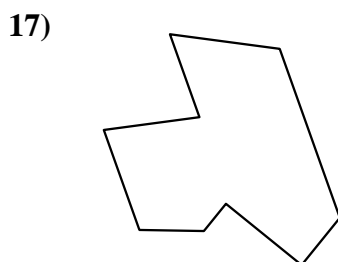
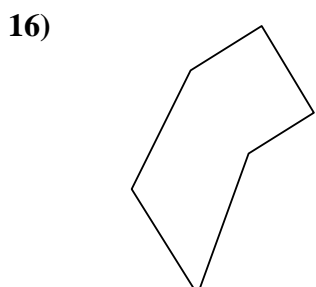
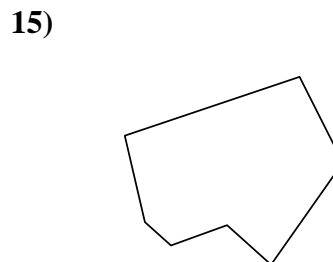
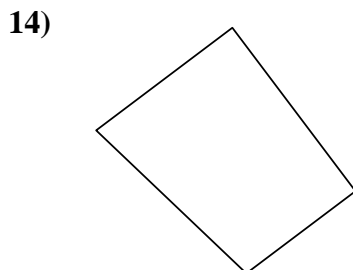
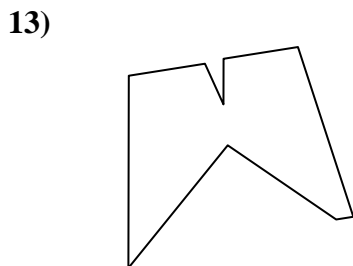
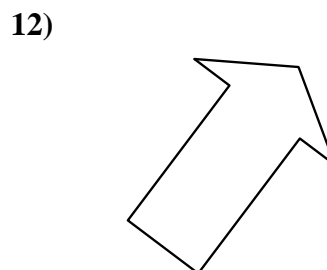
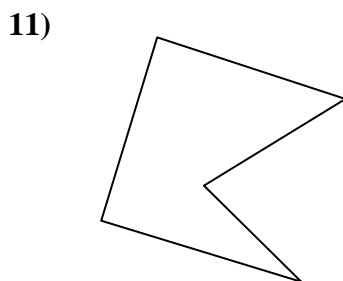
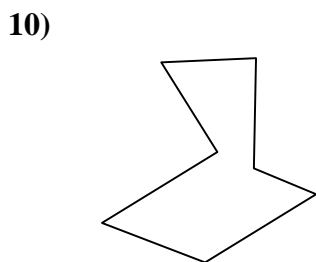

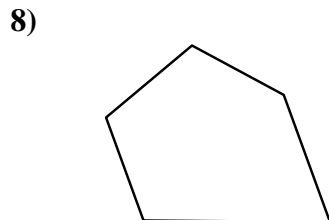
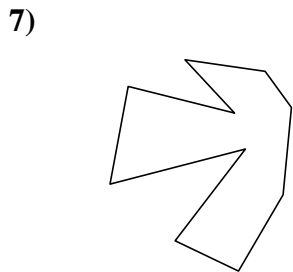
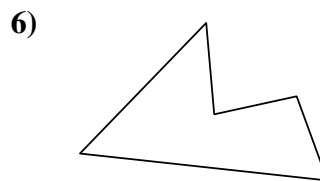

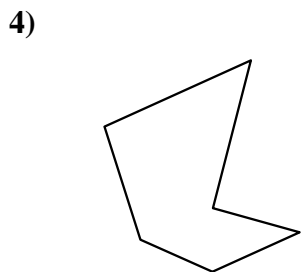
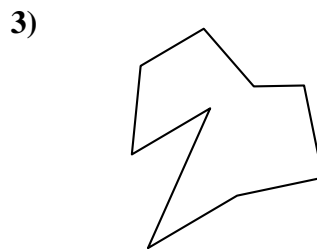

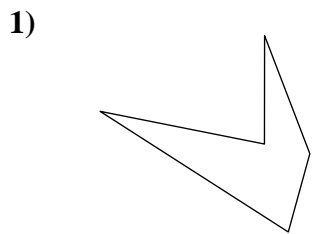
19. _____

20. _____

21. _____



Identifiziere jede gezeigte Form.



Antworten

1. Fünfeck

2. Siebeneck

3. Neuneck

4. Sechseck

5. Achteck

6. Fünfeck

7. Zehneck

8. Fünfeck

9. Siebeneck

10. Siebeneck

11. Fünfeck

12. Siebeneck

13. Neuneck

14. Viereck

15. Siebeneck

16. Sechseck

17. Neuneck

18. Zehneck

19. Neuneck

20. Sechseck

21. Achteck