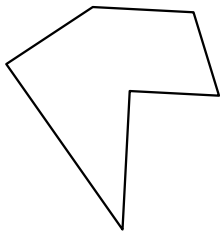





Identifiziere jede gezeigte Form.

Antworten

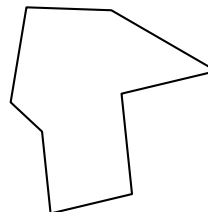
1)



2)

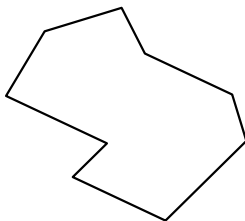


3)

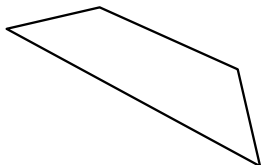


1. _____

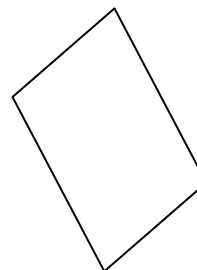
4)



5)



6)



2. _____


3. _____

4. _____

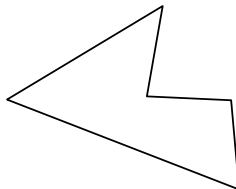
5. _____

6. _____


7)



8)



9)



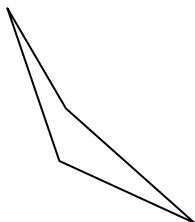
7. _____

8. _____

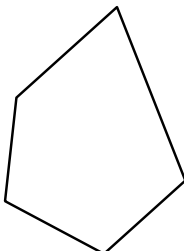
9. _____

10. _____

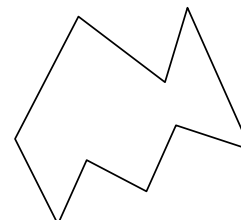
10)



11)



12)



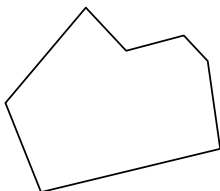
11. _____

12. _____

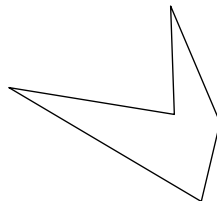
13. _____

14. _____

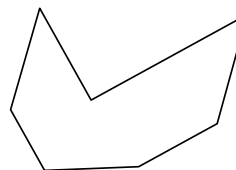
13)



14)



15)




15. _____

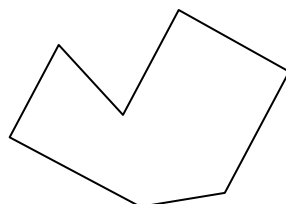
16. _____

17. _____

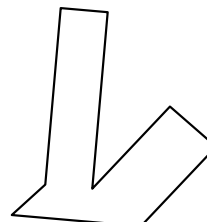
16)



17)



18)



18. _____

19. _____


20. _____

21. _____




Identifiziere jede gezeigte Form.

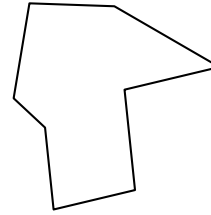
1)



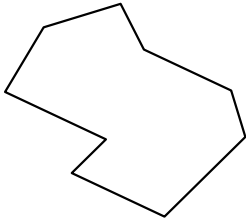
2)



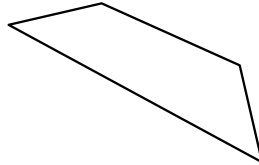
3)



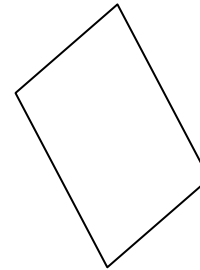
4)



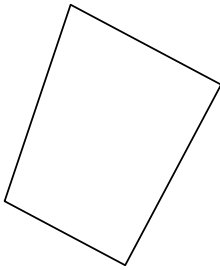
5)



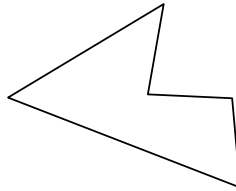
6)




7)



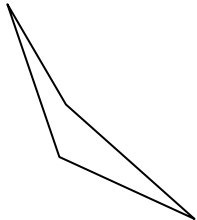
8)



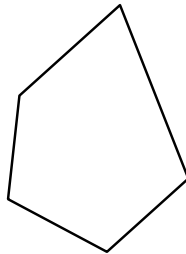
9)



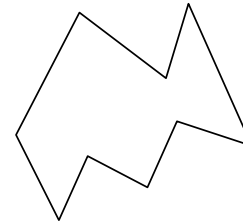
10)



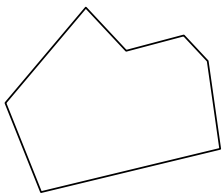
11)



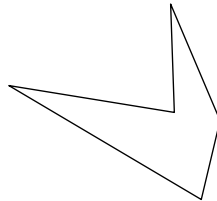
12)



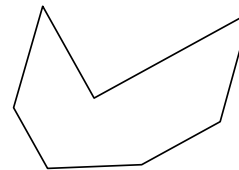
13)




14)



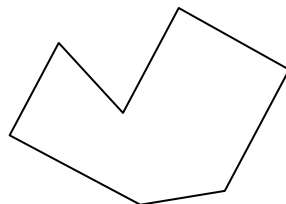
15)



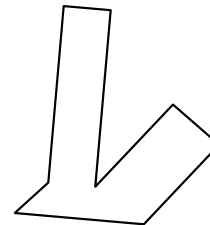
16)



17)



18)



Antworten

1. Sechseck

2. Neuneck

3. Achteck

4. Neuneck

5. Viereck

6. Viereck

7. Viereck

8. Fünfeck

9. Siebeneck

10. Viereck

11. Fünfeck

12. Neuneck

13. Siebeneck

14. Fünfeck

15. Siebeneck

16. Sechseck

17. Siebeneck

18. Achteck

19. Achteck

20. Siebeneck

21. Achteck