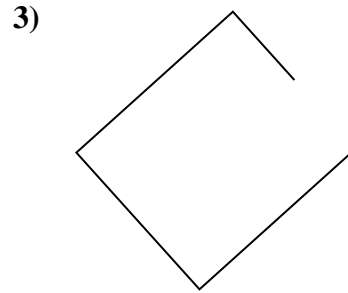
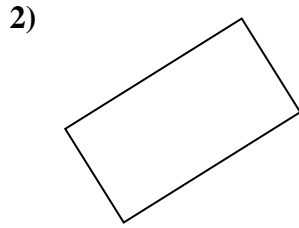
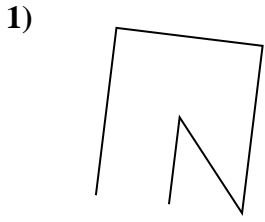


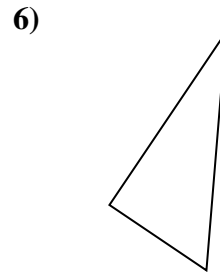
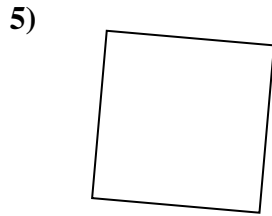



Stelle fest, was die gezeigten Formen sind: Dreieck, Quadrat, Rechteck, Sechseck oder eine andere Figur.

Antworten



1. _____



2. _____

3. _____

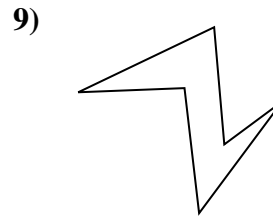
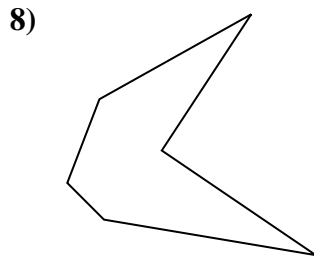
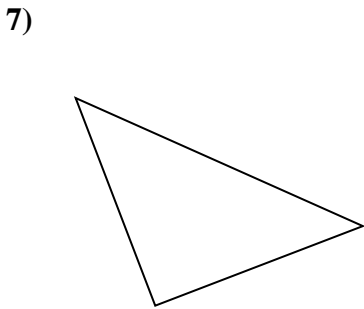
4. _____

5. _____

6. _____

7. _____

8. _____

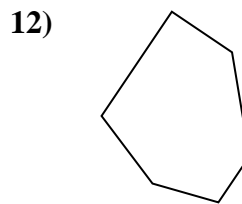
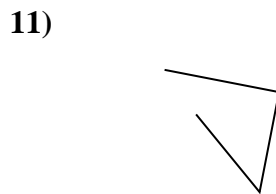
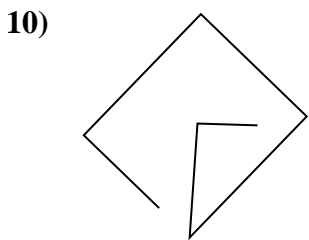


9. _____

10. _____

11. _____

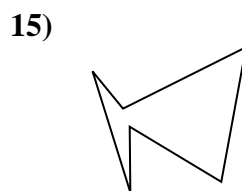
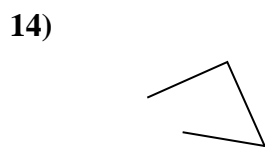
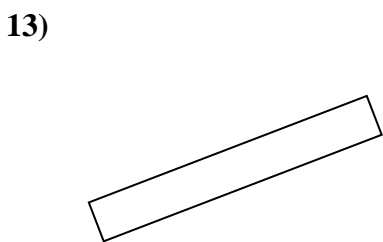
12. _____



13. _____

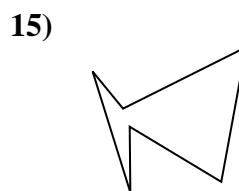
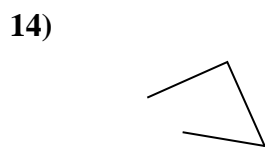
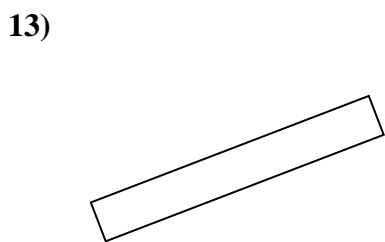
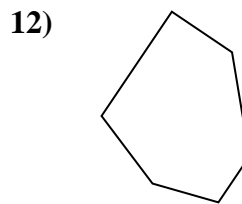
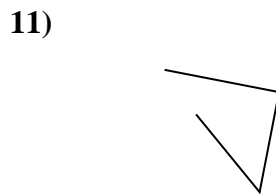
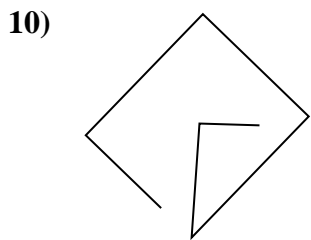
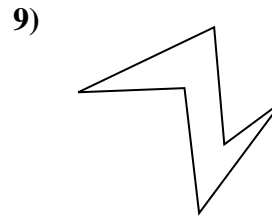
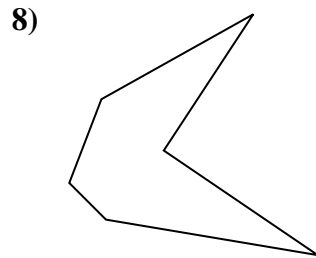
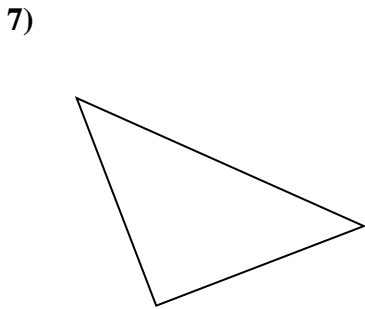
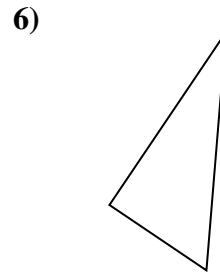
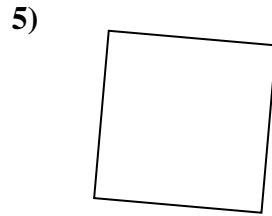

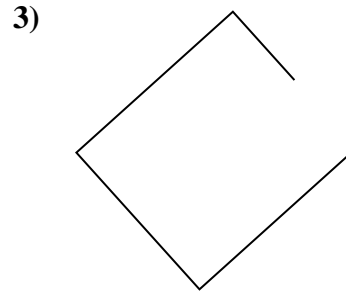
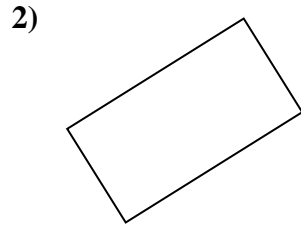
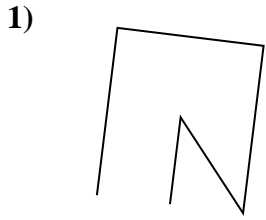
14. _____

15. _____





Stelle fest, was die gezeigten Formen sind: Dreieck, Quadrat, Rechteck, Sechseck oder eine andere Figur.



Antworten

1. andere

2. rectangle

3. andere

4. rectangle

5. square

6. triangle

7. triangle

8. Sechseck

9. Sechseck

10. andere

11. andere

12. Sechseck

13. rectangle

14. andere

15. Sechseck



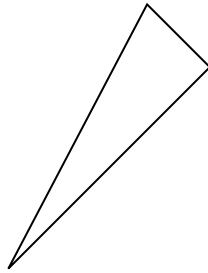
Stelle fest, was die gezeigten Formen sind: Dreieck, Quadrat, Rechteck, Sechseck oder eine andere Figur.

Antworten

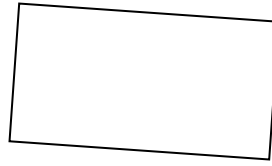
1)



2)



3)



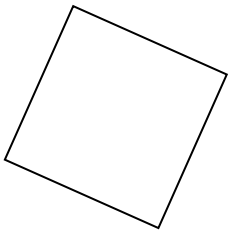
1. _____

2. _____

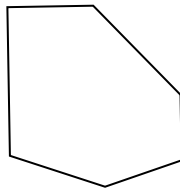
3. _____

4. _____

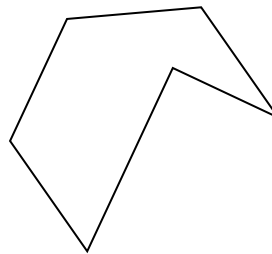
4)



5)



6)



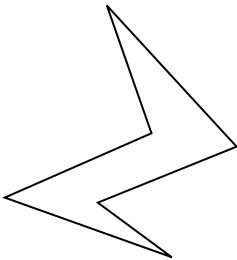
5. _____

6. _____

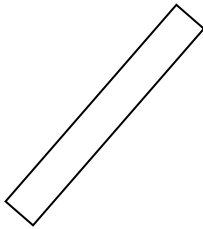
7. _____

8. _____

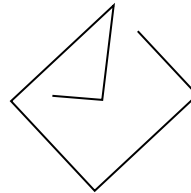
7)



8)



9)



9. _____

10. _____

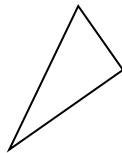
11. _____

12. _____

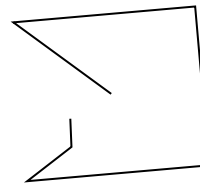
10)



11)



12)




13. _____


14. _____

15. _____

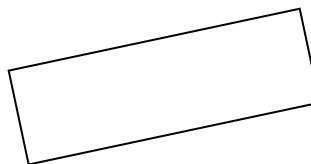
13)



14)



15)



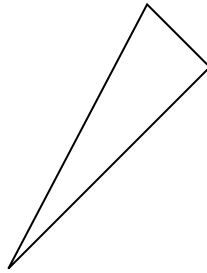


Stelle fest, was die gezeigten Formen sind: Dreieck, Quadrat, Rechteck, Sechseck oder eine andere Figur.

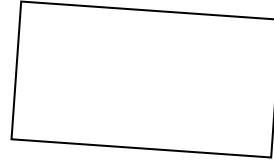
1)



2)

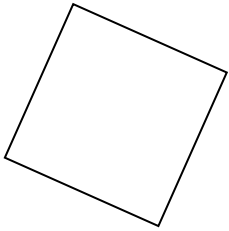


3)

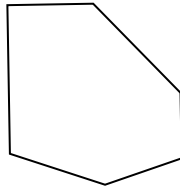


1. andere

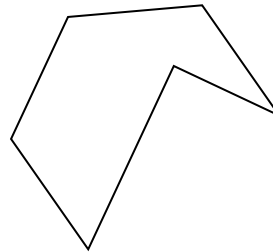
4)



5)



6)



2. triangle

3. rectangle

4. square

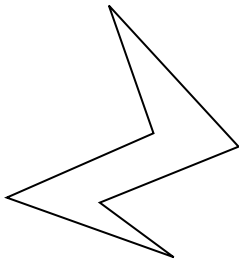
5. Sechseck

6. Sechseck

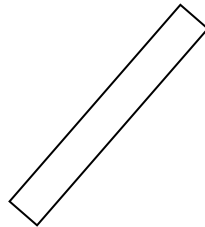
7. Sechseck

8. rectangle

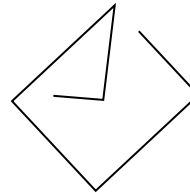
7)



8)



9)



9. andere

10. triangle

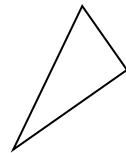
11. triangle

12. andere

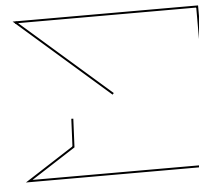
10)



11)



12)




13. andere


14. triangle

15. rectangle

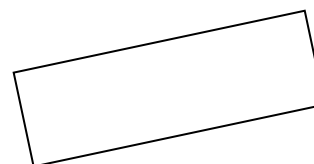
13)



14)



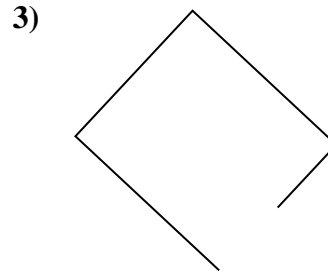
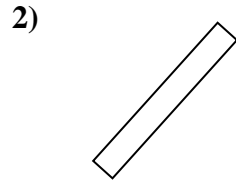
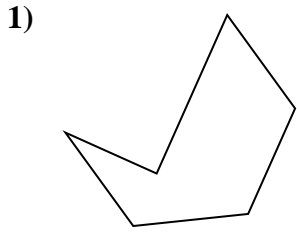
15)



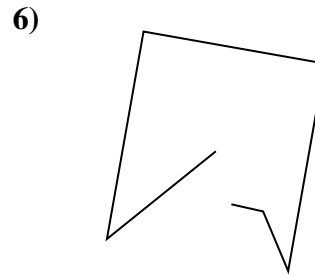
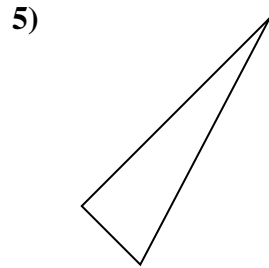
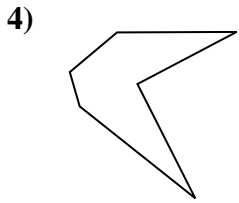


Stelle fest, was die gezeigten Formen sind: Dreieck, Quadrat, Rechteck, Sechseck oder eine andere Figur.

Antworten



1. _____



2. _____

3. _____


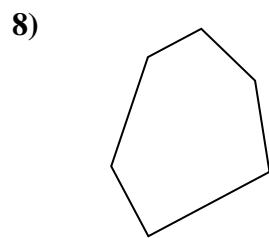
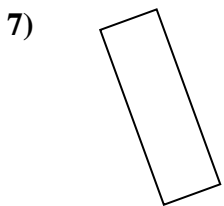
4. _____

5. _____

6. _____

7. _____

8. _____

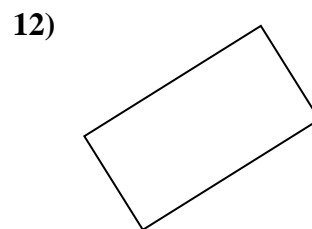
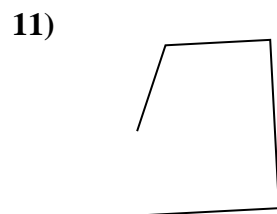
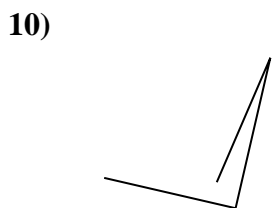


9. _____

10. _____

11. _____

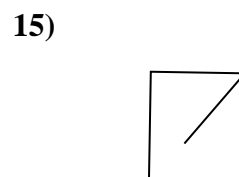
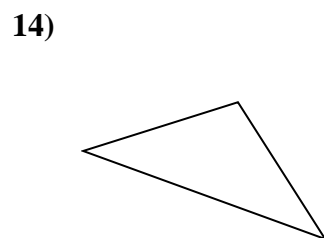
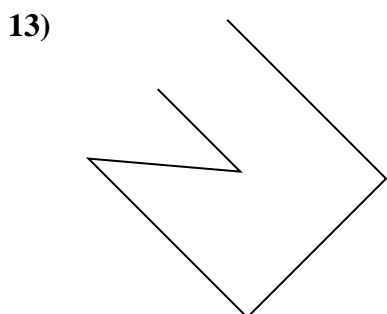
12. _____



13. _____

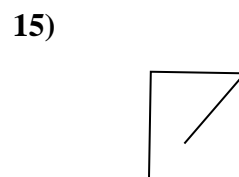
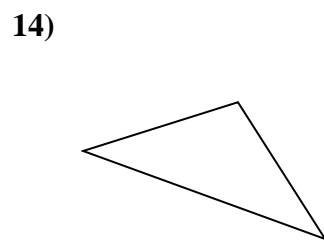
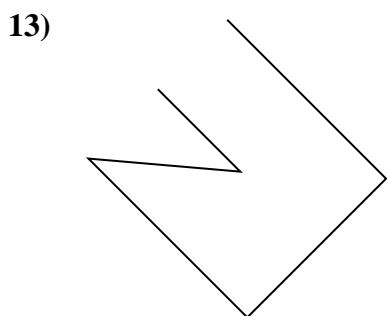
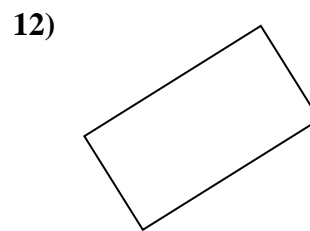
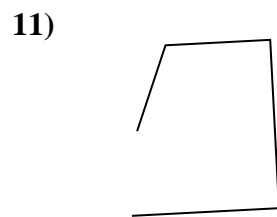
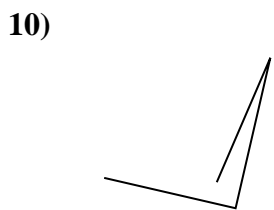

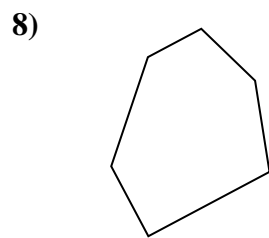
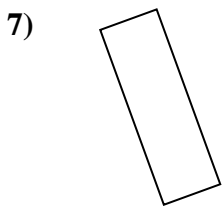
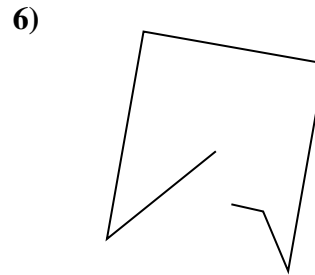
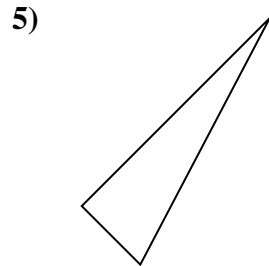
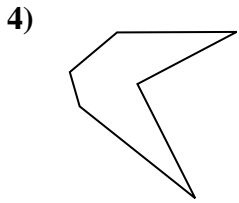
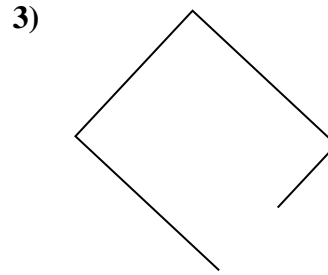
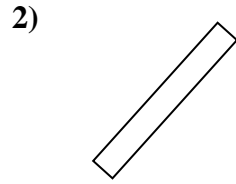
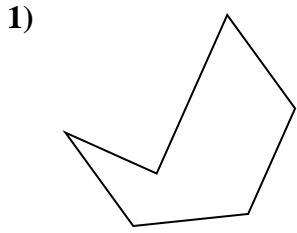
14. _____

15. _____





Stelle fest, was die gezeigten Formen sind: Dreieck, Quadrat, Rechteck, Sechseck oder eine andere Figur.



Antworten

1. Sechseck

2. rectangle

3. andere

4. Sechseck

5. triangle

6. andere

7. rectangle

8. Sechseck

9. triangle

10. andere

11. andere

12. rectangle

13. andere

14. triangle

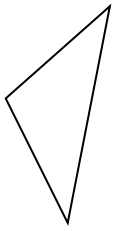
15. andere



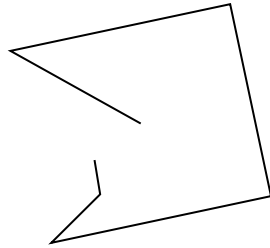
Stelle fest, was die gezeigten Formen sind: Dreieck, Quadrat, Rechteck, Sechseck oder eine andere Figur.

Antworten

1)



2)



3)



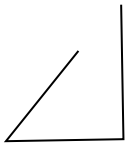
1. _____

2. _____

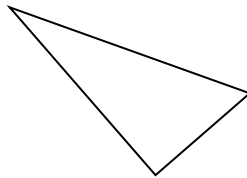
3. _____

4. _____

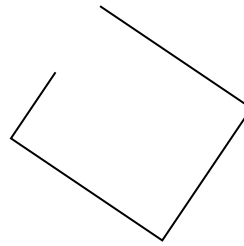
4)



5)



6)



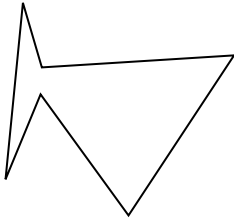
5. _____

6. _____

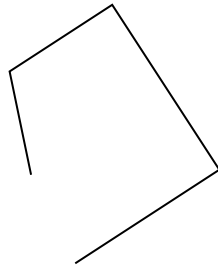
7. _____

8. _____


7)



8)



9)




9. _____

10. _____

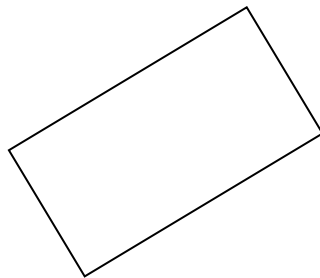
11. _____

12. _____


10)



11)



12)

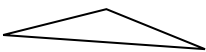


13. _____


14. _____

15. _____

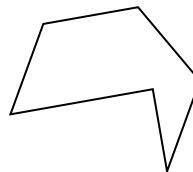
13)



14)



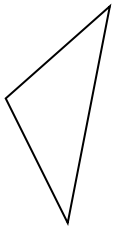
15)



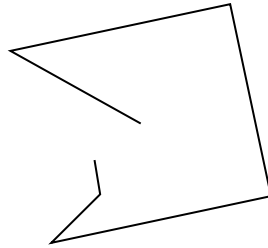


Stelle fest, was die gezeigten Formen sind: Dreieck, Quadrat, Rechteck, Sechseck oder eine andere Figur.

1)



2)



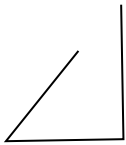
3)



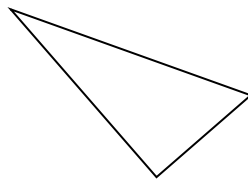
1.

triangle

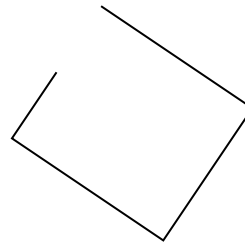
4)



5)



6)



2.

andere

3.

andere

4.

andere

5.

triangle

6.

andere

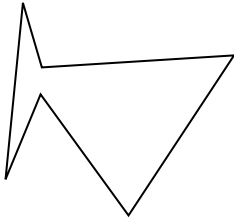
7.

Sechseck

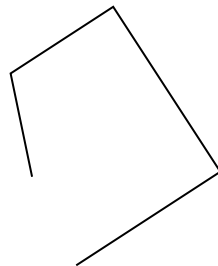
8.

andere


7)



8)



9)



9.

triangle

10.

andere


11.

rectangle

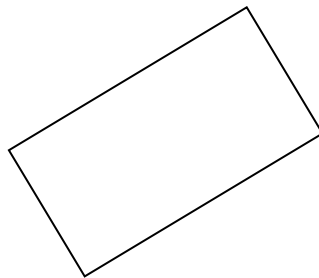
12.

Sechseck


10)



11)



12)



13.

triangle

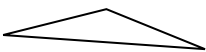
14.

andere


15.

Sechseck

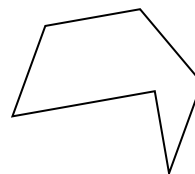
13)



14)



15)





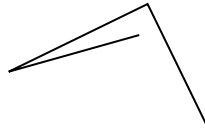
Stelle fest, was die gezeigten Formen sind: Dreieck, Quadrat, Rechteck, Sechseck oder eine andere Figur.

Antworten

1)



2)



3)



1. _____

2. _____

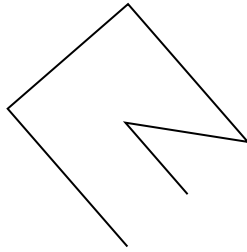
3. _____

4. _____

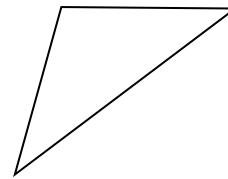
4)



5)



6)



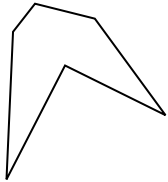
5. _____

6. _____

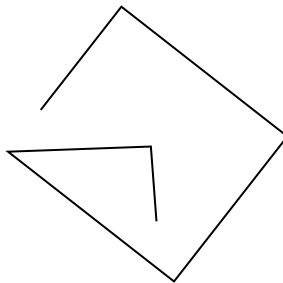
7. _____

8. _____


7)



8)



9)




9. _____

10. _____

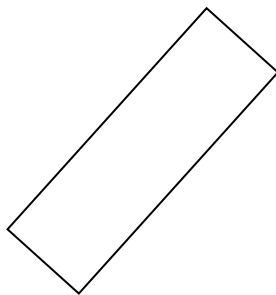
11. _____

12. _____

10)



11)



12)

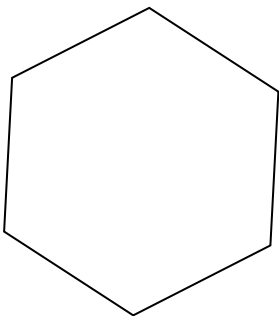


13. _____

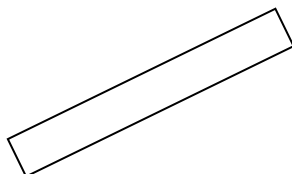
14. _____

15. _____

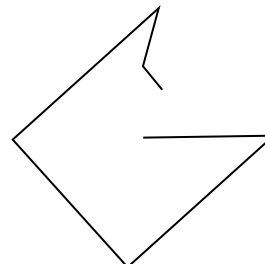
13)



14)



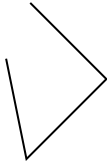
15)



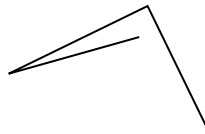


Stelle fest, was die gezeigten Formen sind: Dreieck, Quadrat, Rechteck, Sechseck oder eine andere Figur.

1)



2)



3)



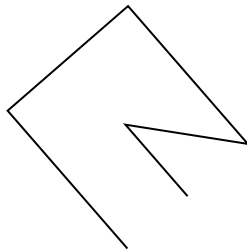
1.

andere

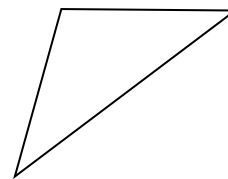
4)



5)



6)



2.

andere

3.

triangle

4.

andere

5.

andere

6.

triangle

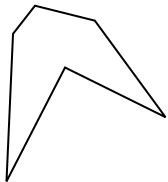
7.

Sechseck

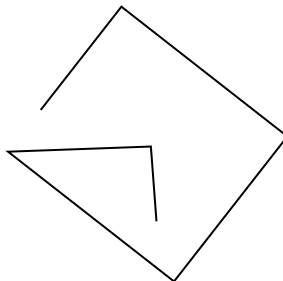
8.

andere


7)



8)



9)



9.

triangle

10.

square


11.

rectangle

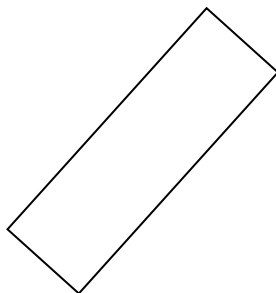
12.

rectangle

10)



11)



12)



13.

Sechseck

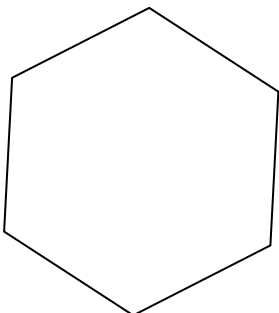
14.

rectangle

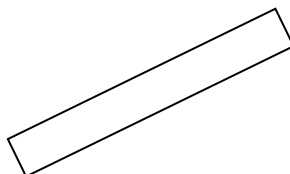
15.

andere

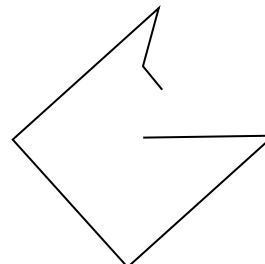
13)



14)



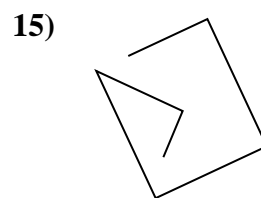
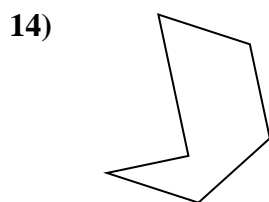
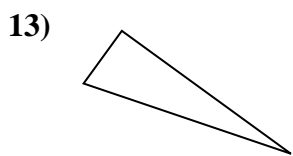
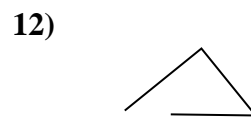
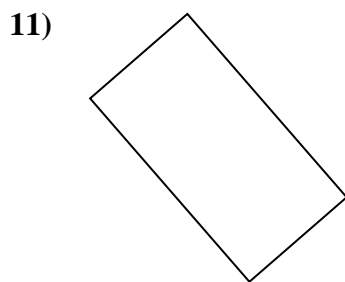
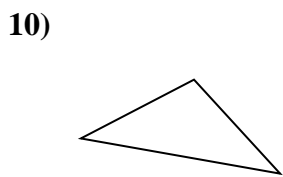

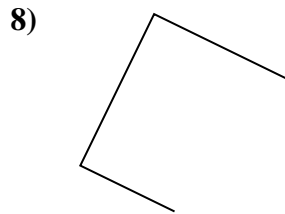
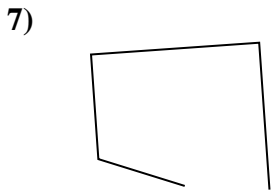
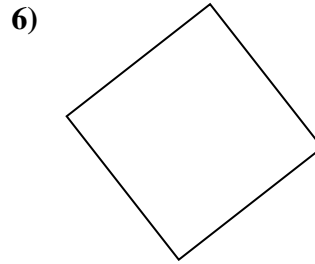
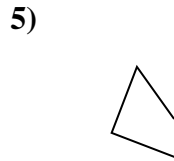
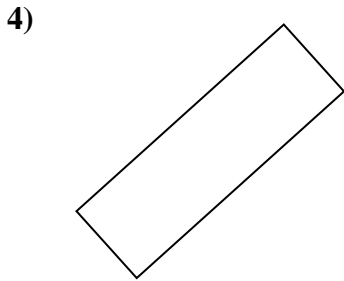
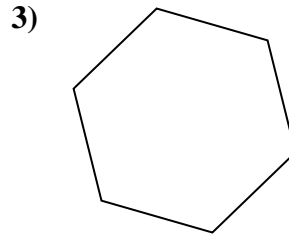
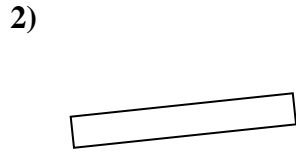
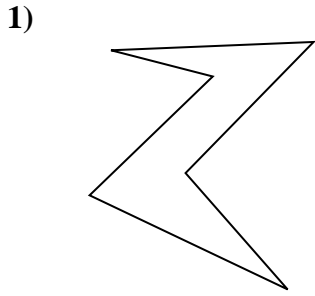
15)





Stelle fest, was die gezeigten Formen sind: Dreieck, Quadrat, Rechteck, Sechseck oder eine andere Figur.

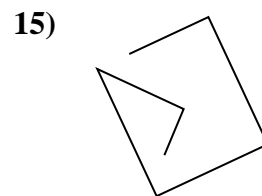
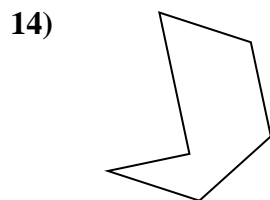
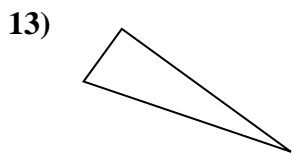
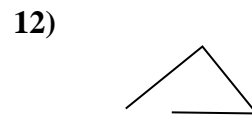
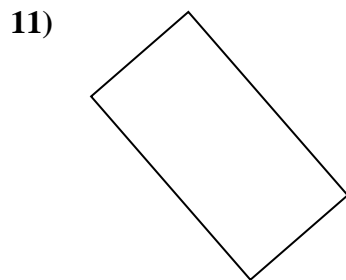
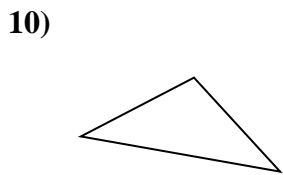
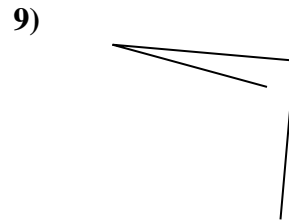
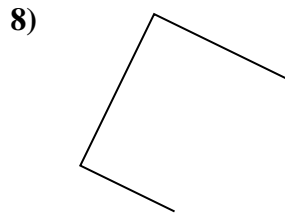
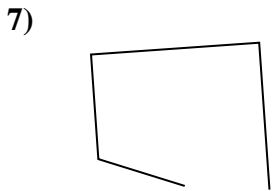
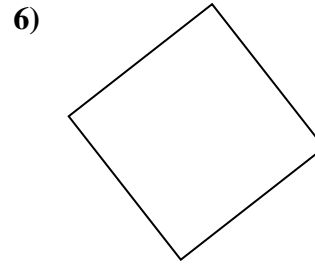
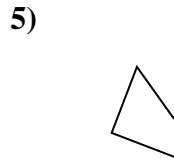
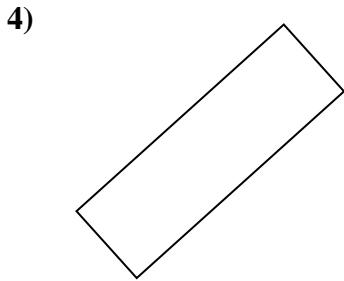
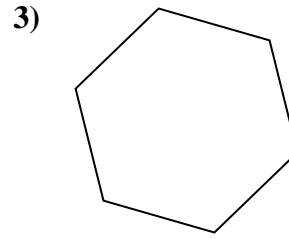
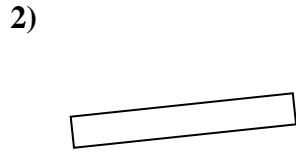
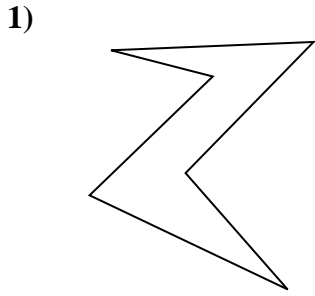
Antworten



- 1. _____
- 2. _____
- 3. _____
- 4. _____
- 5. _____
- 6. _____
- 7. _____
- 8. _____
- 9. _____
- 10. _____
- 11. _____
- 12. _____
- 13. _____
- 14. _____
- 15. _____



Stelle fest, was die gezeigten Formen sind: Dreieck, Quadrat, Rechteck, Sechseck oder eine andere Figur.



Antworten

1. Sechseck

2. rectangle

3. Sechseck

4. rectangle

5. andere

6. square

7. andere

8. andere

9. andere

10. triangle

11. rectangle

12. andere

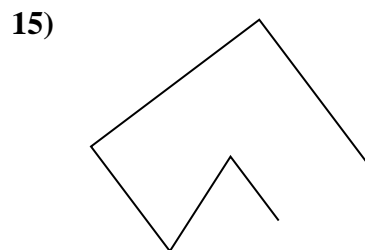
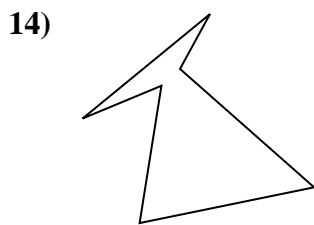
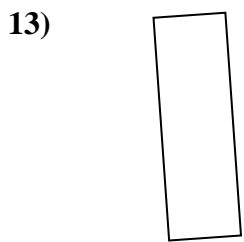
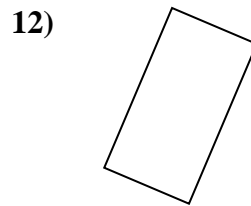
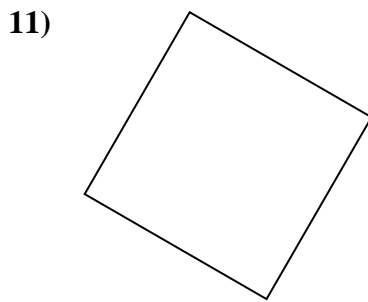
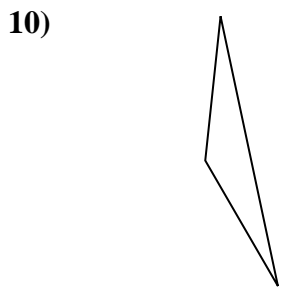
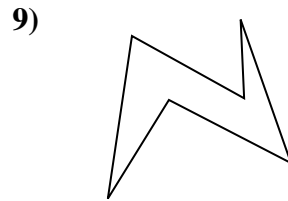
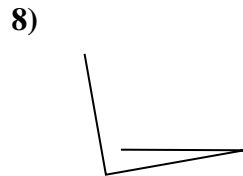

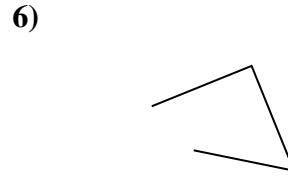
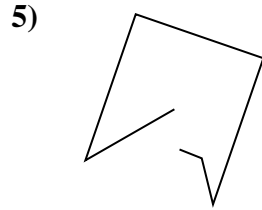
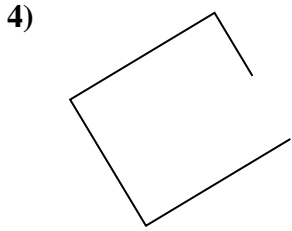

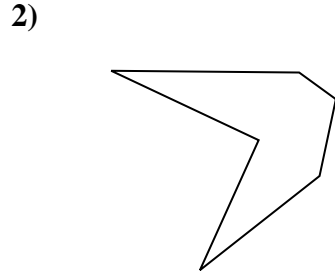
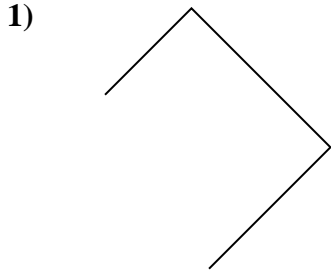
13. triangle

14. Sechseck

15. andere



Stelle fest, was die gezeigten Formen sind: Dreieck, Quadrat, Rechteck, Sechseck oder eine andere Figur.

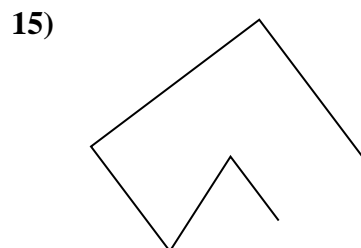

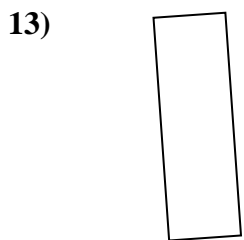
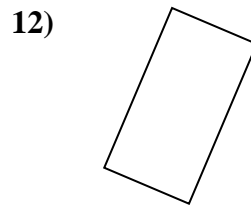
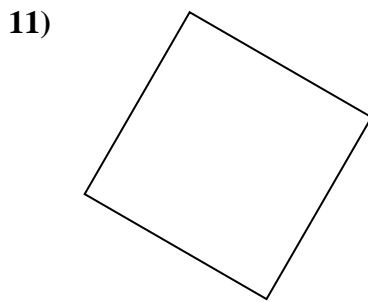
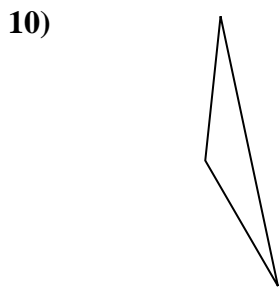

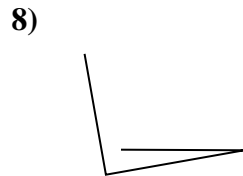

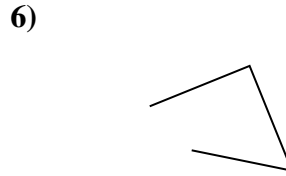
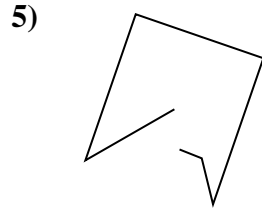
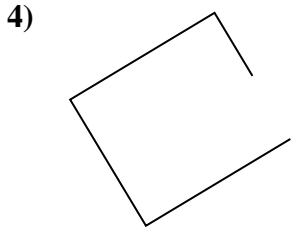

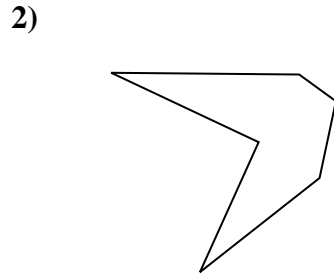
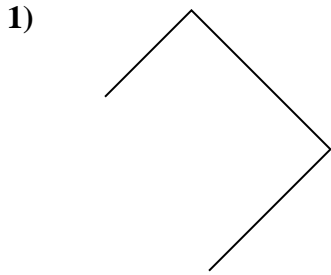


Antworten

- 1. _____
- 2. _____
- 3. _____
- 4. _____
- 5. _____
- 6. _____
- 7. _____
- 8. _____
- 9. _____
- 10. _____
- 11. _____
- 12. _____
- 13. _____
- 14. _____
- 15. _____



Stelle fest, was die gezeigten Formen sind: Dreieck, Quadrat, Rechteck, Sechseck oder eine andere Figur.



Antworten

1. andere

2. Sechseck

3. rectangle

4. andere

5. andere

6. andere

7. triangle

8. andere

9. Sechseck

10. triangle

11. square

12. rectangle

13. rectangle

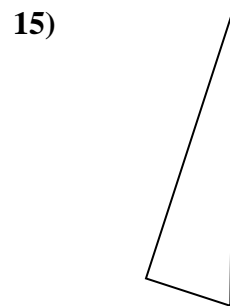
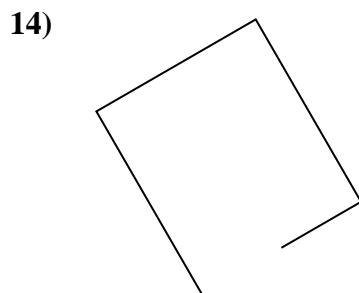
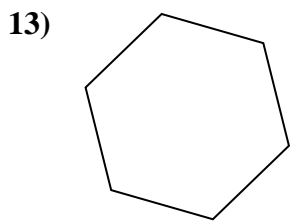
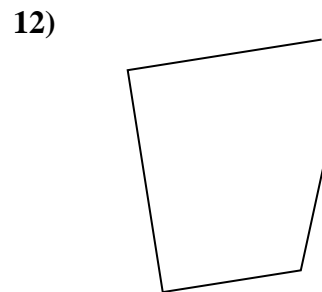
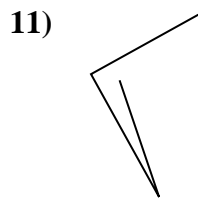
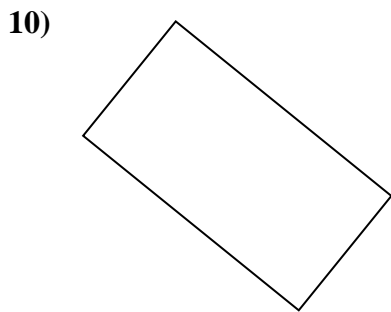
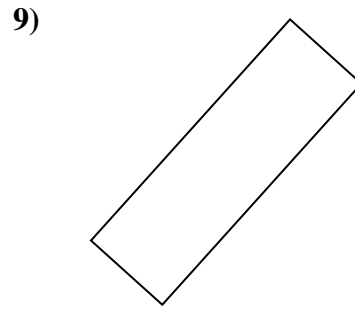
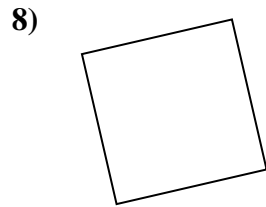
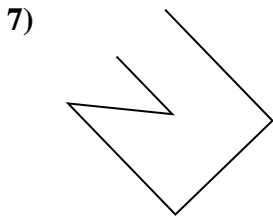
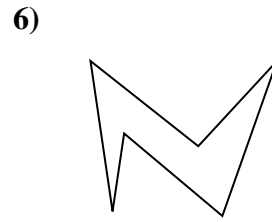
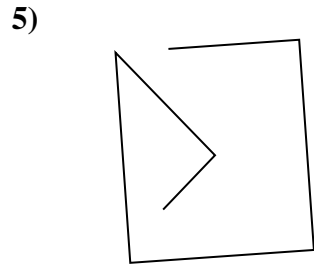
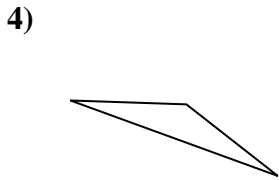
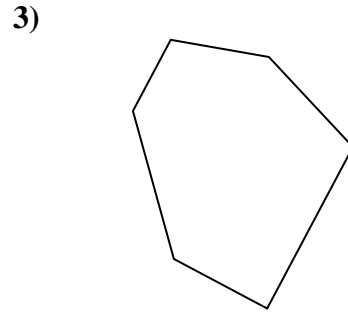
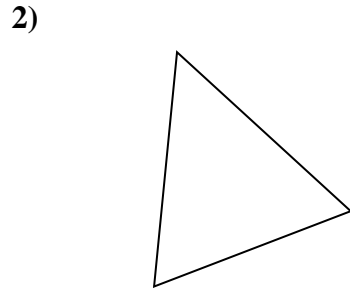
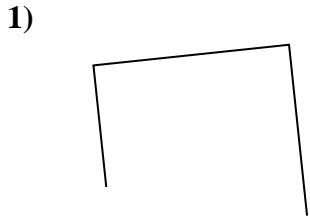
14. Sechseck

15. andere



Stelle fest, was die gezeigten Formen sind: Dreieck, Quadrat, Rechteck, Sechseck oder eine andere Figur.

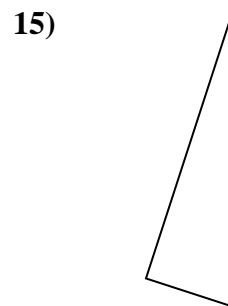
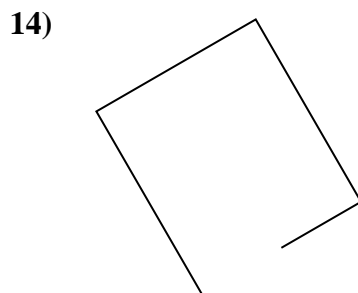
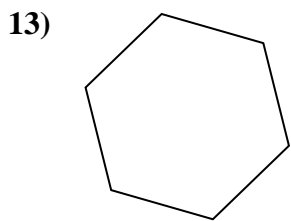
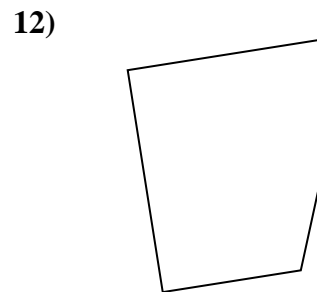
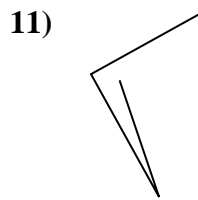
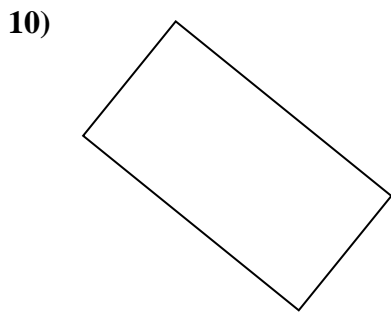
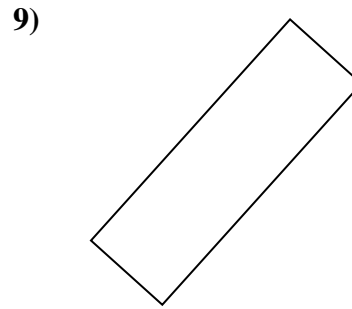
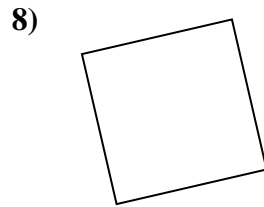
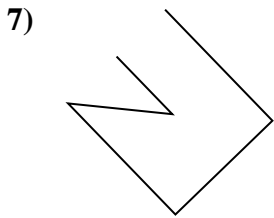
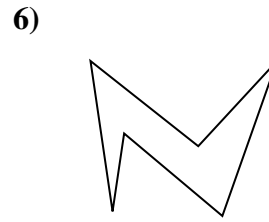
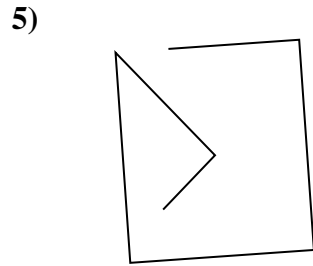
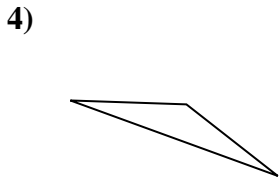
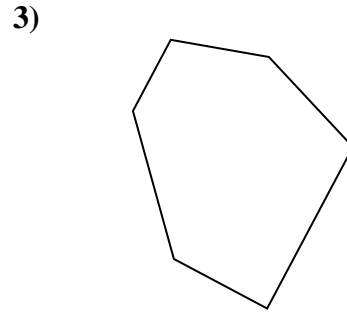
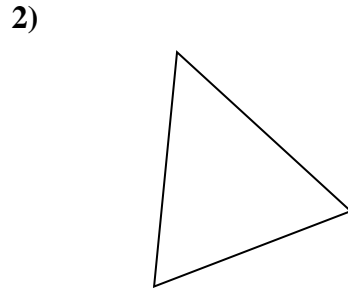
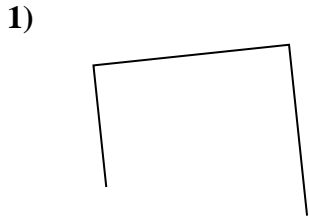
Antworten



- 1. _____
- 2. _____
- 3. _____
- 4. _____
- 5. _____
- 6. _____
- 7. _____
- 8. _____
- 9. _____
- 10. _____
- 11. _____
- 12. _____
- 13. _____
- 14. _____
- 15. _____



Stelle fest, was die gezeigten Formen sind: Dreieck, Quadrat, Rechteck, Sechseck oder eine andere Figur.



Antworten

1. andere

2. triangle

3. Sechseck

4. triangle

5. andere

6. Sechseck

7. andere

8. square

9. rectangle

10. rectangle

11. andere

12. andere

13. Sechseck

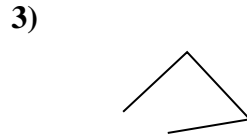
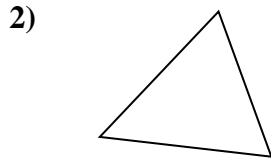

14. andere

15. triangle



Stelle fest, was die gezeigten Formen sind: Dreieck, Quadrat, Rechteck, Sechseck oder eine andere Figur.

Antworten

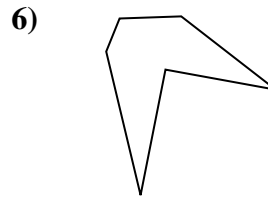
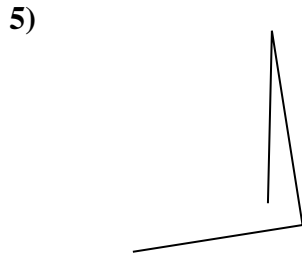
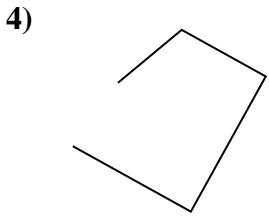


1. _____

2. _____

3. _____

4. _____

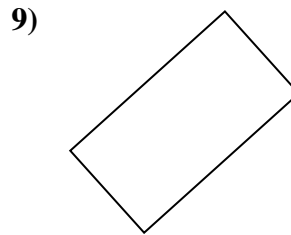
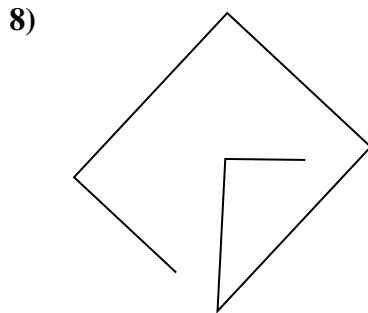
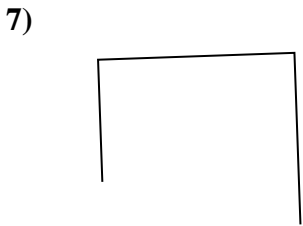


5. _____

6. _____

7. _____

8. _____

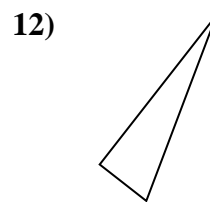
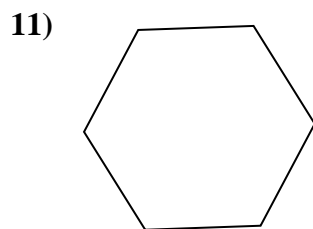
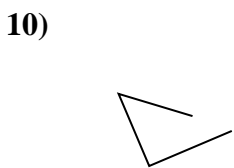


9. _____

10. _____

11. _____

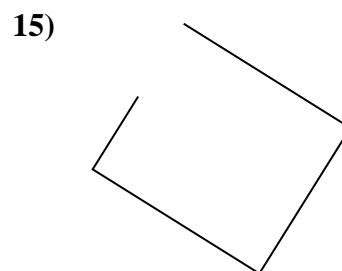
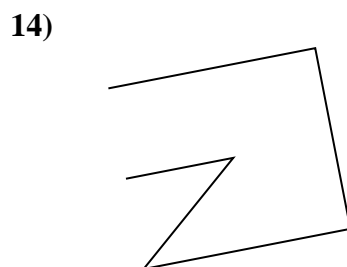

12. _____



13. _____

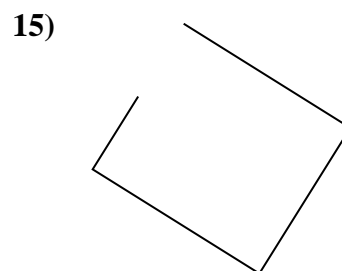
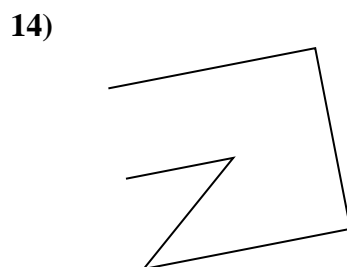

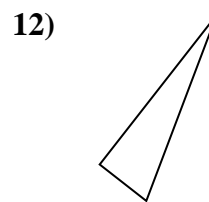
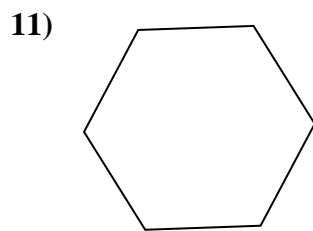
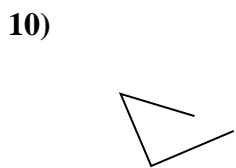
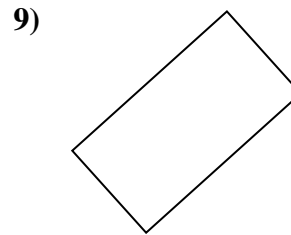
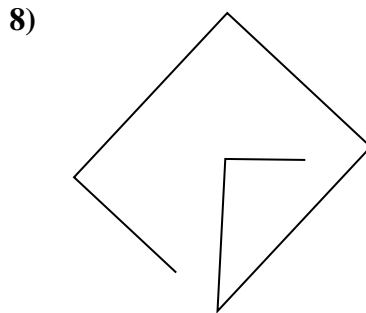
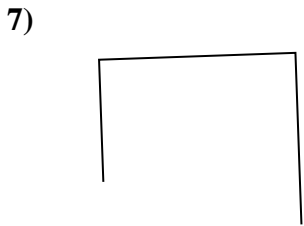
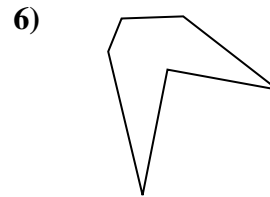
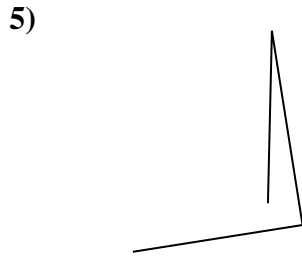
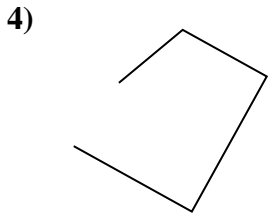
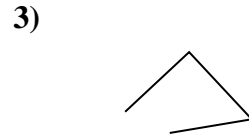
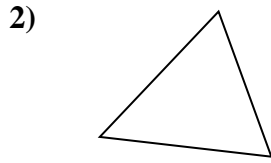

14. _____

15. _____





Stelle fest, was die gezeigten Formen sind: Dreieck, Quadrat, Rechteck, Sechseck oder eine andere Figur.



Antworten

1. Sechseck

2. triangle

3. andere

4. andere

5. andere

6. Sechseck

7. andere

8. andere

9. rectangle

10. andere

11. Sechseck

12. triangle

13. rectangle

14. andere

15. andere



Stelle fest, was die gezeigten Formen sind: Dreieck, Quadrat, Rechteck, Sechseck oder eine andere Figur.

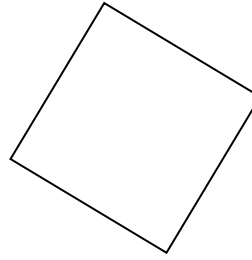
1)



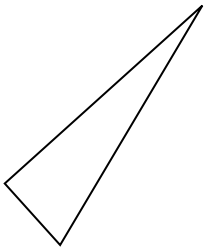
2)



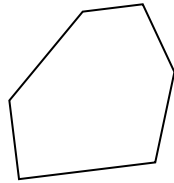
3)



4)



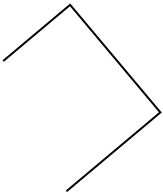
5)




6)



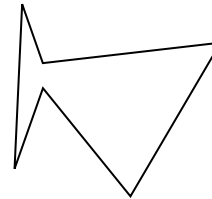
7)



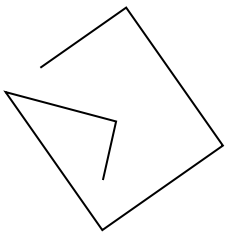
8)



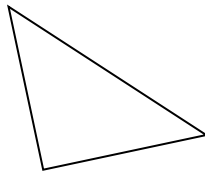
9)



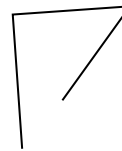
10)



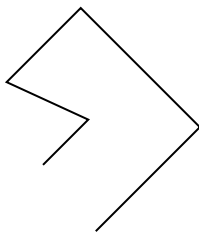
11)



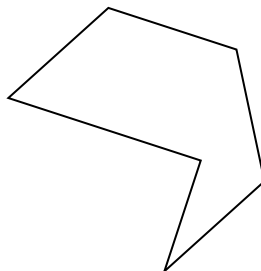
12)



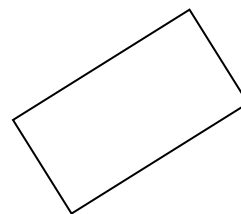
13)



14)



15)



Antworten

- 1. _____
- 2. _____
- 3. _____
- 4. _____
- 5. _____
- 6. _____
- 7. _____
- 8. _____
- 9. _____
- 10. _____
- 11. _____
- 12. _____
- 13. _____
- 14. _____
- 15. _____

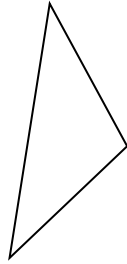


Stelle fest, was die gezeigten Formen sind: Dreieck, Quadrat, Rechteck, Sechseck oder eine andere Figur.

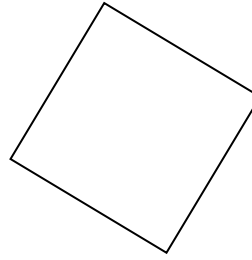
1)



2)



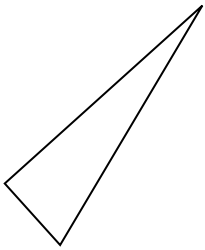
3)



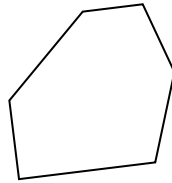
1.

triangle

4)



5)



6)



2.

triangle

3.

square

4.

triangle

5.

Sechseck

6.

andere

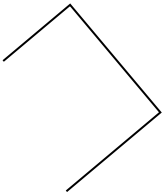
7.

andere


8.

andere

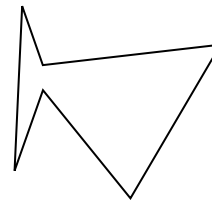
7)



8)



9)



9.

Sechseck

10.

andere

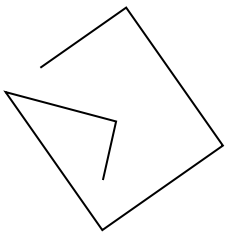
11.

triangle

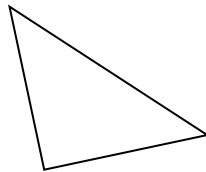
12.

andere

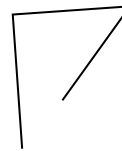
10)



11)



12)



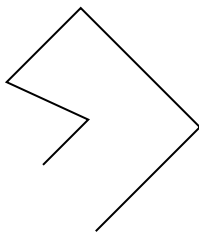
13.

andere

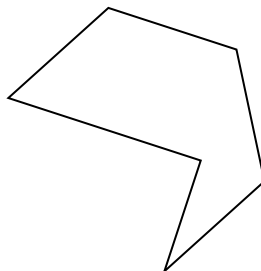
14.

Sechseck

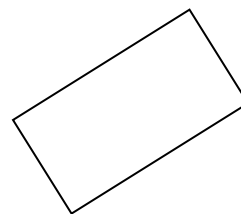
13)



14)



15)



15.

rectangle