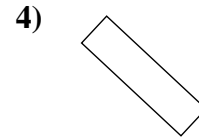
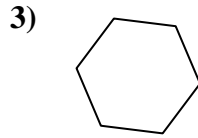
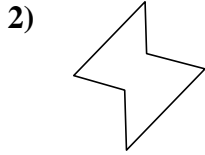
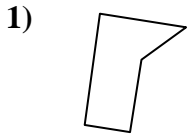




Stelle fest, ob die gezeigte Form viereckig ist (ja) oder nicht (nein).

Antworten

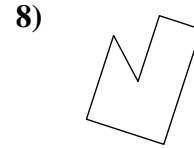
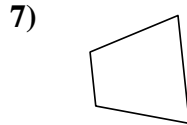
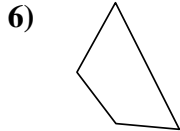
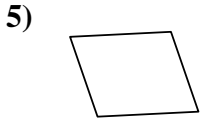


1. _____

2. _____

3. _____

4. _____

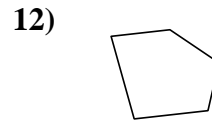
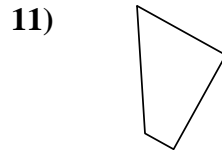
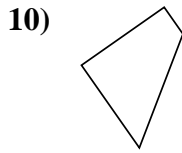


5. _____

6. _____

7. _____

8. _____

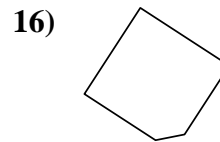
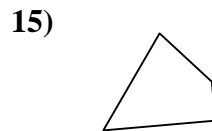
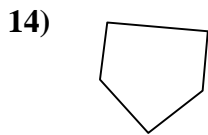
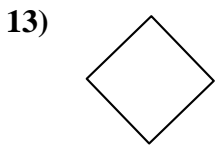


9. _____

10. _____

11. _____

12. _____

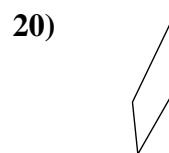
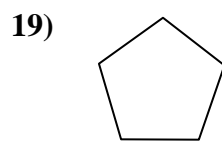
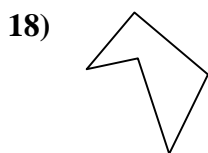
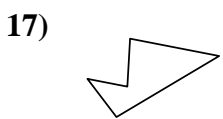


13. _____

14. _____

15. _____

16. _____



17. _____

18. _____

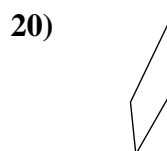
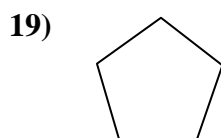
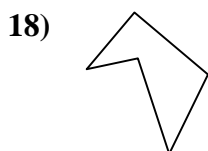
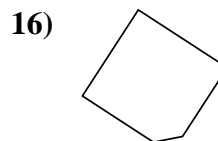
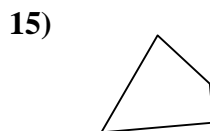
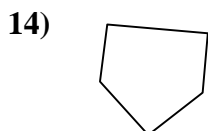
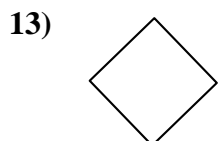
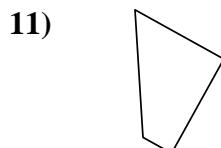
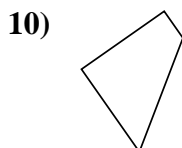
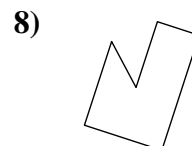
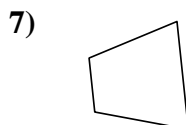
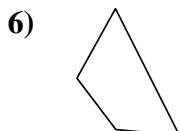
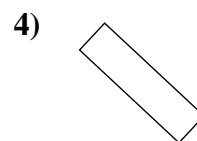
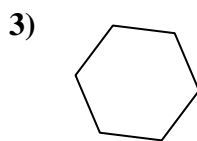
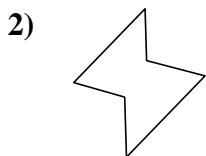
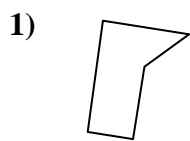
19. _____

20. _____



Stelle fest, ob die gezeigte Form viereckig ist (ja) oder nicht (nein).

Antworten



1. nein

2. nein

3. nein

4. ja

5. ja

6. ja

7. ja

8. nein

9. ja

10. ja

11. ja

12. nein

13. ja

14. nein

15. ja

16. nein

17. nein

18. nein

19. nein

20. ja