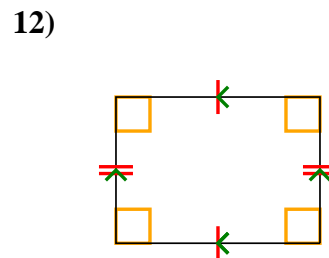
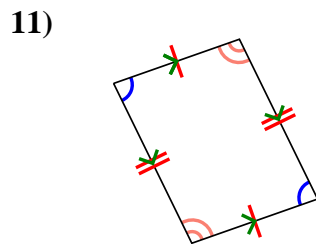
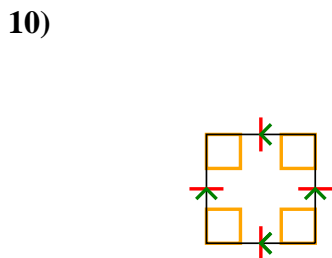
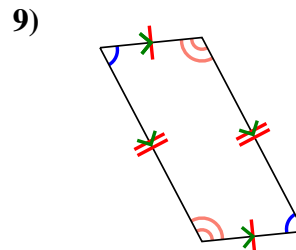
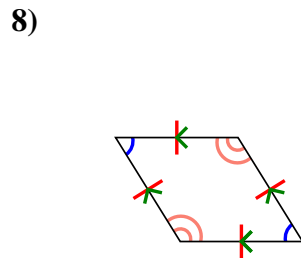
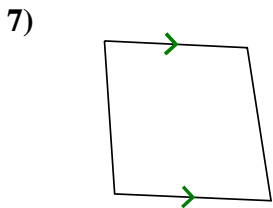
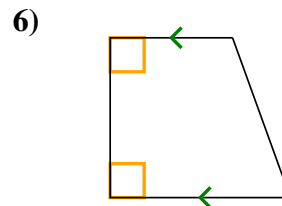
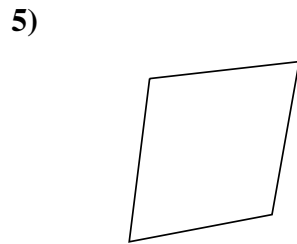
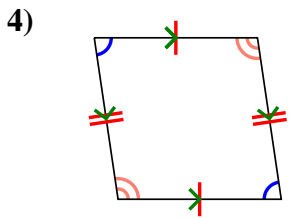
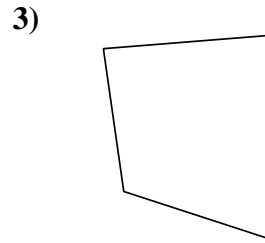
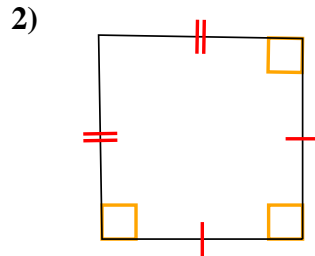
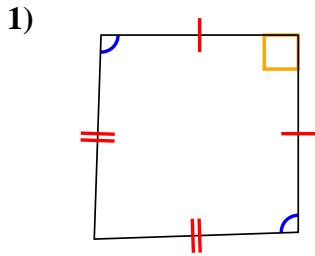




Stelle fest, um was es sich bei den gezeigten Formen handelt: Viereck, Drachenviereck, Trapez, Parallelogramm, Raute, Rechteck oder Quadrat (eine Figur kann mehrere Formen haben).

Antworten

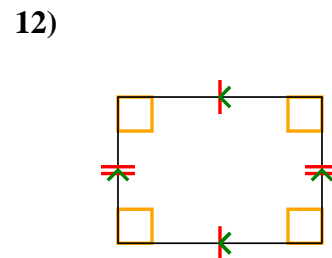
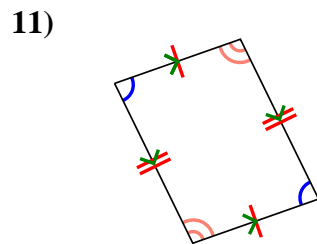
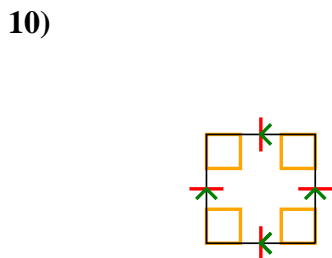
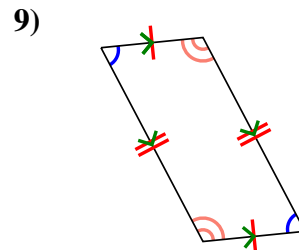
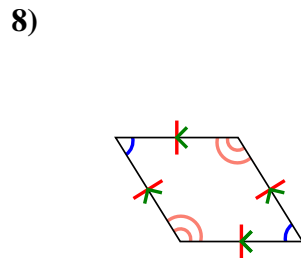
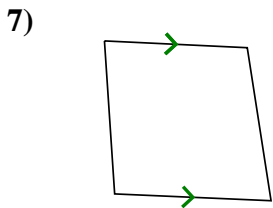
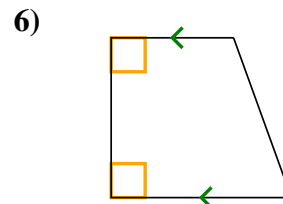
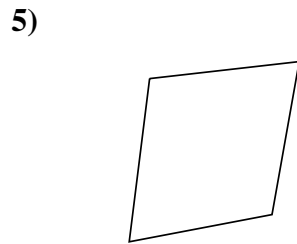
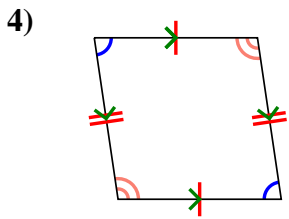
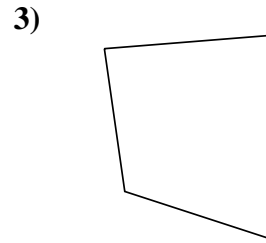
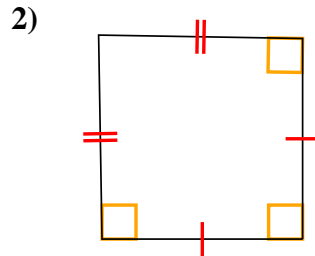
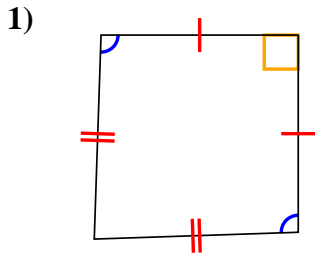


- 1. _____
- 2. _____
- 3. _____
- 4. _____
- 5. _____
- 6. _____
- 7. _____
- 8. _____
- 9. _____
- 10. _____
- 11. _____
- 12. _____



Stelle fest, um was es sich bei den gezeigten Formen handelt: Viereck, Drachenviereck, Trapez, Parallelogramm, Raute, Rechteck oder Quadrat (eine Figur kann mehrere Formen haben).

Antworten



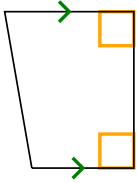
- 1. Q,K
- 2. Q,K
- 3. Q
- 4. Q,P
- 5. Q
- 6. Q,T
- 7. Q,T
- 8. Q,P,H
- 9. Q,P
- 10. Q,P,H,R,S
- 11. Q,P
- 12. Q,P,R



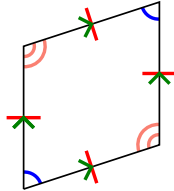
Stelle fest, um was es sich bei den gezeigten Formen handelt: Viereck, Drachenviereck, Trapez, Parallelogramm, Raute, Rechteck oder Quadrat (eine Figur kann mehrere Formen haben).

Antworten


1)



2)



3)



1. _____

2. _____

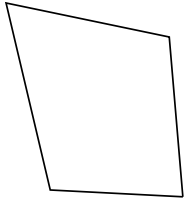
3. _____

4. _____

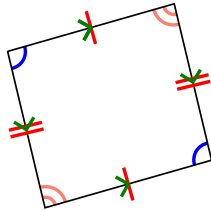
5. _____

6. _____

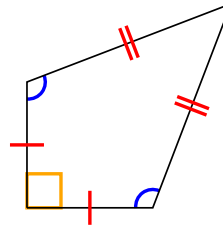
4)



5)



6)



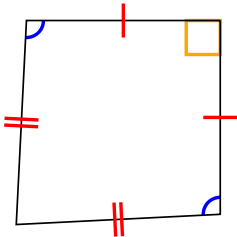
7. _____

8. _____

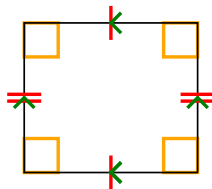
9. _____

10. _____

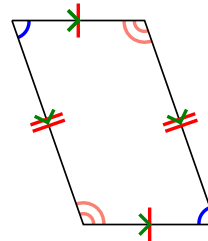
7)



8)



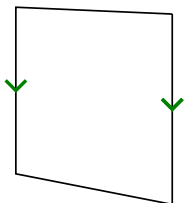
9)



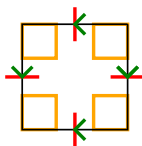
11. _____

12. _____


10)



11)



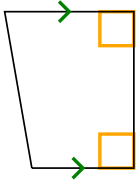
12)



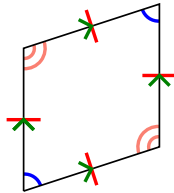


Stelle fest, um was es sich bei den gezeigten Formen handelt: Viereck, Drachenviereck, Trapez, Parallelogramm, Raute, Rechteck oder Quadrat (eine Figur kann mehrere Formen haben).


1)



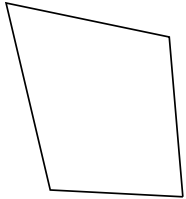
2)



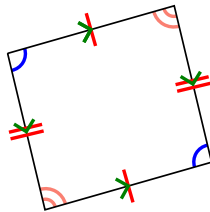
3)



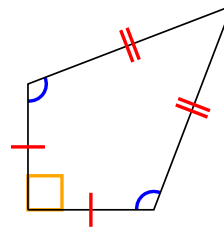
4)



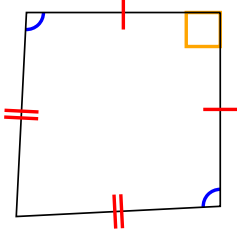
5)



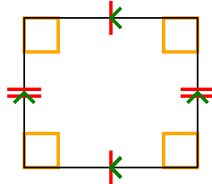
6)



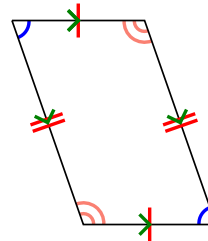
7)



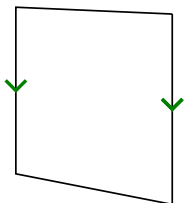
8)



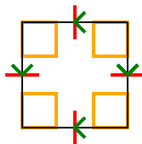
9)




10)



11)



12)



Antworten

1. Q,T

2. Q,P,H

3. Q

4. Q

5. Q,P

6. Q,K

7. Q,K

8. Q,P,R

9. Q,P

10. Q,T

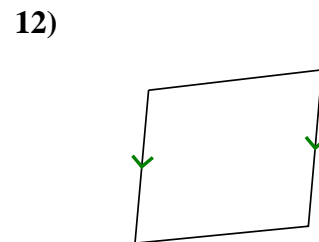
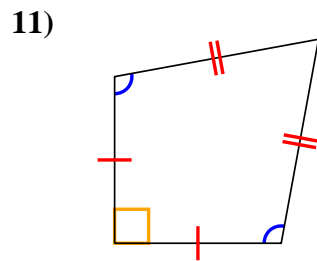
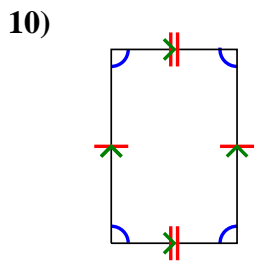
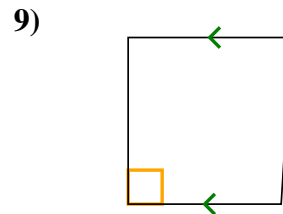
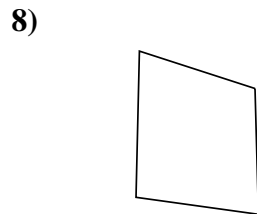
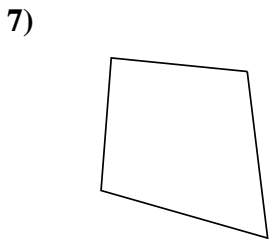
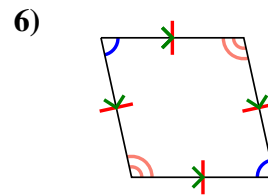
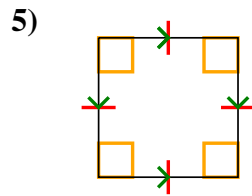
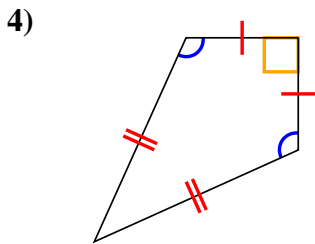
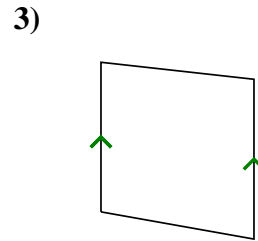
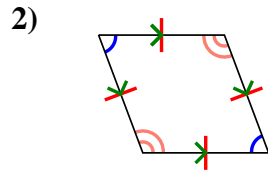
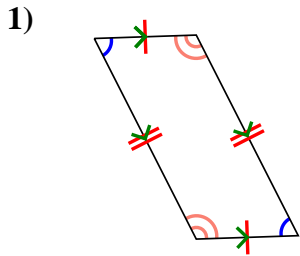
11. Q,P,H,R,S

12. Q



Stelle fest, um was es sich bei den gezeigten Formen handelt: Viereck, Drachenviereck, Trapez, Parallelogramm, Raute, Rechteck oder Quadrat (eine Figur kann mehrere Formen haben).

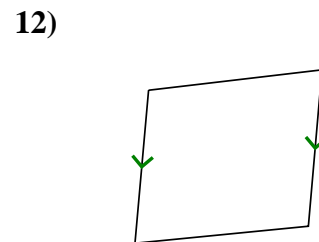
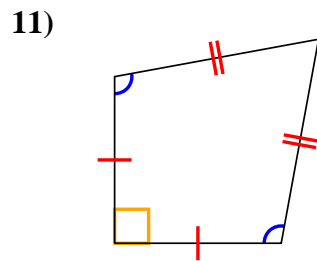
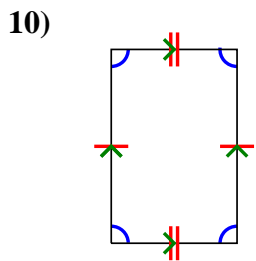
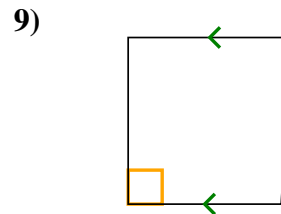
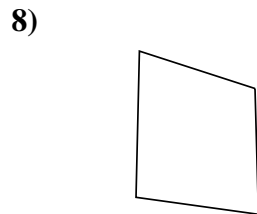
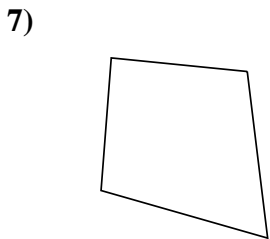
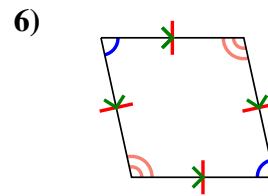
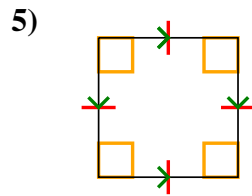
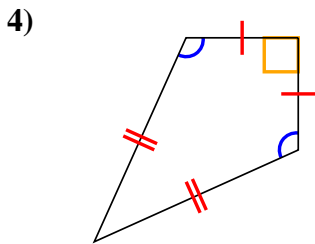
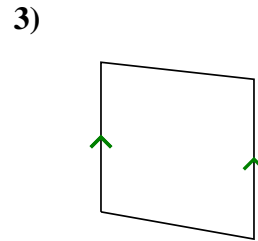
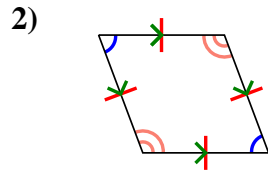
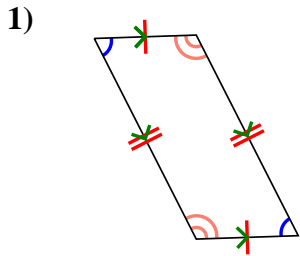
Antworten



1. _____
2. _____
3. _____
4. _____
5. _____
6. _____
7. _____
8. _____
9. _____
10. _____
11. _____
12. _____



Stelle fest, um was es sich bei den gezeigten Formen handelt: Viereck, Drachenviereck, Trapez, Parallelogramm, Raute, Rechteck oder Quadrat (eine Figur kann mehrere Formen haben).



Antworten

1. Q,P

2. Q,P,H

3. Q,T

4. Q,K

5. Q,P,H,R,S

6. Q,P,H

7. Q

8. Q

9. Q,T

10. Q,P

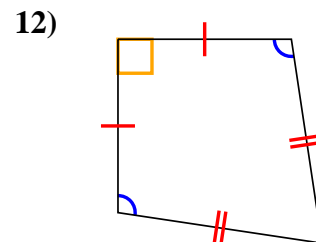
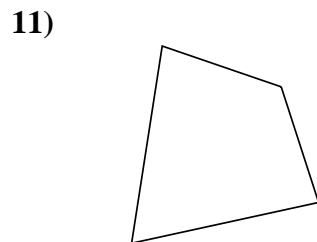
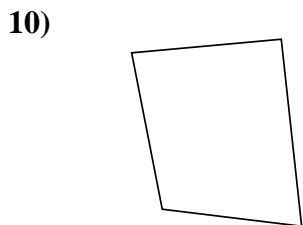
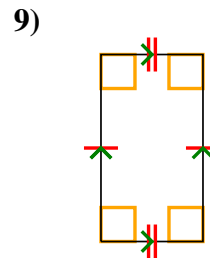
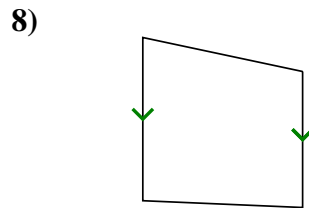
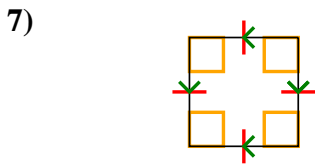
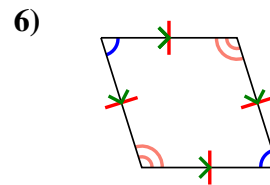
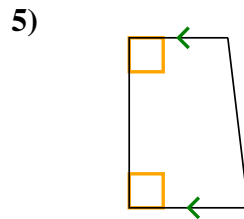
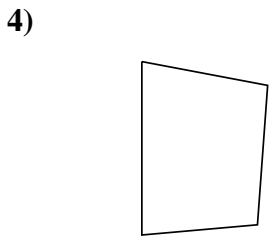
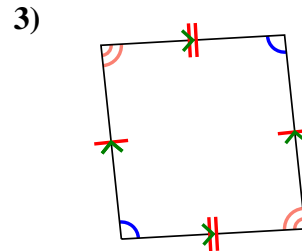
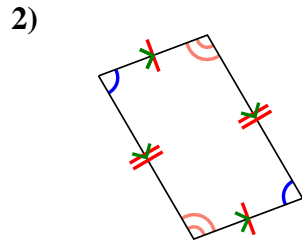
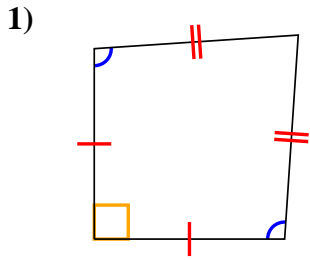
11. Q,K

12. Q,T



Stelle fest, um was es sich bei den gezeigten Formen handelt: Viereck, Drachenviereck, Trapez, Parallelogramm, Raute, Rechteck oder Quadrat (eine Figur kann mehrere Formen haben).

Antworten

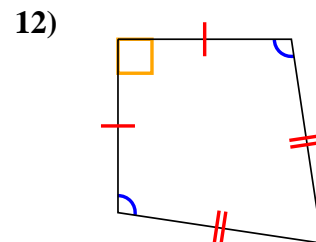
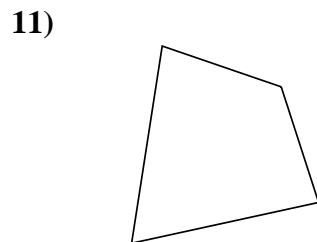
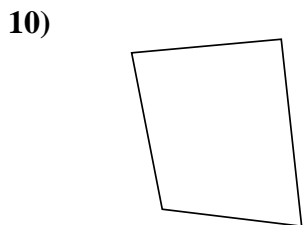
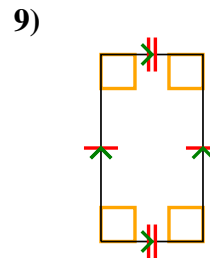
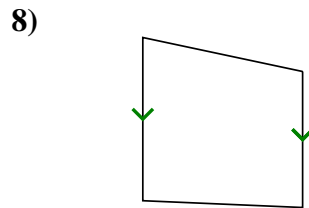
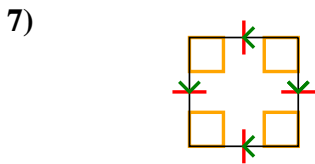
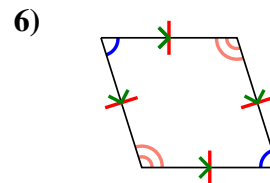
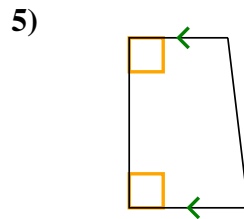
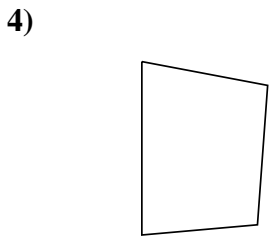
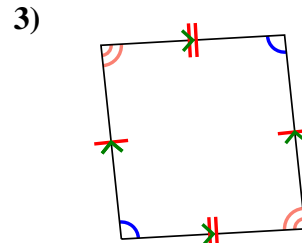
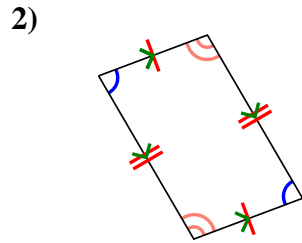
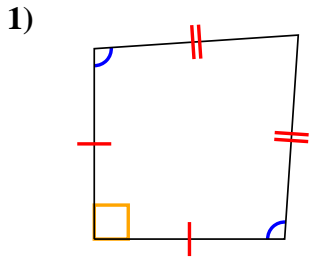


- 1. _____
- 2. _____
- 3. _____
- 4. _____
- 5. _____
- 6. _____
- 7. _____
- 8. _____
- 9. _____
- 10. _____
- 11. _____
- 12. _____



Stelle fest, um was es sich bei den gezeigten Formen handelt: Viereck, Drachenviereck, Trapez, Parallelogramm, Raute, Rechteck oder Quadrat (eine Figur kann mehrere Formen haben).

Antworten



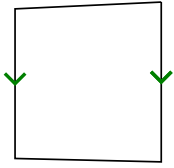
1. Q,K
2. Q,P
3. Q,P
4. Q
5. Q,T
6. Q,P,H
7. Q,P,H,R,S
8. Q,T
9. Q,P,R
10. Q
11. Q
12. Q,K



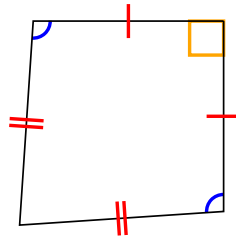
Stelle fest, um was es sich bei den gezeigten Formen handelt: Viereck, Drachenviereck, Trapez, Parallelogramm, Raute, Rechteck oder Quadrat (eine Figur kann mehrere Formen haben).

Antworten

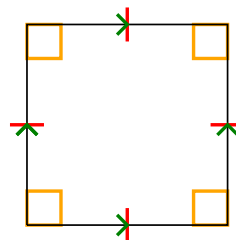
1)



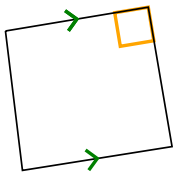
2)



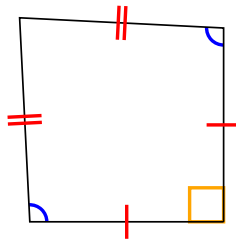
3)



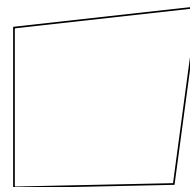
4)



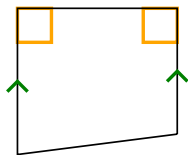
5)



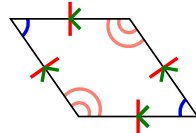
6)



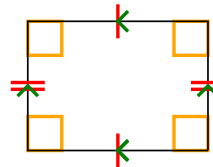
7)



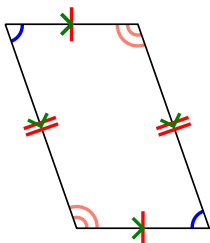
8)



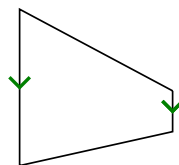
9)



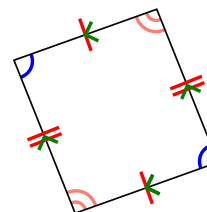
10)



11)



12)



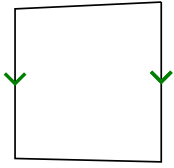
- 1. _____
- 2. _____
- 3. _____
- 4. _____
- 5. _____
- 6. _____
- 7. _____
- 8. _____
- 9. _____
- 10. _____
- 11. _____
- 12. _____



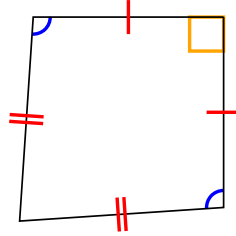
Stelle fest, um was es sich bei den gezeigten Formen handelt: Viereck, Drachenviereck, Trapez, Parallelogramm, Raute, Rechteck oder Quadrat (eine Figur kann mehrere Formen haben).

Antworten

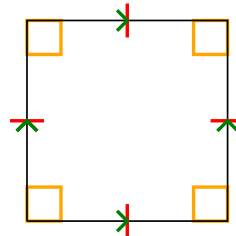
1)



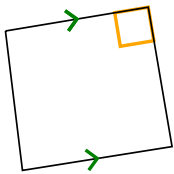
2)



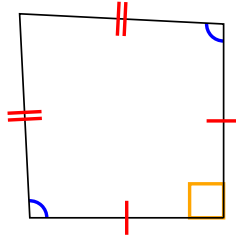
3)



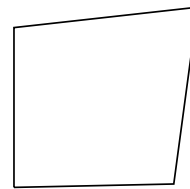
4)



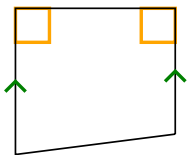
5)



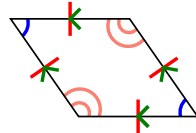
6)



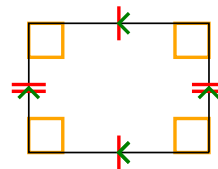
7)



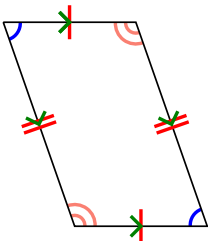
8)



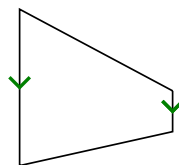
9)



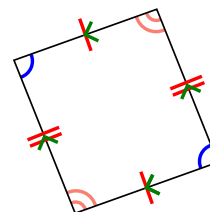
10)



11)



12)



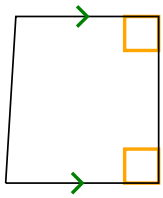
- 1. Q,T
- 2. Q,K
- 3. Q,P,H,R,S
- 4. Q,T
- 5. Q,K
- 6. Q
- 7. Q,T
- 8. Q,P,H
- 9. Q,P,R
- 10. Q,P
- 11. Q,T
- 12. Q,P



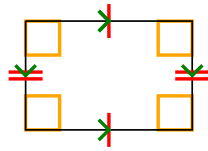
Stelle fest, um was es sich bei den gezeigten Formen handelt: Viereck, Drachenviereck, Trapez, Parallelogramm, Raute, Rechteck oder Quadrat (eine Figur kann mehrere Formen haben).

Antworten


1)



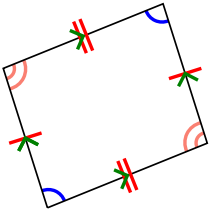
2)



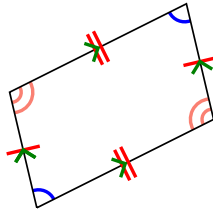
3)



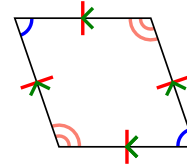
4)



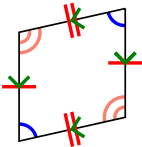
5)



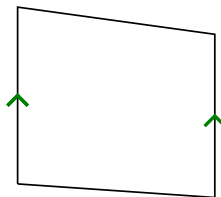
6)



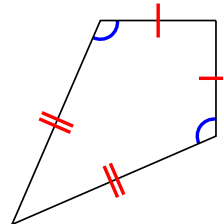
7)



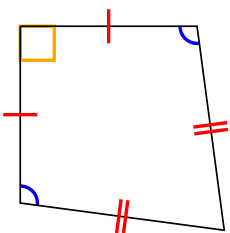
8)



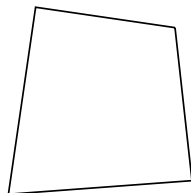
9)




10)



11)



12)

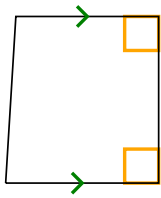


- 1. _____
- 2. _____
- 3. _____
- 4. _____
- 5. _____
- 6. _____
- 7. _____
- 8. _____
- 9. _____
- 10. _____
- 11. _____
- 12. _____

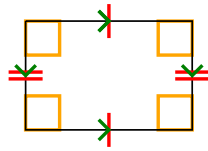


Stelle fest, um was es sich bei den gezeigten Formen handelt: Viereck, Drachenviereck, Trapez, Parallelogramm, Raute, Rechteck oder Quadrat (eine Figur kann mehrere Formen haben).


1)



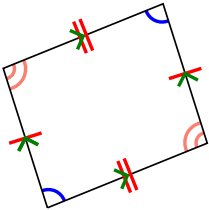
2)



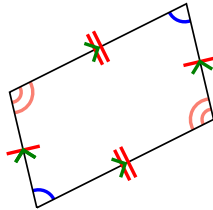
3)



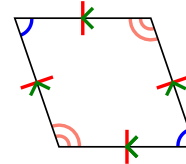
4)



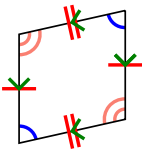
5)



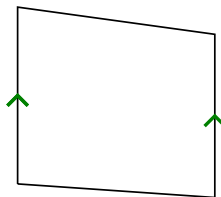
6)



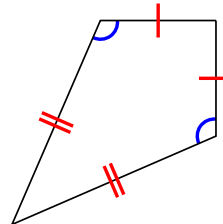
7)



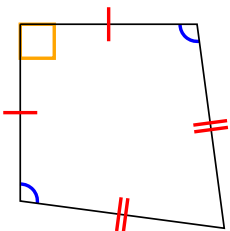
8)



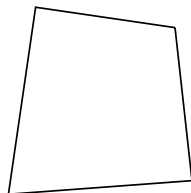
9)




10)



11)



12)



Antworten

1. Q,T

2. Q,P,R

3. Q

4. Q,P

5. Q,P

6. Q,P,H

7. Q,P

8. Q,T

9. Q,K

10. Q,K

11. Q

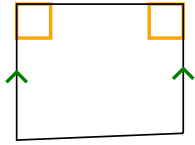
12. Q



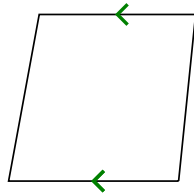
Stelle fest, um was es sich bei den gezeigten Formen handelt: Viereck, Drachenviereck, Trapez, Parallelogramm, Raute, Rechteck oder Quadrat (eine Figur kann mehrere Formen haben).

Antworten


1)



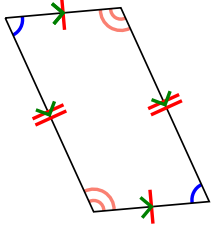
2)



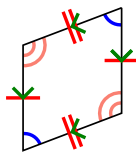
3)



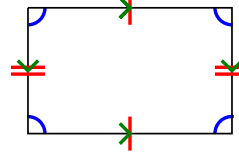
4)



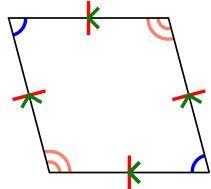
5)



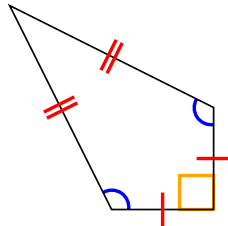
6)



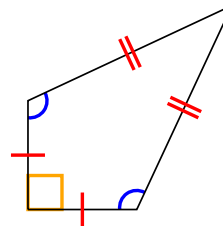
7)



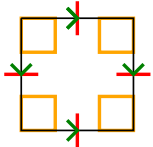
8)



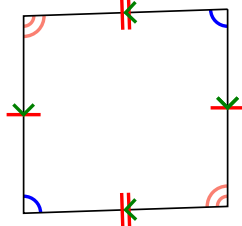
9)




10)



11)



12)

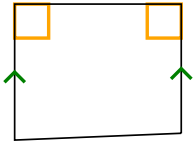


- 1. _____
- 2. _____
- 3. _____
- 4. _____
- 5. _____
- 6. _____
- 7. _____
- 8. _____
- 9. _____
- 10. _____
- 11. _____
- 12. _____

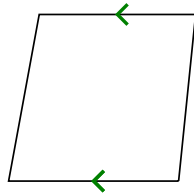


Stelle fest, um was es sich bei den gezeigten Formen handelt: Viereck, Drachenviereck, Trapez, Parallelogramm, Raute, Rechteck oder Quadrat (eine Figur kann mehrere Formen haben).


1)



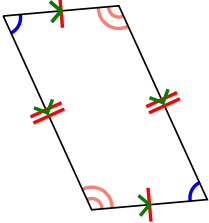
2)



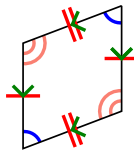
3)



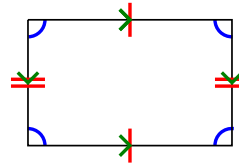
4)



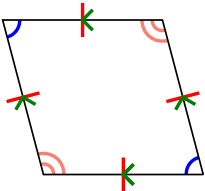
5)



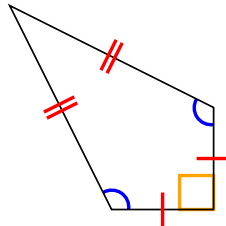
6)



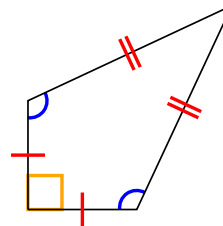
7)



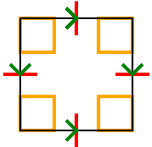
8)



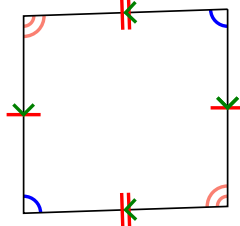
9)




10)



11)



12)



Antworten

1. Q,T

2. Q,T

3. Q

4. Q,P

5. Q,P

6. Q,P

7. Q,P,H

8. Q,K

9. Q,K

10. Q,P,H,R,S

11. Q,P

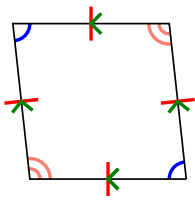
12. Q



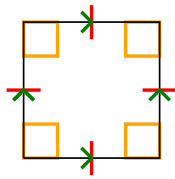
Stelle fest, um was es sich bei den gezeigten Formen handelt: Viereck, Drachenviereck, Trapez, Parallelogramm, Raute, Rechteck oder Quadrat (eine Figur kann mehrere Formen haben).

Antworten

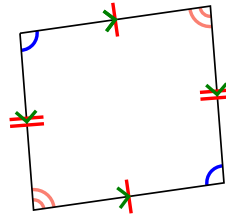
1)



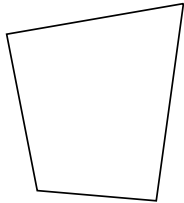
2)



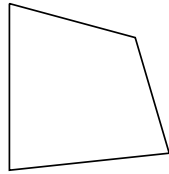
3)



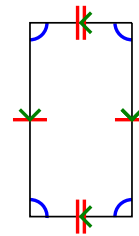
4)



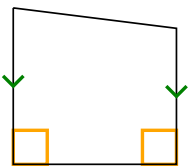
5)



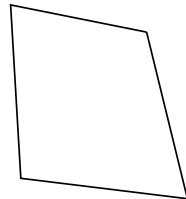
6)



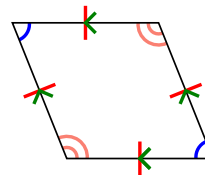
7)



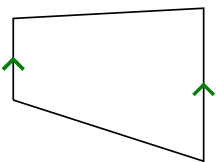
8)



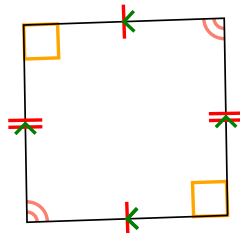
9)



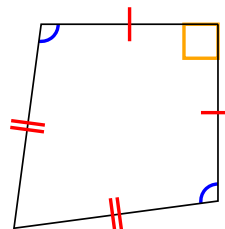
10)



11)



12)

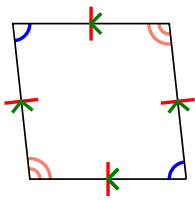


- 1. _____
- 2. _____
- 3. _____
- 4. _____
- 5. _____
- 6. _____
- 7. _____
- 8. _____
- 9. _____
- 10. _____
- 11. _____
- 12. _____

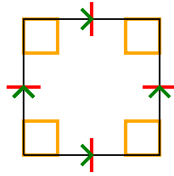


Stelle fest, um was es sich bei den gezeigten Formen handelt: Viereck, Drachenviereck, Trapez, Parallelogramm, Raute, Rechteck oder Quadrat (eine Figur kann mehrere Formen haben).

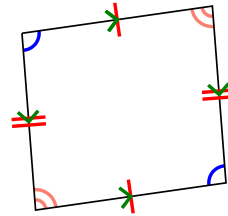
1)



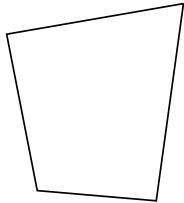
2)



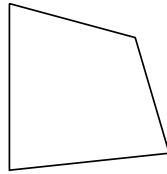
3)



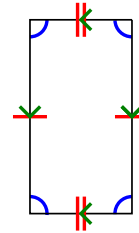
4)



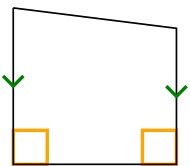
5)



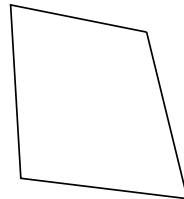
6)



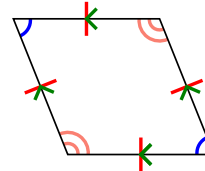
7)



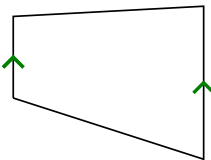
8)



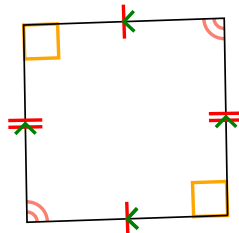
9)



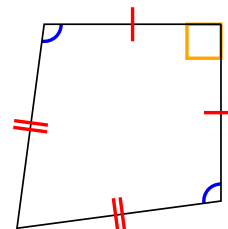
10)



11)



12)



Antworten

1. Q,P,H

2. Q,P,H,R,S

3. Q,P

4. Q

5. Q

6. Q,P

7. Q,T

8. Q

9. Q,P,H

10. Q,T

11. Q,P

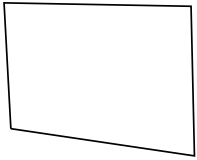
12. Q,K



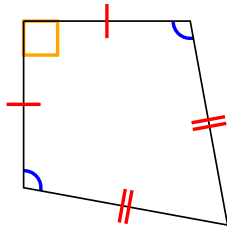
Stelle fest, um was es sich bei den gezeigten Formen handelt: Viereck, Drachenviereck, Trapez, Parallelogramm, Raute, Rechteck oder Quadrat (eine Figur kann mehrere Formen haben).

Antworten

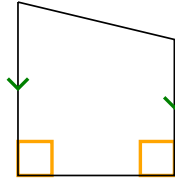
1)



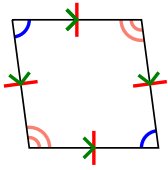
2)



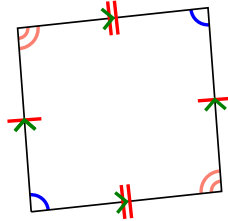
3)



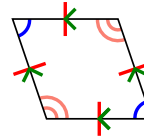
4)



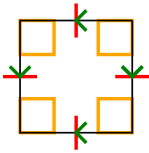
5)



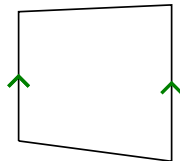
6)



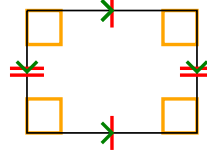
7)



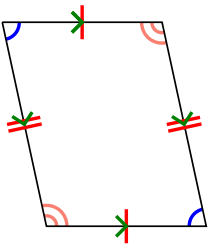
8)



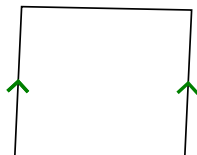
9)



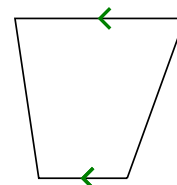
10)



11)



12)

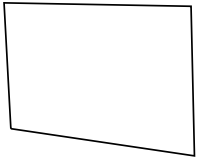


- 1. _____
- 2. _____
- 3. _____
- 4. _____
- 5. _____
- 6. _____
- 7. _____
- 8. _____
- 9. _____
- 10. _____
- 11. _____
- 12. _____

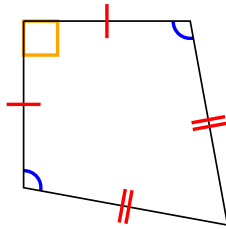


Stelle fest, um was es sich bei den gezeigten Formen handelt: Viereck, Drachenviereck, Trapez, Parallelogramm, Raute, Rechteck oder Quadrat (eine Figur kann mehrere Formen haben).

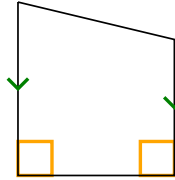
1)



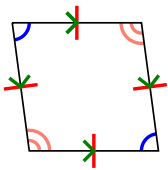
2)



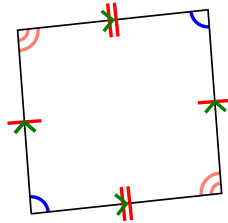
3)



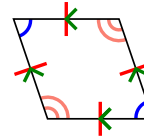
4)



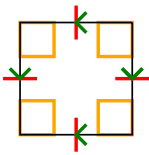
5)



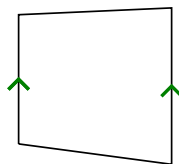
6)



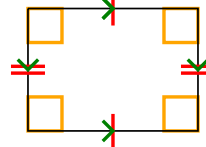
7)



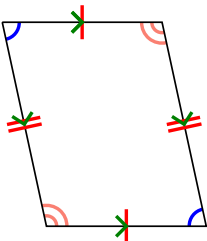
8)



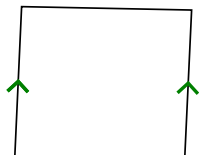
9)



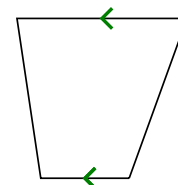
10)



11)



12)



Antworten

1. Q

2. Q,K

3. Q,T

4. Q,P,H

5. Q,P

6. Q,P,H

7. Q,P,H,R,S

8. Q,T

9. Q,P,R

10. Q,P

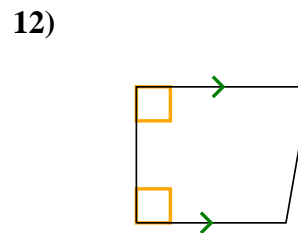
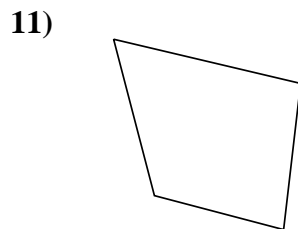
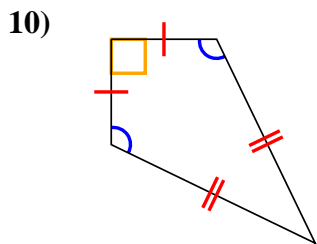
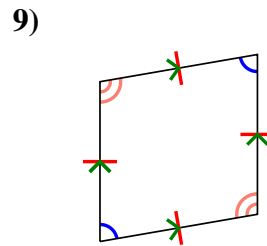
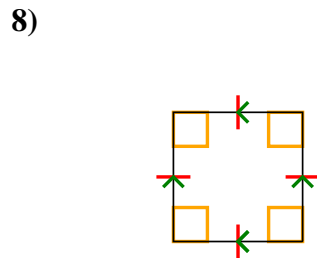
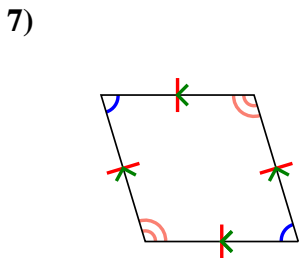
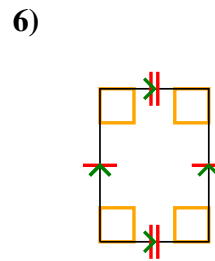
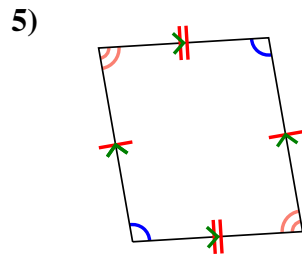
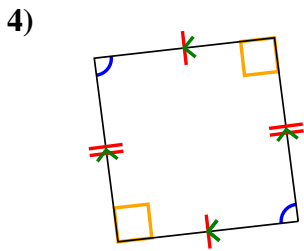
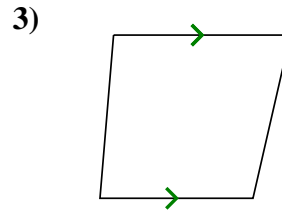
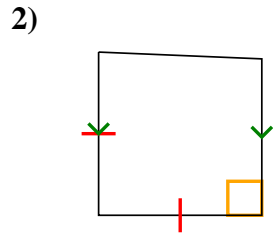
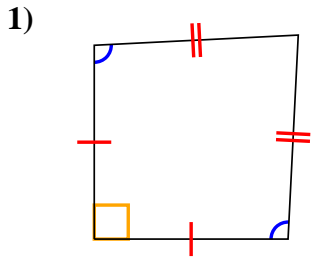
11. Q,T

12. Q,T



Stelle fest, um was es sich bei den gezeigten Formen handelt: Viereck, Drachenviereck, Trapez, Parallelogramm, Raute, Rechteck oder Quadrat (eine Figur kann mehrere Formen haben).

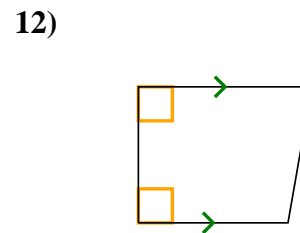
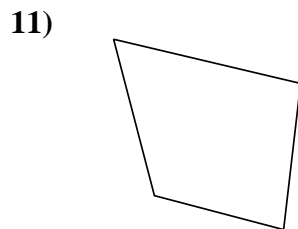
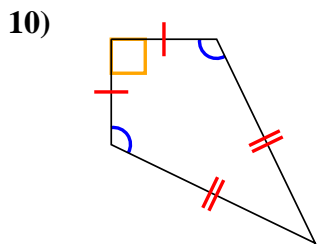
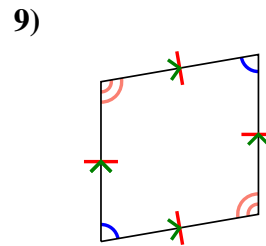
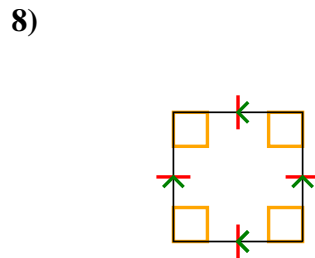
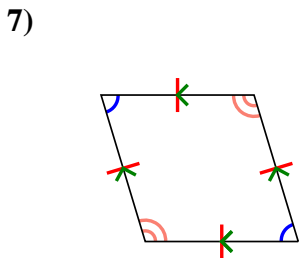
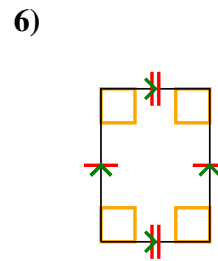
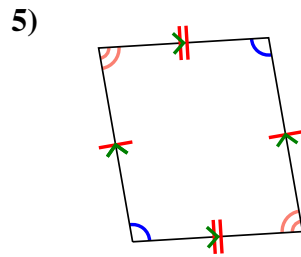
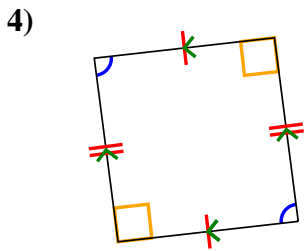
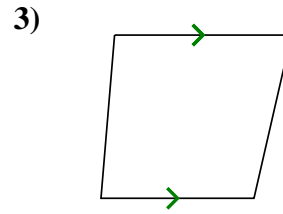
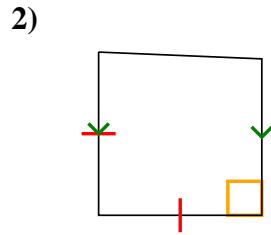
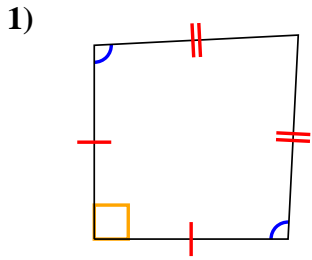
Antworten



1. _____
2. _____
3. _____
4. _____
5. _____
6. _____
7. _____
8. _____
9. _____
10. _____
11. _____
12. _____



Stelle fest, um was es sich bei den gezeigten Formen handelt: Viereck, Drachenviereck, Trapez, Parallelogramm, Raute, Rechteck oder Quadrat (eine Figur kann mehrere Formen haben).



Antworten

1. Q,K

2. Q,T

3. Q,T

4. Q,P

5. Q,P

6. Q,P,R

7. Q,P,H

8. Q,P,H,R,S

9. Q,P,H

10. Q,K

11. Q

12. Q,T