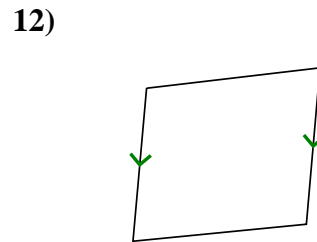
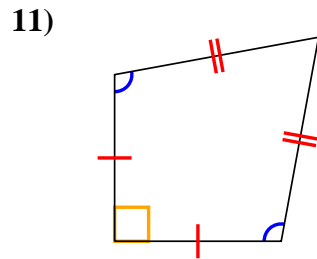
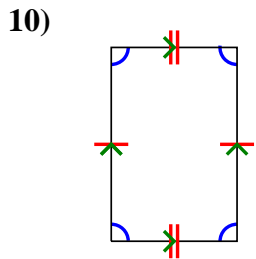
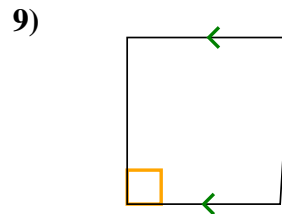
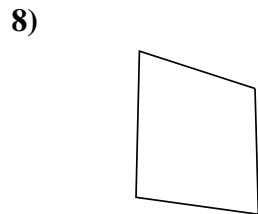
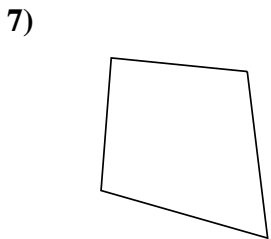
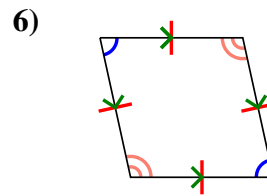
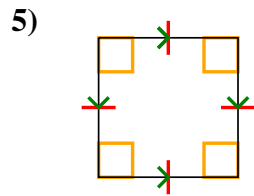
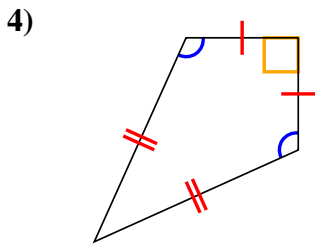
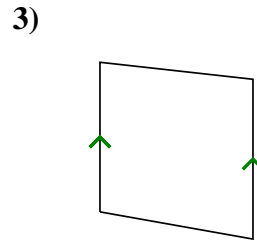
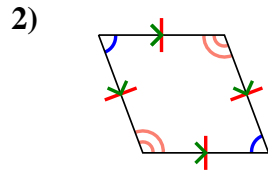
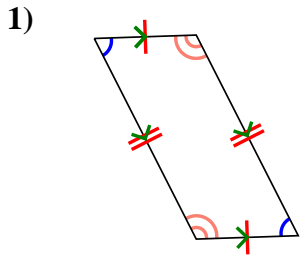




Stelle fest, um was es sich bei den gezeigten Formen handelt: Viereck, Drachenviereck, Trapez, Parallelogramm, Raute, Rechteck oder Quadrat (eine Figur kann mehrere Formen haben).

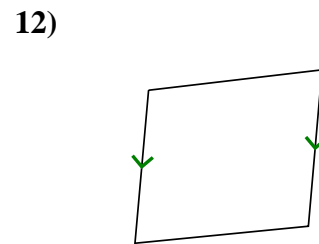
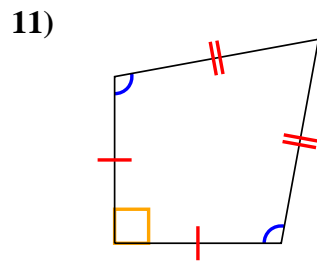
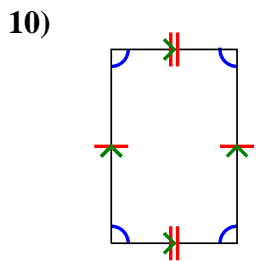
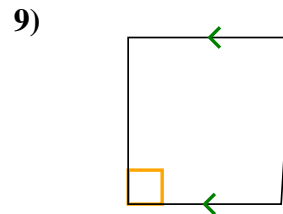
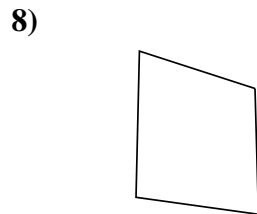
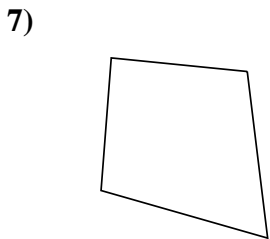
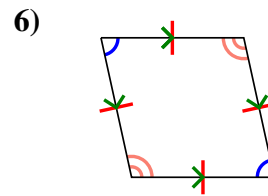
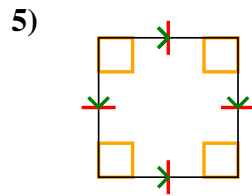
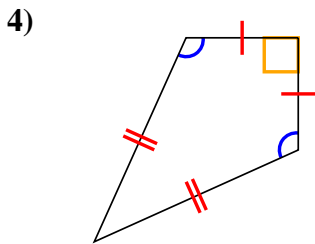
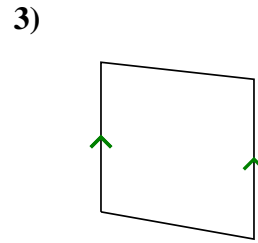
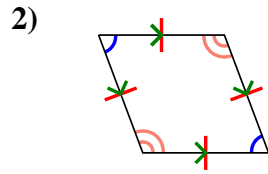
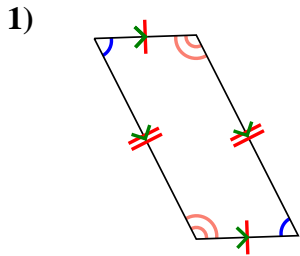
Antworten



- 1. _____
- 2. _____
- 3. _____
- 4. _____
- 5. _____
- 6. _____
- 7. _____
- 8. _____
- 9. _____
- 10. _____
- 11. _____
- 12. _____



Stelle fest, um was es sich bei den gezeigten Formen handelt: Viereck, Drachenviereck, Trapez, Parallelogramm, Raute, Rechteck oder Quadrat (eine Figur kann mehrere Formen haben).



Antworten

1. Q,P

2. Q,P,H

3. Q,T

4. Q,K

5. Q,P,H,R,S

6. Q,P,H

7. Q

8. Q

9. Q,T

10. Q,P

11. Q,K

12. Q,T