

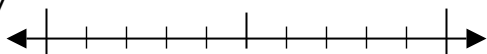


Benutze den Zahlenstrahl um jede Zahl auf die nächste Zehnerstelle zu runden.

Antworten

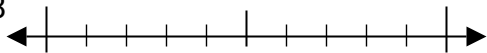
Bsp)

5.677

Bsp. **5.680**

1)

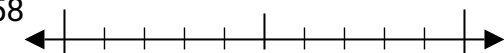
1.328



1. _____

2)

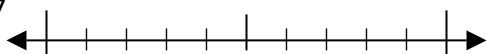
91.058



2. _____

3)

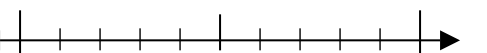
2.997



3. _____

4)

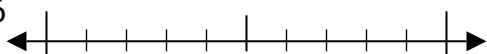
327



4. _____

5)

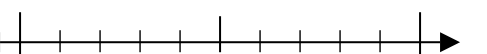
8.636



5. _____

6)

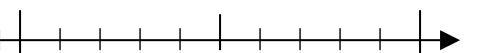
118



6. _____

7)

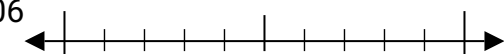
248



7. _____

8)


60.306



8. _____

9)

570

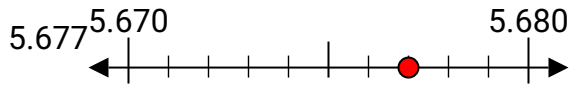


9. _____

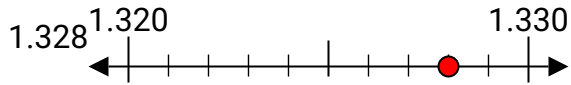


Benutze den Zahlenstrahl um jede Zahl auf die nächste Zehnerstelle zu runden.

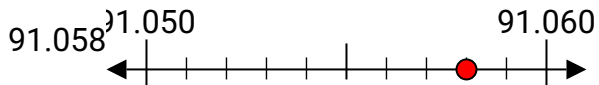
Bsp)



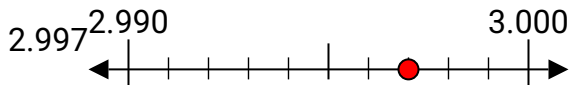
1)



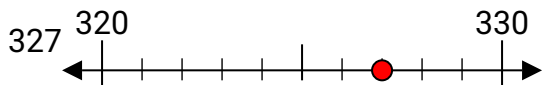
2)



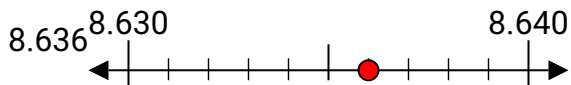
3)



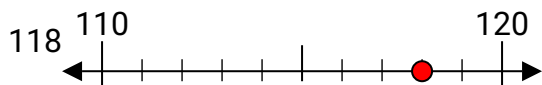
4)



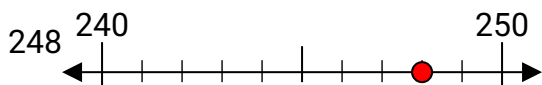
5)



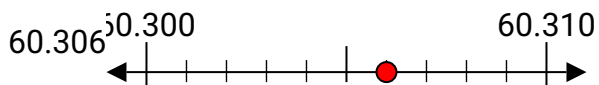
6)



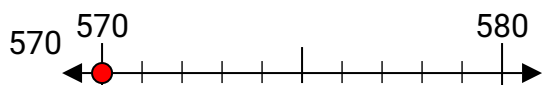
7)



8)



9)

**Antworten**Bsp. **5.680**1. **1.330**2. **91.060**3. **3.000**4. **330**5. **8.640**6. **120**7. **250**8. **60.310**9. **570**