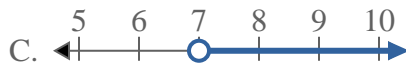
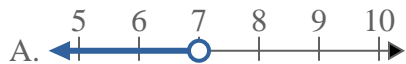




Löse jede Aufgabe.

Antworten

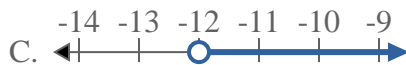
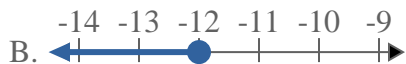
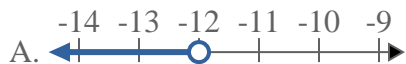
1) Bestimme, welche Möglichkeit $X > 7$ anzeigt.



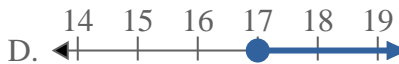
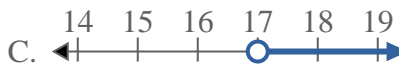
2) Bestimme, welche Möglichkeit $X \geq 12$ anzeigt.



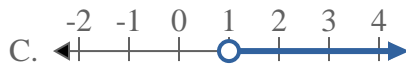
3) Bestimme, welche Möglichkeit $X \geq -12$ anzeigt.



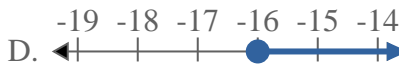
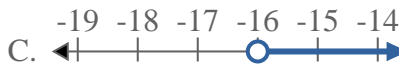
4) Bestimme, welche Möglichkeit $X < 17$ anzeigt.



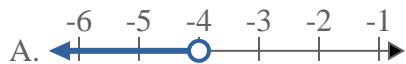
5) Bestimme, welche Möglichkeit $X \geq 1$ anzeigt.



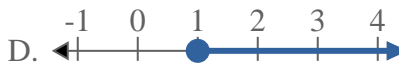
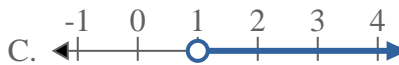
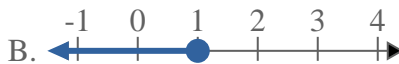
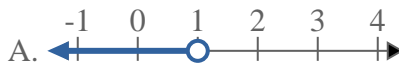
6) Bestimme, welche Möglichkeit $X \geq -16$ anzeigt.



7) Bestimme, welche Möglichkeit $X < -4$ anzeigt.



8) Bestimme, welche Möglichkeit $X < 1$ anzeigt.



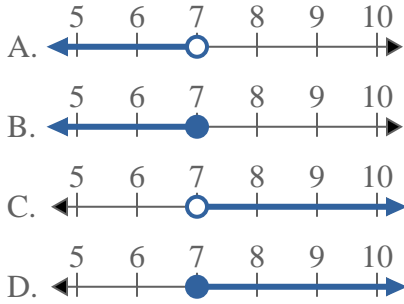
1. _____
2. _____
3. _____
4. _____
5. _____
6. _____
7. _____
8. _____



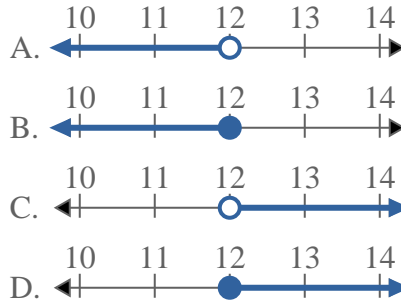
Löse jede Aufgabe.

Antworten

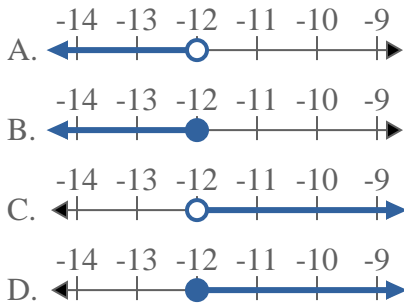
1) Bestimme, welche Möglichkeit $X > 7$ anzeigt.



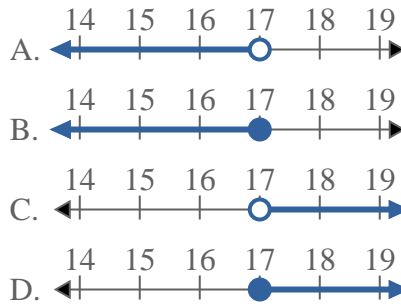
2) Bestimme, welche Möglichkeit $X \geq 12$ anzeigt.



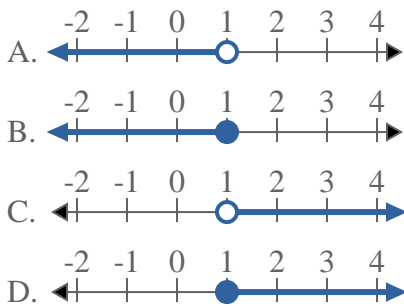
3) Bestimme, welche Möglichkeit $X \geq -12$ anzeigt.



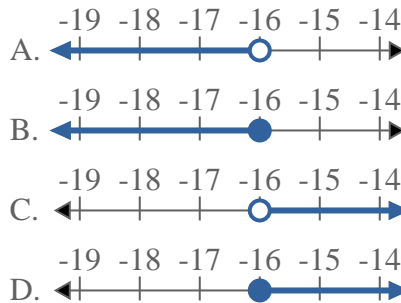
4) Bestimme, welche Möglichkeit $X < 17$ anzeigt.



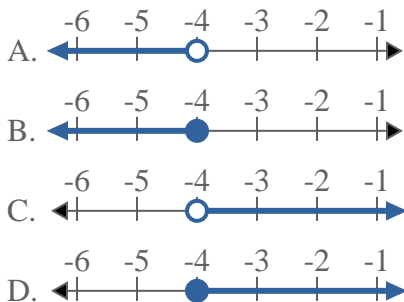
5) Bestimme, welche Möglichkeit $X \geq 1$ anzeigt.



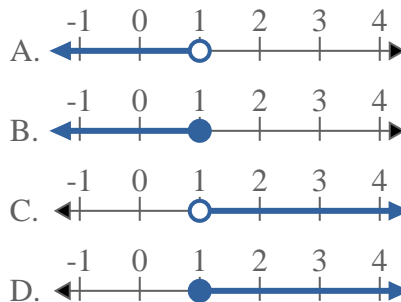
6) Bestimme, welche Möglichkeit $X \geq -16$ anzeigt.



7) Bestimme, welche Möglichkeit $X < -4$ anzeigt.



8) Bestimme, welche Möglichkeit $X < 1$ anzeigt.



- 1. **C**
- 2. **D**
- 3. **D**
- 4. **A**
- 5. **D**
- 6. **D**
- 7. **A**
- 8. **A**