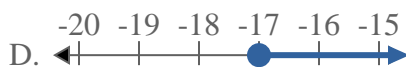
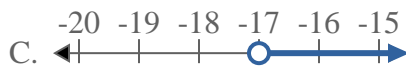




Löse jede Aufgabe.

Antworten


1) Bestimme, welche Möglichkeit $X < -17$ anzeigt.



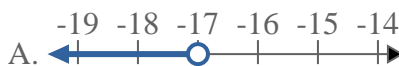
2) Bestimme, welche Möglichkeit $X \leq 20$ anzeigt.



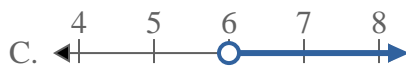
3) Bestimme, welche Möglichkeit $X \geq 12$ anzeigt.



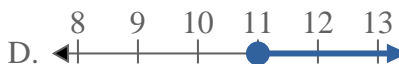
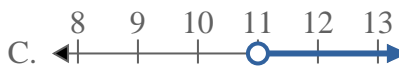
4) Bestimme, welche Möglichkeit $X \geq -17$ anzeigt.



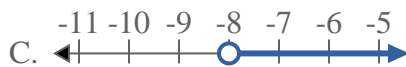
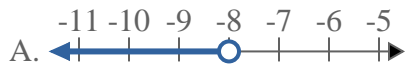
5) Bestimme, welche Möglichkeit $X \geq 6$ anzeigt.



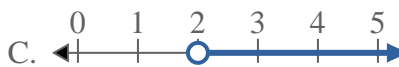
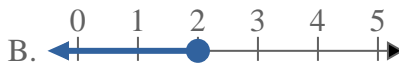
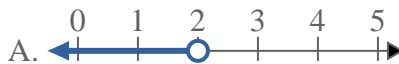
6) Bestimme, welche Möglichkeit $X \leq 11$ anzeigt.



7) Bestimme, welche Möglichkeit $X \leq -8$ anzeigt.



8) Bestimme, welche Möglichkeit $X > 2$ anzeigt.



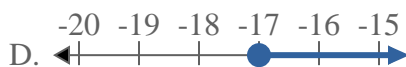
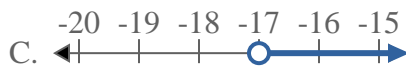
- 1. _____
- 2. _____
- 3. _____
- 4. _____
- 5. _____
- 6. _____
- 7. _____
- 8. _____




Löse jede Aufgabe.

Antworten


- 1) Bestimme, welche Möglichkeit $X < -17$ anzeigt.



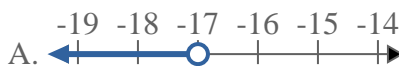
- 2) Bestimme, welche Möglichkeit $X \leq 20$ anzeigt.



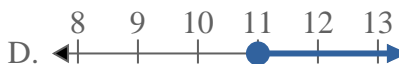
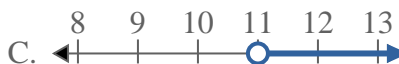
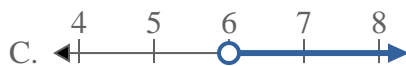
- 3) Bestimme, welche Möglichkeit $X \geq 12$ anzeigt.



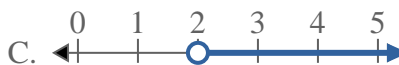
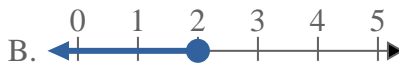
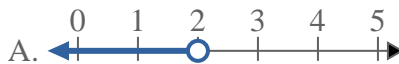
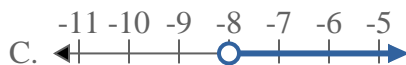
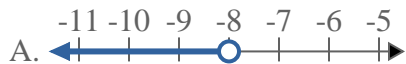
- 4) Bestimme, welche Möglichkeit $X \geq -17$ anzeigt.



- 5) Bestimme, welche Möglichkeit $X \geq 6$ anzeigt. 6) Bestimme, welche Möglichkeit $X \leq 11$ anzeigt.



- 7) Bestimme, welche Möglichkeit $X \leq -8$ anzeigt. 8) Bestimme, welche Möglichkeit $X > 2$ anzeigt.

1. **A**2. **B**3. **D**4. **D**5. **D**6. **B**7. **B**8. **C**