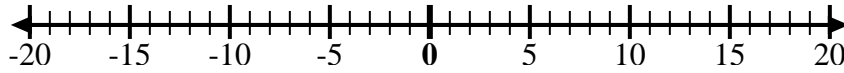
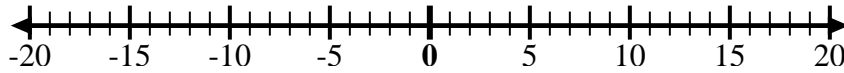
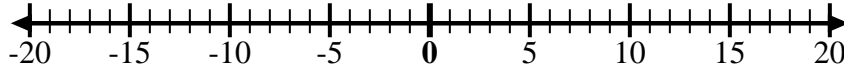




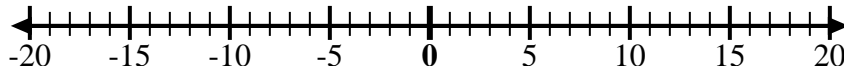
Verwenden Sie die Zahlenlinien, um jeden Ausdruck anzuzeigen und zu lösen.

**Antworten**Bsp) Start at 0 and  
add -2Bsp.  $0 + -2 = -2$ 1) Start at 0 and  
add -5

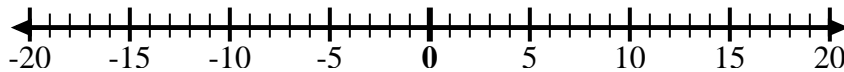
1. \_\_\_\_\_

2) Start at 0 and  
add 7

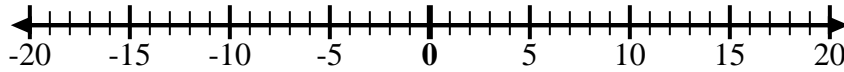
2. \_\_\_\_\_

3) Start at -6 and  
add 12

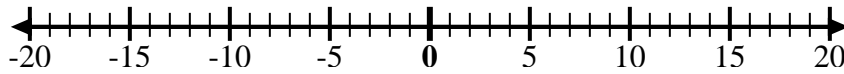
3. \_\_\_\_\_

4) Start at -2 and  
add -2

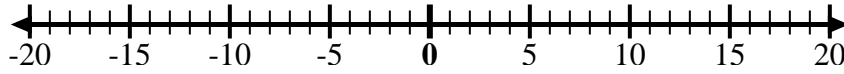
4. \_\_\_\_\_

5) Start at 2 and  
add -8

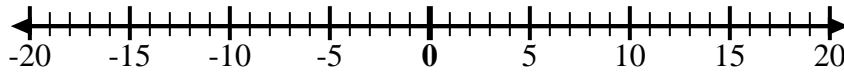
5. \_\_\_\_\_

6) Start at 3 and  
add -11

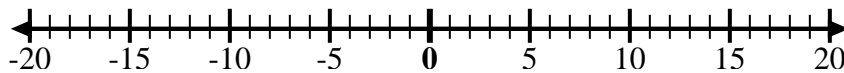
6. \_\_\_\_\_

7) Start at -7 and  
add 16

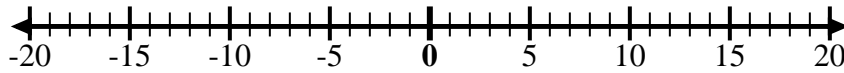
7. \_\_\_\_\_

8) Start at -9 and  
add 7

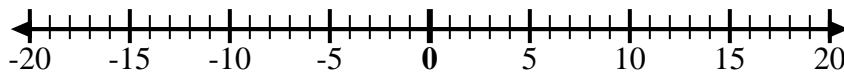
8. \_\_\_\_\_

9) Start at -8 and  
add 3

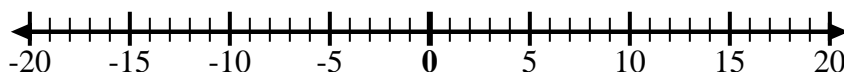
9. \_\_\_\_\_

10) Start at 5 and  
add -15

10. \_\_\_\_\_

11) Start at -8 and  
add 4

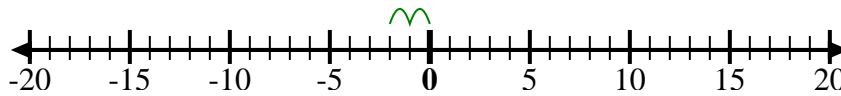
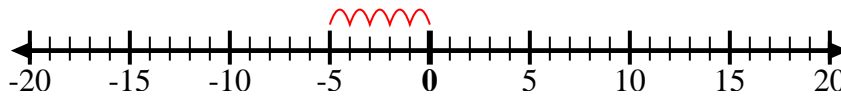
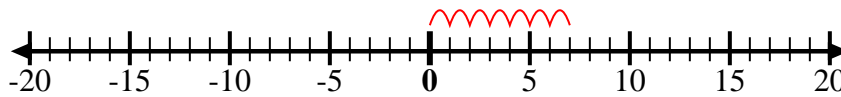
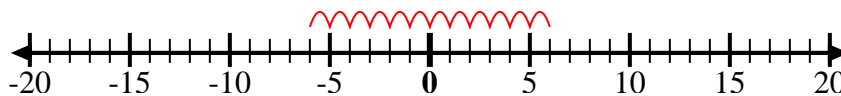
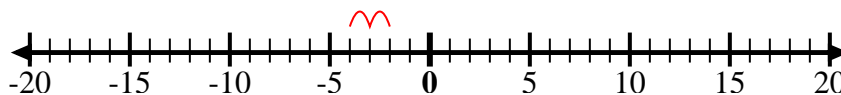
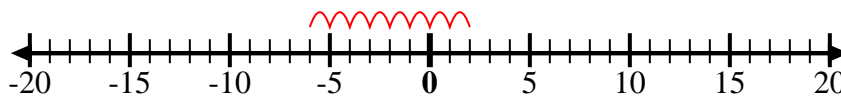
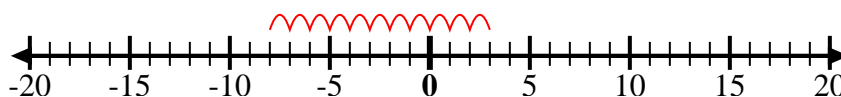
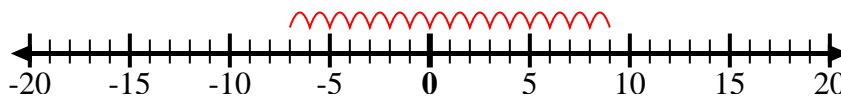
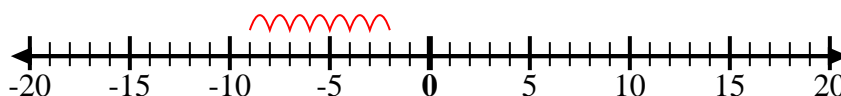
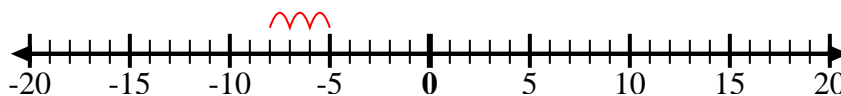
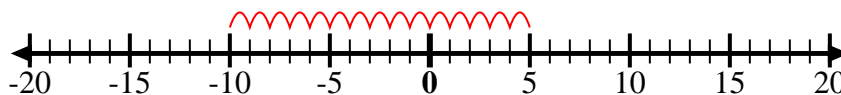
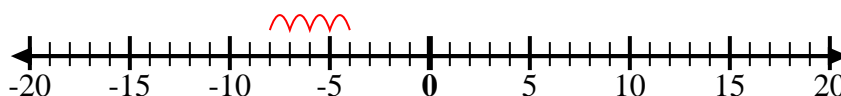
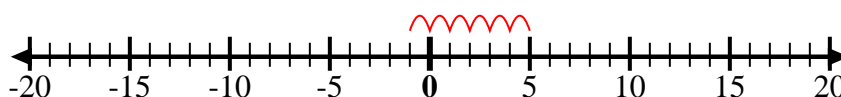
11. \_\_\_\_\_

12) Start at 5 and  
add -6

12. \_\_\_\_\_



Verwenden Sie die Zahlenlinien, um jeden Ausdruck anzuzeigen und zu lösen.

Bsp) Start at 0 and  
add -21) Start at 0 and  
add -52) Start at 0 and  
add 73) Start at -6 and  
add 124) Start at -2 and  
add -25) Start at 2 and  
add -86) Start at 3 and  
add -117) Start at -7 and  
add 168) Start at -9 and  
add 79) Start at -8 and  
add 310) Start at 5 and  
add -1511) Start at -8 and  
add 412) Start at 5 and  
add -6**Antworten**

Bsp.  $0 + -2 = -2$

1.  $0 + -5 = -5$

2.  $0 + 7 = 7$

3.  $-6 + 12 = 6$

4.  $-2 + -2 = -4$

5.  $2 + -8 = -6$

6.  $3 + -11 = -8$

7.  $-7 + 16 = 9$

8.  $-9 + 7 = -2$

9.  $-8 + 3 = -5$

10.  $5 + -15 = -10$

11.  $-8 + 4 = -4$

12.  $5 + -6 = -1$