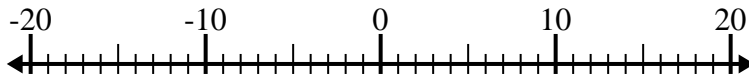




Löse jede Aufgabe. Benutze den Zahlenstrahl, falls du ihn brauchst.

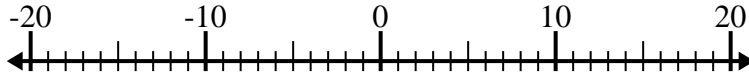
**Antworten**

1)  $(-12) - (-8) =$  \_\_\_\_\_



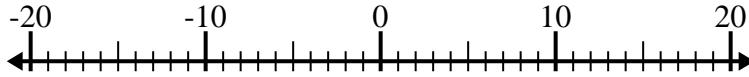
1. \_\_\_\_\_

2)  $(-7) + (-5) =$  \_\_\_\_\_



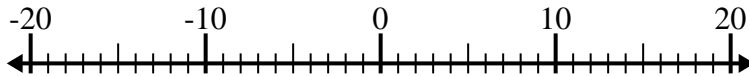
2. \_\_\_\_\_

3)  $13 + (-4) =$  \_\_\_\_\_



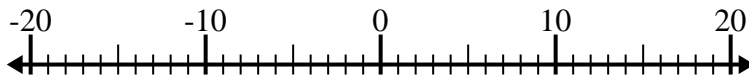
3. \_\_\_\_\_

4)  $(-6) + 7 =$  \_\_\_\_\_



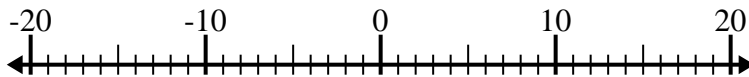
4. \_\_\_\_\_

5)  $9 + (-10) =$  \_\_\_\_\_



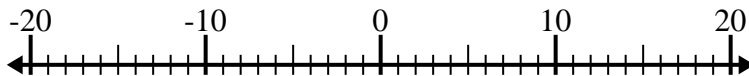
5. \_\_\_\_\_

6)  $(-2) + 4 =$  \_\_\_\_\_



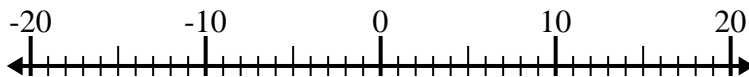
6. \_\_\_\_\_

7)  $(-6) - (-15) =$  \_\_\_\_\_



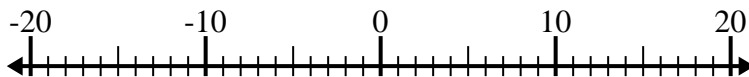
7. \_\_\_\_\_

8)  $(-11) - 3 =$  \_\_\_\_\_



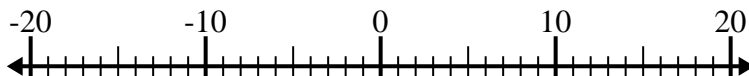
8. \_\_\_\_\_

9)  $(-5) - 2 =$  \_\_\_\_\_



9. \_\_\_\_\_

10)  $11 - (-4) =$  \_\_\_\_\_



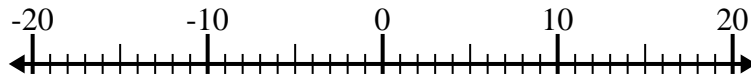
10. \_\_\_\_\_



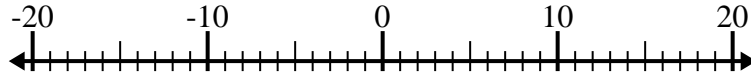
Löse jede Aufgabe. Benutze den Zahlenstrahl, falls du ihn brauchst.

**Antworten**

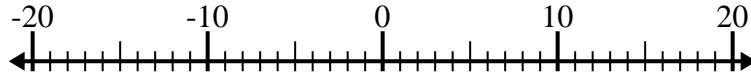
1)  $(-12) - (-8) = \underline{-4}$

1. **-4**

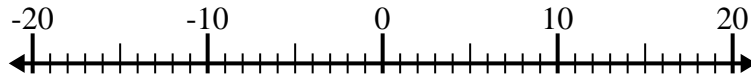
2)  $(-7) + (-5) = \underline{-12}$

2. **-12**

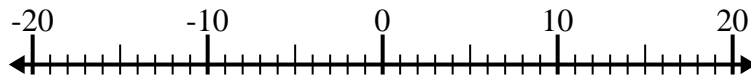
3)  $13 + (-4) = \underline{9}$

3. **9**

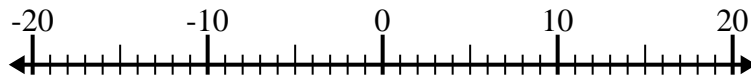
4)  $(-6) + 7 = \underline{1}$

4. **1**

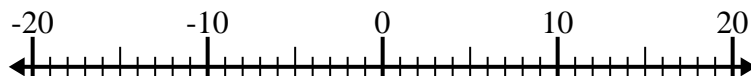
5)  $9 + (-10) = \underline{-1}$

5. **-1**

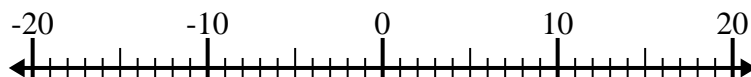
6)  $(-2) + 4 = \underline{2}$

6. **2**

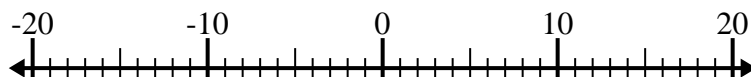
7)  $(-6) - (-15) = \underline{9}$

7. **9**

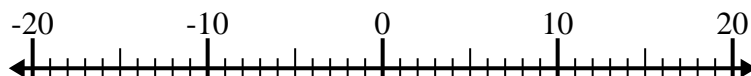
8)  $(-11) - 3 = \underline{-14}$

8. **-14**

9)  $(-5) - 2 = \underline{-7}$

9. **-7**

10)  $11 - (-4) = \underline{15}$

10. **15**