








Schreibe jede Anordnung als eine Multiplikationsaufgabe um und löse sie.

**Antworten**



Bsp. 7 • 7 = 49

1. 8 • 6 = 48

2. 6 • 8 = 48

3. 5 • 2 = 10

4. 10 • 8 = 80

5. 8 • 2 = 16

6. 9 • 10 = 90

7. 3 • 8 = 24

8. 8 • 9 = 72

9. 3 • 9 = 27

10. 9 • 9 = 81

11. 6 • 4 = 24

