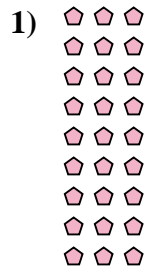





Schreibe jede Anordnung als eine Multiplikationsaufgabe um und löse sie.

Antworten



Bsp. 7 • 9 = 63

1. _____

2. _____

3. _____

4. _____

5. _____

6. _____




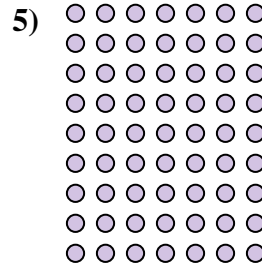


7. _____

8. _____

9. _____

10. _____

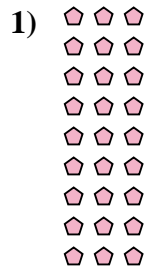

11. _____





Schreibe jede Anordnung als eine Multiplikationsaufgabe um und löse sie.

Antworten



Bsp. 7 • 9 = 63

1. 9 • 3 = 27

2. 6 • 2 = 12

3. 9 • 4 = 36

4. 6 • 5 = 30

5. 9 • 7 = 63

6. 6 • 10 = 60

7. 7 • 6 = 42

8. 4 • 10 = 40

9. 5 • 6 = 30

10. 2 • 3 = 6

11. 6 • 6 = 36

