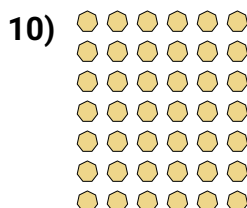
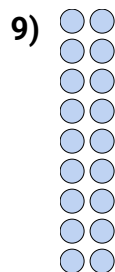

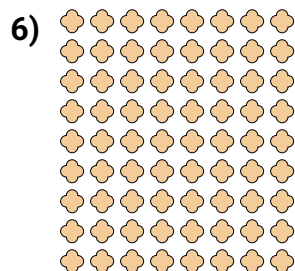



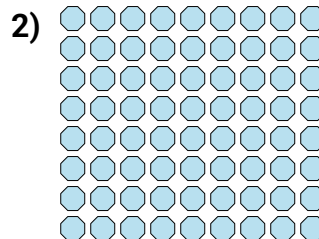
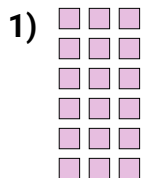


Schreibe jede Anordnung als eine Multiplikationsaufgabe um und löse sie.

Antworten



Bsp. $9 \cdot 10 = 90$

1. $6 \cdot 3 = 18$

2. $8 \cdot 9 = 72$

3. $6 \cdot 8 = 48$

4. $4 \cdot 7 = 28$

5. $8 \cdot 8 = 64$

6. $9 \cdot 8 = 72$

7. $4 \cdot 5 = 20$

8. $9 \cdot 6 = 54$

9 $9 \cdot 2 = 18$

10 $7 \cdot 6 = 42$

11 $2 \cdot 9 = 18$