



Stelle fest, wie man die gezeigten Gruppen als eine Multiplikationsaufgabe ausdrücken könnte.

Antworten

Bsp)

Bsp. **10•10=100**

1. _____

2. _____

3. _____

4. _____

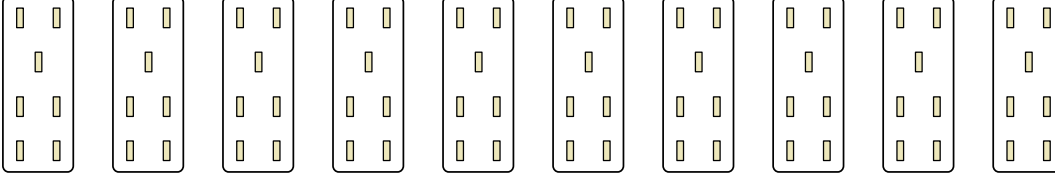
5. _____

6. _____

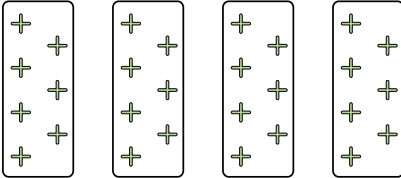
7. _____

8. _____


1)



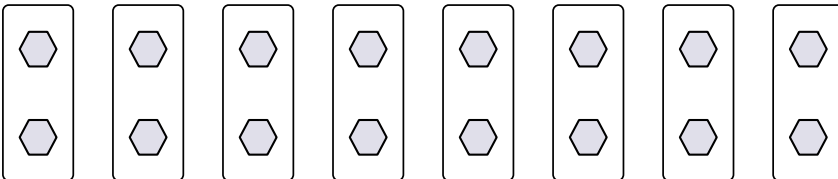
2)



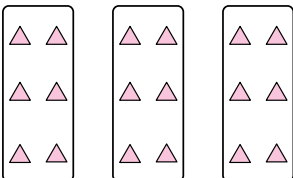
3)



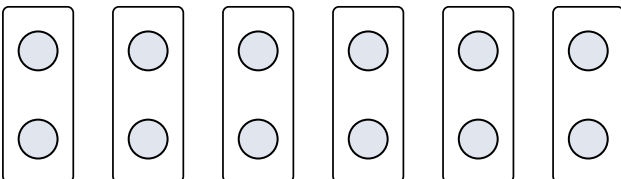
4)



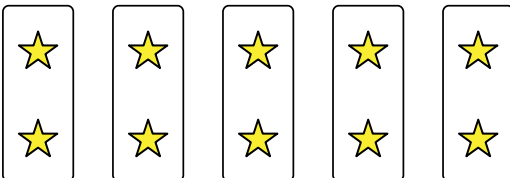
5)




6)



7)



8)






Stelle fest, wie man die gezeigten Gruppen als eine Multiplikationsaufgabe ausdrücken könnte.

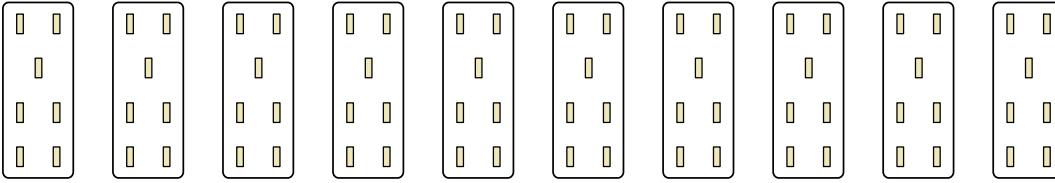
Antworten

Bsp)



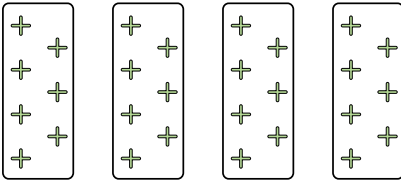
Bsp. $10 \cdot 10 = 100$

1)



1. $10 \cdot 7 = 70$

2)



2. $4 \cdot 7 = 28$

3. $10 \cdot 6 = 60$

4. $8 \cdot 2 = 16$


5. $3 \cdot 6 = 18$

6. $6 \cdot 2 = 12$

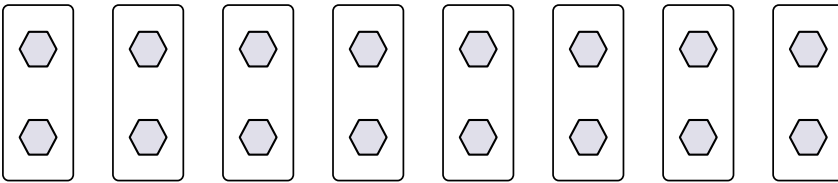
7. $5 \cdot 2 = 10$

8. $5 \cdot 7 = 35$

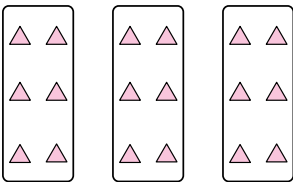
3)



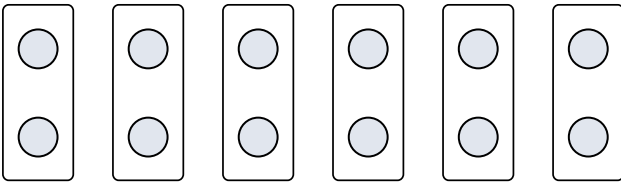
4)



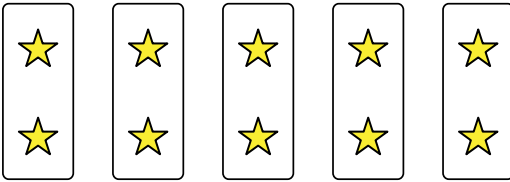
5)



6)



7)



8)

